

Haryana Staff Selection Commission

Notations :

- 1.Options shown in green color and with ✓ icon are correct.
- 2.Options shown in red color and with ✗ icon are incorrect.

Subject Name:	CAT 3 Steno Typist English and Hindi CBT Exam
Total Marks:	200
Display Marks:	Yes
Calculator:	None
Magnifying Glass Required?:	No
Ruler Required?:	No
Eraser Required?:	No
Scratch Pad Required?:	No
Rough Sketch/Notepad Required?:	No
Protractor Required?:	No

CAT 3 Steno Typist English and Hindi CBT Exam

Group Marks: 200

CAT 3 Steno Typist English and Hindi CBT Exam

Section Marks:	200
Display Number Panel:	Yes
Group All Questions:	No

Question Number : 1 Question Id : 260269501 Display Question Number : Yes Single Line Question Option : No Option Orientation : Vertical

Who was the Wali-e-Mewat at the time of battle of Khanwa?

Options :

1. ✗ Alawal Khan
2. ✓ Hasan Khan
3. ✗ Nahar Khan
4. ✗ Zakariya Khan

Question Number : 1 Question Id : 260269501 Display Question Number : Yes Single Line Question Option : No Option Orientation : Vertical

खानवा की लड़ाई के समय बली-ए-मेवात कौन था?

Options :

1. ✘ अलवल खान
2. ✔ हसन खान
3. ✘ नाहर खान
4. ✘ ज़करिया खान

Question Number : 2 Question Id : 260269502 Display Question Number : Yes Single Line Question Option : No Option Orientation : Vertical

The main armies of Hemu and Akbar met in the field of Panipat on:

Options :

1. ✘ 5 September 1556
2. ✘ 5 October 1556
3. ✔ 5 November 1556
4. ✘ 5 December 1526

Question Number : 2 Question Id : 260269502 Display Question Number : Yes Single Line Question Option : No Option Orientation : Vertical

हेमू और अकबर की मुख्य सेनाएं पानीपत के युद्ध क्षेत्र में कब लड़ी थीं?

Options :

1. ✘ 5 सितम्बर 1556
2. ✘ 5 अक्टूबर 1556
3. ✔ 5 नवंबर 1556
4. ✘ 5 दिसंबर 1526

Question Number : 3 Question Id : 260269503 Display Question Number : Yes Single Line Question Option : No Option Orientation : Vertical

Birbhan Sadh was the teacher of which of the following sects?

Options :

1. ✘ Kabirpanthi
2. ✘ Raidasi
3. ✔ Satnamis
4. ✘ Varkari

Question Number : 3 Question Id : 260269503 Display Question Number : Yes Single Line Question Option : No Option Orientation : Vertical

बीरभान साध निम्नलिखित में से किस संप्रदाय के शिक्षक थे?

Options :

1. ✘ कबीरपंथी
2. ✘ रैदासी
3. ✔ सतनामी
4. ✘ वारकरी

Question Number : 4 Question Id : 260269504 Display Question Number : Yes Single Line Question Option : No Option Orientation : Vertical

The Satnami rebellion at Narnaul took place under the reign of:

Options :

1. ✘ Akbar
2. ✘ Jahangir
3. ✘ Shahjahan
4. ✔ Aurangzeb

Question Number : 4 Question Id : 260269504 Display Question Number : Yes Single Line Question Option : No Option Orientation : Vertical

नारनौल में सतनामी विद्रोह किसके शासनकाल में हुआ था?

Options :

1. ✘ अकबर

2. ✘ जहांगीर
3. ✘ शाहजहां
4. ✔ औरंगज़ेब

Question Number : 5 Question Id : 260269505 Display Question Number : Yes Single Line Question Option : No Option Orientation : Vertical

The Haryana Government signed an agreement with _____ to install point-of-sale (POS) machines at 3,000 government offices free of cost.

Options :

1. ✘ HDFC Bank
2. ✘ ICICI Bank
3. ✘ Yes Bank
4. ✔ State Bank of India

Question Number : 5 Question Id : 260269505 Display Question Number : Yes Single Line Question Option : No Option Orientation : Vertical

हरियाणा सरकार ने 3,000 सरकारी कार्यालयों में निःशुल्क पॉइंट-ऑफ-सेल (पीओएस) मशीनों को स्थापित करने के लिए _____ के साथ एक समझौते पर हस्ताक्षर किए हैं।

Options :

1. ✘ एचडीएफसी बैंक
2. ✘ आईसीआईसीआई बैंक
3. ✘ यस बैंक
4. ✔ भारतीय स्टेट बैंक

Question Number : 6 Question Id : 260269506 Display Question Number : Yes Single Line Question Option : No Option Orientation : Vertical

Before its recent name change, Gurugram was known by the name:

Options :

1. ✘ Karnal
2. ✔ Gurgaon

3. ✘ Kurukshetra

4. ✘ Faridabad

Question Number : 6 Question Id : 260269506 Display Question Number : Yes Single Line Question Option : No Option Orientation : Vertical

हाल ही नाम परिवर्तन से पहले, गुरुग्राम को किस नाम से जाना जाता था?

Options :

1. ✘ करनाल

2. ✔ गुडगांव

3. ✘ कुरुक्षेत्र

4. ✘ फरीदाबाद

Question Number : 7 Question Id : 260269507 Display Question Number : Yes Single Line Question Option : No Option Orientation : Vertical

A horticulture university is being established in which district of Haryana?

Options :

1. ✔ Karnal

2. ✘ Sonipat

3. ✘ Gurugram

4. ✘ Faridabad

Question Number : 7 Question Id : 260269507 Display Question Number : Yes Single Line Question Option : No Option Orientation : Vertical

हरियाणा में कौन से जिले में बागवानी विश्वविद्यालय की स्थापना की जा रही है?

Options :

1. ✔ करनाल

2. ✘ सोनीपत

3. ✘ गुरुग्राम

4. ✘ फरीदाबाद

Question Number : 8 Question Id : 260269508 Display Question Number : Yes Single Line Question Option : No Option Orientation : Vertical

Haryana was the _____ state in the country to adopt the Mahila Police Volunteer Initiative.

Options :

1. ✘ 4th

2. ✘ 2nd

3. ✔ 1st

4. ✘ 3rd

Question Number : 8 Question Id : 260269508 Display Question Number : Yes Single Line Question Option : No Option Orientation : Vertical

हरियाणा 'महिला पुलिस स्वयंसेवी पहल' को अपनाने वाला देश में _____ राज्य था।

Options :

1. ✘ चौथा

2. ✘ दूसरा

3. ✔ पहला

4. ✘ तीसरा

Question Number : 9 Question Id : 260269509 Display Question Number : Yes Single Line Question Option : No Option Orientation : Vertical

Who among the following is the writer of the drama/story "Phir Wahi Raat"?

Options :

1. ✘ Hanumant Rai Neerav

2. ✘ Urmi Krishna

3. ✔ Sukhchain Singh Bhandari

4. ✘ Shiv Kumar Gautam

Question Number : 9 Question Id : 260269509 Display Question Number : Yes Single Line Question Option : No Option Orientation : Vertical

नाटक/ कहानी "फिर वही रात" के लेखक/ लेखिका निम्नलिखित में से कौन हैं?

Options :

1. ✘ हनुमंत राय नीरव
2. ✘ उर्मि कृष्णा
3. ✔ सुखचैन सिंह भंडारी
4. ✘ शिव कुमार गौतम

Question Number : 10 Question Id : 260269510 Display Question Number : Yes Single Line Question Option : No Option Orientation : Vertical

Who among the following is the author/ authoress of the story 'Pavitra Jhuth'?

Options :

1. ✔ Shakuntala Brijmohan
2. ✘ Madhav Kaushik
3. ✘ Sansaar Chandra
4. ✘ Raghuveer Singh

Question Number : 10 Question Id : 260269510 Display Question Number : Yes Single Line Question Option : No Option Orientation : Vertical

कहानी 'पवित्र झूठ' के लेखक/ लेखिका निम्नलिखित में से कौन हैं?

Options :

1. ✔ शकुंतला बृजमोहन
2. ✘ माधव कौशिक
3. ✘ संसार चंद्र
4. ✘ रघुवीर सिंह

Question Number : 11 Question Id : 260269511 Display Question Number : Yes Single Line Question Option : No Option Orientation : Vertical

Who among the following is the author of the story "Mutthi Me Band Aasmaan"?

Options :

1. ✘ Keshav Chandra Wadhavan
2. ✘ Kamlesh Sharma
3. ✘ Sanjay Jain
4. ✔ Anant Sharma Anant

Question Number : 11 Question Id : 260269511 Display Question Number : Yes Single Line Question Option : No Option Orientation : Vertical

कहानी 'मुठ्ठी में बंद आसमान' के लेखक निम्नलिखित में से कौन हैं?

Options :

1. ✘ केशव चंद्र वाधवन
2. ✘ कमलेश शर्मा
3. ✘ संजय जैन
4. ✔ अनंत शर्मा अनंत

Question Number : 12 Question Id : 260269512 Display Question Number : Yes Single Line Question Option : No Option Orientation : Vertical

What is the women literacy rate in Haryana as per 2011 census?

Options :

1. ✘ 61.5%
2. ✘ 63.2%
3. ✔ 66.8%
4. ✘ 68.4%

Question Number : 12 Question Id : 260269512 Display Question Number : Yes Single Line Question Option : No Option Orientation : Vertical

2011 की जनगणना के अनुसार हरियाणा में महिला साक्षरता दर क्या है?

Options :

1. ✘ 61.5%

2. ✘ 63.2%

3. ✔ 66.8%

4. ✘ 68.4%

Question Number : 13 Question Id : 260269513 Display Question Number : Yes Single Line Question Option : No Option Orientation : Vertical

The total number of primary schools (2011-12) in Haryana is:

Options :

1. ✔ 13,111

2. ✘ 14,563

3. ✘ 15,348

4. ✘ 16,267

Question Number : 13 Question Id : 260269513 Display Question Number : Yes Single Line Question Option : No Option Orientation : Vertical

हरियाणा में प्राथमिक विद्यालयों (2011-12) की कुल संख्या है:

Options :

1. ✔ 13,111

2. ✘ 14,563

3. ✘ 15,348

4. ✘ 16,267

Question Number : 14 Question Id : 260269514 Display Question Number : Yes Single Line Question Option : No Option Orientation : Vertical

According to the Government of Haryana as of 2011, the gross state domestic product at current prices was _____ rupees.

Options :

1. ✘ 205482.32

2. ✔ 257792.62

3. ✘ 278791.62

4. ✘ 296543.62

Question Number : 14 Question Id : 260269514 Display Question Number : Yes Single Line Question Option : No Option Orientation : Vertical

हरियाणा सरकार के अनुसार 2011 में, मौजूदा कीमतों पर सकल राज्य घरेलू उत्पाद _____ रुपये था।

Options :

1. ✘ 205482.32

2. ✔ 257792.62

3. ✘ 278791.62

4. ✘ 296543.62

Question Number : 15 Question Id : 260269515 Display Question Number : Yes Single Line Question Option : No Option Orientation : Vertical

The present Chief Minister of Haryana, Manohar Lal Khattar has been elected from the _____ seat.

Options :

1. ✘ Mahendergarh

2. ✘ Rohtak

3. ✔ Karnal

4. ✘ Sirsa

Question Number : 15 Question Id : 260269515 Display Question Number : Yes Single Line Question Option : No Option Orientation : Vertical

हरियाणा के वर्तमान मुख्यमंत्री मनोहर लाल खट्टर _____ सीट से चुने गए हैं।

Options :

1. ✘ महेन्द्रगढ़

2. ✘ रोहतक

3. ✔ करनाल

4. ✘ सिरसा

Question Number : 16 Question Id : 260269516 Display Question Number : Yes Single Line Question Option : No Option Orientation : Vertical

How many seats were won by the BSP in the 2014 Haryana Assembly Elections?

Options :

1. ✓ 1
2. ✗ 2
3. ✗ 3
4. ✗ 4

Question Number : 16 Question Id : 260269516 Display Question Number : Yes Single Line Question Option : No Option Orientation : Vertical

2014 के हरियाणा विधानसभा चुनावों में बसपा (BSP) ने कितनी सीटें जीतीं?

Options :

1. ✓ 1
2. ✗ 2
3. ✗ 3
4. ✗ 4

Question Number : 17 Question Id : 260269517 Display Question Number : Yes Single Line Question Option : No Option Orientation : Vertical

As on March 31, 2011 there were two municipalities in the districts of Haryana at Panipat and _____.

Options :

1. ✗ Sonipat
2. ✓ Samalkha
3. ✗ Sirsa
4. ✗ Kurukshetra

Question Number : 17 Question Id : 260269517 Display Question Number : Yes Single Line Question Option : No Option Orientation : Vertical

31 मार्च 2011 के अनुसार, हरियाणा के पानीपत और _____ जिलों में दो नगरपालिकाएँ थीं।

Options :

1. ✗ सोनीपत

2. ✓ समालखा

3. ✗ सिरसा

4. ✗ कुरुक्षेत्र

Question Number : 18 Question Id : 260269518 Display Question Number : Yes Single Line Question Option : No Option Orientation : Vertical

As of 11 February 2014, the total voter strength of Haryana was _____.

Options :

1. ✗ 14,594,427

2. ✓ 15,594,427

3. ✗ 16,594,427

4. ✗ 17,594,427

Question Number : 18 Question Id : 260269518 Display Question Number : Yes Single Line Question Option : No Option Orientation : Vertical

11 फरवरी 2014 तक हरियाणा के कुल मतदाताओं की संख्या _____ थी।

Options :

1. ✗ 14,594,427

2. ✓ 15,594,427

3. ✗ 16,594,427

4. ✗ 17,594,427

Question Number : 19 Question Id : 260269519 Display Question Number : Yes Single Line Question Option : No Option Orientation : Vertical

'Harit Haryana Vishal Haryana' was a _____ campaign launched by the Government of Haryana in July 2017.

Options :

1. ✓ plantation

2. ✗ cleanliness

3. ✗ digital

4. ✘ biodiversity

Question Number : 19 Question Id : 260269519 Display Question Number : Yes Single Line Question Option : No Option Orientation : Vertical

‘हरित हरियाणा विशाल हरियाणा’ जुलाई 2017 में हरियाणा सरकार द्वारा शुरू किया गया एक _____ अभियान था।

Options :

1. ✔ वृक्षारोपण
2. ✘ स्वच्छता
3. ✘ डिजिटल
4. ✘ जैव विविधता

Question Number : 20 Question Id : 260269520 Display Question Number : Yes Single Line Question Option : No Option Orientation : Vertical

HEMS stands for:

Haryana _____ Management Society

Options :

1. ✔ Environmental
2. ✘ E-waste
3. ✘ Eco-agro
4. ✘ Ecological

Question Number : 20 Question Id : 260269520 Display Question Number : Yes Single Line Question Option : No Option Orientation : Vertical

एचईएमएस (HEMS) का अर्थ है:

हरियाणा _____ मैनेजमेंट सोसाइटी

Options :

1. ✔ एन्वाइरमेंट
2. ✘ ई-वेस्ट
3. ✘ ईको-एग्रो

4. ✘ इकोलॉजिकल

Question Number : 21 Question Id : 260269521 Display Question Number : Yes Single Line Question Option : No Option Orientation : Vertical

_____ river is NOT a major river flowing in Haryana.

Options :

1. ✔ Chenab

2. ✘ Yamuna

3. ✘ Ghaggar

4. ✘ Sahibi

Question Number : 21 Question Id : 260269521 Display Question Number : Yes Single Line Question Option : No Option Orientation : Vertical

_____ नदी हरियाणा में बहने वाली मुख्य नदी नहीं है।

Options :

1. ✔ चिनाब

2. ✘ यमुना

3. ✘ घग्गर

4. ✘ साहिबी

Question Number : 22 Question Id : 260269522 Display Question Number : Yes Single Line Question Option : No Option Orientation : Vertical

The Varaha Tirtha in Jind is dedicated to:

Options :

1. ✔ Lord Vishnu

2. ✘ Lord Shiva

3. ✘ Lord Brahma

4. ✘ Goddess Saraswati

Question Number : 22 Question Id : 260269522 Display Question Number : Yes Single Line Question Option : No Option Orientation : Vertical

जींद में वराहा तीर्थ किसको समर्पित है?

Options :

1. ✓ भगवान विष्णु
2. ✗ भगवान शिव
3. ✗ भगवान ब्रह्मा
4. ✗ देवी सरस्वती

Question Number : 23 Question Id : 260269523 Display Question Number : Yes Single Line Question Option : No Option Orientation : Vertical

The Loharu Fort is situated in which district of Haryana?

Options :

1. ✗ Karnal
2. ✗ Kaithal
3. ✗ Palwal
4. ✓ Bhiwani

Question Number : 23 Question Id : 260269523 Display Question Number : Yes Single Line Question Option : No Option Orientation : Vertical

लोहारू किला हरियाणा के कौन से जिले में स्थित है?

Options :

1. ✗ करनाल
2. ✗ कैथल
3. ✗ पलवल
4. ✓ भिवानी

Question Number : 24 Question Id : 260269524 Display Question Number : Yes Single Line Question Option : No Option Orientation : Vertical

Safidon city in the Jind district of Haryana is associated with the:

Options :

1. ✗ arrow bed of Bhisma

2. ✘ death of Shri Krishna
3. ✘ death of Karna
4. ✔ snake sacrifice of Janamejaya, son of Parikshit

Question Number : 24 Question Id : 260269524 Display Question Number : Yes Single Line Question Option : No Option Orientation : Vertical

हरियाणा के जींद जिले का सफीदों शहर किससे सम्बंधित है?

Options :

1. ✘ भीष्म की शरशय्या
2. ✘ श्री कृष्ण जी का निधन
3. ✘ कर्ण का निधन
4. ✔ परीक्षित के पुत्र, जनमेजय का सर्प यज्ञ

Question Number : 25 Question Id : 260269525 Display Question Number : Yes Single Line Question Option : No Option Orientation : Vertical

According to a local tradition, Ekahamsa Tirtha in Jind is associated with Lord _____ who concealed himself here.

Options :

1. ✘ Shiva
2. ✘ Rama
3. ✔ Krishna
4. ✘ Brahma

Question Number : 25 Question Id : 260269525 Display Question Number : Yes Single Line Question Option : No Option Orientation : Vertical

स्थानीय परंपरा के अनुसार, जींद में इकाहमसा तीर्थ भगवान _____ से सम्बंधित है, जो स्वयं को यहां प्रच्छादित रखते थे।

Options :

1. ✘ शिव
2. ✘ राम
3. ✔ कृष्ण

4. ✘ ब्रह्मा

Question Number : 26 Question Id : 260269526 Display Question Number : Yes Single Line Question Option : No Option Orientation : Vertical

According to Pitman, how many broad typical sounds are present in English language?

Options :

1. ✘ 26

2. ✔ 36

3. ✘ 46

4. ✘ 56

Question Number : 26 Question Id : 260269526 Display Question Number : Yes Single Line Question Option : No Option Orientation : Vertical

According to Pitman, how many broad typical sounds are present in English language?

Options :

1. ✘ 26

2. ✔ 36

3. ✘ 46

4. ✘ 56

Question Number : 27 Question Id : 260269527 Display Question Number : Yes Single Line Question Option : No Option Orientation : Vertical

What is the alternative sign for consonant s/z?

Options :

1. ✔ Small circle

2. ✘ Big circle

3. ✘ Loop

4. ✘ Hook

Question Number : 27 Question Id : 260269527 Display Question Number : Yes Single Line Question Option : No Option Orientation : Vertical

What is the alternative sign for consonant s/z?

Options :

1. ✓ Small circle
2. ✗ Big circle
3. ✗ Loop
4. ✗ Hook

Question Number : 28 Question Id : 260269528 Display Question Number : Yes Single Line Question Option : No Option Orientation : Vertical

The termination shun is represented by:

Options :

1. ✗ Small hook
2. ✗ Circle
3. ✓ Large hook
4. ✗ Loop

Question Number : 28 Question Id : 260269528 Display Question Number : Yes Single Line Question Option : No Option Orientation : Vertical

The termination shun is represented by:

Options :

1. ✗ Small hook
2. ✗ Circle
3. ✓ Large hook
4. ✗ Loop

Question Number : 29 Question Id : 260269529 Display Question Number : Yes Single Line Question Option : No Option Orientation : Vertical

A grammalogue is a/an _____ occurring word.

Options :

1. ✘ infrequently
2. ✘ timely
3. ✘ varyingly
4. ✔ frequently

Question Number : 29 Question Id : 260269529 Display Question Number : Yes Single Line Question Option : No Option Orientation : Vertical

A grammalogue is a/an _____ occurring word.

Options :

1. ✘ infrequently
2. ✘ timely
3. ✘ varyingly
4. ✔ frequently

Question Number : 30 Question Id : 260269530 Display Question Number : Yes Single Line Question Option : No Option Orientation : Vertical

Which form of 'h' is used as an alternative to the stroke in the middle of a word?

Options :

1. ✘ Tick h
2. ✘ Upward h
3. ✘ Downward h
4. ✔ Dot h

Question Number : 30 Question Id : 260269530 Display Question Number : Yes Single Line Question Option : No Option Orientation : Vertical

Which form of 'h' is used as an alternative to the stroke in the middle of a word?

Options :

1. ✘ Tick h
2. ✘ Upward h

3. ✘ Downward h

4. ✔ Dot h

Question Number : 31 Question Id : 260269531 Display Question Number : Yes Single Line Question Option : No Option Orientation : Vertical

When is the 'str' loop used?

Options :

1. ✘ Only initially

2. ✔ Only medially

3. ✘ Only finally

4. ✘ Cannot say

Question Number : 31 Question Id : 260269531 Display Question Number : Yes Single Line Question Option : No Option Orientation : Vertical

When is the 'str' loop used?

Options :

1. ✘ Only initially

2. ✔ Only medially

3. ✘ Only finally

4. ✘ Cannot say

Question Number : 32 Question Id : 260269532 Display Question Number : Yes Single Line Question Option : No Option Orientation : Vertical

Self is represented by disjointed _____

Options :

1. ✔ circle s

2. ✘ st loop

3. ✘ str loop

4. ✘ s-s circle

Question Number : 32 Question Id : 260269532 Display Question Number : Yes Single Line Question Option : No Option Orientation : Vertical

Self is represented by disjointed _____





Options :

- 1. ✓ circle s
- 2. ✗ st loop
- 3. ✗ str loop
- 4. ✗ s-s circle

Question Number : 33 Question Id : 260269533 Display Question Number : Yes Single Line Question Option : No Option Orientation : Vertical

Identify the correct outline for graphic.





Options :

- 1. ✗ 
- 2. ✓ 
- 3. ✗ 
- 4. ✗ 

Question Number : 33 Question Id : 260269533 Display Question Number : Yes Single Line Question Option : No Option Orientation : Vertical

Identify the correct outline for graphic.

Options :


- 1. ✗ 
- 2. ✓ 
- 3. ✗ 
- 4. ✗ 

Question Number : 34 Question Id : 260269534 Display Question Number : Yes Single Line Question Option : No Option Orientation : Vertical

Select the option that represents the below sentence in shorthand.


Passing the test will help you to seek employment as a typist or as a shorthand writer

Options :

1. ✘ 

2. ✔ 

3. ✘ 


4. ✘ 


Question Number : 34 Question Id : 260269534 Display Question Number : Yes Single Line Question Option : No Option Orientation : Vertical

Select the option that represents the below sentence in shorthand.


Passing the test will help you to seek employment as a typist or as a shorthand writer

Options :

1. ✘ 

2. ✔ 

3. ✘ 


4. ✘ 


Question Number : 35 Question Id : 260269535 Display Question Number : Yes Single Line Question Option : No Option Orientation : Vertical


Select the option that represents the below sentence in shorthand.
I wish you all success in your future assignments

Options :

1. ✘ 

2. ✘ 


3. ✘ 


4. ✔ 


Question Number : 35 Question Id : 260269535 Display Question Number : Yes Single Line Question Option : No Option Orientation : Vertical


Select the option that represents the below sentence in shorthand.
I wish you all success in your future assignments

Options :


1. ✘ 

2. ✘ 


3. ✘ 

4. ✓ 


Question Number : 36 Question Id : 260269536 Display Question Number : Yes Single Line Question Option : No Option Orientation : Vertical

‘ज’ व्यंजन  का दूसरा प्रारूप बताएँ:

A. 

B. 

C. 

D. 

Options :


1. ✗ A


2. ✗ B

3. ✗ C

4. ✓ D


Question Number : 36 Question Id : 260269536 Display Question Number : Yes Single Line Question Option : No Option Orientation : Vertical

‘ज’ व्यंजन  का दूसरा प्रारूप बताएँ:

A. 

B. 

C. 

D. 

Options :

1. ✗ A

2. ✘ B


3. ✘ C

4. ✔ D


Question Number : 37 Question Id : 260269537 Display Question Number : Yes Single Line Question Option : No Option Orientation : Vertical

‘ऊपर, पै, पर’ का शब्द चिन्ह पहचानें:

A. 

B. 

C. 

D. 

Options :

1. ✘ A


2. ✘ B


3. ✘ C


4. ✔ D


Question Number : 37 Question Id : 260269537 Display Question Number : Yes Single Line Question Option : No Option Orientation : Vertical

‘ऊपर, पै, पर’ का शब्द चिन्ह पहचानें:

A. 

B. 

C. 

D. 

Options :

1. ✘ A

2. ✘ B

3. ✘ C

4. ✔ D

Question Number : 38 Question Id : 260269538 Display Question Number : Yes Single Line Question Option : No Option Orientation : Vertical

‘वजह’ का सही शब्द चिन्ह पहचानें:

A. १

B. १

C. ८

D. १

Options :

1. ✘ A

2. ✘ B

3. ✘ C

4. ✔ D

Question Number : 38 Question Id : 260269538 Display Question Number : Yes Single Line Question Option : No Option Orientation : Vertical

‘वजह’ का सही शब्द चिन्ह पहचानें:

A. १

B. १

C. ८

D. १

Options :

1. ✘ A
2. ✘ B
3. ✘ C
4. ✔ D

Question Number : 39 Question Id : 260269539 Display Question Number : Yes Single Line Question Option : No Option Orientation : Vertical



इस साधारण शब्द चिन्ह को पहचानें।

Options :

1. ✔ बहुत से लोग
2. ✘ बहुत से लोगो
3. ✘ बहुत हो लिए
4. ✘ बहुतो के लिए

Question Number : 39 Question Id : 260269539 Display Question Number : Yes Single Line Question Option : No Option Orientation : Vertical



इस साधारण शब्द चिन्ह को पहचानें।

Options :

1. ✔ बहुत से लोग
2. ✘ बहुत से लोगो
3. ✘ बहुत हो लिए
4. ✘ बहुतो के लिए

Question Number : 40 Question Id : 260269540 Display Question Number : Yes Single Line Question Option : No Option Orientation : Vertical

साधारण व्यंजन को अर्ध्य करने के अनुसार 'कदाचित' शब्द में किस व्यंजन को आधा कर देना चाहिए?

Options :

1. ✓ क
2. ✗ द
3. ✗ च
4. ✗ त

Question Number : 40 Question Id : 260269540 Display Question Number : Yes Single Line Question Option : No Option Orientation : Vertical

साधारण व्यंजन को अर्ध्य करने के अनुसार 'कदाचित' शब्द में किस व्यंजन को आधा कर देना चाहिए?

Options :

1. ✓ क
2. ✗ द
3. ✗ च
4. ✗ त

Question Number : 41 Question Id : 260269541 Display Question Number : Yes Single Line Question Option : No Option Orientation : Vertical

शब्दांश के अन्त में यदि 'नीति' आये तो निम्नलिखित में से क्या करना चाहिए?

Options :

1. ✓ शब्दांश के पहले शब्द को न से काट दें
2. ✗ शब्दांश के पहले शब्द को त से काट दें
3. ✗ न को लोप कर दें
4. ✗ त को लोप कर दें

Question Number : 41 Question Id : 260269541 Display Question Number : Yes Single Line Question Option : No Option Orientation : Vertical

शब्दांश के अन्त में यदि 'नीति' आये तो निम्नलिखित में से क्या करना चाहिए?

Options :

1. ✓ शब्दांश के पहले शब्द को न से काट दें
2. ✘ शब्दांश के पहले शब्द को त से काट दें
3. ✘ न को लोप कर दें
4. ✘ त को लोप कर दें

Question Number : 42 Question Id : 260269542 Display Question Number : Yes Single Line Question Option : No Option Orientation : Vertical

क्रिया के अन्त में रहेगा/ रहेगी/ रहेंगे आये तो क्या करना चाहिए?

Options :

1. ✘ क्रिया में अंतिम व्यंजन लोप कर दें
2. ✘ क्रिया में अंतिम व्यंजन को आधा कर दें
3. ✓ क्रिया के अंतिम व्यंजन को दुगुना कर दें
4. ✘ क्रिया के प्रथम व्यंजन को दुगुना कर दें


Question Number : 42 Question Id : 260269542 Display Question Number : Yes Single Line Question Option : No Option Orientation : Vertical

क्रिया के अन्त में रहेगा/ रहेगी/ रहेंगे आये तो क्या करना चाहिए?

Options :

1. ✘ क्रिया में अंतिम व्यंजन लोप कर दें
2. ✘ क्रिया में अंतिम व्यंजन को आधा कर दें
3. ✓ क्रिया के अंतिम व्यंजन को दुगुना कर दें
4. ✘ क्रिया के प्रथम व्यंजन को दुगुना कर दें

Question Number : 43 Question Id : 260269543 Display Question Number : Yes Single Line Question Option : No Option Orientation : Vertical




इस साधारण संक्षिप्त शब्द चिन्ह को पहचानें?

Options :

1. ✘ विद्यालय
2. ✘ विद्यावास
3. ✔ विद्याभ्यास
4. ✘ विद्यावासी

Question Number : 43 Question Id : 260269543 Display Question Number : Yes Single Line Question Option : No Option Orientation : Vertical



इस साधारण संक्षिप्त शब्द चिन्ह को पहचानें?

Options :

1. ✘ विद्यालय
2. ✘ विद्यावास
3. ✔ विद्याभ्यास
4. ✘ विद्यावासी

Question Number : 44 Question Id : 260269544 Display Question Number : Yes Single Line Question Option : No Option Orientation : Vertical

'वेटिंगरूम' को पूर्ण नियमानुसार किस प्रकार लिखा जाएगा?

- A.
- B.
- C.
- D.

Options :

1. ✘ A

2. ✘ B


3. ✘ C

4. ✔ D

Question Number : 44 Question Id : 260269544 Display Question Number : Yes Single Line Question Option : No Option Orientation : Vertical

‘वेटिंगरूम’ को पूर्ण नियमानुसार किस प्रकार लिखा जाएगा?

A. 

B. 

C. 

D. 

Options :


1. ✘ A

2. ✘ B

3. ✘ C

4. ✔ D

Question Number : 45 Question Id : 260269545 Display Question Number : Yes Single Line Question Option : No Option Orientation : Vertical

पूर्ण नियमानुसार वाक्यांश  का सही हिन्दी रूपान्तर बताएँ।

Options :


1. ✘ सप्रेम कर्तव्य

2. ✘ साधारण प्रेम कार्य

3. ✔ सर्वप्रथम कार्य

4. ✘ सर्व परम कार्य

Question Number : 45 Question Id : 260269545 Display Question Number : Yes Single Line Question Option : No Option Orientation : Vertical

पूर्ण नियमानुसार वाक्यांश  का सही हिन्दी रूपान्तर बताएँ।

Options :

1. ✘ सप्रेम कर्तव्य
2. ✘ साधारण प्रेम कार्य
3. ✔ सर्वप्रथम कार्य
4. ✘ सर्व परम कार्य

Question Number : 46 Question Id : 260269546 Display Question Number : Yes Single Line Question Option : No Option Orientation : Vertical

Fill in the blanks in the sentence below with suitable articles. Select your answer from the options given.

_____ National Institute for Health and Care Excellence announced on Tuesday that it would be revising _____ guidelines on _____ diagnosis and management of chronic fatigue syndrome.

Options :

1. ✔ The; the; the
2. ✘ The; an; an
3. ✘ The; the; an
4. ✘ A; the; the

Question Number : 46 Question Id : 260269546 Display Question Number : Yes Single Line Question Option : No Option Orientation : Vertical

Fill in the blanks in the sentence below with suitable articles. Select your answer from the options given.

_____ National Institute for Health and Care Excellence announced on Tuesday that it would be revising _____ guidelines on _____ diagnosis and management of chronic fatigue syndrome.

Options :

1. ✔ The; the; the

2. ✘ The; an; an

3. ✘ The; the; an

4. ✘ A; the; the

Question Number : 47 Question Id : 260269547 Display Question Number : Yes Single Line Question Option : No Option Orientation : Vertical

Fill in the blanks in the sentence below with suitable articles. Select your answer from the options given.

When it comes to _____ adult penguins, they enjoy nothing more than _____ bracing dip in _____ chilly Southern Ocean.

Options :

1. ✘ an; the; the

2. ✘ the; the; the

3. ✘ the; the; a

4. ✔ the; a; the

Question Number : 47 Question Id : 260269547 Display Question Number : Yes Single Line Question Option : No Option Orientation : Vertical

Fill in the blanks in the sentence below with suitable articles. Select your answer from the options given.

When it comes to _____ adult penguins, they enjoy nothing more than _____ bracing dip in _____ chilly Southern Ocean.

Options :

1. ✘ an; the; the

2. ✘ the; the; the

3. ✘ the; the; a

4. ✔ the; a; the

Question Number : 48 Question Id : 260269548 Display Question Number : Yes Single Line Question Option : No Option Orientation : Vertical

Fill in the blank in the sentence below with a suitable modal verb. Select your answer from the options given.

"Give a girl the right shoes and she _____ conquer the world," a film star once said.

Options :

1. ✘ should

2. ✘ may

3. ✔ can

4. ✘ will

Question Number : 48 Question Id : 260269548 Display Question Number : Yes Single Line Question Option : No Option Orientation : Vertical

Fill in the blank in the sentence below with a suitable modal verb. Select your answer from the options given.

"Give a girl the right shoes and she _____ conquer the world," a film star once said.

Options :

1. ✘ should

2. ✘ may

3. ✔ can

4. ✘ will

Question Number : 49 Question Id : 260269549 Display Question Number : Yes Single Line Question Option : No Option Orientation : Vertical

Read the sentence given below and fill in the blank with an appropriate relative pronoun, select your answer from the options given below.

The student _____ the teacher selected for the English Olympiad is my best friend.

Options :

1. ✘ who

2. ✘ which

3. ✘ whose

4. ✔ whom

Question Number : 49 Question Id : 260269549 Display Question Number : Yes Single Line Question Option : No Option Orientation : Vertical

Read the sentence given below and fill in the blank with an appropriate relative pronoun, select your answer from the options given below.

The student _____ the teacher selected for the English Olympiad is my best friend.

Options :

1. ✘ who
2. ✘ which
3. ✘ whose
4. ✔ whom

Question Number : 50 Question Id : 260269550 Display Question Number : Yes Single Line Question Option : No Option Orientation : Vertical

The passage below has been given in four parts as options. One of the parts contains an error. Select the option that has the error.

Options :

1. ✘ Creatures that live in the deep ocean close to the seafloor
2. ✘ can blend in with sand or rocks, or hide in coral.
3. ✘ In the deep ocean it is often pitch black anyway
4. ✔ and predators lacks eyes, so being invisible is not necessary.

Question Number : 50 Question Id : 260269550 Display Question Number : Yes Single Line Question Option : No Option Orientation : Vertical

The passage below has been given in four parts as options. One of the parts contains an error. Select the option that has the error.

Options :

1. ✘ Creatures that live in the deep ocean close to the seafloor
2. ✘ can blend in with sand or rocks, or hide in coral.
3. ✘ In the deep ocean it is often pitch black anyway
4. ✔ and predators lacks eyes, so being invisible is not necessary.

Question Number : 51 Question Id : 260269551 Display Question Number : Yes Single Line Question Option : No Option Orientation : Vertical

From the options given below select the one that has the correct spelling of the highlighted word.

Options :

1. ✘
- While the bees are **queiscent** early in the morning and in the evening, they are overactive in the middle of the day.

2. ✘

While the bees are **quiesent** early in the morning and in the evening, they are overactive in the middle of the day.

3. ✔

While the bees are **quiescent** early in the morning and in the evening, they are overactive in the middle of the day.

4. ✘

While the bees are **quiesceint** early in the morning and in the evening, they are overactive in the middle of the day.

Question Number : 51 Question Id : 260269551 Display Question Number : Yes Single Line Question Option : No Option Orientation : Vertical

From the options given below select the one that has the correct spelling of the highlighted word.

Options :

1. ✘

While the bees are **quiescent** early in the morning and in the evening, they are overactive in the middle of the day.

2. ✘

While the bees are **quiesent** early in the morning and in the evening, they are overactive in the middle of the day.

3. ✔

While the bees are **quiescent** early in the morning and in the evening, they are overactive in the middle of the day.

4. ✘

While the bees are **quiesceint** early in the morning and in the evening, they are overactive in the middle of the day.

Question Number : 52 Question Id : 260269552 Display Question Number : Yes Single Line Question Option : No Option Orientation : Vertical

*Select the option that offers the correct synonym of the highlighted word in the sentence given below. Pay attention to the meaning of the highlighted word **in the context of the sentence**.*

The reason sleeping sickness is so deadly is that it causes its most severe symptoms, such as confusion, hallucinations and **poor** coordination.

Options :

1. ✔ Unsteady

2. ✘ Affluent

3. ✘ Uncertain

4. ✘ Indigent

Question Number : 52 Question Id : 260269552 Display Question Number : Yes Single Line Question Option : No Option Orientation : Vertical

Select the option that offers the correct synonym of the highlighted word in the sentence given below. Pay attention to the meaning of the highlighted word **in the context of the sentence**.

The reason sleeping sickness is so deadly is that it causes its most severe symptoms, such as confusion, hallucinations and **poor** coordination.

Options :

1. ✓ Unsteady
2. ✗ Affluent
3. ✗ Uncertain
4. ✗ Indigent

Question Number : 53 Question Id : 260269553 Display Question Number : Yes Single Line Question Option : No Option Orientation : Vertical

Select the option that offers the correct synonym of the highlighted word in the sentence given below. Pay attention to the meaning of the highlighted word **in the context of the sentence**.

The tsetse fly's mouth has tiny serrations on it that **saw** into your skin on its way to suck out your blood.

Options :

1. ✗ Espy
2. ✓ Cut
3. ✗ Look
4. ✗ Perforate

Question Number : 53 Question Id : 260269553 Display Question Number : Yes Single Line Question Option : No Option Orientation : Vertical

Select the option that offers the correct synonym of the highlighted word in the sentence given below. Pay attention to the meaning of the highlighted word **in the context of the sentence**.

The tsetse fly's mouth has tiny serrations on it that **saw** into your skin on its way to suck out your blood.

Options :

1. ✗ Espy
2. ✓ Cut
3. ✗ Look
4. ✗ Perforate

Question Number : 54 Question Id : 260269554 Display Question Number : Yes Single Line Question Option : No Option Orientation : Vertical

Select from the options given below the one that employs the correct use of conjunction.

Pay attention to what your teacher says. You will not understand the lesson without it.

Options :

1. ✓ You will not understand the lesson unless you pay attention to what your teacher says.
2. ✗ You will not understand the lesson if you pay attention to what your teacher says.
3. ✗ You will understand the lesson unless you pay attention to what your teacher says.
4. ✗ You will understand the lesson if you don't pay attention to what your teacher says.

Question Number : 54 Question Id : 260269554 Display Question Number : Yes Single Line Question Option : No Option Orientation : Vertical

Select from the options given below the one that employs the correct use of conjunction.

Pay attention to what your teacher says. You will not understand the lesson without it.

Options :

1. ✓ You will not understand the lesson unless you pay attention to what your teacher says.
2. ✗ You will not understand the lesson if you pay attention to what your teacher says.
3. ✗ You will understand the lesson unless you pay attention to what your teacher says.
4. ✗ You will understand the lesson if you don't pay attention to what your teacher says.

Question Number : 55 Question Id : 260269555 Display Question Number : Yes Single Line Question Option : No Option Orientation : Vertical

From the options given below select the one that has the prepositions placed correctly to form a proper sentence.

Options :

1. ✗
Given that the only two living populations from giant tortoise are island dwellers, it would be understandable to assume that the reptiles only become whoppers if they are confined into islands for long periods of evolutionary time
2. ✗
Given that the only two living populations of giant tortoise are island dwellers, it would be understandable to assume that the reptiles only become whoppers if they are confined into islands from long periods of evolutionary time
3. ✗
Given that the only two living populations of giant tortoise are island dwellers, it would be understandable to assume that the reptiles only become whoppers if they are confined in islands for long periods of evolutionary time

4. ✓

Given that the only two living populations of giant tortoise are island dwellers, it would be understandable to assume that the reptiles only become whoppers if they are confined to islands for long periods of evolutionary time

Question Number : 55 Question Id : 260269555 Display Question Number : Yes Single Line Question Option : No Option Orientation : Vertical

From the options given below select the one that has the prepositions placed correctly to form a proper sentence.

Options :

1. ✘

Given that the only two living populations from giant tortoise are island dwellers, it would be understandable to assume that the reptiles only become whoppers if they are confined into islands for long periods of evolutionary time

2. ✘

Given that the only two living populations of giant tortoise are island dwellers, it would be understandable to assume that the reptiles only become whoppers if they are confined into islands from long periods of evolutionary time

3. ✘

Given that the only two living populations of giant tortoise are island dwellers, it would be understandable to assume that the reptiles only become whoppers if they are confined in islands for long periods of evolutionary time

4. ✓

Given that the only two living populations of giant tortoise are island dwellers, it would be understandable to assume that the reptiles only become whoppers if they are confined to islands for long periods of evolutionary time

Question Number : 56 Question Id : 260269556 Display Question Number : Yes Single Line Question Option : No Option Orientation : Vertical

'रजोगुण' शब्द में संधि है:

Options :

1. ✘ यण संधि

2. ✘ स्वर संधि

3. ✓ विसर्ग संधि

4. ✘ व्यंजन संधि

Question Number : 56 Question Id : 260269556 Display Question Number : Yes Single Line Question Option : No Option Orientation : Vertical

'रजोगुण' शब्द में संधि है:

Options :

1. ✘ यण संधि

2. ✘ स्वर संधि
3. ✔ विसर्ग संधि
4. ✘ व्यंजन संधि

Question Number : 57 Question Id : 260269557 Display Question Number : Yes Single Line Question Option : No Option Orientation : Vertical

‘प्रतिवर्ष’ शब्द में समास है:

Options :

1. ✘ तत्पुरुष
2. ✔ अव्ययी भाव
3. ✘ द्वंद्व
4. ✘ बहुब्रीहि

Question Number : 57 Question Id : 260269557 Display Question Number : Yes Single Line Question Option : No Option Orientation : Vertical

‘प्रतिवर्ष’ शब्द में समास है:

Options :

1. ✘ तत्पुरुष
2. ✔ अव्ययी भाव
3. ✘ द्वंद्व
4. ✘ बहुब्रीहि

Question Number : 58 Question Id : 260269558 Display Question Number : Yes Single Line Question Option : No Option Orientation : Vertical

‘हाथ से लिखा हुआ’ वाक्यांश के लिए एक शब्द होगा:

Options :

1. ✘ हस्ताक्षर

2. ✘ हस्तरचित
3. ✘ हस्तांतरित
4. ✔ हस्तलिखित

Question Number : 58 Question Id : 260269558 Display Question Number : Yes Single Line Question Option : No Option Orientation : Vertical

‘हाथ से लिखा हुआ’ वाक्यांश के लिए एक शब्द होगा:

Options :

1. ✘ हस्ताक्षर
2. ✘ हस्तरचित
3. ✘ हस्तांतरित
4. ✔ हस्तलिखित

Question Number : 59 Question Id : 260269559 Display Question Number : Yes Single Line Question Option : No Option Orientation : Vertical

निम्नलिखित में से कौन-सा शब्द ‘पर्वत’ शब्द का पर्यायवाची नहीं है?

Options :

1. ✘ गिरि
2. ✘ शैल
3. ✘ अचल
4. ✔ नाग

Question Number : 59 Question Id : 260269559 Display Question Number : Yes Single Line Question Option : No Option Orientation : Vertical

निम्नलिखित में से कौन-सा शब्द ‘पर्वत’ शब्द का पर्यायवाची नहीं है?

Options :

1. ✘ गिरि
2. ✘ शैल

3. ✘ अचल

4. ✔ नाग

Question Number : 60 Question Id : 260269560 Display Question Number : Yes Single Line Question Option : No Option Orientation : Vertical

निम्नलिखित में कौन-सा शब्द अशुद्ध है?

Options :

1. ✘ स्वच्छ

2. ✔ प्रमूता

3. ✘ हृदय

4. ✘ प्रभाव

Question Number : 60 Question Id : 260269560 Display Question Number : Yes Single Line Question Option : No Option Orientation : Vertical

निम्नलिखित में कौन-सा शब्द अशुद्ध है?

Options :

1. ✘ स्वच्छ

2. ✔ प्रमूता

3. ✘ हृदय

4. ✘ प्रभाव

Question Number : 61 Question Id : 260269561 Display Question Number : Yes Single Line Question Option : No Option Orientation : Vertical

'कृत्रिम' शब्द का विलोम है:

Options :

1. ✘ बनावटी

2. ✔ स्वाभाविक

3. ✘ सज्जित

4. ✘ अनुकृति

Question Number : 61 Question Id : 260269561 Display Question Number : Yes Single Line Question Option : No Option Orientation : Vertical

'कृत्रिम' शब्द का विलोम है:

Options :

1. ✘ बनावटी

2. ✔ स्वाभाविक

3. ✘ सज्जित

4. ✘ अनुकृति

Question Number : 62 Question Id : 260269562 Display Question Number : Yes Single Line Question Option : No Option Orientation : Vertical

निम्नलिखित में से कौन-सा शब्द 'तत्सम' है?

Options :

1. ✘ दूध

2. ✘ सूरज

3. ✔ पुत्र

4. ✘ खेत

Question Number : 62 Question Id : 260269562 Display Question Number : Yes Single Line Question Option : No Option Orientation : Vertical

निम्नलिखित में से कौन-सा शब्द 'तत्सम' है?

Options :

1. ✘ दूध

2. ✘ सूरज

3. ✔ पुत्र

4. ✘ खेत

Question Number : 63 Question Id : 260269563 Display Question Number : Yes Single Line Question Option : No Option Orientation : Vertical

‘सामना करना’ के लिए उपयुक्त मुहावरा है:

Options :

1. ✓ लोहा लेना
2. ✗ लोहा मानना
3. ✗ लोहे के चने चबाना
4. ✗ लाल पीला होना

Question Number : 63 Question Id : 260269563 Display Question Number : Yes Single Line Question Option : No Option Orientation : Vertical

‘सामना करना’ के लिए उपयुक्त मुहावरा है:

Options :

1. ✓ लोहा लेना
2. ✗ लोहा मानना
3. ✗ लोहे के चने चबाना
4. ✗ लाल पीला होना

Question Number : 64 Question Id : 260269564 Display Question Number : Yes Single Line Question Option : No Option Orientation : Vertical

कौन-सा शब्द तद्भव है?

Options :

1. ✗ भवन
2. ✗ पवन
3. ✓ सूरज
4. ✗ पतन

Question Number : 64 Question Id : 260269564 Display Question Number : Yes Single Line Question Option : No Option Orientation : Vertical

कौन-सा शब्द तद्रव है?

Options :

1. ✘ भवन
2. ✘ पवन
3. ✔ सूरज
4. ✘ पतन

Question Number : 65 Question Id : 260269565 Display Question Number : Yes Single Line Question Option : No Option Orientation : Vertical

निम्नलिखित में से कौन-सा शब्द 'फूल' के अर्थ को व्यक्त नहीं करता?

Options :

1. ✘ पुष्प
2. ✘ कुसुम
3. ✘ सुमन
4. ✔ गंध

Question Number : 65 Question Id : 260269565 Display Question Number : Yes Single Line Question Option : No Option Orientation : Vertical

निम्नलिखित में से कौन-सा शब्द 'फूल' के अर्थ को व्यक्त नहीं करता?

Options :

1. ✘ पुष्प
2. ✘ कुसुम
3. ✘ सुमन
4. ✔ गंध

Question Number : 66 Question Id : 260269566 Display Question Number : Yes Single Line Question Option : No Option Orientation : Vertical

If $\frac{1-a}{a} + \frac{1-b}{b} + \frac{1-c}{c} = 1$, then $ab + bc + ca = ?$

Options :

1. ✘ $a^2b + b^2c + c^2a$
2. ✘ $-4abc$
3. ✔ $4abc$
4. ✘ $a^2b^2c^2$

Question Number : 66 Question Id : 260269566 Display Question Number : Yes Single Line Question Option : No Option Orientation : Vertical

यदि $\frac{1-a}{a} + \frac{1-b}{b} + \frac{1-c}{c} = 1$ है, तो $ab + bc + ca = ?$

Options :

1. ✘ $a^2b + b^2c + c^2a$
2. ✘ $-4abc$
3. ✔ $4abc$
4. ✘ $a^2b^2c^2$

Question Number : 67 Question Id : 260269567 Display Question Number : Yes Single Line Question Option : No Option Orientation : Vertical

Priya's age is $\frac{2}{5}$ the age of her father. After 10 years, her age will be half of the age of her father. The average of present age of father and daughter is:

Options :

1. ✔ 35
2. ✘ 30
3. ✘ 33
4. ✘ 32

Question Number : 67 Question Id : 260269567 Display Question Number : Yes Single Line Question Option : No Option Orientation : Vertical

प्रिया की आयु उसके पिता की आयु का $\frac{2}{5}$ है। 10 वर्ष बाद उसकी आयु उसके पिता की आयु से आधी हो जायेगी। पिता और पुत्री की वर्तमान आयु का औसत क्या है?

Options :

1. ✓ 35

2. ✗ 30

3. ✗ 33

4. ✗ 32

Question Number : 68 Question Id : 260269568 Display Question Number : Yes Single Line Question Option : No Option Orientation : Vertical

X borrowed ₹ 12,000 from Y at a rate of 6% per annum simple interest. X returned ₹ 15,600 to Y. What is the time taken by X to return the money to Y?

Options :

1. ✗ 5.5 years

2. ✓ 5 years

3. ✗ 4.5 years

4. ✗ 6 years

Question Number : 68 Question Id : 260269568 Display Question Number : Yes Single Line Question Option : No Option Orientation : Vertical

X, Y से ₹ 12,000 साधारण ब्याज की 6% वार्षिक दर पर उधार लेता है। X, Y को ₹ 15,600 देता है। X द्वारा Y को धन वापस करने के लिए लिया गया समय कितना है?

Options :

1. ✗ 5.5 वर्ष

2. ✓ 5 वर्ष

3. ✗ 4.5 वर्ष

4. ✗ 6 वर्ष

Question Number : 69 Question Id : 260269569 Display Question Number : Yes Single Line Question Option : No Option Orientation : Vertical

In Germany, the female population is 55%. If the total literacy is 58%, then what is the female literate population given that the male literate population is 80%?

Options :

1. ✗ 45%

2. ✘ 42%

3. ✘ 30%

4. ✔ 40%

Question Number : 69 Question Id : 260269569 Display Question Number : Yes Single Line Question Option : No Option Orientation : Vertical

जर्मनी में, महिलाओं की जनसंख्या 55% है। यदि कुल साक्षरता 58% है और पुरुष साक्षर जनसंख्या 80% दी गयी है, तो महिला साक्षर जनसंख्या का प्रतिशत क्या है?

Options :

1. ✘ 45%

2. ✘ 42%

3. ✘ 30%

4. ✔ 40%

Question Number : 70 Question Id : 260269570 Display Question Number : Yes Single Line Question Option : No Option Orientation : Vertical

ABC is a right angled triangle with $AB = x$, $BC = x + 1$, and $CA = 5$. Find the value of x if 5 is the hypotenuse.

Options :

1. ✘ 4

2. ✘ 5

3. ✔ 3

4. ✘ 1

Question Number : 70 Question Id : 260269570 Display Question Number : Yes Single Line Question Option : No Option Orientation : Vertical

ABC एक समकोण त्रिभुज के शीर्ष हैं जिसमें $AB = x$, $BC = x + 1$, और $CA = 5$ हैं। यदि कर्ण 5 है, तो x का मान ज्ञात कीजिए।

Options :

1. ✘ 4

2. ✘ 5

3. ✔ 3

4. ✘ 1

Question Number : 71 Question Id : 260269571 Display Question Number : Yes Single Line Question Option : No Option Orientation : Vertical

A bag contains 50 paise, 25 paise and 10 paise coins in the ratio 3 : 5 : 4 amounting to ₹ 63. Find the number of 50 paise coins.

Options :

1. ✘ 163

2. ✘ 175

3. ✘ 150

4. ✔ 60

Question Number : 71 Question Id : 260269571 Display Question Number : Yes Single Line Question Option : No Option Orientation : Vertical

एक बैग में 50 पैसे, 25 पैसे और 10 पैसे के सिक्कों का अनुपात 3 : 5 : 4 हैं जिनका मूल्य ₹ 63 है। 50 पैसे के सिक्कों की संख्या कितनी है?

Options :

1. ✘ 163

2. ✘ 175

3. ✘ 150

4. ✔ 60

Question Number : 72 Question Id : 260269572 Display Question Number : Yes Single Line Question Option : No Option Orientation : Vertical

A bus covers 78 km in 2 hr 10 mins travelling at half of its actual speed. What is the actual speed?

Options :

1. ✘ 70 km/hr

2. ✔ 72 km/hr

3. ✘ 75 km/hr

4. ✘ 65 km/hr

Question Number : 72 Question Id : 260269572 Display Question Number : Yes Single Line Question Option : No Option Orientation : Vertical

एक बस अपनी वास्तविक गति से आधी चाल पर चलते हुए 78 किलोमीटर की दूरी 2 घंटे 10 मिनट में तय करती है। इसकी वास्तविक गति क्या है?

Options :

1. ✘ 70 किलोमीटर/घंटा
2. ✔ 72 किलोमीटर/घंटा
3. ✘ 75 किलोमीटर/घंटा
4. ✘ 65 किलोमीटर/घंटा

Question Number : 73 Question Id : 260269573 Display Question Number : Yes Single Line Question Option : No Option Orientation : Vertical

Working 8 hours per day, A can complete a task in 12 days, while working 10 hours per day, B can complete the task in 8 days. The number of days to complete the task, if both work together for 8 hours per day, is:

Options :

1. ✘ 11/60
2. ✔ 60/11
3. ✘ 20/11
4. ✘ 11/20

Question Number : 73 Question Id : 260269573 Display Question Number : Yes Single Line Question Option : No Option Orientation : Vertical

A एक कार्य को प्रतिदिन 8 घंटे कार्य करते हुए 12 दिनों में पूरा कर सकता है, जबकि B उसी कार्य को प्रतिदिन 10 घंटे कार्य करते हुए 8 दिनों में पूरा कर सकता है। यदि वे दोनों मिलकर 8 घंटे कार्य करते हैं, तो उसी कार्य को पूरा करने के लिए कितने दिन चाहिए?

Options :

1. ✘ 11/60
2. ✔ 60/11
3. ✘ 20/11
4. ✘ 11/20

Question Number : 74 Question Id : 260269574 Display Question Number : Yes Single Line Question Option : No Option Orientation : Vertical

Two varieties of rice - rice I and rice II - is mixed in a ratio of 5 : 3. The ratio change to 5 : 7 if more 16 kg of rice II is added. Number of kg of rice II in the new mixture is:

Options :

1. ✓ 28
2. ✗ 29
3. ✗ 27
4. ✗ 25

Question Number : 74 Question Id : 260269574 Display Question Number : Yes Single Line Question Option : No Option Orientation : Vertical

चावल की दो किस्मों - चावल I और चावल II - को 5 : 3 के अनुपात में मिश्रित किया जाता है। यदि चावल II की 16 किलोग्राम मात्रा मिश्रण में मिला दी जाती है, तो अनुपात बदलकर 5 : 7 हो जाता है। नये मिश्रण में चावल II की मात्रा कितने किलोग्राम है?

Options :

1. ✓ 28
2. ✗ 29
3. ✗ 27
4. ✗ 25

Question Number : 75 Question Id : 260269575 Display Question Number : Yes Single Line Question Option : No Option Orientation : Vertical

Mr. X sold a toy for ₹ 423 at a loss of 6%. To earn a profit of 8%, what price should it be sold at?

Options :

1. ✗ ₹ 480
2. ✗ ₹ 484
3. ✓ ₹ 486
4. ✗ ₹ 485

Question Number : 75 Question Id : 260269575 Display Question Number : Yes Single Line Question Option : No Option Orientation : Vertical

मि. X एक खिलौने को 6% की हानि पर ₹ 423 में बेचता है। 8% का लाभ अर्जित करने के लिए, इसे किस मूल्य पर बेचा जाना चाहिए?

Options :

1. ✘ ₹ 480
2. ✘ ₹ 484
3. ✔ ₹ 486
4. ✘ ₹ 485

Question Number : 76 Question Id : 260269576 Display Question Number : Yes Single Line Question Option : No Option Orientation : Vertical

A glass slab is suspended in air by a spring balance. The reading of the balance is 1.3 kg. When the piece is submerged in water, the scale reads 0.8 kg. The density of the glass slab is:

Options :

1. ✘ $1.1 \times 10^3 \text{ kg m}^{-3}$
2. ✘ $1.8 \times 10^3 \text{ kg m}^{-3}$
3. ✔ $2.6 \times 10^3 \text{ kg m}^{-3}$
4. ✘ $3.2 \times 10^3 \text{ kg m}^{-3}$

Question Number : 76 Question Id : 260269576 Display Question Number : Yes Single Line Question Option : No Option Orientation : Vertical

कांच का एक स्लैब हवा में कमानीदार तुला से लटका हुआ है। तुला का पाठ्यांक 1.3 किलोग्राम है। जब यह वस्तु पानी में डूबी हो तो तुला का पाठ्यांक 0.8 किलोग्राम दिखता है। कांच के स्लैब का घनत्व होगा:

Options :

1. ✘ $1.1 \times 10^3 \text{ किलोग्राम मीटर}^{-3}$
2. ✘ $1.8 \times 10^3 \text{ किलोग्राम मीटर}^{-3}$
3. ✔ $2.6 \times 10^3 \text{ किलोग्राम मीटर}^{-3}$
4. ✘ $3.2 \times 10^3 \text{ किलोग्राम मीटर}^{-3}$

Question Number : 77 Question Id : 260269577 Display Question Number : Yes Single Line Question Option : No Option Orientation : Vertical

An object is thrown vertically upwards with a velocity of 70 m/s. The magnitude of displacement of the object in 12 s is:
(take $g = 10 \text{ m/s}^2$)

Options :

1. ✓ 120 m
2. ✗ 245 m
3. ✗ 370 m
4. ✗ 410 m

Question Number : 77 Question Id : 260269577 Display Question Number : Yes Single Line Question Option : No Option
Orientation : Vertical

एक वस्तु 70 मीटर/सेकंड के वेग से उर्ध्वाधर रूप से ऊपर की ओर फेंकी जाती है। 12 सेकंड में वस्तु के विस्थापन का परिमाण होगा:

($g = 10 \text{ मीटर/सेकंड}^2$)

Options :

1. ✓ 120 मीटर
2. ✗ 245 मीटर
3. ✗ 370 मीटर
4. ✗ 410 मीटर

Question Number : 78 Question Id : 260269578 Display Question Number : Yes Single Line Question Option : No Option
Orientation : Vertical

An object is placed on the principal axis of a convex lens at a point between its optical centre and focus. The image formed by the lens is:

Options :

1. ✗ Real and Diminished
2. ✗ Real and Highly enlarged
3. ✗ Virtual and Diminished
4. ✓ Virtual and Enlarged

Question Number : 78 Question Id : 260269578 Display Question Number : Yes Single Line Question Option : No Option
Orientation : Vertical

एक वस्तु उत्तल लेंस के मुख्य अक्ष पर इसके प्रकाशिक केंद्र और फोकस के मध्य एक बिंदु पर रखी गई है। लेंस द्वारा बनाया गया प्रतिबिंब होगा:

Options :

1. ✘ वास्तविक और संकुचित
2. ✘ वास्तविक और अधिक बड़ा
3. ✘ आभासी और संकुचित
4. ✔ आभासी और बड़ा

Question Number : 79 Question Id : 260269579 Display Question Number : Yes Single Line Question Option : No Option Orientation : Vertical

A ray of light passes from medium 1 to medium 2 and then into medium 3. In passing from medium 1 to 2 and from medium 2 to 3, the ray bends towards the normal. If v_1 , v_2 and v_3 represent speeds of light in medium 1, 2 and 3 respectively, then:

Options :

1. ✔ $v_1 > v_2 > v_3$
2. ✘ $v_2 > v_3 > v_1$
3. ✘ $v_3 > v_1 > v_2$
4. ✘ $v_2 > v_1 > v_3$

Question Number : 79 Question Id : 260269579 Display Question Number : Yes Single Line Question Option : No Option Orientation : Vertical

प्रकाश की एक किरण माध्यम 1 से माध्यम 2 में और फिर माध्यम 3 में होकर गुजरती है। माध्यम 1 से माध्यम 2 में और माध्यम 2 से माध्यम 3 में गुजरते समय किरण सामान्य की ओर मुड़ती है। यदि v_1 , v_2 और v_3 माध्यम 1, 2 और 3 में क्रमशः प्रकाश की गति दर्शाते हैं, तो:

Options :

1. ✔ $v_1 > v_2 > v_3$
2. ✘ $v_2 > v_3 > v_1$
3. ✘ $v_3 > v_1 > v_2$
4. ✘ $v_2 > v_1 > v_3$

Question Number : 80 Question Id : 260269580 Display Question Number : Yes Single Line Question Option : No Option Orientation : Vertical

An object, 1.4 cm in size, is placed 20 cm in front of a concave mirror of focal length 15 cm. The image formed is:

Options :

1. ✘ Erect and Enlarged
2. ✘ Erect and Diminished
3. ✔ Inverted and Enlarged
4. ✘ Inverted and Diminished

Question Number : 80 Question Id : 260269580 Display Question Number : Yes Single Line Question Option : No Option Orientation : Vertical

1.4 सेंटीमीटर आकार की एक वस्तु 15 सेंटीमीटर फोकल लम्बाई वाले अवतल दर्पण के सामने 20 सेंटीमीटर पर रखी गयी है। बनने वाला प्रतिबिंब होगा:

Options :

1. ✘ सीधा और बड़ा
2. ✘ सीधा और संकुचित
3. ✔ उल्टा और बड़ा
4. ✘ उल्टा और संकुचित

Question Number : 81 Question Id : 260269581 Display Question Number : Yes Single Line Question Option : No Option Orientation : Vertical

Which one of the following organic substances dissolves in water due to hydrogen bonding?

Options :

1. ✘ Carbon tetrachloride
2. ✘ Ethane
3. ✘ Methane
4. ✔ Glucose

Question Number : 81 Question Id : 260269581 Display Question Number : Yes Single Line Question Option : No Option Orientation : Vertical

निम्नलिखित में से कौन सा कार्बनिक यौगिक हाइड्रोजन बॉन्डिंग के कारण पानी में घुल जाता है?

Options :

1. ✘ कार्बन टेट्राक्लोराइड
2. ✘ एथेन
3. ✘ मीथेन
4. ✔ ग्लूकोज

Question Number : 82 Question Id : 260269582 Display Question Number : Yes Single Line Question Option : No Option Orientation : Vertical

Which among the following compounds has the functional group aldehyde?

Options :

1. ✔ Ethanal
2. ✘ Ethanol
3. ✘ Ethanoic acid
4. ✘ Dimethyl ether

Question Number : 82 Question Id : 260269582 Display Question Number : Yes Single Line Question Option : No Option Orientation : Vertical

निम्नलिखित में से किस यौगिक में क्रियात्मक समूह एल्डिहाइड होता है?

Options :

1. ✔ एथेनल
2. ✘ एथेनॉल
3. ✘ एथेनॉइक अम्ल
4. ✘ डाइमिथाइल ईथर

Question Number : 83 Question Id : 260269583 Display Question Number : Yes Single Line Question Option : No Option Orientation : Vertical

Which one of the following represents the mass of one mole of zinc atoms?

Options :

1. ✔ 65 gram

2. ✘ 6.5 gram
3. ✘ 0.65 gram
4. ✘ 0.065 gram

Question Number : 83 Question Id : 260269583 Display Question Number : Yes Single Line Question Option : No Option Orientation : Vertical

निम्नलिखित में से कौन सा विकल्प जिंक परमाणु के एक मोल का द्रव्यमान दर्शाता है?

Options :

1. ✔ 65 ग्राम
2. ✘ 6.5 ग्राम
3. ✘ 0.65 ग्राम
4. ✘ 0.065 ग्राम

Question Number : 84 Question Id : 260269584 Display Question Number : Yes Single Line Question Option : No Option Orientation : Vertical

The functional group carboxylic acid is represented by which chemical formula?

Options :

1. ✔ -COOH
2. ✘ -NH₂
3. ✘ -OH
4. ✘ -CN

Question Number : 84 Question Id : 260269584 Display Question Number : Yes Single Line Question Option : No Option Orientation : Vertical

क्रियात्मक समूह कार्बोक्सिलिक अम्ल को किस रासायनिक सूत्र द्वारा दर्शाया जाता है?

Options :

1. ✔ -COOH
2. ✘ -NH₂
3. ✘ -OH

4. ✘ -CN

Question Number : 85 Question Id : 260269585 Display Question Number : Yes Single Line Question Option : No Option Orientation : Vertical

What is the number of carbon atoms present in 2-Methyl propane?

Options :

1. ✘ 3

2. ✔ 4

3. ✘ 5

4. ✘ 6

Question Number : 85 Question Id : 260269585 Display Question Number : Yes Single Line Question Option : No Option Orientation : Vertical

2-मिथाइल प्रोपेन में उपस्थित कार्बन परमाणुओं की संख्या क्या होगी?

Options :

1. ✘ 3

2. ✔ 4

3. ✘ 5

4. ✘ 6

Question Number : 86 Question Id : 260269586 Display Question Number : Yes Single Line Question Option : No Option Orientation : Vertical

Which of the following musical instrument did Ustad Bismillah Khan play?

Options :

1. ✘ Sitar

2. ✔ Shehnai

3. ✘ Sarod

4. ✘ Santoor

Question Number : 86 Question Id : 260269586 Display Question Number : Yes Single Line Question Option : No Option Orientation : Vertical

उस्ताद बिस्मिल्लाह खान निम्नलिखित में से कौन सा वाद्य यंत्र बजाते थे?

Options :

1. ✘ सितार
2. ✔ शहनाई
3. ✘ सरोद
4. ✘ संतूर

Question Number : 87 Question Id : 260269587 Display Question Number : Yes Single Line Question Option : No Option Orientation : Vertical

What was the approximate time period of the Vedic Era?

Options :

1. ✘ 1700-1500 BCE
2. ✔ 1500-500 BCE
3. ✘ 3300 BCE
4. ✘ 2000 BCE

Question Number : 87 Question Id : 260269587 Display Question Number : Yes Single Line Question Option : No Option Orientation : Vertical

वैदिक युग की अनुमानित समयावधि क्या थी?

Options :

1. ✘ 1700-1500 ईसा पूर्व
2. ✔ 1500-500 ईसा पूर्व
3. ✘ 3300 ईसा पूर्व
4. ✘ 2000 ईसा पूर्व

Question Number : 88 Question Id : 260269588 Display Question Number : Yes Single Line Question Option : No Option Orientation : Vertical

Where are Alpine Forests found in India?

Options :

1. ✘ Satpura Range
2. ✘ Aravalli Range
3. ✘ Western Ghats
4. ✔ Eastern Himalayas

Question Number : 88 Question Id : 260269588 Display Question Number : Yes Single Line Question Option : No Option Orientation : Vertical

भारत में अल्पाइन वन कहाँ पाये जाते हैं?

Options :

1. ✘ सतपुड़ा की पहाड़ियों
2. ✘ अरावली की पहाड़ियों
3. ✘ पश्चिमी घाट
4. ✔ पूर्वी हिमालय

Question Number : 89 Question Id : 260269589 Display Question Number : Yes Single Line Question Option : No Option Orientation : Vertical

In India, which is the largest and oldest bank?

Options :

1. ✘ Indian Overseas Bank
2. ✔ State Bank of India
3. ✘ Canara Bank
4. ✘ Punjab National Bank

Question Number : 89 Question Id : 260269589 Display Question Number : Yes Single Line Question Option : No Option Orientation : Vertical

भारत में, सबसे बड़ा और सबसे पुराना बैंक कौन सा है?

Options :

1. ✘ इंडियन ओवरसीज बैंक
2. ✔ भारतीय स्टेट बैंक
3. ✘ केनरा बैंक
4. ✘ पंजाब नेशनल बैंक

Question Number : 90 Question Id : 260269590 Display Question Number : Yes Single Line Question Option : No Option Orientation : Vertical

The "point of order" in a parliamentary practice involves:

Options :

1. ✔ Drawing attention to violation of rules in a deliberative assembly meeting
2. ✘ Drawing attention to violation of time in a deliberative assembly meeting
3. ✘ Drawing attention to violation of speech in a deliberative assembly meeting
4. ✘ Drawing attention to violation of colour code in a deliberative assembly meeting

Question Number : 90 Question Id : 260269590 Display Question Number : Yes Single Line Question Option : No Option Orientation : Vertical

एक संसदीय प्रक्रिया की "नियमापत्ति" में शामिल है:

Options :

1. ✔ किसी विचारशील विधानसभा की बैठक में नियमों के उल्लंघन की ओर ध्यान आकर्षित करना
2. ✘ किसी विचारशील विधानसभा की बैठक में समय के उल्लंघन की ओर ध्यान आकर्षित करना
3. ✘ किसी विचारशील विधानसभा की बैठक में भाषण के उल्लंघन की ओर ध्यान आकर्षित करना
4. ✘ किसी विचारशील विधानसभा की बैठक में रंग कोड के उल्लंघन की ओर ध्यान आकर्षित करना

Question Number : 91 Question Id : 260269591 Display Question Number : Yes Single Line Question Option : No Option Orientation : Vertical

Which among the following gas is the most prevalent greenhouse gas?

Options :

1. ✘ Methane
2. ✘ Nitrogen
3. ✔ Carbon dioxide
4. ✘ Carbon monoxide

Question Number : 91 Question Id : 260269591 Display Question Number : Yes Single Line Question Option : No Option Orientation : Vertical

निम्नलिखित में से कौन सी गैस सबसे अधिक प्रबल ग्रीनहाउस गैस है?

Options :

1. ✘ मीथेन
2. ✘ नाइट्रोजन
3. ✔ कार्बन डाइऑक्साइड
4. ✘ कार्बन मोनोऑक्साइड

Question Number : 92 Question Id : 260269592 Display Question Number : Yes Single Line Question Option : No Option Orientation : Vertical

What does the "SCHUEBERFOUER" festival celebrate?

Options :

1. ✔ St Bartholomew day in Luxembourg
2. ✘ St Peter's day in Rome
3. ✘ St Thomas day in Spain
4. ✘ St Philip's day in Germany

Question Number : 92 Question Id : 260269592 Display Question Number : Yes Single Line Question Option : No Option Orientation : Vertical

"SCHUEBERFOUER" त्यौहार किसके रूप में मनाया जाता है?

Options :

1. ✔ लक्ज़मबर्ग में सेंट बार्थोलोमेव दिवस

2. ✘ रोम में सेंट पीटर दिवस
3. ✘ स्पेन में सेंट थॉमस दिवस
4. ✘ जर्मनी में सेंट फिलिप दिवस

Question Number : 93 Question Id : 260269593 Display Question Number : Yes Single Line Question Option : No Option Orientation : Vertical

Lacrosse, which was recently introduced in India, owes its origins to which community?

Options :

1. ✘ Celtics
2. ✘ Maori
3. ✘ Africans
4. ✔ Native American - Indians

Question Number : 93 Question Id : 260269593 Display Question Number : Yes Single Line Question Option : No Option Orientation : Vertical

लैक्रोस, जिसे हाल ही में भारत में शुरू किया गया है, की उत्पत्ति कौन से समुदाय से हुई है?

Options :

1. ✘ सेल्टिक्स
2. ✘ माओरी
3. ✘ अफ्रीकन
4. ✔ देशी अमेरिकी - भारतीय

Question Number : 94 Question Id : 260269594 Display Question Number : Yes Single Line Question Option : No Option Orientation : Vertical

Hindi Diwas is celebrated on which day?

Options :

1. ✘ 10 September
2. ✔ 14 September

3. ✘ 14 November

4. ✘ 10 November

Question Number : 94 Question Id : 260269594 Display Question Number : Yes Single Line Question Option : No Option Orientation : Vertical

हिंदी दिवस किस दिन मनाया जाता है?

Options :

1. ✘ 10 सितम्बर

2. ✔ 14 सितम्बर

3. ✘ 14 नवंबर

4. ✘ 10 नवंबर

Question Number : 95 Question Id : 260269595 Display Question Number : Yes Single Line Question Option : No Option Orientation : Vertical

What is the study of the universe known as?

Options :

1. ✔ Cosmology

2. ✘ Aeronautics

3. ✘ Cosmetology

4. ✘ Aerostatics

Question Number : 95 Question Id : 260269595 Display Question Number : Yes Single Line Question Option : No Option Orientation : Vertical

ब्रह्मांड का अध्ययन क्या कहलाता है?

Options :

1. ✔ ब्रह्मांड विज्ञान

2. ✘ वैमानिकी विज्ञान

3. ✘ सौंदर्यप्रसाधन विज्ञान

4. ✘ वायुस्थैतिकी विज्ञान

Question Number : 96 Question Id : 260269596 Display Question Number : Yes Single Line Question Option : No Option Orientation : Vertical

Find the odd word.

Options :

1. ✔ Reader

2. ✘ Reporter

3. ✘ Editor

4. ✘ Publisher

Question Number : 96 Question Id : 260269596 Display Question Number : Yes Single Line Question Option : No Option Orientation : Vertical

असंगत शब्द ज्ञात करें।

Options :

1. ✔ पाठक

2. ✘ पत्रकार

3. ✘ संपादक

4. ✘ प्रकाशक

Question Number : 97 Question Id : 260269597 Display Question Number : Yes Single Line Question Option : No Option Orientation : Vertical

Complete the analogy.

AEP : EIP :: IOT : _____

Options :

1. ✘ UVW

2. ✔ OUT

3. ✘ UWX

4. ✘ OPQ

Question Number : 97 Question Id : 260269597 Display Question Number : Yes Single Line Question Option : No Option Orientation : Vertical

सादृश्य को पूरा करे।

AEP : EIP :: IOT : _____

Options :

1. ✘ UVW

2. ✔ OUT

3. ✘ UWX

4. ✘ OPQ

Question Number : 98 Question Id : 260269598 Display Question Number : Yes Single Line Question Option : No Option Orientation : Vertical

Select the set of letters that completes the first word and begins the second word.

HAND(--) ENGTH

Options :

1. ✘ ED

2. ✘ EL

3. ✘ ER

4. ✔ LE

Question Number : 98 Question Id : 260269598 Display Question Number : Yes Single Line Question Option : No Option Orientation : Vertical

अक्षरों के उस सेट का चयन करें जो पहले शब्द को पूरा करता हो और दूसरे शब्द को आरम्भ करता हो।

HAND (--) ENGTH

Options :

1. ✘ ED

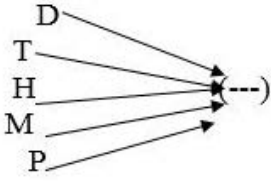
2. ✘ EL

3. ✘ ER

4. ✔ LE

Question Number : 99 Question Id : 260269599 Display Question Number : Yes Single Line Question Option : No Option Orientation : Vertical

Select the set of letters that, when added as a suffix to each letter in the given image, forms a meaningful English word.

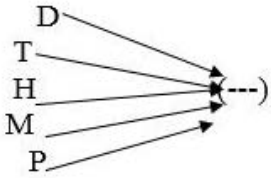


Options :

1. ✘ EAR
2. ✔ INT
3. ✘ ARK
4. ✘ IER

Question Number : 99 Question Id : 260269599 Display Question Number : Yes Single Line Question Option : No Option Orientation : Vertical

अक्षरों के उस सेट का चयन करें जिसे चित्र के अक्षर/अक्षर-समूहों के साथ प्रत्यय के रूप में जोड़े जाने पर एक अर्थपूर्ण अंग्रेज़ी शब्द बने।



Options :

1. ✘ EAR
2. ✔ INT
3. ✘ ARK
4. ✘ IER

Question Number : 100 Question Id : 260269600 Display Question Number : Yes Single Line Question Option : No Option Orientation : Vertical

Select the number that fits in the below number series.

5, 6, 14, 23, 40, _____, 109

Options :

1. ✘ 60

2. ✘ 63

3. ✔ 66

4. ✘ 80

Question Number : 100 Question Id : 260269600 Display Question Number : Yes Single Line Question Option : No Option Orientation : Vertical

उस संख्या का चयन करें जो नीचे दी गई श्रृंखला के लिए उपयुक्त हो।

5, 6, 14, 23, 40, _____, 109

Options :

1. ✘ 60

2. ✘ 63

3. ✔ 66

4. ✘ 80