

Haryana Staff Selection Commission

Notations :

- 1.Options shown in green color and with ✓ icon are correct.
- 2.Options shown in red color and with ✗ icon are incorrect.

Subject Name:	CAT 3 Steno Typist English and Hindi CBT Exam
Total Marks:	200
Display Marks:	Yes
Calculator:	None
Magnifying Glass Required?:	No
Ruler Required?:	No
Eraser Required?:	No
Scratch Pad Required?:	No
Rough Sketch/Notepad Required?:	No
Protractor Required?:	No

CAT 3 Steno Typist English and Hindi CBT Exam

Group Marks: 200

CAT 3 Steno Typist English and Hindi CBT Exam

Section Marks:	200
Display Number Panel:	Yes
Group All Questions:	No

Question Number : 1 Question Id : 627289501 Display Question Number : Yes Single Line Question Option : No Option Orientation : Vertical

Who among the following was the successor of Toramana?

Options :

1. ✗ Mangalesha
2. ✗ Mehama
3. ✗ Khinjila I
4. ✓ Mihirkula

Question Number : 1 Question Id : 627289501 Display Question Number : Yes Single Line Question Option : No Option Orientation : Vertical

निम्नलिखित में से कौन टोरमन का उत्तराधिकारी था?

Options :

1. ✘ मंगलेशा
2. ✘ मेहमा
3. ✘ खिंजिला ।
4. ✔ मिहिरकुल

Question Number : 2 Question Id : 627289502 Display Question Number : Yes Single Line Question Option : No Option Orientation : Vertical

Which of the following ruler was also known by the name Shiladitya?

Options :

1. ✘ Adityavardhana
2. ✔ Harshavardhana
3. ✘ Prabhakaravardhana
4. ✘ Rajyavardhana I

Question Number : 2 Question Id : 627289502 Display Question Number : Yes Single Line Question Option : No Option Orientation : Vertical

निम्नलिखित में से कौन सा शासक शिलादित्य के नाम से भी जाना जाता है?

Options :

1. ✘ आदित्यवर्धन
2. ✔ हर्षवर्धन
3. ✘ प्रभाकरवर्धन
4. ✘ राज्यवर्धन ।

Question Number : 3 Question Id : 627289503 Display Question Number : Yes Single Line Question Option : No Option Orientation : Vertical

Which of the following feudatory of the Pratiharas built a Vishnu Temple at Prithudaka?

Options :

1. ✓ Gogga
2. ✗ Jaula
3. ✗ Jajjuka
4. ✗ Vajrata

Question Number : 3 Question Id : 627289503 Display Question Number : Yes Single Line Question Option : No Option Orientation : Vertical

निम्नलिखित में से प्रतिहारों के किस जागीरदार ने पृथुदका में विष्णु मंदिर का निर्माण करवाया था?

Options :

1. ✓ गोगा
2. ✗ जौल
3. ✗ जज्जुक
4. ✗ वज्रत

Question Number : 4 Question Id : 627289504 Display Question Number : Yes Single Line Question Option : No Option Orientation : Vertical

The Tomara rule in the area which is today called Haryana was finally put to an end by which of the following dynasties?

Options :

1. ✓ Chahamanas
2. ✗ Kalachuri
3. ✗ Lohara
4. ✗ Paramara

Question Number : 4 Question Id : 627289504 Display Question Number : Yes Single Line Question Option : No Option Orientation : Vertical

उस क्षेत्र में, जिसे आज हरियाणा कहा जाता है, तोमर शासन का अंत किस राजवंश के साथ समाप्त हुआ था?

Options :

1. ✓ चहमान

2. ✘ कालाचुरी

3. ✘ लोहार

4. ✘ परमार

Question Number : 5 Question Id : 627289505 Display Question Number : Yes Single Line Question Option : No Option Orientation : Vertical

As per the Economic Survey of Haryana (2016-17), Haryana has become the _____ highest contributor of food-grains to the central pool.

Options :

1. ✔ 2nd

2. ✘ 3rd

3. ✘ 4th

4. ✘ 5th

Question Number : 5 Question Id : 627289505 Display Question Number : Yes Single Line Question Option : No Option Orientation : Vertical

हरियाणा में 2016-17 के अर्थव्यवस्था सर्वेक्षण के अनुसार हरियाणा केन्द्रीय पूल के लिए _____ सबसे बड़ा अनाज वितरक बना।

Options :

1. ✔ दूसरा

2. ✘ तीसरा

3. ✘ चौथा

4. ✘ पाँचवाँ

Question Number : 6 Question Id : 627289506 Display Question Number : Yes Single Line Question Option : No Option Orientation : Vertical

The first ever International Gita Mahotsav held in Haryana was inaugurated by:

Options :

1. ✘ Captain Abhimanyu

2. ✘ Kaptan Singh Solanki

3. ✓ Pranab Mukherjee

4. ✗ Narendra Singh Tomar

Question Number : 6 Question Id : 627289506 Display Question Number : Yes Single Line Question Option : No Option Orientation : Vertical

हरियाणा में पहली बार आयोजित अंतर्राष्ट्रीय गीता महोत्सव का उद्घाटन किसने किया था?

Options :

1. ✗ कैप्टन अभिमन्यु

2. ✗ कप्तान सिंह सोलंकी

3. ✓ प्रणव मुखर्जी

4. ✗ नरेन्द्र सिंह तोमर

Question Number : 7 Question Id : 627289507 Display Question Number : Yes Single Line Question Option : No Option Orientation : Vertical

The first ever Digi Dhan Mela was held in which district of Haryana?

Options :

1. ✗ Karnal

2. ✓ Gurugram

3. ✗ Kurukshetra

4. ✗ Faridabad

Question Number : 7 Question Id : 627289507 Display Question Number : Yes Single Line Question Option : No Option Orientation : Vertical

हरियाणा के किस राज्य में पहली बार डिजी धन मेला आयोजित किया गया था?

Options :

1. ✗ करनाल

2. ✓ गुरुग्राम

3. ✗ कुरुक्षेत्र

4. ✘ फ़रीदाबाद

Question Number : 8 Question Id : 627289508 Display Question Number : Yes Single Line Question Option : No Option Orientation : Vertical

After the addition of a new district recently, Haryana now has _____ districts.

Options :

1. ✘ 15

2. ✘ 10

3. ✘ 25

4. ✔ 22

Question Number : 8 Question Id : 627289508 Display Question Number : Yes Single Line Question Option : No Option Orientation : Vertical

हाल ही में एक नया ज़िला बनने के बाद, हरियाणा में अब _____ ज़िले हो गए हैं।

Options :

1. ✘ 15

2. ✘ 10

3. ✘ 25

4. ✔ 22

Question Number : 9 Question Id : 627289509 Display Question Number : Yes Single Line Question Option : No Option Orientation : Vertical

Who is the author/authoress of "The Other Side of Silence: Voices from the Partition of India"?

Options :

1. ✘ Z. A. Suleri

2. ✔ Urvashi Butalia

3. ✘ Vinod Mehra Bechain

4. ✘ Sunita Jain

Question Number : 9 Question Id : 627289509 Display Question Number : Yes Single Line Question Option : No Option Orientation : Vertical

"द अदर साइड ऑफ़ साइलेंस: वॉइसेस फ़ॉम द पार्टीशन ऑफ़ इंडिया" के लेखक/लेखिका कौन हैं?

Options :

1. ✘ ज़ेड. ए. सुलेरी
2. ✔ उर्वशी बुटालिया
3. ✘ विनोद मेहरा बेचैन
4. ✘ सुनीता जैन

Question Number : 10 Question Id : 627289510 Display Question Number : Yes Single Line Question Option : No Option Orientation : Vertical

Who is the author/authoress of "Anything For You, Ma'am"?

Options :

1. ✘ Viren Sanwadia
2. ✘ Swadesh Deepak
3. ✘ Sunita Jain
4. ✔ Tushar Raheja

Question Number : 10 Question Id : 627289510 Display Question Number : Yes Single Line Question Option : No Option Orientation : Vertical

"एनीथिंग फ़ॉर यू, मैम" के लेखक/लेखिका कौन हैं?

Options :

1. ✘ वीरेन सनवाडिया
2. ✘ स्वदेश दीपक
3. ✘ सुनीता जैन
4. ✔ तुषार रहेजा

Question Number : 11 Question Id : 627289511 Display Question Number : Yes Single Line Question Option : No Option Orientation : Vertical

The popular play 'Court Martial' has been authored by:

Options :

1. ✓ Swadesh Deepak
2. ✘ Shrikrishna Gotan Manjar
3. ✘ Satpal Snehi
4. ✘ Preeti Singh

Question Number : 11 Question Id : 627289511 Display Question Number : Yes Single Line Question Option : No Option Orientation : Vertical

प्रसिद्ध नाटक 'कोर्ट मार्शल' के लेखक हैं:

Options :

1. ✓ स्वदेश दीपक
2. ✘ श्रीकृष्ण गोतान मंजर
3. ✘ सतपाल स्नेही
4. ✘ प्रीति सिंह

Question Number : 12 Question Id : 627289512 Display Question Number : Yes Single Line Question Option : No Option Orientation : Vertical

Which of the following river flows along the eastern boundary of Haryana?

Options :

1. ✘ Ghaggar
2. ✘ Markanda
3. ✓ Yamuna
4. ✘ Tangri

Question Number : 12 Question Id : 627289512 Display Question Number : Yes Single Line Question Option : No Option Orientation : Vertical

हरियाणा की पूर्वी सीमा पर कौन सी नदी बहती है?

Options :

1. ✘ घग्गर

2. ✘ मारकंडा

3. ✔ यमुना

4. ✘ तांगरी

Question Number : 13 Question Id : 627289513 Display Question Number : Yes Single Line Question Option : No Option Orientation : Vertical

As per India State of Forest Report, FSI, 2013 the tree cover in the state of Haryana is _____.

Options :

1. ✘ 1062 sq km

2. ✔ 1282 sq km

3. ✘ 1450 sq km

4. ✘ 1578 sq km

Question Number : 13 Question Id : 627289513 Display Question Number : Yes Single Line Question Option : No Option Orientation : Vertical

इंडिया स्टेट ऑफ फॉरेस्ट रिपोर्ट, एफ.एस.आई, 2013 के अनुसार हरियाणा राज्य का वृक्षों से घिरा हुआ कुल क्षेत्रफल कितना है?

Options :

1. ✘ 1062 वर्ग किमी

2. ✔ 1282 वर्ग किमी

3. ✘ 1450 वर्ग किमी

4. ✘ 1578 वर्ग किमी

Question Number : 14 Question Id : 627289514 Display Question Number : Yes Single Line Question Option : No Option Orientation : Vertical

Where is the Sultanpur National Park situated?

Options :

1. ✘ Karnal

2. ✘ Yamunanagar

3. ✘ Faridabad

4. ✔ Gurugram

Question Number : 14 Question Id : 627289514 Display Question Number : Yes Single Line Question Option : No Option Orientation : Vertical

सुल्तानपुर राष्ट्रीय उद्यान कहाँ पर स्थित है?

Options :

1. ✘ करनाल

2. ✘ यमुना नगर

3. ✘ फ़रीदाबाद

4. ✔ गुरुग्राम

Question Number : 15 Question Id : 627289515 Display Question Number : Yes Single Line Question Option : No Option Orientation : Vertical

Haryana became a state of India on:

Options :

1. ✘ December 3, 1962

2. ✔ November 1, 1966

3. ✘ July 15, 1967

4. ✘ November 19, 1968

Question Number : 15 Question Id : 627289515 Display Question Number : Yes Single Line Question Option : No Option Orientation : Vertical

हरियाणा भारत का एक राज्य इस दिन बना था?

Options :

1. ✘ 3 दिसम्बर, 1962

2. ✔ 1 नवम्बर, 1966

3. ✘ 15 जुलाई, 1967

4. ✘ 19 नवम्बर, 1968

Question Number : 16 Question Id : 627289516 Display Question Number : Yes Single Line Question Option : No Option Orientation : Vertical

Haryana came into being as the _____ state of India.

Options :

1. ✘ 14th

2. ✘ 15th

3. ✘ 16th

4. ✔ 20th

Question Number : 16 Question Id : 627289516 Display Question Number : Yes Single Line Question Option : No Option Orientation : Vertical

हरियाणा भारत के _____ राज्य के रूप में अस्तित्व में आया।

Options :

1. ✘ 14वें

2. ✘ 15वें

3. ✘ 16वें

4. ✔ 20वें

Question Number : 17 Question Id : 627289517 Display Question Number : Yes Single Line Question Option : No Option Orientation : Vertical

The boundary between Punjab and Haryana was demarcated by which commission?

Options :

1. ✘ M. M. Punchhi Commission

2. ✘ Sarkaria Commission

3. ✔ J. C. Shah Commission

4. ✘ Malimath Commission

Question Number : 17 Question Id : 627289517 Display Question Number : Yes Single Line Question Option : No Option Orientation : Vertical

पंजाब और हरियाणा के मध्य सीमा किस आयोग द्वारा निर्धारित की गई थी?

Options :

1. ✘ एम. एम. पुंछी आयोग
2. ✘ सरकारिया आयोग
3. ✔ जे. सी. शाह आयोग
4. ✘ मालीमाथ आयोग

Question Number : 18 Question Id : 627289518 Display Question Number : Yes Single Line Question Option : No Option Orientation : Vertical

Who is the present Governor of Haryana?

Options :

1. ✔ Kaptan Singh Solanki
2. ✘ Jagannath Pahadia
3. ✘ Kiran Bedi
4. ✘ Ved Marwah

Question Number : 18 Question Id : 627289518 Display Question Number : Yes Single Line Question Option : No Option Orientation : Vertical

हरियाणा के वर्तमान गवर्नर कौन हैं?

Options :

1. ✔ कप्तान सिंह सोलंकी
2. ✘ जगन्नाथ पहाड़िया
3. ✘ किरण बेदी
4. ✘ वेद मारवा

Question Number : 19 Question Id : 627289519 Display Question Number : Yes Single Line Question Option : No Option Orientation : Vertical

Which of the following wildlife sanctuary is NOT in Haryana?

Options :

1. ✓ Nagzira
2. ✗ Chhilchila
3. ✗ Khol-Hi-Raitan
4. ✗ Nahar

Question Number : 19 Question Id : 627289519 Display Question Number : Yes Single Line Question Option : No Option Orientation : Vertical

निम्नलिखित में से कौन सा वन्यजीव अभयारण्य हरियाणा में नहीं है?

Options :

1. ✓ नागज़ीरा
2. ✗ छिलचिला
3. ✗ खोल-ही-रैतान
4. ✗ नाहर

Question Number : 20 Question Id : 627289520 Display Question Number : Yes Single Line Question Option : No Option Orientation : Vertical

The Aravalli ranges in Haryana have been designated as _____ in accordance with Sub-Regional Plan for Haryana Sub-Region of NCR-2021.

Options :

1. ✓ Natural conservation zone
2. ✗ Water recharge zone
3. ✗ Agro-ecological region
4. ✗ Pollution-free zone

Question Number : 20 Question Id : 627289520 Display Question Number : Yes Single Line Question Option : No Option Orientation : Vertical

एनसीआर-2021 के हरियाणा उप-क्षेत्र की उप-क्षेत्रीय योजना के अनुसार हरियाणा में अरावली पर्वतमाला को _____ के रूप में नामित किया गया है।

Options :

1. ✓ प्राकृतिक संरक्षित क्षेत्र

2. ✘ जल पुनर्भरण क्षेत्र
3. ✘ कृषि-पारिस्थितिकीय क्षेत्र
4. ✘ प्रदूषण रहित क्षेत्र

Question Number : 21 Question Id : 627289521 Display Question Number : Yes Single Line Question Option : No Option Orientation : Vertical

In October 2016, Haryana Government decided to divide all cities and towns in the state into _____ clusters for efficient solid waste management.

Options :

1. ✔ 15
2. ✘ 10
3. ✘ 20
4. ✘ 25

Question Number : 21 Question Id : 627289521 Display Question Number : Yes Single Line Question Option : No Option Orientation : Vertical

अक्टूबर 2016 में, हरियाणा सरकार ने प्रभावी ठोस कूड़ा प्रबंधन के लिए राज्य के सभी शहरों और कस्बों को _____ समूहों में विभाजित करने का निर्णय लिया।

Options :

1. ✔ 15
2. ✘ 10
3. ✘ 20
4. ✘ 25

Question Number : 22 Question Id : 627289522 Display Question Number : Yes Single Line Question Option : No Option Orientation : Vertical

The National Cactus and Succulent Botanical Garden and Research Centre is located in:

Options :

1. ✘ Thanesar
2. ✘ Pehowa

3. ✘ Bilaspur

4. ✔ Panchkula

Question Number : 22 Question Id : 627289522 Display Question Number : Yes Single Line Question Option : No Option Orientation : Vertical

नेशनल कैक्टस और सकुलेंट बॉटनिकल गार्डन और रिसर्च सेंटर कहाँ पर स्थित है?

Options :

1. ✘ थानेसर

2. ✘ पेहोवा

3. ✘ बिलासपुर

4. ✔ पंचकुला

Question Number : 23 Question Id : 627289523 Display Question Number : Yes Single Line Question Option : No Option Orientation : Vertical

The Birla Mandir at Thanesar in Kurukshetra is mainly constructed in:

Options :

1. ✘ Blue Marble

2. ✘ Green marble

3. ✔ White marble

4. ✘ Brown marble

Question Number : 23 Question Id : 627289523 Display Question Number : Yes Single Line Question Option : No Option Orientation : Vertical

कुरुक्षेत्र के थानेसर में स्थित बिड़ला मंदिर का निर्माण मुख्यतः किस पत्थर से किया गया है?

Options :

1. ✘ नीला संगमरमर

2. ✘ हरा संगमरमर

3. ✔ सफ़ेद संगमरमर

4. ✘ भूरा संगमरमर

Question Number : 24 Question Id : 627289524 Display Question Number : Yes Single Line Question Option : No Option Orientation : Vertical

The Chaitra Chaudas Mela is held in Pehowa in:

Options :

1. ✘ June-July

2. ✔ March-April

3. ✘ November-December

4. ✘ August-September

Question Number : 24 Question Id : 627289524 Display Question Number : Yes Single Line Question Option : No Option Orientation : Vertical

पेहोवा में चैत्र चौदस मेला कब आयोजित किया जाता है?

Options :

1. ✘ जून-जुलाई

2. ✔ मार्च-अप्रैल

3. ✘ नवम्बर-दिसम्बर

4. ✘ अगस्त-सितम्बर

Question Number : 25 Question Id : 627289525 Display Question Number : Yes Single Line Question Option : No Option Orientation : Vertical

The Sthaneshawar Mahadev Mandir is situated in:

Options :

1. ✘ Manesar

2. ✘ Bilaspur

3. ✔ Thanesar

4. ✘ Pindara

Question Number : 25 Question Id : 627289525 Display Question Number : Yes Single Line Question Option : No Option Orientation : Vertical

स्थानेश्वर महादेव मंदिर कहाँ पर स्थित है?

Options :

1. ✘ मानेसर
2. ✘ बिलासपुर
3. ✔ थानेसर
4. ✘ पिंडारा

Question Number : 26 Question Id : 627289526 Display Question Number : Yes Single Line Question Option : No Option Orientation : Vertical

How many consonants are there in Pitman Shorthand?

Options :

1. ✘ 23
2. ✘ 24
3. ✘ 25
4. ✔ 26

Question Number : 26 Question Id : 627289526 Display Question Number : Yes Single Line Question Option : No Option Orientation : Vertical

How many consonants are there in Pitman Shorthand?

Options :

1. ✘ 23
2. ✘ 24
3. ✘ 25
4. ✔ 26

Question Number : 27 Question Id : 627289527 Display Question Number : Yes Single Line Question Option : No Option Orientation : Vertical

How many vowels are there in Pitman Shorthand?

Options :

1. ✓ 12

2. ✗ 13

3. ✗ 14

4. ✗ 15

Question Number : 27 Question Id : 627289527 Display Question Number : Yes Single Line Question Option : No Option Orientation : Vertical

How many vowels are there in Pitman Shorthand?

Options :

1. ✓ 12

2. ✗ 13

3. ✗ 14

4. ✗ 15

Question Number : 28 Question Id : 627289528 Display Question Number : Yes Single Line Question Option : No Option Orientation : Vertical

How many types of 'H' are represented in Shorthand?

Options :

1. ✗ 3

2. ✓ 4

3. ✗ 5

4. ✗ 6

Question Number : 28 Question Id : 627289528 Display Question Number : Yes Single Line Question Option : No Option Orientation : Vertical

How many types of 'H' are represented in Shorthand?

Options :

1. ✗ 3

2. ✓ 4

3. ✗ 5

4. ✘ 6

Question Number : 29 Question Id : 627289529 Display Question Number : Yes Single Line Question Option : No Option Orientation : Vertical

How are shun hooks written to curves?

Options :

1. ✔ Inside
2. ✘ Outside
3. ✘ Upwards
4. ✘ Downwards

Question Number : 29 Question Id : 627289529 Display Question Number : Yes Single Line Question Option : No Option Orientation : Vertical

How are shun hooks written to curves?

Options :

1. ✔ Inside
2. ✘ Outside
3. ✘ Upwards
4. ✘ Downwards

Question Number : 30 Question Id : 627289530 Display Question Number : Yes Single Line Question Option : No Option Orientation : Vertical

When 'ns' and 'nz' occur medially _____ letters must be shown as in words density and rancid (in final hooks).

Options :

1. ✔ Both
2. ✘ Single
3. ✘ Circle
4. ✘ Loop

Question Number : 30 Question Id : 627289530 Display Question Number : Yes Single Line Question Option : No Option Orientation : Vertical

When 'ns' and 'nz' occur medially _____ letters must be shown as in words density and rancid (in final hooks).

Options :

1. ✓ Both
2. ✗ Single
3. ✗ Circle
4. ✗ Loop

Question Number : 31 Question Id : 627289531 Display Question Number : Yes Single Line Question Option : No Option Orientation : Vertical

When 'skr' occurs after p or b, the hook may be _____.

Options :

1. ✗ written
2. ✓ omitted
3. ✗ shown
4. ✗ expressed

Question Number : 31 Question Id : 627289531 Display Question Number : Yes Single Line Question Option : No Option Orientation : Vertical

When 'skr' occurs after p or b, the hook may be _____.

Options :

1. ✗ written
2. ✓ omitted
3. ✗ shown
4. ✗ expressed

Question Number : 32 Question Id : 627289532 Display Question Number : Yes Single Line Question Option : No Option Orientation : Vertical

The stroke 'l' standing alone or with only a final circle attached is doubled for which of the following set of letters?

Options :

1. ✗ ture
2. ✗ thr

3. ✘ dr

4. ✔ tr

Question Number : 32 Question Id : 627289532 Display Question Number : Yes Single Line Question Option : No Option Orientation : Vertical

The stroke 'l' standing alone or with only a final circle attached is doubled for which of the following set of letters?

Options :

1. ✘ ture

2. ✘ thr


3. ✘ dr


4. ✔ tr

Question Number : 33 Question Id : 627289533 Display Question Number : Yes Single Line Question Option : No Option Orientation : Vertical

Choose the correct outline for situation.

Options :

1. ✘ 

2. ✘ 

3. ✔ 


4. ✘ 

Question Number : 33 Question Id : 627289533 Display Question Number : Yes Single Line Question Option : No Option Orientation : Vertical

Choose the correct outline for situation.

Options :

1. ✘ 

2. ✘ 

3. ✓ 


4. ✗ 

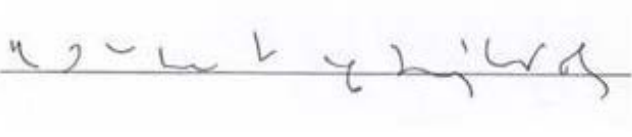
Question Number : 34 Question Id : 627289534 Display Question Number : Yes Single Line Question Option : No Option Orientation : Vertical


Select the option that represents the below sentence in shorthand.


I have pleasure in taking part in this seminar on family welfare

Options :

1. ✓ 

2. ✗ 

3. ✗ 

4. ✗ 

Question Number : 34 Question Id : 627289534 Display Question Number : Yes Single Line Question Option : No Option Orientation : Vertical

Select the option that represents the below sentence in shorthand.

I have pleasure in taking part in this seminar on family welfare

Options :

1. ✓ 

2. ✗ 

3. ✘

4. ✘

Question Number : 35 Question Id : 627289535 Display Question Number : Yes Single Line Question Option : No Option Orientation : Vertical

Select the option that represents the below sentence in shorthand.

We shall be glad if you will look into the matter.

Options :

1. ✘

2. ✘

3. ✔

4. ✘

Question Number : 35 Question Id : 627289535 Display Question Number : Yes Single Line Question Option : No Option Orientation : Vertical


Select the option that represents the below sentence in shorthand.

We shall be glad if you will look into the matter.


Options :

1. ✘

2. ✘



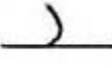
3. ✔





4. ✘




Question Number : 36 Question Id : 627289536 Display Question Number : Yes Single Line Question Option : No Option Orientation : Vertical

'त' व्यंजन  का दूसरा प्रारूप बताएँ:

A. 

B. 

C. 

D. 

Options :


1. ✘ A

2. ✘ B


3. ✘ C


4. ✔ D

Question Number : 36 Question Id : 627289536 Display Question Number : Yes Single Line Question Option : No Option Orientation : Vertical

‘त’ व्यंजन  का दूसरा प्रारूप बताएँ:

A. 

B. 

C. 

D. 

Options :

1. ✘ A

2. ✘ B

3. ✘ C

4. ✔ D

Question Number : 37 Question Id : 627289537 Display Question Number : Yes Single Line Question Option : No Option Orientation : Vertical

शब्द चिह्न  को पहचानें।

Options :

1. ✘ उसका

2. ✔ उसको

3. ✘ उसकी

4. ✘ उसके

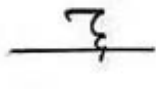
Question Number : 37 Question Id : 627289537 Display Question Number : Yes Single Line Question Option : No Option Orientation : Vertical

शब्द चिह्न  को पहचानें।

Options :

1. ✘ उसका
2. ✔ उसको
3. ✘ उसकी
4. ✘ उसके

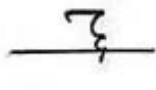
Question Number : 38 Question Id : 627289538 Display Question Number : Yes Single Line Question Option : No Option Orientation : Vertical

 इस संकेत का अर्थ देने वाला सही वाक्यांश चुनें।

Options :

1. ✘ कर दिया
2. ✘ कर दिया था
3. ✔ करता था
4. ✘ कर देता था

Question Number : 38 Question Id : 627289538 Display Question Number : Yes Single Line Question Option : No Option Orientation : Vertical

 इस संकेत का अर्थ देने वाला सही वाक्यांश चुनें।

Options :

1. ✘ कर दिया
2. ✘ कर दिया था
3. ✔ करता था
4. ✘ कर देता था

Question Number : 39 Question Id : 627289539 Display Question Number : Yes Single Line Question Option : No Option Orientation : Vertical

क्रिया के अंत में चुका, चुकी, चुके आये तो क्या करना चाहिए?

Options :

1. ✘ क व्यंजन को दुगुना करना चाहिए
2. ✘ क व्यंजन को आधा करना चाहिए
3. ✘ आशुलिपि में चक्र लिख देना चाहिए
4. ✔ 'क' से क्रिया को काटें, या सटा कर लिखें

Question Number : 39 Question Id : 627289539 Display Question Number : Yes Single Line Question Option : No Option Orientation : Vertical

क्रिया के अंत में चुका, चुकी, चुके आये तो क्या करना चाहिए?

Options :

1. ✘ क व्यंजन को दुगुना करना चाहिए
2. ✘ क व्यंजन को आधा करना चाहिए
3. ✘ आशुलिपि में चक्र लिख देना चाहिए
4. ✔ 'क' से क्रिया को काटें, या सटा कर लिखें

Question Number : 40 Question Id : 627289540 Display Question Number : Yes Single Line Question Option : No Option Orientation : Vertical

'न हुक' का इस्तेमाल कब नहीं करना चाहिए?

Options :

1. ✘ 'न' कि मात्रा नहीं होने पर
2. ✘ 'न' को बड़ा कर देने पर
3. ✔ 'न' में मात्रा होने पर
4. ✘ 'न' को छोटा कर देने पर

Question Number : 40 Question Id : 627289540 Display Question Number : Yes Single Line Question Option : No Option Orientation : Vertical

'न हुक' का इस्तेमाल कब नहीं करना चाहिए?

Options :

1. ✘ 'न' कि मात्रा नहीं होने पर
2. ✘ 'न' को बड़ा कर देने पर
3. ✔ 'न' में मात्रा होने पर
4. ✘ 'न' को छोटा कर देने पर

Question Number : 41 Question Id : 627289541 Display Question Number : Yes Single Line Question Option : No Option Orientation : Vertical

शब्द में साधारण व्यंजन रेखा को दुगुना करने के अनुसार 'समतर' में किस व्यंजन को बड़ा किया जाता है?

Options :

1. ✘ स
2. ✔ म
3. ✘ त
4. ✘ र

Question Number : 41 Question Id : 627289541 Display Question Number : Yes Single Line Question Option : No Option Orientation : Vertical

शब्द में साधारण व्यंजन रेखा को दुगुना करने के अनुसार 'समतर' में किस व्यंजन को बड़ा किया जाता है?

Options :

1. ✘ स
2. ✔ म
3. ✘ त
4. ✘ र

Question Number : 42 Question Id : 627289542 Display Question Number : Yes Single Line Question Option : No Option Orientation : Vertical

साधारण व्यंजन को अर्ध्य करने के अनुसार 'परित्याग' शब्द में किस व्यंजन को आधा कर देना चाहिए?

Options :

1. ✘ प
2. ✔ र
3. ✘ त
4. ✘ ग

Question Number : 42 Question Id : 627289542 Display Question Number : Yes Single Line Question Option : No Option Orientation : Vertical

साधारण व्यंजन को अर्ध्य करने के अनुसार 'परित्याग' शब्द में किस व्यंजन को आधा कर देना चाहिए?

Options :

1. ✘ प
2. ✔ र
3. ✘ त
4. ✘ ग

Question Number : 43 Question Id : 627289543 Display Question Number : Yes Single Line Question Option : No Option Orientation : Vertical

पूर्ण नियमानुसार शब्दांश प्रति (वाद-विवाद) के दूसरे प्रारूप को पहचानें:

- A. प्रति
- B. प्रति
- C. प्रति
- D. प्रति

Options :

1. ✘ A
2. ✘ B

3. ✓ C

4. ✗ D

Question Number : 43 Question Id : 627289543 Display Question Number : Yes Single Line Question Option : No Option Orientation : Vertical

पूर्ण नियमानुसार शब्दांश वृत्ति (वाद-विवाद) के दूसरे प्रारूप को पहचानें:

A. वृत्तिB. वृत्तिC. वृत्तिD. वृत्ति

Options :

1. ✗ A

2. ✗ B

3. ✓ C

4. ✗ D

Question Number : 44 Question Id : 627289544 Display Question Number : Yes Single Line Question Option : No Option Orientation : Vertical

हिन्दी शीघ्रलिपि में 'र' व्यंजन को काटने से क्या बनता है?

Options :

1. ✗ ड

2. ✗ ढ

3. ✗ ट

4. ✓ इ

Question Number : 44 Question Id : 627289544 Display Question Number : Yes Single Line Question Option : No Option Orientation : Vertical

हिन्दी शीघ्रलिपि में 'र' व्यंजन को काटने से क्या बनता है?

Options :

1. ✗ इ

2. ✗ ङ

3. ✗ ट

4. ✓ इ

Question Number : 45 Question Id : 627289545 Display Question Number : Yes Single Line Question Option : No Option Orientation : Vertical

पूर्ण नियमानुसार वाक्यांश  का सही हिन्दी रूपान्तर बताएँ।

Options :

1. ✓ व्यवहार कर लेना चाहिए

2. ✗ व्यवहार करने चाहिए

3. ✗ व्यवहार करते रहना चाहिए

4. ✗ व्यवहार कर लेना चाहते हैं

Question Number : 45 Question Id : 627289545 Display Question Number : Yes Single Line Question Option : No Option Orientation : Vertical

पूर्ण नियमानुसार वाक्यांश  का सही हिन्दी रूपान्तर बताएँ।

Options :

1. ✓ व्यवहार कर लेना चाहिए

2. ✗ व्यवहार करने चाहिए

3. ✗ व्यवहार करते रहना चाहिए

4. ✘ व्यवहार कर लेना चाहते हैं

Question Number : 46 Question Id : 627289546 Display Question Number : Yes Single Line Question Option : No Option Orientation : Vertical

Fill in the blanks in the sentence below with suitable articles. Select your answer from the options given:

Polar experts expect ___ trillion-tonne block to essentially bump along the shelf edge until it reaches ___ eastward movement of ocean water known as ___ Antarctic Circumpolar Current.

Options :

1. ✔ the, the, the

2. ✘ the, an, an

3. ✘ the, the, an

4. ✘ a, the, the

Question Number : 46 Question Id : 627289546 Display Question Number : Yes Single Line Question Option : No Option Orientation : Vertical

Fill in the blanks in the sentence below with suitable articles. Select your answer from the options given:

Polar experts expect ___ trillion-tonne block to essentially bump along the shelf edge until it reaches ___ eastward movement of ocean water known as ___ Antarctic Circumpolar Current.

Options :

1. ✔ the, the, the

2. ✘ the, an, an

3. ✘ the, the, an

4. ✘ a, the, the

Question Number : 47 Question Id : 627289547 Display Question Number : Yes Single Line Question Option : No Option Orientation : Vertical

Fill in the blanks in the sentence below with suitable articles. Select your answer from the options given:

Conservationists hope ___ sound of storm petrels' "churring" is ___ indication that an effort to eradicate rats on ___ Shiant Islands is working.

Options :

1. ✘ a, an, the
2. ✔ the, an, the
3. ✘ the, a, an
4. ✘ a, a, the

Question Number : 47 Question Id : 627289547 Display Question Number : Yes Single Line Question Option : No Option Orientation : Vertical

Fill in the blanks in the sentence below with suitable articles. Select your answer from the options given:

Conservationists hope __ sound of storm petrels' "churring" is __ indication that an effort to eradicate rats on ____ Shiant Islands is working.

Options :

1. ✘ a, an, the
2. ✔ the, an, the
3. ✘ the, a, an
4. ✘ a, a, the

Question Number : 48 Question Id : 627289548 Display Question Number : Yes Single Line Question Option : No Option Orientation : Vertical

Fill in the blank in the sentence below with a suitable modal verb. Select your answer from the options given:

In 2005, researchers analyzing archived satellite images found that milky seas _____ be seen from space and that one satellite had captured images of a huge area of ocean that had displayed the strange glow for three consecutive nights a decade earlier.

Options :

1. ✔ could
2. ✘ would
3. ✘ should
4. ✘ may

Question Number : 48 Question Id : 627289548 Display Question Number : Yes Single Line Question Option : No Option Orientation : Vertical

Fill in the blank in the sentence below with a suitable modal verb. Select your answer from the options given:

In 2005, researchers analyzing archived satellite images found that milky seas ____ be seen from space and that one satellite had captured images of a huge area of ocean that had displayed the strange glow for three consecutive nights a decade earlier.

Options :

1. ✓ could
2. ✗ would
3. ✗ should
4. ✗ may

Question Number : 49 Question Id : 627289549 Display Question Number : Yes Single Line Question Option : No Option Orientation : Vertical

Read the sentence given below and fill in the blank with a collective noun, select your answer from the options given below.

A ____ of cats was busy in fighting over a heap of fishbones.

Options :

1. ✗ bloat
2. ✗ knot
3. ✗ tower
4. ✓ clowder

Question Number : 49 Question Id : 627289549 Display Question Number : Yes Single Line Question Option : No Option Orientation : Vertical

Read the sentence given below and fill in the blank with a collective noun, select your answer from the options given below.

A ____ of cats was busy in fighting over a heap of fishbones.

Options :

1. ✗ bloat
2. ✗ knot
3. ✗ tower
4. ✓ clowder

Question Number : 50 Question Id : 627289550 Display Question Number : Yes Single Line Question Option : No Option Orientation : Vertical

The passage below has been given in four parts as options. One of the parts contains an error. Select the option that has the error:

Options :

1. ✘ The bones and teeth of the reptiles
2. ✔ suggest they spent most of there time on land,
3. ✘ though close to freshwater, feeding on tough plants
4. ✘ such as ferns and conifers.

Question Number : 50 Question Id : 627289550 Display Question Number : Yes Single Line Question Option : No Option Orientation : Vertical

The passage below has been given in four parts as options. One of the parts contains an error. Select the option that has the error:

Options :

1. ✘ The bones and teeth of the reptiles
2. ✔ suggest they spent most of there time on land,
3. ✘ though close to freshwater, feeding on tough plants
4. ✘ such as ferns and conifers.

Question Number : 51 Question Id : 627289551 Display Question Number : Yes Single Line Question Option : No Option Orientation : Vertical

From the options given below choose the one that has the correct spelling of the highlighted word:

Options :

1. ✘
Plant-eating dinosaurs had more complex diets than we assumed that they had, and these diets included feeding on some animals, including at least **crustaceians**, and this was more like diets of modern plant-eating birds.
2. ✘
Plant-eating dinosaurs had more complex diets than we assumed that they had, and these diets included feeding on some animals, including at least **crutsaceans**, and this was more like diets of modern plant-eating birds.
3. ✔
Plant-eating dinosaurs had more complex diets than we assumed that they had, and these diets included feeding on some animals, including at least **crustaceans**, and this was more like diets of modern plant-eating birds.
4. ✘
Plant-eating dinosaurs had more complex diets than we assumed that they had, and these diets included feeding on some animals, including at least **curstaceans**, and this was more like diets of modern plant-eating birds.

Question Number : 51 Question Id : 627289551 Display Question Number : Yes Single Line Question Option : No Option Orientation : Vertical

From the options given below choose the one that has the correct spelling of the highlighted word:

Options :

1. ✘

Plant-eating dinosaurs had more complex diets than we assumed that they had, and these diets included feeding on some animals, including at least **crustaceians**, and this was more like diets of modern plant-eating birds.

2. ✘

Plant-eating dinosaurs had more complex diets than we assumed that they had, and these diets included feeding on some animals, including at least **crutsaceans**, and this was more like diets of modern plant-eating birds.

3. ✔

Plant-eating dinosaurs had more complex diets than we assumed that they had, and these diets included feeding on some animals, including at least **crustaceans**, and this was more like diets of modern plant-eating birds.

4. ✘

Plant-eating dinosaurs had more complex diets than we assumed that they had, and these diets included feeding on some animals, including at least **curstaceans**, and this was more like diets of modern plant-eating birds.

Question Number : 52 Question Id : 627289552 Display Question Number : Yes Single Line Question Option : No Option Orientation : Vertical

Select the option that offers the correct synonym of the highlighted word in the sentence given below. Pay attention to the meaning of the highlighted word in the context of the sentence:

Nowadays, Indian comics remain fairly **alien** to children who, unsurprisingly, exchange Harry Potter trivia like greetings.

Options :

1. ✔ unknown

2. ✘ hidden

3. ✘ relevant

4. ✘ foreigner

Question Number : 52 Question Id : 627289552 Display Question Number : Yes Single Line Question Option : No Option Orientation : Vertical

Select the option that offers the correct synonym of the highlighted word in the sentence given below. Pay attention to the meaning of the highlighted word in the context of the sentence:

Nowadays, Indian comics remain fairly **alien** to children who, unsurprisingly, exchange Harry Potter trivia like greetings.

Options :

1. ✔ unknown

2. ✘ hidden
3. ✘ relevant
4. ✘ foreigner

Question Number : 53 Question Id : 627289553 Display Question Number : Yes Single Line Question Option : No Option Orientation : Vertical

Select the option that offers the correct synonym of the highlighted word in the sentence given below. Pay attention to the meaning of the highlighted word **in the context of the sentence**:

The **secretive** communist state said that its sixth nuclear test was a "perfect success", hours after seismologists had detected an earth tremor.

Options :

1. ✘ transparent
2. ✘ cryptic
3. ✔ communicative
4. ✘ in private

Question Number : 53 Question Id : 627289553 Display Question Number : Yes Single Line Question Option : No Option Orientation : Vertical

Select the option that offers the correct synonym of the highlighted word in the sentence given below. Pay attention to the meaning of the highlighted word **in the context of the sentence**:

The **secretive** communist state said that its sixth nuclear test was a "perfect success", hours after seismologists had detected an earth tremor.

Options :

1. ✘ transparent
2. ✘ cryptic
3. ✔ communicative
4. ✘ in private

Question Number : 54 Question Id : 627289554 Display Question Number : Yes Single Line Question Option : No Option Orientation : Vertical

Select from the options given below the one that employs an appropriate tag question:

I'm the shortest, _____

Options :

1. aren't I?
2. am I?
3. isn't I?
4. am not I?

Question Number : 54 Question Id : 627289554 Display Question Number : Yes Single Line Question Option : No Option Orientation : Vertical

Select from the options given below the one that employs an appropriate tag question:

I'm the shortest, _____

Options :

1. aren't I?
2. am I?
3. isn't I?
4. am not I?

Question Number : 55 Question Id : 627289555 Display Question Number : Yes Single Line Question Option : No Option Orientation : Vertical

From the options given below select the one that has the prepositions placed correctly to form a proper sentence:

Options :

1. Indonesia has issued its highest level alert from a volcano on Bali, warning that an eruption on the popular tourist island could be imminent.
2. Indonesia has issued its highest level alert for a volcano in Bali, warning that an eruption between the popular tourist island could be imminent.
3. Indonesia has issued its highest level alert from a volcano onto Bali, warning that an eruption on the popular tourist island could be imminent.
4. Indonesia has issued its highest level alert for a volcano on Bali, warning that an eruption on the popular tourist island could be imminent.

Question Number : 55 Question Id : 627289555 Display Question Number : Yes Single Line Question Option : No Option Orientation : Vertical

From the options given below select the one that has the prepositions placed correctly to form a proper sentence:

Options :

1. ✘

Indonesia has issued its highest level alert from a volcano on Bali, warning that an eruption on the popular tourist island could be imminent.

2. ✘

Indonesia has issued its highest level alert for a volcano in Bali, warning that an eruption between the popular tourist island could be imminent.

3. ✘

Indonesia has issued its highest level alert from a volcano onto Bali, warning that an eruption on the popular tourist island could be imminent.

4. ✔

Indonesia has issued its highest level alert for a volcano on Bali, warning that an eruption on the popular tourist island could be imminent.

Question Number : 56 Question Id : 627289556 Display Question Number : Yes Single Line Question Option : No Option Orientation : Vertical

“सदैव” शब्द में कौन-सी संधि है?

Options :

1. ✔ वृद्धि संधि

2. ✘ गुण संधि

3. ✘ यण् संधि

4. ✘ दीर्घ संधि

Question Number : 56 Question Id : 627289556 Display Question Number : Yes Single Line Question Option : No Option Orientation : Vertical

“सदैव” शब्द में कौन-सी संधि है?

Options :

1. ✔ वृद्धि संधि

2. ✘ गुण संधि

3. ✘ यण् संधि

4. ✘ दीर्घ संधि

Question Number : 57 Question Id : 627289557 Display Question Number : Yes Single Line Question Option : No Option Orientation : Vertical

‘देश-विदेश’ में कौन-सा समास है?

Options :

1. ✘ अव्ययीभाव

2. ✘ तत्पुरुष

3. ✔ द्वंद्व

4. ✘ द्विगु

Question Number : 57 Question Id : 627289557 Display Question Number : Yes Single Line Question Option : No Option Orientation : Vertical

‘देश-विदेश’ में कौन-सा समास है?

Options :

1. ✘ अव्ययीभाव

2. ✘ तत्पुरुष

3. ✔ द्वंद्व

4. ✘ द्विगु

Question Number : 58 Question Id : 627289558 Display Question Number : Yes Single Line Question Option : No Option Orientation : Vertical

‘प्रतिदिन होने वाला’ के लिए एक शब्द होगा:

Options :

1. ✘ दिवाकर

2. ✘ प्रतिदिन

3. ✔ दैनिक

4. ✘ दिवान्त

Question Number : 58 Question Id : 627289558 Display Question Number : Yes Single Line Question Option : No Option Orientation : Vertical

'प्रतिदिन होने वाला' के लिए एक शब्द होगा:

Options :

1. ✘ दिवाकर

2. ✘ प्रतिदिन

3. ✔ दैनिक

4. ✘ दिवान्त

Question Number : 59 Question Id : 627289559 Display Question Number : Yes Single Line Question Option : No Option Orientation : Vertical

'बादल' का पर्यायवाची नहीं है:

Options :

1. ✔ जलधि

2. ✘ जलद

3. ✘ जलधर

4. ✘ पयोद

Question Number : 59 Question Id : 627289559 Display Question Number : Yes Single Line Question Option : No Option Orientation : Vertical

'बादल' का पर्यायवाची नहीं है:

Options :

1. ✔ जलधि

2. ✘ जलद

3. ✘ जलधर

4. ✘ पयोद

Question Number : 60 Question Id : 627289560 Display Question Number : Yes Single Line Question Option : No Option Orientation : Vertical

‘अचल’ शब्द का विलोम होता है:

Options :

1. ✘ अचला
2. ✘ गमन
3. ✔ चल
4. ✘ गति

Question Number : 60 Question Id : 627289560 Display Question Number : Yes Single Line Question Option : No Option Orientation : Vertical

‘अचल’ शब्द का विलोम होता है:

Options :

1. ✘ अचला
2. ✘ गमन
3. ✔ चल
4. ✘ गति

Question Number : 61 Question Id : 627289561 Display Question Number : Yes Single Line Question Option : No Option Orientation : Vertical

कौन-से शब्द की वर्तनी अशुद्ध है?

Options :

1. ✘ निरीक्षण
2. ✘ परीक्षण
3. ✘ निर्जन
4. ✔ निरिक्षण

Question Number : 61 Question Id : 627289561 Display Question Number : Yes Single Line Question Option : No Option Orientation : Vertical

कौन-से शब्द की वर्तनी अशुद्ध है?

Options :

1. ✘ निरीक्षण
2. ✘ परीक्षण
3. ✘ निर्जन
4. ✔ निरिक्षण

Question Number : 62 Question Id : 627289562 Display Question Number : Yes Single Line Question Option : No Option Orientation : Vertical

कौन-सा शब्द तत्सम है?

Options :

1. ✘ साँप
2. ✘ सूरज
3. ✔ पुत्र
4. ✘ हाथ

Question Number : 62 Question Id : 627289562 Display Question Number : Yes Single Line Question Option : No Option Orientation : Vertical

कौन-सा शब्द तत्सम है?

Options :

1. ✘ साँप
2. ✘ सूरज
3. ✔ पुत्र
4. ✘ हाथ

Question Number : 63 Question Id : 627289563 Display Question Number : Yes Single Line Question Option : No Option Orientation : Vertical

'घृणा प्रकट करना' के लिए मुहावरा होता है:

Options :

1. ✔ नाक भौंह चढ़ाना

2. ✘ नौ दो ग्यारह होना

3. ✘ पगडी उतारना

4. ✘ नाक पर मक्खी न बैठने देना

Question Number : 63 Question Id : 627289563 Display Question Number : Yes Single Line Question Option : No Option Orientation : Vertical

‘घृणा प्रकट करना’ के लिए मुहावरा होता है:

Options :

1. ✔ नाक भौंह चढ़ाना

2. ✘ नौ दो ग्यारह होना

3. ✘ पगडी उतारना

4. ✘ नाक पर मक्खी न बैठने देना

Question Number : 64 Question Id : 627289564 Display Question Number : Yes Single Line Question Option : No Option Orientation : Vertical

निम्नलिखित में से कौन-सा शब्द तद्भव है?

Options :

1. ✘ चंद्रमा

2. ✘ सूर्य

3. ✔ चैत

4. ✘ वानर

Question Number : 64 Question Id : 627289564 Display Question Number : Yes Single Line Question Option : No Option Orientation : Vertical

निम्नलिखित में से कौन-सा शब्द तद्भव है?

Options :

1. ✘ चंद्रमा

2. ✘ सूर्य

3. ✓ चैत

4. ✗ वानर

Question Number : 65 Question Id : 627289565 Display Question Number : Yes Single Line Question Option : No Option Orientation : Vertical

'कर' शब्द का अर्थ नहीं है:

Options :

1. ✗ किरण

2. ✗ हाथ

3. ✗ टैक्स

4. ✓ घोड़ा

Question Number : 65 Question Id : 627289565 Display Question Number : Yes Single Line Question Option : No Option Orientation : Vertical

'कर' शब्द का अर्थ नहीं है:

Options :

1. ✗ किरण

2. ✗ हाथ

3. ✗ टैक्स

4. ✓ घोड़ा

Question Number : 66 Question Id : 627289566 Display Question Number : Yes Single Line Question Option : No Option Orientation : Vertical

Two numbers are in ratio 3 : 5 and their HCF is 20. Their LCM is:

Options :

1. ✗ 30

2. ✓ 300

3. ✗ 60

4. ✘ 10

Question Number : 66 Question Id : 627289566 Display Question Number : Yes Single Line Question Option : No Option Orientation : Vertical

दो संख्याओं का अनुपात 3 : 5 तथा उनका महत्तम समापवर्तक 20 है। उनका लघुत्तम समापवर्त्य है:

Options :

1. ✘ 30

2. ✔ 300

3. ✘ 60

4. ✘ 10

Question Number : 67 Question Id : 627289567 Display Question Number : Yes Single Line Question Option : No Option Orientation : Vertical

The average age a couple married in the year 2000 was 23 years. After 5 years, the average age of the couple along with their kid was 20 years. The current age of the kid is:

Options :

1. ✘ 4.5 years

2. ✘ 5 years

3. ✔ 4 years

4. ✘ 3.5 years

Question Number : 67 Question Id : 627289567 Display Question Number : Yes Single Line Question Option : No Option Orientation : Vertical

वर्ष 2000 में विवाहित एक दम्पति की औसत आयु 23 वर्ष थी। 5 वर्ष बाद, दम्पति की उनके बच्चे के साथ औसत आयु 20 वर्ष थी। वर्तमान में बच्चे की आयु है:

Options :

1. ✘ 4.5 वर्ष

2. ✘ 5 वर्ष

3. ✔ 4 वर्ष

4. ✘ 3.5 वर्ष

Question Number : 68 Question Id : 627289568 Display Question Number : Yes Single Line Question Option : No Option Orientation : Vertical

A person deposits ₹ 12,000 each at 20% per annum in two banks for one year, with compound interest calculated per annum and other for compound interest calculated semi-annually. The difference in their interest is:

Options :

1. ✘ ₹ 110
2. ✘ ₹ 115
3. ✘ ₹ 150
4. ✔ ₹ 120

Question Number : 68 Question Id : 627289568 Display Question Number : Yes Single Line Question Option : No Option Orientation : Vertical

एक व्यक्ति ₹ 12,000 की धनराशि 20% की वार्षिक दर पर दो बैंकों में एक वर्ष के लिए जमा करता है। एक बैंक में ब्याज़ वार्षिक तौर पर संयोजित होता है और दूसरे में ब्याज़ अर्धवार्षिक तौर पर संयोजित होता है। उनके ब्याज़ में अंतर है:

Options :

1. ✘ ₹ 110
2. ✘ ₹ 115
3. ✘ ₹ 150
4. ✔ ₹ 120

Question Number : 69 Question Id : 627289569 Display Question Number : Yes Single Line Question Option : No Option Orientation : Vertical

If 15% of X is equal to 8% of Y, then 20% of X is equal to ____% of Y (round to one decimal)

Options :

1. ✘ 10.6
2. ✘ 10.8
3. ✔ 10.7
4. ✘ 10.5

Question Number : 69 Question Id : 627289569 Display Question Number : Yes Single Line Question Option : No Option Orientation : Vertical

यदि X का 15% Y के 8% के बराबर है, तो X का 20% Y के _____% के बराबर है
(दशमलव के एक स्थान तक पूर्णांकित किया हुआ।)

Options :

1. ✘ 10.6
2. ✘ 10.8
3. ✔ 10.7
4. ✘ 10.5

Question Number : 70 Question Id : 627289570 Display Question Number : Yes Single Line Question Option : No Option Orientation : Vertical

The number of real roots of the equation $x^2 + |x| - 4 = 0$ is:

Options :

1. ✘ 4
2. ✔ 2
3. ✘ 0
4. ✘ 1

Question Number : 70 Question Id : 627289570 Display Question Number : Yes Single Line Question Option : No Option Orientation : Vertical

समीकरण $x^2 + |x| - 4 = 0$ के वास्तविक मूलों की संख्या है:

Options :

1. ✘ 4
2. ✔ 2
3. ✘ 0
4. ✘ 1

Question Number : 71 Question Id : 627289571 Display Question Number : Yes Single Line Question Option : No Option Orientation : Vertical

A and B work in the same company. Salaries of A and B are in the ratio 4:7. A's salary is increased by 50% whereas B's salary is reduced by 25%. Now their salary is the ratio of 8 : 7. Then A's salary is:

Options :

1. ✘ ₹ 15,000
2. ✘ ₹ 25,000
3. ✘ ₹ 35,000
4. ✔ Data not sufficient

Question Number : 71 Question Id : 627289571 Display Question Number : Yes Single Line Question Option : No Option Orientation : Vertical

A और B एक ही कंपनी में कार्य करते हैं। A और B के वेतन का अनुपात 4 : 7 है। यदि A के वेतन में 50% की वृद्धि की जाती है और B के वेतन में 25% की कमी की जाती है। यदि अब उनके वेतन का अनुपात 8 : 7 है, तो A का वेतन होगा:

Options :

1. ✘ ₹ 15,000
2. ✘ ₹ 25,000
3. ✘ ₹ 35,000
4. ✔ आँकड़े पर्याप्त नहीं हैं।

Question Number : 72 Question Id : 627289572 Display Question Number : Yes Single Line Question Option : No Option Orientation : Vertical

Pankaj takes 9 hours 55 minutes in walking a distance and riding back to same place where he started. He could walk both ways in 12 hours 30 minutes. Time taken to ride back both ways is:

Options :

1. ✘ 7 hours 25 minutes
2. ✔ 7 hours 20 minutes
3. ✘ 7 hours 10 minutes
4. ✘ 7 hours 30 minutes

Question Number : 72 Question Id : 627289572 Display Question Number : Yes Single Line Question Option : No Option Orientation : Vertical

पंकज एक दूरी को पैदल तय करने और वाहन से वापस शुरूआती स्थान पर आने में कुल 9 घंटे 55 मिनट का समय लेता है। वह दोनों ओर का रास्ता पैदल 12 घंटे 30 मिनट में तय कर सकता है। दोनों ओर वाहन से दूरी तय करने में लगने वाला समय है:

Options :

1. ✘ 7 घंटे 25 मिनट
2. ✔ 7 घंटे 20 मिनट
3. ✘ 7 घंटे 10 मिनट
4. ✘ 7 घंटे 30 मिनट

Question Number : 73 Question Id : 627289573 Display Question Number : Yes Single Line Question Option : No Option Orientation : Vertical

A shop owner sells his goods such that the cost price is 20% of the selling price. The profit percentage is:

Options :

1. ✘ 450%
2. ✘ 350%
3. ✔ 400%
4. ✘ 375%

Question Number : 73 Question Id : 627289573 Display Question Number : Yes Single Line Question Option : No Option Orientation : Vertical

एक दूकानदार अपनी वस्तुओं को इस प्रकार बेचता है कि क्रय मूल्य विक्रय मूल्य का 20% होता है। लाभ प्रतिशत है:

Options :

1. ✘ 450%
2. ✘ 350%
3. ✔ 400%
4. ✘ 375%

Question Number : 74 Question Id : 627289574 Display Question Number : Yes Single Line Question Option : No Option Orientation : Vertical

In what ratio must water be mixed with milk costing ₹ 15 per litre to obtain a mixture worth ₹ 9 per litre?

Options :

1. ✘ 1 : 2
2. ✔ 2 : 3

3. ✘ 3 : 2

4. ✘ 2 : 1

Question Number : 74 Question Id : 627289574 Display Question Number : Yes Single Line Question Option : No Option Orientation : Vertical

₹ 15 प्रति लीटर वाले दूध में पानी किस अनुपात में मिलाया जाना चाहिए कि प्राप्त मिश्रण का मूल्य ₹ 9 प्रति लीटर हो?

Options :

1. ✘ 1 : 2

2. ✔ 2 : 3

3. ✘ 3 : 2

4. ✘ 2 : 1

Question Number : 75 Question Id : 627289575 Display Question Number : Yes Single Line Question Option : No Option Orientation : Vertical

What is a single discount equivalent to the discount series of 14% and 11%?

Options :

1. ✘ 24.5%

2. ✘ 23.44%

3. ✔ 23.46%

4. ✘ 26%

Question Number : 75 Question Id : 627289575 Display Question Number : Yes Single Line Question Option : No Option Orientation : Vertical

14% और 11% की छूट श्रृंखलाओं के लिए एक समतुल्य छूट क्या होगी?

Options :

1. ✘ 24.5%

2. ✘ 23.44%

3. ✔ 23.46%

4. ✘ 26%

Question Number : 76 Question Id : 627289576 Display Question Number : Yes Single Line Question Option : No Option Orientation : Vertical

A block of marble is suspended in air by a spring balance. The reading of the balance is 1.00 kg. When the piece is submerged in water, the scale reads 0.60 kg. The density of marble is:

Options :

1. ✘ $1.4 \times 10^3 \text{ kg m}^{-3}$
2. ✔ $2.5 \times 10^3 \text{ kg m}^{-3}$
3. ✘ $3.2 \times 10^3 \text{ kg m}^{-3}$
4. ✘ $3.6 \times 10^3 \text{ kg m}^{-3}$

Question Number : 76 Question Id : 627289576 Display Question Number : Yes Single Line Question Option : No Option Orientation : Vertical

संगमरमर का एक टुकड़ा हवा में कमानीदार तुला से लटका हुआ है। तुला का पाठ्यांक 1.00 किग्रा है। जब यह वस्तु पानी में डुबाई जाती है, तो तुला का पाठ्यांक 0.60 किग्रा होता है। संगमरमर का घनत्व है:

Options :

1. ✘ $1.4 \times 10^3 \text{ किग्रा मी}^{-3}$
2. ✔ $2.5 \times 10^3 \text{ किग्रा मी}^{-3}$
3. ✘ $3.2 \times 10^3 \text{ किग्रा मी}^{-3}$
4. ✘ $3.6 \times 10^3 \text{ किग्रा मी}^{-3}$

Question Number : 77 Question Id : 627289577 Display Question Number : Yes Single Line Question Option : No Option Orientation : Vertical

An object is thrown vertically upwards with a velocity of 40 m/s. The total distance travelled by it in five seconds is: (take $g = 10 \text{ m/s}^2$)

Options :

1. ✘ 75 m
2. ✘ 80 m
3. ✔ 85 m

4. ✘ 90 m

Question Number : 77 Question Id : 627289577 Display Question Number : Yes Single Line Question Option : No Option Orientation : Vertical

एक वस्तु 40 मी/से के वेग से उर्ध्वाधर रूप से ऊपर की ओर फेंकी जाती है। पांचवें सेकंड में इसके द्वारा तय की गई दूरी होगी: ($g = 10$ मी/से²)

Options :

1. ✘ 75 मी

2. ✘ 80 मी

3. ✔ 85 मी

4. ✘ 90 मी

Question Number : 78 Question Id : 627289578 Display Question Number : Yes Single Line Question Option : No Option Orientation : Vertical

An object is placed along the principal axis of a convex lens at a distance more than its focal length and less than twice of its focal length. The image formed by the lens is:

Options :

1. ✘ Real and of the same size

2. ✔ Real and enlarged

3. ✘ Virtual and diminished

4. ✘ Virtual and enlarged

Question Number : 78 Question Id : 627289578 Display Question Number : Yes Single Line Question Option : No Option Orientation : Vertical

एक वस्तु को उत्तल लेंस के मुख्य अक्ष पर इसकी फोकल लम्बाई से अधिक दूरी पर और इसकी फोकल लम्बाई के दोगुने से कम दूरी पर रखा गया है। लेंस द्वारा बनाया गया प्रतिबिंब होगा:

Options :

1. ✘ वास्तविक और समान आकार का

2. ✔ वास्तविक और अभिवर्धित

3. ✘ आभासी और हासित

4. ✘ आभासी और अभिवर्धित

Question Number : 79 Question Id : 627289579 Display Question Number : Yes Single Line Question Option : No Option Orientation : Vertical

A ray of light passes from air into a slab of glass. As it passes from air to glass, its:

Options :

1. ✘ Frequency decreases and speed increases
2. ✘ Frequency increases and speed decreases
3. ✘ Frequency remains the same but speed increases
4. ✔ Frequency remains the same but speed decreases

Question Number : 79 Question Id : 627289579 Display Question Number : Yes Single Line Question Option : No Option Orientation : Vertical

प्रकाश की एक किरण हवा में से कांच के एक स्लैब में से गुज़रती है। जब यह हवा में से कांच में प्रवेश करती है तो इसकी:

Options :

1. ✘ आवृत्ति घटती और गति बढ़ती है
2. ✘ आवृत्ति बढ़ती और गति घटती है
3. ✘ आवृत्ति समान रहती है लेकिन गति बढ़ती है
4. ✔ आवृत्ति समान रहती है लेकिन गति घटती है

Question Number : 80 Question Id : 627289580 Display Question Number : Yes Single Line Question Option : No Option Orientation : Vertical

An object is placed 30 cm in front of a convex mirror of focal length 20 cm. Following Cartesian sign convention, the image distance v , and the magnification m , are expressed respectively as:

Options :

1. ✘ 12.0 cm, -0.4
2. ✔ 12.0 cm, 0.4
3. ✘ 60 cm, -2.0

4. ✘ 60 cm, 2

Question Number : 80 Question Id : 627289580 Display Question Number : Yes Single Line Question Option : No Option Orientation : Vertical

एक वस्तु 20 सेमी फोकल लम्बाई के एक उत्तल दर्पण के सामने 30 सेमी की दूरी पर रखी हुई है। निम्नलिखित कार्तीय चिह्न संकेत में, प्रतिबिंब की दूरी v और आवर्धन m क्रमशः इस प्रकार दर्शाए जाएंगे:

Options :

1. ✘ 12.0 सेमी, -0.4

2. ✔ 12.0 सेमी, 0.4

3. ✘ 60 सेमी, -2.0

4. ✘ 60 सेमी, 2

Question Number : 81 Question Id : 627289581 Display Question Number : Yes Single Line Question Option : No Option Orientation : Vertical

Which one of the following elements outermost shell's electronic configuration is similar to that of nitrogen?

Options :

1. ✔ Phosphorous

2. ✘ Sulphur

3. ✘ Oxygen

4. ✘ Chlorine

Question Number : 81 Question Id : 627289581 Display Question Number : Yes Single Line Question Option : No Option Orientation : Vertical

निम्नलिखित तत्वों में से किसके बाह्यतम कोश का इलेक्ट्रॉनिक विन्यास नाइट्रोजन के समान होता है?

Options :

1. ✔ फॉस्फोरस

2. ✘ सल्फर

3. ✘ ऑक्सीजन

4. ✘ क्लोरीन

Question Number : 82 Question Id : 627289582 Display Question Number : Yes Single Line Question Option : No Option Orientation : Vertical

What is the IUPAC name of acetic acid?

Options :

1. ✘ Propanoic acid
2. ✔ Ethanoic acid
3. ✘ Butanoic acid
4. ✘ Pentanoic acid

Question Number : 82 Question Id : 627289582 Display Question Number : Yes Single Line Question Option : No Option Orientation : Vertical

एसेटिक अम्ल का आई.यू.पी.ए.सी. नाम क्या है?

Options :

1. ✘ प्रोपेनाइक अम्ल
2. ✔ इथेनाइक अम्ल
3. ✘ ब्यूटेनाइक अम्ल
4. ✘ पेन्टेनाइक अम्ल

Question Number : 83 Question Id : 627289583 Display Question Number : Yes Single Line Question Option : No Option Orientation : Vertical

Which one of the following represents the mass of one mole of ethanol molecules?

Options :

1. ✔ 46 grams
2. ✘ 4.6 grams
3. ✘ 0.46 grams
4. ✘ 0.046 grams

Question Number : 83 Question Id : 627289583 Display Question Number : Yes Single Line Question Option : No Option Orientation : Vertical

निम्नलिखित में से कौन सा विकल्प इथेनाल अणुओं के एक मोल का द्रव्यमान दर्शाता है?

Options :

1. ✓ 46 ग्राम
2. ✗ 4.6 ग्राम
3. ✗ 0.46 ग्राम
4. ✗ 0.046 ग्राम

Question Number : 84 Question Id : 627289584 Display Question Number : Yes Single Line Question Option : No Option Orientation : Vertical

Which one of the following metals is employed as a catalyst for the hydrogenation of oils?

Options :

1. ✗ Aluminium
2. ✗ Magnesium
3. ✗ Sodium
4. ✓ Nickel

Question Number : 84 Question Id : 627289584 Display Question Number : Yes Single Line Question Option : No Option Orientation : Vertical

तेलों के हाइड्रोजनीकरण में निम्नलिखित में से कौन सी धातु उत्प्रेरक के रूप में प्रयुक्त होती है?

Options :

1. ✗ एल्युमिनियम
2. ✗ मैग्नीशियम
3. ✗ सोडियम
4. ✓ निकल

Question Number : 85 Question Id : 627289585 Display Question Number : Yes Single Line Question Option : No Option Orientation : Vertical

Alcohols in the presence of strong oxidising agents such as acidified potassium dichromate are oxidised to?

Options :

1. ✗ Alkenes

2. ✘ Amines

3. ✔ Carboxylic acids

4. ✘ Amides

Question Number : 85 Question Id : 627289585 Display Question Number : Yes Single Line Question Option : No Option Orientation : Vertical

अम्लीकृत पोटैशियम डाइक्रोमेट जैसे प्रबल ऑक्सीकारक की उपस्थिति में एल्कोहल इसमें ऑक्सीकृत होते हैं:

Options :

1. ✘ एल्कीन

2. ✘ अमाइन

3. ✔ कार्बोक्सिलिक अम्ल

4. ✘ अमाइड

Question Number : 86 Question Id : 627289586 Display Question Number : Yes Single Line Question Option : No Option Orientation : Vertical

What is Uday Shankar most known for?

Options :

1. ✘ Revival of Indian ragas

2. ✔ Revival of Indian classical dance

3. ✘ Revival of the progressive artists movement

4. ✘ Revival of Indian handicrafts

Question Number : 86 Question Id : 627289586 Display Question Number : Yes Single Line Question Option : No Option Orientation : Vertical

उदय शंकर किसके लिए सबसे अधिक प्रसिद्ध हैं?

Options :

1. ✘ भारतीय रागों के पुनरुद्धार के लिए

2. ✓ भारतीय शास्त्रीय नृत्य के पुनरुद्धार के लिए
3. ✘ प्रगतिशील कलाकार आंदोलन के पुनरुद्धार के लिए
4. ✘ भारतीय हस्तशिल्प कला के पुनरुद्धार के लिए

Question Number : 87 Question Id : 627289587 Display Question Number : Yes Single Line Question Option : No Option Orientation : Vertical

Name the first major newspaper in India, which was started in 1780.

Options :

1. ✘ Bombay Herald
2. ✘ Madras Courier
3. ✘ Calcutta Gazette
4. ✓ Hicky's Bengal Gazette

Question Number : 87 Question Id : 627289587 Display Question Number : Yes Single Line Question Option : No Option Orientation : Vertical

भारत के उस पहले प्रमुख समाचार पत्र का नाम बताएँ, जिसे 1780 में शुरू किया गया था।

Options :

1. ✘ बॉम्बे हेराल्ड
2. ✘ मद्रास कुरिएर
3. ✘ कलकत्ता गज़ेट
4. ✓ हिक्की का बंगाल गज़ेट

Question Number : 88 Question Id : 627289588 Display Question Number : Yes Single Line Question Option : No Option Orientation : Vertical

A body of land surrounded on three sides by water is called:

Options :

1. ✘ Gulf
2. ✓ Peninsula

3. ✘ Island

4. ✘ Bay

Question Number : 88 Question Id : 627289588 Display Question Number : Yes Single Line Question Option : No Option Orientation : Vertical

तीन तरफ़ से पानी से घिरा हुआ भूमि का भाग क्या कहलाता है?

Options :

1. ✘ गल्फ़

2. ✔ प्रायद्वीप

3. ✘ द्वीप

4. ✘ खाड़ी

Question Number : 89 Question Id : 627289589 Display Question Number : Yes Single Line Question Option : No Option Orientation : Vertical

In terms of Purchasing Power Parity (PPP), which is the country with the world's third-largest economy?

Options :

1. ✔ India

2. ✘ USA

3. ✘ Japan

4. ✘ Australia

Question Number : 89 Question Id : 627289589 Display Question Number : Yes Single Line Question Option : No Option Orientation : Vertical

क्रय शक्ति समता (पीपीपी) के संदर्भ में, विश्व की तीसरी सबसे बड़ी अर्थव्यवस्था किस देश की है?

Options :

1. ✔ भारत

2. ✘ यूएसए

3. ✘ जापान

4. ✘ ऑस्ट्रेलिया

Question Number : 90 Question Id : 627289590 Display Question Number : Yes Single Line Question Option : No Option Orientation : Vertical

What is the minimum age for a person to be elected as a member of Panchayat in India?

Options :

1. ✘ 20
2. ✔ 21
3. ✘ 19
4. ✘ 18

Question Number : 90 Question Id : 627289590 Display Question Number : Yes Single Line Question Option : No Option Orientation : Vertical

भारत में पंचायत के सदस्य के रूप में निर्वाचित होने के लिए न्यूनतम आयु क्या है?

Options :

1. ✘ 20
2. ✔ 21
3. ✘ 19
4. ✘ 18

Question Number : 91 Question Id : 627289591 Display Question Number : Yes Single Line Question Option : No Option Orientation : Vertical

A network of private computers infected with malicious software and controlled as a group without the knowledge of users, called as:

Options :

1. ✘ Malwarenet
2. ✘ Vironet
3. ✔ Botnet
4. ✘ In-net

Question Number : 91 Question Id : 627289591 Display Question Number : Yes Single Line Question Option : No Option Orientation : Vertical

उपयोगकर्ताओं के संज्ञान के बिना एक निजी कंप्यूटर के नेटवर्क को एक समूह के रूप में मैलिशियस सॉफ्टवेयर से प्रभावित करना और नियंत्रित करना क्या कहलाता है?

Options :

1. ✘ मालवेयरनेट
2. ✘ वाइरोनेट
3. ✔ बोटनेट
4. ✘ इन-नेट

Question Number : 92 Question Id : 627289592 Display Question Number : Yes Single Line Question Option : No Option Orientation : Vertical

What is the name of the new operating system released by Google for android devices?

Options :

1. ✘ Symbian
2. ✔ Oreo
3. ✘ Meego
4. ✘ Tizen

Question Number : 92 Question Id : 627289592 Display Question Number : Yes Single Line Question Option : No Option Orientation : Vertical

एंड्रॉइड उपकरणों के लिए गूगल द्वारा जारी किये गये नये ऑपरेटिंग सिस्टम का नाम क्या है?

Options :

1. ✘ सिम्बियन
2. ✔ ओरियो
3. ✘ मीगो
4. ✘ ताइज़ेन

Question Number : 93 Question Id : 627289593 Display Question Number : Yes Single Line Question Option : No Option Orientation : Vertical

For his excellence in which sport did Baichung Bhutia win the Arjuna award?

Options :

1. ✔ Football

2. ✘ Wrestling

3. ✘ Cricket

4. ✘ Boxing

Question Number : 93 Question Id : 627289593 Display Question Number : Yes Single Line Question Option : No Option Orientation : Vertical

बाईचुंग भूटिया ने किस खेल में उत्कृष्टता के लिए अर्जुन पुरस्कार जीता है?

Options :

1. ✔ फुटबॉल

2. ✘ कुश्ती

3. ✘ क्रिकेट

4. ✘ मुक्केबाज़ी

Question Number : 94 Question Id : 627289594 Display Question Number : Yes Single Line Question Option : No Option Orientation : Vertical

Which Indian Scientist won the prestigious Dan David Prize, 2017?

Options :

1. ✘ Dr. A. Sivathanu Pillai

2. ✔ Shrinivas Kulkarni

3. ✘ Suneet Singh Tuli

4. ✘ Vijay P. Bhatkar

Question Number : 94 Question Id : 627289594 Display Question Number : Yes Single Line Question Option : No Option Orientation : Vertical

किस भारतीय वैज्ञानिक ने प्रतिष्ठित डैन डेविड पुरस्कार, 2017 जीता था?

Options :

1. ✘ डॉ. ए. सिवथानु पिल्लै

2. ✔ श्रीनिवास कुलकर्णी

3. ✘ सुनीत सिंह तुली

4. ✘ विजय पी. भाटकर

Question Number : 95 Question Id : 627289595 Display Question Number : Yes Single Line Question Option : No Option Orientation : Vertical

When was World Metrology Day observed this year?

Options :

1. ✘ Thursday, 20 April

2. ✘ Tuesday, 20 June

3. ✘ Sunday, 20 August

4. ✔ Saturday, 20 May

Question Number : 95 Question Id : 627289595 Display Question Number : Yes Single Line Question Option : No Option Orientation : Vertical

विश्व मेट्रोलॉजी दिवस इस वर्ष किस दिन मनाया गया था?

Options :

1. ✘ बृहस्पतिवार, 20 अप्रैल

2. ✘ मंगलवार, 20 जून

3. ✘ रविवार, 20 अगस्त

4. ✔ शनिवार, 20 मई

Question Number : 96 Question Id : 627289596 Display Question Number : Yes Single Line Question Option : No Option Orientation : Vertical

If COCHIN is coded as 545738 and KASHMIR is coded as 2697130, then how would you code RANCHI?

Options :

1. ✘ 068753

2. ✘ 086753

3. ✓ 068573

4. ✗ 087563

Question Number : 96 Question Id : 627289596 Display Question Number : Yes Single Line Question Option : No Option Orientation : Vertical

यदि COCHIN को 545738 और KASHMIR को 2697130 के रूप में कोड किया जाता है, तो आप RANCHI को कैसे कोड करेंगे?

Options :

1. ✗ 068753

2. ✗ 086753

3. ✓ 068573

4. ✗ 087563

Question Number : 97 Question Id : 627289597 Display Question Number : Yes Single Line Question Option : No Option Orientation : Vertical

Complete the analogy.

BEGK: ADFJ :: GLPX : ?

Options :

1. ✗ HMQY

2. ✗ FOKW

3. ✗ FMOY

4. ✓ FKOW

Question Number : 97 Question Id : 627289597 Display Question Number : Yes Single Line Question Option : No Option Orientation : Vertical

सादृश्य को पूरा करें।

BEGK : ADFJ :: GLPX : ?

Options :

1. ✗ HMQY

2. ✗ FOKW

3. ✘ FMOY

4. ✔ FKOW

Question Number : 98 Question Id : 627289598 Display Question Number : Yes Single Line Question Option : No Option Orientation : Vertical

Select the word that has a similar meaning to the words on either side of the brackets.

CUT () OPENING

Options :

1. ✔ slit

2. ✘ puncture

3. ✘ sharp

4. ✘ wound

Question Number : 98 Question Id : 627289598 Display Question Number : Yes Single Line Question Option : No Option Orientation : Vertical

उस शब्द का चयन करें जिसका अर्थ कोष्ठक के दोनों तरफ़ दिए गए शब्दों के अर्थ के समान हो।

CUT () OPENING

Options :

1. ✔ slit

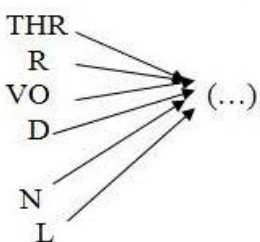
2. ✘ puncture

3. ✘ sharp

4. ✘ wound

Question Number : 99 Question Id : 627289599 Display Question Number : Yes Single Line Question Option : No Option Orientation : Vertical

Select the set of letters that, when added as suffix to the letter/set of letters from the image, forms a meaningful English word.

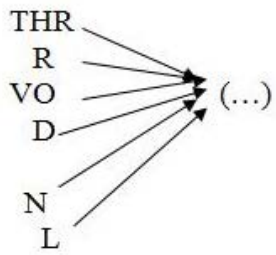


Options :

1. ✘ -eep
2. ✘ -ead
3. ✘ -ide
4. ✔ -ice

Question Number : 99 Question Id : 627289599 Display Question Number : Yes Single Line Question Option : No Option Orientation : Vertical

अक्षरों के उस समूह (समुच्चय) का चयन करें जिसे चित्र के अक्षर/अक्षर-समूहों के साथ प्रत्यय के रूप में जोड़े जाने पर एक अर्थपूर्ण अंग्रेज़ी शब्द बने।



Options :

1. ✘ -eep
2. ✘ -ead
3. ✘ -ide
4. ✔ -ice

Question Number : 100 Question Id : 627289600 Display Question Number : Yes Single Line Question Option : No Option Orientation : Vertical

Select the number that would complete the below series:

1, $\frac{1}{2}$, $\frac{1}{4}$, _____

Options :

1. ✔ $\frac{1}{8}$
2. ✘ $\frac{1}{6}$
3. ✘ 1

4. ✘ 0

Question Number : 100 Question Id : 627289600 Display Question Number : Yes Single Line Question Option : No Option Orientation : Vertical

उस संख्या का चयन करें जो नीचे दी गई श्रृंखला को पूर्ण करे:

1, $\frac{1}{2}$, $\frac{1}{4}$, _____

Options :

1. ✔ $\frac{1}{8}$

2. ✘ $\frac{1}{6}$

3. ✘ 1

4. ✘ 0