

Haryana Staff Selection Commission

Notations :

- 1.Options shown in green color and with ✓ icon are correct.
- 2.Options shown in red color and with ✗ icon are incorrect.

Subject Name:	CAT 4 Junior Scale Stenographer English CBT Exam
Total Marks:	200
Display Marks:	Yes
Calculator:	None
Magnifying Glass Required?:	No
Ruler Required?:	No
Eraser Required?:	No
Scratch Pad Required?:	No
Rough Sketch/Notepad Required?:	No
Protractor Required?:	No

CAT 4 Junior Scale Stenographer English CBT Exam

Group Marks: 200

CAT 4 Junior Scale Stenographer English CBT Exam

Section Marks:	200
Display Number Panel:	Yes
Group All Questions:	No

Question Number : 1 Question Id : 627289101 Display Question Number : Yes Single Line Question Option : No Option Orientation : Vertical

Who among the following died fighting on the side of Babur in the first battle of Panipat?

Options :

1. ✗ Daulat Khan
2. ✗ Hemu
3. ✓ Sanghar
4. ✗ Sangram Singh

Question Number : 1 Question Id : 627289101 Display Question Number : Yes Single Line Question Option : No Option Orientation : Vertical

पानीपत की पहली लड़ाई में बाबर की तरफ निम्नलिखित में से किस योद्धा की मृत्यु हो गयी थी?

Options :

1. ✘ दौलत खान
2. ✘ हेमू
3. ✔ संघार
4. ✘ संग्राम सिंह

Question Number : 2 Question Id : 627289102 Display Question Number : Yes Single Line Question Option : No Option Orientation : Vertical

Who among the following is considered the constant companion and source of inspiration for Sufi Saint Mohammad Sarmad?

Options :

1. ✔ Abhai Chand
2. ✘ Bu Ali Shah Qalandar
3. ✘ Dara Shikoh
4. ✘ Fariduddin Ganj-i-shakar

Question Number : 2 Question Id : 627289102 Display Question Number : Yes Single Line Question Option : No Option Orientation : Vertical

सूफी संत मोहम्मद सरमाद की प्रेरणा का निरंतर साथी और स्रोत निम्नलिखित में से किसे माना जाता है?

Options :

1. ✔ अभाय चन्द
2. ✘ बू अली शाह क़लंदर
3. ✘ दारा शिकोह
4. ✘ फरीदुद्दीन गंज-ए-शकर

Question Number : 3 Question Id : 627289103 Display Question Number : Yes Single Line Question Option : No Option Orientation : Vertical

Which of the following is a correct chronological order?

Options :

1. ✘ Churaman-Gukula-Rajaram
2. ✘ Gokula-Churaman-Rajaram
3. ✔ Gokula-Rajaram-Churaman
4. ✘ Rajaram-Churaman-Gokula

Question Number : 3 Question Id : 627289103 Display Question Number : Yes Single Line Question Option : No Option Orientation : Vertical

निम्नलिखित में से कौन सा सही कालानुक्रमिक क्रम है?

Options :

1. ✘ चूडामन-गोकुल-राजाराम
2. ✘ गोकुल-चूडामन-राजाराम
3. ✔ गोकुल-राजाराम-चूडामन
4. ✘ राजाराम-चूडामन-गोकुल

Question Number : 4 Question Id : 627289104 Display Question Number : Yes Single Line Question Option : No Option Orientation : Vertical

Which of the following is a correct chronological order?

Options :

1. ✘ Badan Singh-Churaman-Suraj Mal
2. ✘ Badan Singh-Suraj Mal-Churaman
3. ✘ Churamal-Suraj Mal-Badan Singh
4. ✔ Churaman-Badan Singh-Suraj Mal

Question Number : 4 Question Id : 627289104 Display Question Number : Yes Single Line Question Option : No Option Orientation : Vertical

निम्नलिखित में से कौन सा सही कालानुक्रमिक क्रम है?

Options :

1. ✘ बदन सिंह-चूडामन-सूरज मल
2. ✘ बदन सिंह-सूरज मल-चूडामन
3. ✘ चूडामन-सूरज मल-बदन सिंह
4. ✔ चूडामन-बदन सिंह-सूरज मल

Question Number : 5 Question Id : 627289105 Display Question Number : Yes Single Line Question Option : No Option Orientation : Vertical

The US-based tech giant Cisco has launched its 5th global cyber range lab in _____.

Options :

1. ✘ Karnal
2. ✘ Panchkula
3. ✔ Gurugram
4. ✘ Faridabad

Question Number : 5 Question Id : 627289105 Display Question Number : Yes Single Line Question Option : No Option Orientation : Vertical

अमेरिकी टेक जाइंट सिस्को ने _____ में अपनी 5वीं वैश्विक साइबर रेंज प्रयोगशाला शुरू की है।

Options :

1. ✘ करनाल
2. ✘ पंचकुला
3. ✔ गुरुग्राम
4. ✘ फरीदाबाद

Question Number : 6 Question Id : 627289106 Display Question Number : Yes Single Line Question Option : No Option Orientation : Vertical

The National Health Mission in Haryana recently launched the _____ app for creating awareness about pre and post-natal care among pregnant women.

Options :

1. ✓ Kilkari
2. ✗ Kalakari
3. ✗ Sulabh
4. ✗ BHIM

Question Number : 6 Question Id : 627289106 Display Question Number : Yes Single Line Question Option : No Option Orientation : Vertical

हाल ही में हरियाणा में राष्ट्रीय स्वास्थ्य मिशन ने गर्भवती महिलाओं में प्रसव पूर्व और प्रसव पश्चात् देखभाल के बारे में जागरूकता लाने के लिए _____ अप शुरु किया है।

Options :

1. ✓ किलकारी
2. ✗ कलाकारी
3. ✗ सुलभ
4. ✗ भीम

Question Number : 7 Question Id : 627289107 Display Question Number : Yes Single Line Question Option : No Option Orientation : Vertical

As per the announcement by the Ministry of Chemicals and Fertilizers, the Plastic Park will come up in the _____ district of Haryana.

Options :

1. ✗ Karnal
2. ✗ Sonipat
3. ✓ Panipat
4. ✗ Faridabad

Question Number : 7 Question Id : 627289107 Display Question Number : Yes Single Line Question Option : No Option Orientation : Vertical

रसायन और उर्वरक मंत्रालय की घोषणा के अनुसार, प्लास्टिक पार्क हरियाणा के _____ जिले में स्थापित किया जायेगा।

Options :

1. ✗ करनाल

2. ✘ सोनीपत

3. ✔ पानीपत

4. ✘ फ़रीदाबाद

Question Number : 8 Question Id : 627289108 Display Question Number : Yes Single Line Question Option : No Option Orientation : Vertical

The theme of the 2017 National Youth Festival (NYF) was:

Options :

1. ✘ Youth for Swachh Bharat

2. ✘ Youth for Green India

3. ✘ Youth for United India

4. ✔ Youth for Digital India

Question Number : 8 Question Id : 627289108 Display Question Number : Yes Single Line Question Option : No Option Orientation : Vertical

2017 में राष्ट्रीय युवा महोत्सव (एनवाईएफ) का विषय था:

Options :

1. ✘ स्वच्छ भारत के लिए युवा

2. ✘ ग्रीन इंडिया के लिए युवा

3. ✘ यूनाइटेड इंडिया के लिए युवा

4. ✔ डिजिटल इंडिया के लिए युवा

Question Number : 9 Question Id : 627289109 Display Question Number : Yes Single Line Question Option : No Option Orientation : Vertical

Which of the following books has **not** been authored by the comic poet Surendra Sharma?

Options :

1. ✘ Mansarovar Ke Kavve

2. ✔ Ghaat-Ghaat Ghoome

3. ✘ Buddhimaanon Ki Moorkhataein

4. ✘ Bade-Badon Ke Utpaat

Question Number : 9 Question Id : 627289109 Display Question Number : Yes Single Line Question Option : No Option Orientation : Vertical

हास्य कवि सुरेंद्र शर्मा ने निम्नलिखित में से कौन सी पुस्तक नहीं लिखी है?

Options :

1. ✘ मानसरोवर के कव्चे

2. ✔ घाट-घाट घूमें

3. ✘ बुद्धिमानों की मूर्खताएं

4. ✘ बड़े-बड़ों के उत्पात

Question Number : 10 Question Id : 627289110 Display Question Number : Yes Single Line Question Option : No Option Orientation : Vertical

The poetry 'Ab To Ansoo Ponchh' is authored by:

Options :

1. ✘ Shyam Sakha Shyam

2. ✘ Surendra Sharma

3. ✔ Alhar Bikaneri

4. ✘ Kavi Narsingh

Question Number : 10 Question Id : 627289110 Display Question Number : Yes Single Line Question Option : No Option Orientation : Vertical

कविता 'अब तो आंसू पोंछ' इन्होंने लिखी है:

Options :

1. ✘ श्याम सखा श्याम

2. ✘ सुरेंद्र शर्मा

3. ✔ अल्हड़ बीकानेरी

4. ✘ कवि नरसिंह

Question Number : 11 Question Id : 627289111 Display Question Number : Yes Single Line Question Option : No Option Orientation : Vertical

Which of the following books has been awarded the prestigious Vyas Samman 2015 instituted by the K. K. Birla foundation?

Options :

1. ✘ '1857 Ke Swatantrata Sangram Ki Bahadur Mahilaon Ki Kahaniyan' by Deepchand Nirmohi
2. ✔ 'Kshama' by Sunita Jain
3. ✘ 'Aankhom Mein Aasaman' by Gyan Prakash Vivek
4. ✘ 'Roula' by Narender Gulia

Question Number : 11 Question Id : 627289111 Display Question Number : Yes Single Line Question Option : No Option Orientation : Vertical

निम्नलिखित में से किस पुस्तक को के. के. बिड़ला फाउंडेशन द्वारा स्थापित प्रतिष्ठित व्यास सम्मान 2015 से सम्मानित किया गया?

Options :

1. ✘ दीपचंद निर्मोही रचित '1857 के स्वतंत्रता संग्राम की बहादुर महिलाओं की कहानियां'
2. ✔ सुनीता जैन रचित 'क्षमा'
3. ✘ ज्ञान प्रकाश विवेक रचित 'आंखों में आसमान'
4. ✘ नरेंद्र गुलिया रचित 'रौला'

Question Number : 12 Question Id : 627289112 Display Question Number : Yes Single Line Question Option : No Option Orientation : Vertical

How many cities/towns are there in Haryana as per 2011 Census?

Options :

1. ✘ 140
2. ✔ 154
3. ✘ 178

4. ✘ 185

Question Number : 12 Question Id : 627289112 Display Question Number : Yes Single Line Question Option : No Option Orientation : Vertical

2011 की जनगणना के अनुसार, हरियाणा में कितने शहर/ कस्बे हैं?

Options :

1. ✘ 140

2. ✔ 154

3. ✘ 178

4. ✘ 185

Question Number : 13 Question Id : 627289113 Display Question Number : Yes Single Line Question Option : No Option Orientation : Vertical

Which district of Haryana is known as the Bowl of Rice?

Options :

1. ✔ Karnal

2. ✘ Ambala

3. ✘ Bhiwani

4. ✘ Rohtak

Question Number : 13 Question Id : 627289113 Display Question Number : Yes Single Line Question Option : No Option Orientation : Vertical

हरियाणा का कौन सा जिला चावल के कटोरे के रूप में जाना जाता है?

Options :

1. ✔ करनाल

2. ✘ अंबाला

3. ✘ भिवानी

4. ✘ रोहतक

Question Number : 14 Question Id : 627289114 Display Question Number : Yes Single Line Question Option : No Option Orientation : Vertical

The height of the Shiwalik Mountains in Haryana varies from:

Options :

1. ✘ 500 to 1,500 metres
2. ✘ 700 to 1,800 metres
3. ✔ 900 to 2,300 metres
4. ✘ 1000 to 3,200 metres

Question Number : 14 Question Id : 627289114 Display Question Number : Yes Single Line Question Option : No Option Orientation : Vertical

हरियाणा में शिवालिक पर्वत की ऊंचाई है:

Options :

1. ✘ 500 से 1,500 मीटर
2. ✘ 700 से 1,800 मीटर
3. ✔ 900 से 2,300 मीटर
4. ✘ 1000 से 3,200 मीटर

Question Number : 15 Question Id : 627289115 Display Question Number : Yes Single Line Question Option : No Option Orientation : Vertical

Manohar Lal Khattar is the _____ Chief Minister of the state of Haryana.

Options :

1. ✔ 10th
2. ✘ 12th
3. ✘ 13th
4. ✘ 15th

Question Number : 15 Question Id : 627289115 Display Question Number : Yes Single Line Question Option : No Option Orientation : Vertical

मनोहर लाल खट्टर हरियाणा राज्य के _____ मुख्यमंत्री हैं।

Options :

1. ✓ 10वें
2. ✗ 12वें
3. ✗ 13वें
4. ✗ 15वें

Question Number : 16 Question Id : 627289116 Display Question Number : Yes Single Line Question Option : No Option Orientation : Vertical

A new phenomenon in the Haryanvi society that is adding further tension, in a society already reeling with tension amongst various castes is the social divide on the basis of:

Options :

1. ✗ Political status
2. ✗ Social status
3. ✓ Economic status
4. ✗ Intellectual status

Question Number : 16 Question Id : 627289116 Display Question Number : Yes Single Line Question Option : No Option Orientation : Vertical

हरियाणवी समाज में एक नई घटना, जो उस समाज में तनाव और बढ़ा रही है, जो कि पहले से ही विभिन्न जातियों के बीच तनाव से जूझ रहा है, वह _____ के आधार पर समाज को बांट रही है।

Options :

1. ✗ राजनीतिक स्थिति
2. ✗ सामाजिक स्थिति
3. ✓ आर्थिक स्थिति
4. ✗ बौद्धिक स्थिति

Question Number : 17 Question Id : 627289117 Display Question Number : Yes Single Line Question Option : No Option Orientation : Vertical

How many Lok Sabha constituencies are there in Haryana?

Options :

1. ✗ 8

2. ✓ 10

3. ✗ 12

4. ✗ 15

Question Number : 17 Question Id : 627289117 Display Question Number : Yes Single Line Question Option : No Option Orientation : Vertical

हरियाणा में कितने लोकसभा निर्वाचन क्षेत्र हैं?

Options :

1. ✗ 8

2. ✓ 10

3. ✗ 12

4. ✗ 15

Question Number : 18 Question Id : 627289118 Display Question Number : Yes Single Line Question Option : No Option Orientation : Vertical

Voter-verified paper audit trail (VVPAT) was used along with EVMs in ____ out of 90 assembly constituencies in Haryana.

Options :

1. ✗ 3

2. ✗ 5

3. ✓ 6

4. ✗ 9

Question Number : 18 Question Id : 627289118 Display Question Number : Yes Single Line Question Option : No Option Orientation : Vertical

हरियाणा के 90 विधानसभा क्षेत्रों में से ____ में ईवीएम के साथ वोटर वैरिफाइड पेपर ऑडिट ट्रायल (वीवीपीएटी) का उपयोग किया गया था।

Options :

1. ✗ 3

2. ✗ 5

3. ✓ 6

4. ✘ 9

Question Number : 19 Question Id : 627289119 Display Question Number : Yes Single Line Question Option : No Option Orientation : Vertical

_____ city is the biggest centre of 'Shoddy Yarn' in the world.

Options :

1. ✔ Panipat

2. ✘ Rewari

3. ✘ Sonipat

4. ✘ Jhajjar

Question Number : 19 Question Id : 627289119 Display Question Number : Yes Single Line Question Option : No Option Orientation : Vertical

_____ शहर विश्व में 'नकली सूत' का सबसे बड़ा केंद्र है।

Options :

1. ✔ पानीपत

2. ✘ रेवाड़ी

3. ✘ सोनीपत

4. ✘ झज्जर

Question Number : 20 Question Id : 627289120 Display Question Number : Yes Single Line Question Option : No Option Orientation : Vertical

There were as many as _____ protected wildlife sanctuaries in Haryana as on July 2017.

Options :

1. ✔ 8

2. ✘ 6

3. ✘ 10

4. ✘ 4

Question Number : 20 Question Id : 627289120 Display Question Number : Yes Single Line Question Option : No Option Orientation : Vertical

जुलाई 2017 तक हरियाणा में अधिकतम _____ संरक्षित वन्यजीव अभयारण्य थे।

Options :

1. ✓ 8
2. ✗ 6
3. ✗ 10
4. ✗ 4

Question Number : 21 Question Id : 627289121 Display Question Number : Yes Single Line Question Option : No Option Orientation : Vertical

As per the 2011 census, _____ is the most populous district among the following districts of Haryana.

Options :

1. ✓ Faridabad
2. ✗ Hisar
3. ✗ Bhiwani
4. ✗ Gurugram

Question Number : 21 Question Id : 627289121 Display Question Number : Yes Single Line Question Option : No Option Orientation : Vertical

2011 की जनगणना के अनुसार, हरियाणा के निम्नलिखित जिलों में से _____ सबसे अधिक आबादी वाला जिला है।

Options :

1. ✓ फरीदाबाद
2. ✗ हिसार
3. ✗ भिवानी
4. ✗ गुरुग्राम

Question Number : 22 Question Id : 627289122 Display Question Number : Yes Single Line Question Option : No Option Orientation : Vertical

The Vintage Car Rally is organised in the _____ district of Haryana.

Options :

1. ✗ Faridabad

2. ✓ Gurugram

3. ✗ Karnal

4. ✗ Rohtak

Question Number : 22 Question Id : 627289122 Display Question Number : Yes Single Line Question Option : No Option Orientation : Vertical

विंटेज कार रैली हरियाणा के _____ जिले में आयोजित की गयी थी।

Options :

1. ✗ फरीदाबाद

2. ✓ गुरुग्राम

3. ✗ करनाल

4. ✗ रोहतक

Question Number : 23 Question Id : 627289123 Display Question Number : Yes Single Line Question Option : No Option Orientation : Vertical

The Pinjore Heritage Festival 2017 will be the _____ edition of the event.

Options :

1. ✗ 7th

2. ✗ 11th

3. ✓ 12th

4. ✗ 5th

Question Number : 23 Question Id : 627289123 Display Question Number : Yes Single Line Question Option : No Option Orientation : Vertical

पिंजौर विरासत महोत्सव 2017 इस कार्यक्रम का _____ संस्करण होगा।

Options :

1. ✗ 7 वां

2. ✗ 11 वां

3. ✓ 12 वां

4. ✗ 5 वां

Question Number : 24 Question Id : 627289124 Display Question Number : Yes Single Line Question Option : No Option Orientation : Vertical

Which among the following places in Haryana is famous for sandalwood carvings?

Options :

1. ✓ Jhajjar

2. ✗ Hisar

3. ✗ Rohtak

4. ✗ Gurugram

Question Number : 24 Question Id : 627289124 Display Question Number : Yes Single Line Question Option : No Option Orientation : Vertical

निम्नलिखित में से कौन सा स्थान हरियाणा में चंदन की नक्काशी के लिए प्रसिद्ध है?

Options :

1. ✓ झज्जर

2. ✗ हिसार

3. ✗ रोहतक

4. ✗ गुरुग्राम

Question Number : 25 Question Id : 627289125 Display Question Number : Yes Single Line Question Option : No Option Orientation : Vertical

The Mango Mela, which is celebrated every year in Pinjore Gardens is a _____ day event.

Options :

1. ✗ nine

2. ✗ five

3. ✗ seven

4. ✓ two

Question Number : 25 Question Id : 627289125 Display Question Number : Yes Single Line Question Option : No Option Orientation : Vertical

आम मेला (मैंगो मेला), प्रत्येक वर्ष पिंजौर उद्यान में मनाया जाता है, जो _____ दिनों का कार्यक्रम होता है।

Options :

1. ✘ नौ

2. ✘ पांच

3. ✘ सात

4. ✔ दो

Question Number : 26 Question Id : 627289126 Display Question Number : Yes Single Line Question Option : No Option Orientation : Vertical

The pr series in the middle is represented by both _____.

Options :

1. ✘ Stroke and hook

2. ✘ Loop and circle

3. ✔ Hook and circle

4. ✘ Circle and hook

Question Number : 26 Question Id : 627289126 Display Question Number : Yes Single Line Question Option : No Option Orientation : Vertical

The pr series in the middle is represented by both _____.

Options :

1. ✘ Stroke and hook

2. ✘ Loop and circle

3. ✔ Hook and circle

4. ✘ Circle and hook

Question Number : 27 Question Id : 627289127 Display Question Number : Yes Single Line Question Option : No Option Orientation : Vertical

“told” is represented by _____ halved.

Options :

1. ✓ tl
2. ✗ tr
3. ✗ tel
4. ✗ lt

Question Number : 27 Question Id : 627289127 Display Question Number : Yes Single Line Question Option : No Option Orientation : Vertical

“told” is represented by _____ halved.

Options :

1. ✓ tl
2. ✗ tr
3. ✗ tel
4. ✗ lt

Question Number : 28 Question Id : 627289128 Display Question Number : Yes Single Line Question Option : No Option Orientation : Vertical

The “shun” hook is written on the _____ side of simple t, d and j.

Options :

1. ✗ Upper
2. ✓ Right
3. ✗ Left
4. ✗ Below

Question Number : 28 Question Id : 627289128 Display Question Number : Yes Single Line Question Option : No Option Orientation : Vertical

The “shun” hook is written on the _____ side of simple t, d and j.

Options :

1. ✗ Upper

2. ✓ Right

3. ✗ Left

4. ✗ Below

Question Number : 29 Question Id : 627289129 Display Question Number : Yes Single Line Question Option : No Option Orientation : Vertical

“Especially” is written with stroke _____.

Options :

1. ✓ S

2. ✗ Z

3. ✗ ses

4. ✗ sez

Question Number : 29 Question Id : 627289129 Display Question Number : Yes Single Line Question Option : No Option Orientation : Vertical

“Especially” is written with stroke _____.

Options :

1. ✓ S

2. ✗ Z

3. ✗ ses

4. ✗ sez

Question Number : 30 Question Id : 627289130 Display Question Number : Yes Single Line Question Option : No Option Orientation : Vertical

The consecutive vowels in words like “Question” are represented by the _____ sign.

Options :

1. ✗ Triphone

2. ✗ Diphthong

3. ✗ Vowel

4. ✓ Diphone

Question Number : 30 Question Id : 627289130 Display Question Number : Yes Single Line Question Option : No Option Orientation : Vertical

The consecutive vowels in words like “Question” are represented by the _____ sign.

Options :

1. ✘ Triphone
2. ✘ Diphthong
3. ✘ Vowel
4. ✔ Diphone

Question Number : 31 Question Id : 627289131 Display Question Number : Yes Single Line Question Option : No Option Orientation : Vertical

The vowel ‘aw’ is represented by a heavy _____.

Options :

1. ✔ Dash
2. ✘ Dot
3. ✘ Semi circle
4. ✘ Large circle

Question Number : 31 Question Id : 627289131 Display Question Number : Yes Single Line Question Option : No Option Orientation : Vertical

The vowel ‘aw’ is represented by a heavy _____.

Options :

1. ✔ Dash
2. ✘ Dot
3. ✘ Semi circle
4. ✘ Large circle

Question Number : 32 Question Id : 627289132 Display Question Number : Yes Single Line Question Option : No Option Orientation : Vertical

Distinctive outline “regard” is expressed by _____.

Options :

1. ✘ ray + gr + t full
2. ✘ ray + gr halved
3. ✔ ray + grt t
4. ✘ ray + grt d

Question Number : 32 Question Id : 627289132 Display Question Number : Yes Single Line Question Option : No Option Orientation : Vertical

Distinctive outline “regard” is expressed by _____.

Options :

1. ✘ ray + gr + t full
2. ✘ ray + gr halved
3. ✔ ray + grt t
4. ✘ ray + grt d

Question Number : 33 Question Id : 627289133 Display Question Number : Yes Single Line Question Option : No Option Orientation : Vertical

Intersection “s” represents the word _____.

Options :

1. ✘ Section
2. ✘ Sector
3. ✔ Society
4. ✘ Summon

Question Number : 33 Question Id : 627289133 Display Question Number : Yes Single Line Question Option : No Option Orientation : Vertical

Intersection “s” represents the word _____.

Options :

1. ✘ Section
2. ✘ Sector

3. ✓ Society

4. ✗ Summon

Question Number : 34 Question Id : 627289134 Display Question Number : Yes Single Line Question Option : No Option Orientation : Vertical

“much” in a phrase is represented by _____.

Options :

1. ✓ Mch

2. ✗ Ch

3. ✗ Chm

4. ✗ M

Question Number : 34 Question Id : 627289134 Display Question Number : Yes Single Line Question Option : No Option Orientation : Vertical

“much” in a phrase is represented by _____.

Options :

1. ✓ Mch

2. ✗ Ch

3. ✗ Chm

4. ✗ M

Question Number : 35 Question Id : 627289135 Display Question Number : Yes Single Line Question Option : No Option Orientation : Vertical

Short form ‘put’ is represented by stroke p ____ the line.

Options :

1. ✗ On

2. ✗ Above

3. ✓ Through

4. ✗ Below

Question Number : 35 Question Id : 627289135 Display Question Number : Yes Single Line Question Option : No Option Orientation : Vertical

Short form 'put' is represented by stroke p _____ the line.

Options :

1. ✘ On
2. ✘ Above
3. ✔ Through
4. ✘ Below

Question Number : 36 Question Id : 627289136 Display Question Number : Yes Single Line Question Option : No Option Orientation : Vertical

Words that end in 'ore' or 'air', however spelt, are written with second place _____ vowels.

Options :

1. ✘ Light
2. ✔ Heavy
3. ✘ Dark
4. ✘ Medium

Question Number : 36 Question Id : 627289136 Display Question Number : Yes Single Line Question Option : No Option Orientation : Vertical

Words that end in 'ore' or 'air', however spelt, are written with second place _____ vowels.

Options :

1. ✘ Light
2. ✔ Heavy
3. ✘ Dark
4. ✘ Medium

Question Number : 37 Question Id : 627289137 Display Question Number : Yes Single Line Question Option : No Option Orientation : Vertical

Short form "larger" is represented by jr _____ the line.

Options :

1. ✘ On

2. ✘ Through

3. ✔ Above

4. ✘ Below

Question Number : 37 Question Id : 627289137 Display Question Number : Yes Single Line Question Option : No Option Orientation : Vertical

Short form "larger" is represented by jr _____ the line.

Options :

1. ✘ On

2. ✘ Through

3. ✔ Above

4. ✘ Below

Question Number : 38 Question Id : 627289138 Display Question Number : Yes Single Line Question Option : No Option Orientation : Vertical

"on" at the end of a phrase is represented by _____ hook.

Options :

1. ✘ F

2. ✘ V

3. ✘ Fr

4. ✔ N

Question Number : 38 Question Id : 627289138 Display Question Number : Yes Single Line Question Option : No Option Orientation : Vertical

"on" at the end of a phrase is represented by _____ hook.

Options :

1. ✘ F

2. ✘ V

3. ✘ Fr

4. ✔ N

Question Number : 39 Question Id : 627289139 Display Question Number : Yes Single Line Question Option : No Option Orientation : Vertical

“gentleman” is _____ above the line.

Options :

1. ✓ j halved with f hook
2. ✗ j halved with n hook
3. ✗ j halved with v hook
4. ✗ j halved with r hook

Question Number : 39 Question Id : 627289139 Display Question Number : Yes Single Line Question Option : No Option Orientation : Vertical

“gentleman” is _____ above the line.

Options :

1. ✓ j halved with f hook
2. ✗ j halved with n hook
3. ✗ j halved with v hook
4. ✗ j halved with r hook

Question Number : 40 Question Id : 627289140 Display Question Number : Yes Single Line Question Option : No Option Orientation : Vertical

“shun” hook is written on the _____ side of a circle to straight strokes.

Options :

1. ✗ Left
2. ✗ Right
3. ✓ Opposite
4. ✗ Below

Question Number : 40 Question Id : 627289140 Display Question Number : Yes Single Line Question Option : No Option Orientation : Vertical

“shun” hook is written on the _____ side of a circle to straight strokes.

Options :

- 1. ✘ Left
- 2. ✘ Right
- 3. ✔ Opposite
- 4. ✘ Below

Question Number : 41 Question Id : 627289141 Display Question Number : Yes Single Line Question Option : No Option Orientation : Vertical

Select the right word given below to fill in the blank.



- A
- B
- C
- D

Options :

- 1. ✘ A
- 2. ✔ B
- 3. ✘ C
- 4. ✘ D

Question Number : 41 Question Id : 627289141 Display Question Number : Yes Single Line Question Option : No Option Orientation : Vertical

Select the right word given below to fill in the blank.



Options :

1. ✘ A

2. ✔ B

3. ✘ C

4. ✘ D

Question Number : 42 Question Id : 627289142 Display Question Number : Yes Single Line Question Option : No Option Orientation : Vertical

Construct a correct sentence.



Options :

1. ✘ A

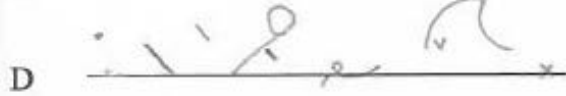
2. ✘ B

3. ✔ C

4. ✘ D

Question Number : 42 Question Id : 627289142 Display Question Number : Yes Single Line Question Option : No Option Orientation : Vertical

Construct a correct sentence.



Options :

1. ✘ A


2. ✘ B

3. ✔ C

4. ✘ D

Question Number : 43 Question Id : 627289143 Display Question Number : Yes Single Line Question Option : No Option Orientation : Vertical

Select the right word given below to fill in the blank.



A 

B 

C 

D 

Options :

1. A


2. B

3. C

4. D

Question Number : 43 Question Id : 627289143 Display Question Number : Yes Single Line Question Option : No Option Orientation : Vertical

Select the right word given below to fill in the blank.



A 

B 

C 

D 

Options :

1. ✓ A



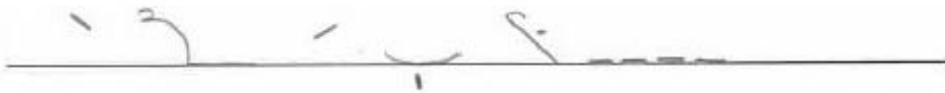
2. ✗ B

3. ✗ C

4. ✗ D

Question Number : 44 Question Id : 627289144 Display Question Number : Yes Single Line Question Option : No Option Orientation : Vertical

Choose from the options below and complete the phrase.



Options :

1. ✗ A


2. ✗ B

3. ✓ C

4. ✗ D

Question Number : 44 Question Id : 627289144 Display Question Number : Yes Single Line Question Option : No Option Orientation : Vertical

Choose from the options below and complete the phrase.



- A
- B
- C
- D

Options :

- 1. ✘ A
- 2. ✘ B
- 3. ✔ C
- 4. ✘ D

Question Number : 45 Question Id : 627289145 Display Question Number : Yes Single Line Question Option : No Option Orientation : Vertical

Select the right word given below to fill in the blank.



- A
- B
- C
- D

Options :

- 1. ✘ A

2. ✓ B

3. ✗ C

4. ✗ D

Question Number : 45 Question Id : 627289145 Display Question Number : Yes Single Line Question Option : No Option Orientation : Vertical

Select the right word given below to fill in the blank.



A _____

B _____

C _____

D _____

Options :

1. ✗ A

2. ✓ B

3. ✗ C

4. ✗ D

Question Number : 46 Question Id : 627289146 Display Question Number : Yes Single Line Question Option : No Option Orientation : Vertical

Fill in the blanks in the sentence below with suitable articles. Choose your answer from the options given.

Apple's new sensation iPhoneX will hit _____ Indian market on November 3 and _____ top-end 256 GB phone will cost _____ shade higher than ₹ 1 lakh.

Options :

1. ✓ the, the, a

2. ✘ a, the, the

3. ✘ a, a, the

4. ✘ the, a, the

Question Number : 46 Question Id : 627289146 Display Question Number : Yes Single Line Question Option : No Option Orientation : Vertical

Fill in the blanks in the sentence below with suitable articles. Choose your answer from the options given.

Apple's new sensation iPhoneX will hit ____ Indian market on November 3 and ____ top-end 256 GB phone will cost ____ shade higher than ₹ 1 lakh.

Options :

1. ✔ the, the, a

2. ✘ a, the, the

3. ✘ a, a, the

4. ✘ the, a, the

Question Number : 47 Question Id : 627289147 Display Question Number : Yes Single Line Question Option : No Option Orientation : Vertical

Fill in the blanks in the sentence below with suitable articles. Choose your answer from the options given.

____ First Lady of Japan, Akie Abe, will have pure vegetarian Indian lunch on Thursday during her visit to ____ Japan Information Centre.

Options :

1. ✘ A, the

2. ✔ The, the

3. ✘ A, a

4. ✘ The, a

Question Number : 47 Question Id : 627289147 Display Question Number : Yes Single Line Question Option : No Option Orientation : Vertical

Fill in the blanks in the sentence below with suitable articles. Choose your answer from the options given.

____ First Lady of Japan, Akie Abe, will have pure vegetarian Indian lunch on Thursday during her visit to ____ Japan Information Centre.

Options :

1. ✘ A, the
2. ✔ The, the
3. ✘ A, a
4. ✘ The, a

Question Number : 48 Question Id : 627289148 Display Question Number : Yes Single Line Question Option : No Option Orientation : Vertical

Fill in the blank in the sentence below with a suitable preposition. Choose your answer from the options given.

While passengers waited _____ the tarmac, security personnel conducted bag searches and sniffer dogs checked the aircraft.

Options :

1. ✘ under
2. ✔ on
3. ✘ in
4. ✘ over

Question Number : 48 Question Id : 627289148 Display Question Number : Yes Single Line Question Option : No Option Orientation : Vertical

Fill in the blank in the sentence below with a suitable preposition. Choose your answer from the options given.

While passengers waited _____ the tarmac, security personnel conducted bag searches and sniffer dogs checked the aircraft.

Options :

1. ✘ under
2. ✔ on
3. ✘ in
4. ✘ over

Question Number : 49 Question Id : 627289149 Display Question Number : Yes Single Line Question Option : No Option Orientation : Vertical

Fill in the blank in the sentence below with a suitable collective noun. Choose your answer from the options given.

My mother asked me to go to Big Bazaar and buy a _____ of bananas for her.

Options :

1. ✓ hand
2. ✗ finger
3. ✗ bundle
4. ✗ batch

Question Number : 49 Question Id : 627289149 Display Question Number : Yes Single Line Question Option : No Option Orientation : Vertical

Fill in the blank in the sentence below with a suitable collective noun. Choose your answer from the options given.

My mother asked me to go to Big Bazaar and buy a _____ of bananas for her.

Options :

1. ✓ hand
2. ✗ finger
3. ✗ bundle
4. ✗ batch

Question Number : 50 Question Id : 627289150 Display Question Number : Yes Single Line Question Option : No Option Orientation : Vertical

A sentence is given in four parts as options. One of the parts contains an error. Choose the option that has the error:

Options :

1. ✗ Alibaba's billionaire founder, Jack Ma, dressed
2. ✗ up as Michael Jackson last week and performed a choreographed
3. ✗ dance solo to "Billie Jean" for thousands of employees and
4. ✓ guests to celebrated the company's 18th anniversary

Question Number : 50 Question Id : 627289150 Display Question Number : Yes Single Line Question Option : No Option Orientation : Vertical

A sentence is given in four parts as options. One of the parts contains an error. Choose the option that has the error:

Options :

1. ✗ Alibaba's billionaire founder, Jack Ma, dressed
2. ✗ up as Michael Jackson last week and performed a choreographed

3. ✘ dance solo to "Billie Jean" for thousands of employees and
 4. ✔ guests to celebrated the company's 18th anniversary

Question Number : 51 Question Id : 627289151 Display Question Number : Yes Single Line Question Option : No Option Orientation : Vertical

Choose the option that offers the correct **synonym** of the highlighted word in the sentence given below. Pay attention to the meaning of the highlighted word in context of the sentence:

Anyone that has spent time with horses know they can deliver a mean kick, especially if they buck to deliver a blow with both **hind** feet.

Options :

1. ✔ rear
 2. ✘ later
 3. ✘ behind
 4. ✘ tail

Question Number : 51 Question Id : 627289151 Display Question Number : Yes Single Line Question Option : No Option Orientation : Vertical

Choose the option that offers the correct **synonym** of the highlighted word in the sentence given below. Pay attention to the meaning of the highlighted word in context of the sentence:

Anyone that has spent time with horses know they can deliver a mean kick, especially if they buck to deliver a blow with both **hind** feet.

Options :

1. ✔ rear
 2. ✘ later
 3. ✘ behind
 4. ✘ tail

Question Number : 52 Question Id : 627289152 Display Question Number : Yes Single Line Question Option : No Option Orientation : Vertical

Choose the option that offers the correct **antonym** of the highlighted word in the sentence given below. Pay attention to the meaning of the highlighted word in context of the sentence:

Koalas are **native** to Australia and classified as a "vulnerable" species.

Options :

1. ✘ unimportant

2. ✓ alien

3. ✗ indigenous

4. ✗ original

Question Number : 52 Question Id : 627289152 Display Question Number : Yes Single Line Question Option : No Option Orientation : Vertical

Choose the option that offers the correct **antonym** of the highlighted word in the sentence given below. Pay attention to the meaning of the highlighted word in context of the sentence:

Koalas are **native** to Australia and classified as a "vulnerable" species.

Options :

1. ✗ unimportant

2. ✓ alien

3. ✗ indigenous

4. ✗ original

Question Number : 53 Question Id : 627289153 Display Question Number : Yes Single Line Question Option : No Option Orientation : Vertical

From the options given below, choose the sentence that has the conjunctions used correctly.

Options :

1. ✗ No sooner had Tasneem finished one project then she started working on the next.

2. ✓ No sooner had Tasneem finished one project than she started working on the next.

3. ✗ No sooner had Tasneem finished one project when she started working on the next.

4. ✗ No sooner had Tasneem finished one project and she started working on the next.

Question Number : 53 Question Id : 627289153 Display Question Number : Yes Single Line Question Option : No Option Orientation : Vertical

From the options given below, choose the sentence that has the conjunctions used correctly.

Options :

1. ✗ No sooner had Tasneem finished one project then she started working on the next.

2. ✓ No sooner had Tasneem finished one project than she started working on the next.

3. ✘ No sooner had Tasneem finished one project when she started working on the next.

4. ✘ No sooner had Tasneem finished one project and she started working on the next.

Question Number : 54 Question Id : 627289154 Display Question Number : Yes Single Line Question Option : No Option Orientation : Vertical

From the options given below, choose the phrasal verb that can be used to fill in the blank.

Lung cancer is usually _____ by years of smoking.

Options :

1. ✔ brought on

2. ✘ bring it on

3. ✘ bring up

4. ✘ came up

Question Number : 54 Question Id : 627289154 Display Question Number : Yes Single Line Question Option : No Option Orientation : Vertical

From the options given below, choose the phrasal verb that can be used to fill in the blank.

Lung cancer is usually _____ by years of smoking.

Options :

1. ✔ brought on

2. ✘ bring it on

3. ✘ bring up

4. ✘ came up

Question Number : 55 Question Id : 627289155 Display Question Number : Yes Single Line Question Option : No Option Orientation : Vertical

From the options given below choose the one that has been spelt correctly to form a proper sentence.

Fustel de Coulanges was the most _____ of men, the most systematic and uncompromising of historians.

Options :

1. ✘ conscentious

2. ✔ conscientious

3. ✘ conscientius

4. ✘ consciensious

Question Number : 55 Question Id : 627289155 Display Question Number : Yes Single Line Question Option : No Option Orientation : Vertical

From the options given below choose the one that has been spelt correctly to form a proper sentence.

Fustel de Coulanges was the most _____ of men, the most systematic and uncompromising of historians.

Options :

1. ✘ conscentious

2. ✔ conscientious

3. ✘ conscientius

4. ✘ consciensious

Question Number : 56 Question Id : 627289156 Display Question Number : Yes Single Line Question Option : No Option Orientation : Vertical

‘पवित्र’ शब्द का सटीक विलोम होगा:

Options :

1. ✘ अशुद्ध

2. ✔ अपवित्र

3. ✘ गन्दा

4. ✘ पावन

Question Number : 56 Question Id : 627289156 Display Question Number : Yes Single Line Question Option : No Option Orientation : Vertical

‘पवित्र’ शब्द का सटीक विलोम होगा:

Options :

1. ✘ अशुद्ध

2. ✔ अपवित्र

3. ✘ गन्दा

4. ✘ पावन

Question Number : 57 Question Id : 627289157 Display Question Number : Yes Single Line Question Option : No Option Orientation : Vertical

'बगीचे में भौरे गुंजार कर रहे हैं' रेखांकित पद का पर्यायवाची शब्द है:

Options :

1. ✘ मधुमक्खी

2. ✘ कोकिला

3. ✔ षटपद

4. ✘ तितली

Question Number : 57 Question Id : 627289157 Display Question Number : Yes Single Line Question Option : No Option Orientation : Vertical

'बगीचे में भौरे गुंजार कर रहे हैं' रेखांकित पद का पर्यायवाची शब्द है:

Options :

1. ✘ मधुमक्खी

2. ✘ कोकिला

3. ✔ षटपद

4. ✘ तितली

Question Number : 58 Question Id : 627289158 Display Question Number : Yes Single Line Question Option : No Option Orientation : Vertical

किस रस का स्थायी भाव क्रोध है?

Options :

1. ✘ वीभत्स

2. ✔ रौद्र

3. ✘ भयानक

4. ✘ अद्भुत

Question Number : 58 Question Id : 627289158 Display Question Number : Yes Single Line Question Option : No Option Orientation : Vertical

किस रस का स्थायी भाव क्रोध है?

Options :

1. ✘ वीभत्स

2. ✔ रौद्र

3. ✘ भयानक

4. ✘ अद्भुत

Question Number : 59 Question Id : 627289159 Display Question Number : Yes Single Line Question Option : No Option Orientation : Vertical

निम्नलिखित में से किस वाक्य में लिंग का सही प्रयोग हुआ है?

Options :

1. ✘ हमारा देश का जनता बहुत गरीब है।

2. ✘ मेरा माता-पिता महान है।

3. ✘ मुझे बहुत गुस्सा आती है।

4. ✔ मुझे पढ़ना अच्छा लगता है।

Question Number : 59 Question Id : 627289159 Display Question Number : Yes Single Line Question Option : No Option Orientation : Vertical

निम्नलिखित में से किस वाक्य में लिंग का सही प्रयोग हुआ है?

Options :

1. ✘ हमारा देश का जनता बहुत गरीब है।

2. ✘ मेरा माता-पिता महान है।

3. ✘ मुझे बहुत गुस्सा आती है।

4. ✓ मुझे पढ़ना अच्छा लगता है।

Question Number : 60 Question Id : 627289160 Display Question Number : Yes Single Line Question Option : No Option Orientation : Vertical

‘महौजस्वी’ शब्द का संधि विच्छेद होगा:

Options :

1. ✓ महा + ओजस्वी
2. ✘ महा + औजस्वी
3. ✘ महा + ओजस
4. ✘ महा + ओजसवी

Question Number : 60 Question Id : 627289160 Display Question Number : Yes Single Line Question Option : No Option Orientation : Vertical

‘महौजस्वी’ शब्द का संधि विच्छेद होगा:

Options :

1. ✓ महा + ओजस्वी
2. ✘ महा + औजस्वी
3. ✘ महा + ओजस
4. ✘ महा + ओजसवी

Question Number : 61 Question Id : 627289161 Display Question Number : Yes Single Line Question Option : No Option Orientation : Vertical

राज दरबार में राजा सिंहासन पर बैठता है। ‘राज दरबार’ शब्द में कौन-सा समास समाहित है?

Options :

1. ✓ तत्पुरुष समास
2. ✘ अव्ययीभाव समास
3. ✘ द्विगु समास

4. ✘ कर्मधारय समास

Question Number : 61 Question Id : 627289161 Display Question Number : Yes Single Line Question Option : No Option Orientation : Vertical

राज दरबार में राजा सिंहासन पर बैठा है। 'राज दरबार' शब्द में कौन-सा समास समाहित है?

Options :

1. ✔ तत्पुरुष समास
2. ✘ अव्ययीभाव समास
3. ✘ द्विगु समास
4. ✘ कर्मधारय समास

Question Number : 62 Question Id : 627289162 Display Question Number : Yes Single Line Question Option : No Option Orientation : Vertical

'सम्प्रदान कारक' का प्रयोग कौन-से वाक्य में हुआ है?

Options :

1. ✘ अच्छी पुस्तकें ज्ञान प्रदान करती हैं।
2. ✘ हमें दान-धर्म करना चाहिए।
3. ✘ विशाल एक अच्छा लडका है।
4. ✔ मां ने अपने बेटे के लिए मिठाई ली।

Question Number : 62 Question Id : 627289162 Display Question Number : Yes Single Line Question Option : No Option Orientation : Vertical

'सम्प्रदान कारक' का प्रयोग कौन-से वाक्य में हुआ है?

Options :

1. ✘ अच्छी पुस्तकें ज्ञान प्रदान करती हैं।
2. ✘ हमें दान-धर्म करना चाहिए।
3. ✘ विशाल एक अच्छा लडका है।

4. ✓ मां ने अपने बेटे के लिए मिठाई ली।

Question Number : 63 Question Id : 627289163 Display Question Number : Yes Single Line Question Option : No Option Orientation : Vertical

कौन-सा शब्द तत्सम होगा?

Options :

1. ✓ वानर
2. ✗ सुहाग
3. ✗ पटरा
4. ✗ घोड़ा

Question Number : 63 Question Id : 627289163 Display Question Number : Yes Single Line Question Option : No Option Orientation : Vertical

कौन-सा शब्द तत्सम होगा?

Options :

1. ✓ वानर
2. ✗ सुहाग
3. ✗ पटरा
4. ✗ घोड़ा

Question Number : 64 Question Id : 627289164 Display Question Number : Yes Single Line Question Option : No Option Orientation : Vertical

‘गाय घास चरती है।’ किस प्रकार का वाक्य है?

Options :

1. ✗ संयुक्त वाक्य
2. ✓ सरल वाक्य
3. ✗ मिश्र वाक्य
4. ✗ विस्मय वाचक

Question Number : 64 Question Id : 627289164 Display Question Number : Yes Single Line Question Option : No Option Orientation : Vertical

‘गाय घास चरती है।’ किस प्रकार का वाक्य है?

Options :

1. ✘ संयुक्त वाक्य
2. ✔ सरल वाक्य
3. ✘ मिश्र वाक्य
4. ✘ विस्मय वाचक

Question Number : 65 Question Id : 627289165 Display Question Number : Yes Single Line Question Option : No Option Orientation : Vertical

‘अंधो में काना राजा’ लोकोक्ति का सही अर्थ होगा:

Options :

1. ✘ गुण के विपरीत नाम या गुण
2. ✔ गुणहीनों के बीच एक कम गुणवाला व्यक्ति
3. ✘ अकेला आदमी लाचार होता है
4. ✘ प्रशंसा करना

Question Number : 65 Question Id : 627289165 Display Question Number : Yes Single Line Question Option : No Option Orientation : Vertical

‘अंधो में काना राजा’ लोकोक्ति का सही अर्थ होगा:

Options :

1. ✘ गुण के विपरीत नाम या गुण
2. ✔ गुणहीनों के बीच एक कम गुणवाला व्यक्ति
3. ✘ अकेला आदमी लाचार होता है
4. ✘ प्रशंसा करना

Question Number : 66 Question Id : 627289166 Display Question Number : Yes Single Line Question Option : No Option Orientation : Vertical

The HCF of 456, 1653, 1197 is:

Options :

1. ✘ 8
2. ✘ 21
3. ✘ 29
4. ✔ 57

Question Number : 66 Question Id : 627289166 Display Question Number : Yes Single Line Question Option : No Option Orientation : Vertical

456, 1653 और 1197 का महत्तम समापवर्तक (म. स.) है:

Options :

1. ✘ 8
2. ✘ 21
3. ✘ 29
4. ✔ 57

Question Number : 67 Question Id : 627289167 Display Question Number : Yes Single Line Question Option : No Option Orientation : Vertical

A person purchased petrol for his car at ₹ 50, ₹ 55 and ₹ 60 per litre in the years 2010, 2011, and 2012 respectively. If he spends ₹ 5,000 each year. The average cost of petrol per litre is: (rounded to one decimal)

Options :

1. ✔ ₹ 54.7
2. ✘ ₹ 55
3. ✘ ₹ 53.7
4. ✘ ₹ 56.7

Question Number : 67 Question Id : 627289167 Display Question Number : Yes Single Line Question Option : No Option Orientation : Vertical

एक व्यक्ति ने वर्ष 2010, 2011 और 2012 में अपनी कार के लिए पेट्रोल क्रमशः ₹ 50, ₹ 55 और ₹ 60 प्रति लीटर की दर से खरीदा। यदि वह प्रत्येक वर्ष ₹ 5,000 व्यय करता है, तो पेट्रोल की प्रति लीटर औसत लागत ज्ञात कीजिए। (दशमलव के एक स्थान तक पूर्णांकित किया हुआ।)

Options :

1. ✓ ₹ 54.7
2. ✗ ₹ 55
3. ✗ ₹ 53.7
4. ✗ ₹ 56.7

Question Number : 68 Question Id : 627289168 Display Question Number : Yes Single Line Question Option : No Option Orientation : Vertical

The compound interest on a sum of ₹ 5,000 for one year at a rate of 2% compounded semiannually is:

Options :

1. ✗ ₹ 101
2. ✗ ₹ 202
3. ✓ ₹ 100.5
4. ✗ ₹ 201.5

Question Number : 68 Question Id : 627289168 Display Question Number : Yes Single Line Question Option : No Option Orientation : Vertical

ब्याज अर्धवार्षिक संयोजित होने पर ₹ 5,000 के लिए एक वर्ष का 2% की दर से चक्रवृद्धि ब्याज कितना होगा?

Options :

1. ✗ ₹ 101
2. ✗ ₹ 202
3. ✓ ₹ 100.5
4. ✗ ₹ 201.5

Question Number : 69 Question Id : 627289169 Display Question Number : Yes Single Line Question Option : No Option Orientation : Vertical

15% of 20% of 25% is equal to:

Options :

1. ✓ $\frac{3}{400}$

2. ✗ $\frac{5}{600}$

3. ✗ $\frac{3}{200}$

4. ✗ $\frac{3}{100}$

Question Number : 69 Question Id : 627289169 Display Question Number : Yes Single Line Question Option : No Option Orientation : Vertical

25% के 20% का 15% बराबर है:

Options :

1. ✓ $\frac{3}{400}$

2. ✗ $\frac{5}{600}$

3. ✗ $\frac{3}{200}$

4. ✗ $\frac{3}{100}$

Question Number : 70 Question Id : 627289170 Display Question Number : Yes Single Line Question Option : No Option Orientation : Vertical

If the equation $x^2 + x + 4 = 0$ has roots x_1 and x_2 , then the value of $\frac{x_1}{x_2} + \frac{x_2}{x_1}$ is:

Options :

1. ✗ $\frac{7}{4}$

2. ✓ $\frac{-7}{4}$

3. ✘ $\frac{1}{2}$

4. ✘ $\frac{-1}{2}$

Question Number : 70 Question Id : 627289170 Display Question Number : Yes Single Line Question Option : No Option Orientation : Vertical

यदि समीकरण $x^2 + x + 4 = 0$ के मूल x_1 और x_2 हैं, तो $\frac{x_1}{x_2} + \frac{x_2}{x_1}$ का मान है:

Options :

1. ✘ $\frac{7}{4}$

2. ✔ $\frac{-7}{4}$

3. ✘ $\frac{1}{2}$

4. ✘ $\frac{-1}{2}$

Question Number : 71 Question Id : 627289171 Display Question Number : Yes Single Line Question Option : No Option Orientation : Vertical

4 people divide a certain sum in the ratio 6 : 5 : 4 : 3 respectively. If the 3rd person gets ₹ 500 more than the 4th person then the 2nd person's share is:

Options :

1. ✔ ₹ 2,500

2. ✘ ₹ 2,000

3. ✘ ₹ 3,000

4. ✘ ₹ 1,500

Question Number : 71 Question Id : 627289171 Display Question Number : Yes Single Line Question Option : No Option Orientation : Vertical

एक निश्चित धनराशि 4 व्यक्तियों में क्रमशः 6 : 5 : 4 : 3 के अनुपात में बांटी जाती है। यदि तीसरे व्यक्ति को चौथे व्यक्ति से ₹ 500 अधिक प्राप्त होते हैं, तो दूसरे व्यक्ति का हिस्सा ज्ञात कीजिए।

Options :

1. ✓ ₹ 2,500

2. ✗ ₹ 2,000

3. ✗ ₹ 3,000

4. ✗ ₹ 1,500

Question Number : 72 Question Id : 627289172 Display Question Number : Yes Single Line Question Option : No Option Orientation : Vertical

Train X and Y are 250 m in length. They run on parallel tracks in opposite direction with a speed 80 km/hr and 70 km/hr respectively. The time taken to completely cross each other is:

Options :

1. ✗ 12.5 sec

2. ✗ 13 sec

3. ✓ 12 sec

4. ✗ 11 sec

Question Number : 72 Question Id : 627289172 Display Question Number : Yes Single Line Question Option : No Option Orientation : Vertical

रेलगाड़ी X और Y की लंबाई 250 मीटर है। वे समानांतर पटरियों पर विपरीत दिशाओं में क्रमशः 80 किलोमीटर/घंटे व 70 किलोमीटर/घंटे की गति से चल रही हैं। एक दूसरे को पूरी तरह पार करने में उनके द्वारा लिया जाने वाला कुल समय है:

Options :

1. ✗ 12.5 सेकंड

2. ✗ 13 सेकंड

3. ✓ 12 सेकंड

4. ✗ 11 सेकंड

Question Number : 73 Question Id : 627289173 Display Question Number : Yes Single Line Question Option : No Option Orientation : Vertical

3 men and 6 women do a task in 20 days the number of days required to complete the same task by 12 men and 8 women is:

Options :

1. ✗ 15/2 days

2. ✘ 2/15 days
3. ✘ 4/15 days
4. ✔ 15/4 days

Question Number : 73 Question Id : 627289173 Display Question Number : Yes Single Line Question Option : No Option Orientation : Vertical

3 पुरुष और 6 महिलाएं एक कार्य को 20 दिन में पूरा कर सकते हैं। इसी कार्य को 12 पुरुषों व 8 महिलाओं द्वारा समाप्त करने में कितने दिन लगेंगे?

Options :

1. ✘ 15/2 दिन
2. ✘ 2/15 दिन
3. ✘ 4/15 दिन
4. ✔ 15/4 दिन

Question Number : 74 Question Id : 627289174 Display Question Number : Yes Single Line Question Option : No Option Orientation : Vertical

Rice at ₹ 18 per kg and rice at ₹ 24 per kg are mixed together. In what ratio they must be mixed in order to fix the resultant mixture of rice at ₹ 20 per kg:

Options :

1. ✘ 1 : 2
2. ✔ 2 : 1
3. ✘ 1 : 3
4. ✘ 3 : 1

Question Number : 74 Question Id : 627289174 Display Question Number : Yes Single Line Question Option : No Option Orientation : Vertical

₹ 18 प्रति किलो और ₹ 24 प्रति किलो वाली चावल की दो किस्मों को मिश्रित किया जाता है। इन दोनों किस्मों को किस अनुपात में मिश्रित किया जाना चाहिए ताकि चावल का ₹ 20 प्रति किलो वाला मिश्रण प्राप्त हो सके?

Options :

1. ✘ 1 : 2
2. ✔ 2 : 1

3. ✘ 1 : 3

4. ✘ 3 : 1

Question Number : 75 Question Id : 627289175 Display Question Number : Yes Single Line Question Option : No Option Orientation : Vertical

A person sells two toys for ₹ 3,600 each. On one toy he gains 30% and on other he loses 30%. His total gain or loss is:

Options :

1. ✔ 9 % loss

2. ✘ 9% gain

3. ✘ No loss or gain

4. ✘ 5% loss

Question Number : 75 Question Id : 627289175 Display Question Number : Yes Single Line Question Option : No Option Orientation : Vertical

एक व्यक्ति दो खिलौने बेचता है, प्रत्येक खिलौने का विक्रय मूल्य ₹ 3,600 है। एक खिलौने पर उसे 30% का लाभ और दूसरे खिलौने पर 30% की हानि होती है। उसकी कुल लाभ या हानि ज्ञात कीजिए।

Options :

1. ✔ 9 % हानि

2. ✘ 9% लाभ

3. ✘ न लाभ न हानि

4. ✘ 5% हानि

Question Number : 76 Question Id : 627289176 Display Question Number : Yes Single Line Question Option : No Option Orientation : Vertical

An object is floating with 60% of its volume under water. The density of the object is n times the density of water. The value of n is:

Options :

1. ✘ 0.2

2. ✘ 0.4

3. ✓ 0.6

4. ✗ 0.8

Question Number : 76 Question Id : 627289176 Display Question Number : Yes Single Line Question Option : No Option Orientation : Vertical

एक वस्तु पानी में इस प्रकार तैरती है कि इसका 60% भाग पानी के नीचे है। वस्तु का घनत्व पानी के घनत्व का n गुणा है। n का मान है:

Options :

1. ✗ 0.2

2. ✗ 0.4

3. ✓ 0.6

4. ✗ 0.8

Question Number : 77 Question Id : 627289177 Display Question Number : Yes Single Line Question Option : No Option Orientation : Vertical

An object is thrown vertically upwards and rises to a height of 78.4 m. The time taken by it to reach the highest point is:

Options :

1. ✗ 2 sec

2. ✗ 3 sec

3. ✓ 4 sec

4. ✗ 6 sec

Question Number : 77 Question Id : 627289177 Display Question Number : Yes Single Line Question Option : No Option Orientation : Vertical

किसी वस्तु को उर्ध्वाधर दिशा में ऊपर की ओर फेंका जाता है और यह 78.4 मीटर की ऊंचाई तक जाती है। इसे उच्चतम बिंदु तक पहुंचने में लगा समय है:

Options :

1. ✗ 2 सेकंड

2. ✗ 3 सेकंड

3. ✓ 4 सेकंड

4. ✘ 6 सेकंड

Question Number : 78 Question Id : 627289178 Display Question Number : Yes Single Line Question Option : No Option Orientation : Vertical

An object is placed on the principal axis of a concave mirror. It is observed that the image formed is real and diminished. The object is located at:

Options :

1. ✘ A point between pole and focus
2. ✘ Focus
3. ✘ A point between focus and the centre of curvature
4. ✔ A point beyond the centre of curvature

Question Number : 78 Question Id : 627289178 Display Question Number : Yes Single Line Question Option : No Option Orientation : Vertical

एक वस्तु को अवतल दर्पण के मुख्य अक्ष रेखा पर रखा जाता है। यह पता चलता है कि बनी हुई छवि वास्तविक और संकुचित है। वस्तु इस पर स्थित है:

Options :

1. ✘ ध्रुव और फोकस के बीच एक बिंदु पर
2. ✘ फोकस पर
3. ✘ फोकस और वक्रता केंद्र के बीच एक बिंदु पर
4. ✔ वक्रता केंद्र से दूर एक बिंदु पर

Question Number : 79 Question Id : 627289179 Display Question Number : Yes Single Line Question Option : No Option Orientation : Vertical

When a ray of light passes from air to a liquid of refractive index 1.5, it bends:

Options :

1. ✔ towards the normal and travels with a speed of 2.0×10^8 m/s
2. ✘ away from the normal and travels with a speed of 2.0×10^8 m/s
3. ✘ towards the normal and travels without any change in its speed

4. ✘ away from the normal and travels without any change in its speed

Question Number : 79 Question Id : 627289179 Display Question Number : Yes Single Line Question Option : No Option Orientation : Vertical

जब प्रकाश की किरण हवा से होती हुई 1.5 अपवर्तक सूचकांक के तरल पदार्थ से गुजरती है, तो यह:

Options :

1. ✔ सामान्य की तरफ मुड़ जाती है और 2.0×10^8 मीटर/सेकंड की गति से आगे बढ़ती है।
2. ✘ सामान्य से दूर मुड़ जाती है और 2.0×10^8 मीटर/सेकंड की गति से आगे बढ़ती है।
3. ✘ सामान्य की तरफ मुड़ जाती है और गति में किसी बदलाव के बिना आगे बढ़ती है।
4. ✘ सामान्य से दूर मुड़ जाती है और गति में किसी बदलाव के बिना आगे बढ़ती है।

Question Number : 80 Question Id : 627289180 Display Question Number : Yes Single Line Question Option : No Option Orientation : Vertical

An object, 3.0 cm in size is placed 25 cm in front of a concave mirror of focal length 15 cm. The size and the nature of image formed are respectively:

Options :

1. ✘ 4.5 cm, erect
2. ✔ 4.5 cm, inverted
3. ✘ 9.0 cm, erect
4. ✘ 9.0 cm, inverted

Question Number : 80 Question Id : 627289180 Display Question Number : Yes Single Line Question Option : No Option Orientation : Vertical

3.0 सेंटीमीटर आकार की एक वस्तु को 15 सेंटीमीटर फोकस दूरी वाले अवतल दर्पण के सामने 25 सेंटीमीटर की दूरी पर रखा जाता है। बनी हुई छवि का आकार और प्रकृति क्रमशः है:

Options :

1. ✘ 4.5 सेंटीमीटर, लम्बवत्त
2. ✔ 4.5 सेंटीमीटर, उलटी
3. ✘ 9.0 सेंटीमीटर, लम्बवत्त

4. ✘ 9.0 सेंटीमीटर, उलटी

Question Number : 81 Question Id : 627289181 Display Question Number : Yes Single Line Question Option : No Option Orientation : Vertical

What is total number of atoms present in 32 gram of dioxygen (O₂)?

Options :

1. ✘ $4 \times 6.023 \times 10^{23}$

2. ✔ $2 \times 6.023 \times 10^{23}$

3. ✘ $3 \times 6.023 \times 10^{23}$

4. ✘ $5 \times 6.023 \times 10^{23}$

Question Number : 81 Question Id : 627289181 Display Question Number : Yes Single Line Question Option : No Option Orientation : Vertical

32 ग्राम डाइऑक्सीजन (O₂) में उपस्थित कुल परमाणुओं की संख्या कितनी होगी?

Options :

1. ✘ $4 \times 6.023 \times 10^{23}$

2. ✔ $2 \times 6.023 \times 10^{23}$

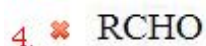
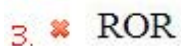
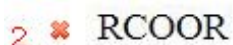
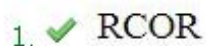
3. ✘ $3 \times 6.023 \times 10^{23}$

4. ✘ $5 \times 6.023 \times 10^{23}$

Question Number : 82 Question Id : 627289182 Display Question Number : Yes Single Line Question Option : No Option Orientation : Vertical

Which one of the following represents the formula of a ketone?

Options :



Question Number : 82 Question Id : 627289182 Display Question Number : Yes Single Line Question Option : No Option Orientation : Vertical

निम्नलिखित में से कौन सा विकल्प कीटोन का सूत्र दर्शाता है?

Options :

1. ✓ RCOR
2. ✗ RCOOR
3. ✗ ROR
4. ✗ RCHO

Question Number : 83 Question Id : 627289183 Display Question Number : Yes Single Line Question Option : No Option Orientation : Vertical

Which one of the following represents the mass of one mole of nitrogen molecules?

Options :

1. ✗ 2.8 grams
2. ✗ 14 grams
3. ✓ 28 grams
4. ✗ 1.4 grams

Question Number : 83 Question Id : 627289183 Display Question Number : Yes Single Line Question Option : No Option Orientation : Vertical

निम्नलिखित में से कौन सा विकल्प नाइट्रोजन अणुओं के एक मोल का द्रव्यमान दर्शाता है?

Options :

1. ✗ 2.8 ग्राम
2. ✗ 14 ग्राम
3. ✓ 28 ग्राम
4. ✗ 1.4 ग्राम

Question Number : 84 Question Id : 627289184 Display Question Number : Yes Single Line Question Option : No Option Orientation : Vertical

What is the functional group present in the compound $\text{CH}_3\text{COOCH}_3$?

Options :

1. ✘ Ether
2. ✘ Ketone
3. ✔ Ester
4. ✘ Cyanide

Question Number : 84 Question Id : 627289184 Display Question Number : Yes Single Line Question Option : No Option Orientation : Vertical

$\text{CH}_3\text{COOCH}_3$ यौगिक में कौन सा क्रियात्मक समूह उपस्थित है?

Options :

1. ✘ ईथर
2. ✘ कीटोन
3. ✔ एस्टर
4. ✘ सायनाइड

Question Number : 85 Question Id : 627289185 Display Question Number : Yes Single Line Question Option : No Option Orientation : Vertical

The general formula $\text{C}_n\text{H}_{2n+2}$ represents which one of the following class of compounds?

Options :

1. ✔ Alkanes
2. ✘ Alkenes
3. ✘ Alkynes
4. ✘ Alkanols

Question Number : 85 Question Id : 627289185 Display Question Number : Yes Single Line Question Option : No Option Orientation : Vertical

सामान्य सूत्र $\text{C}_n\text{H}_{2n+2}$ निम्नलिखित में से किस वर्ग के यौगिकों को दर्शाता है?

Options :

1. ✔ एल्केन्स
2. ✘ एल्कीन्स

3. ✘ एल्काइन्स

4. ✘ एल्केनाॅल्स

Question Number : 86 Question Id : 627289186 Display Question Number : Yes Single Line Question Option : No Option Orientation : Vertical

Which of the following is a regional folk music popular in Uttar Pradesh?

Options :

1. ✘ Laman

2. ✘ Mando

3. ✘ Daskathia

4. ✔ Kajri

Question Number : 86 Question Id : 627289186 Display Question Number : Yes Single Line Question Option : No Option Orientation : Vertical

उत्तर प्रदेश में निम्नलिखित में से कौन-सा क्षेत्रीय लोक संगीत लोकप्रिय है?

Options :

1. ✘ लमन

2. ✘ मंडो

3. ✘ दसकथिया

4. ✔ कजरी

Question Number : 87 Question Id : 627289187 Display Question Number : Yes Single Line Question Option : No Option Orientation : Vertical

Who was the first Indian woman to become the President of the Indian National Congress?

Options :

1. ✔ Sarojini Naidu

2. ✘ Ambabai

3. ✘ Savitribai Phule

4. ✘ Annie Besant

Question Number : 87 Question Id : 627289187 Display Question Number : Yes Single Line Question Option : No Option Orientation : Vertical

भारतीय राष्ट्रीय कांग्रेस की अध्यक्ष बनने वाली पहली भारतीय महिला कौन थीं?

Options :

1. ✔ सरोजिनी नायडू

2. ✘ अंबाबाई

3. ✘ सावित्रीबाई फुले

4. ✘ एनी बेसेंट

Question Number : 88 Question Id : 627289188 Display Question Number : Yes Single Line Question Option : No Option Orientation : Vertical

Which of the following is **NOT** a coastal state of India?

Options :

1. ✘ Odisha

2. ✘ Andhra Pradesh

3. ✘ Karnataka

4. ✔ Telangana

Question Number : 88 Question Id : 627289188 Display Question Number : Yes Single Line Question Option : No Option Orientation : Vertical

निम्नलिखित में से कौन-सा भारत का तटीय राज्य नहीं है?

Options :

1. ✘ ओडिशा

2. ✘ आंध्र प्रदेश

3. ✘ कर्नाटक

4. ✔ तेलंगाना

Question Number : 89 Question Id : 627289189 Display Question Number : Yes Single Line Question Option : No Option Orientation : Vertical

Who among the following is the Chairman of National Bank for Agriculture and Rural Development (NABARD) since December 18, 2013?

Options :

1. ✘ Dr. Prakash Bakshi
2. ✘ H. R. Dave
3. ✘ R. Amalorpavanathan
4. ✔ Dr. Harsh Kumar Bhanwala

Question Number : 89 Question Id : 627289189 Display Question Number : Yes Single Line Question Option : No Option Orientation : Vertical

राष्ट्रीय कृषि और ग्रामीण विकास बैंक (नाबार्ड) के 18 दिसंबर 2013 से अध्यक्ष निम्नलिखित में से कौन हैं?

Options :

1. ✘ डॉ. प्रकाश बक्शी
2. ✘ एच. आर. दवे
3. ✘ आर. अमलोरपवनाथन
4. ✔ डॉ. हर्ष कुमार भनवाला

Question Number : 90 Question Id : 627289190 Display Question Number : Yes Single Line Question Option : No Option Orientation : Vertical

Which of the following does Part IV-A / Articles 51A of the Indian Constitution explain in detail?

Options :

1. ✔ Fundamental Duties
2. ✘ Parliament
3. ✘ The States
4. ✘ The High Courts in the States

Question Number : 90 Question Id : 627289190 Display Question Number : Yes Single Line Question Option : No Option Orientation : Vertical

भारतीय संविधान के भाग IV-A / अनुच्छेद 51A में निम्नलिखित में से किसे विस्तार से समझाया गया है?

Options :

1. ✓ मौलिक कर्तव्य
2. ✗ संसद
3. ✗ राज्य
4. ✗ राज्यों के उच्च न्यायालय

Question Number : 91 Question Id : 627289191 Display Question Number : Yes Single Line Question Option : No Option Orientation : Vertical

According to the summary report, 'Indian Wind Energy – A Brief Outlook', produced jointly by GWEC and IWTMA, India was the ____ largest market globally both in terms of cumulative capacity and annual additions in 2016.

Options :

1. ✗ Tenth
2. ✗ Seventh
3. ✓ Fourth
4. ✗ Second

Question Number : 91 Question Id : 627289191 Display Question Number : Yes Single Line Question Option : No Option Orientation : Vertical

जीडब्ल्यूईसी (GWEC) और आईडब्ल्यूटीएमए (IWTMA) द्वारा संयुक्त रूप से निर्मित सारांश रिपोर्ट, 'भारतीय पवन ऊर्जा - एक संक्षिप्त आउटलुक' के अनुसार वर्ष 2016 में संचयी क्षमता और वार्षिक परिवर्धन दोनों के संदर्भ में भारत विश्व स्तर पर _____ सबसे बड़ा बाजार था।

Options :

1. ✗ दसवां
2. ✗ सातवां
3. ✓ चौथा
4. ✗ दूसरा

Question Number : 92 Question Id : 627289192 Display Question Number : Yes Single Line Question Option : No Option Orientation : Vertical

Who was awarded the Pulitzer Prize for Fiction in 2017?

Options :

1. ✗ Hisham Matar

2. ✘ Tyehimba Jess
3. ✘ Matthew Desmond
4. ✔ Colson Whitehead

Question Number : 92 Question Id : 627289192 Display Question Number : Yes Single Line Question Option : No Option Orientation : Vertical

फिक्शन (काल्पनिक कथा) के लिए 2017 में पुलित्ज़र पुरस्कार से किसे सम्मानित किया गया था?

Options :

1. ✘ हिशाम मातर
2. ✘ तेहिम्बा जेस
3. ✘ मैथ्यू डेसमंड
4. ✔ कोलसन व्हाइटहेड

Question Number : 93 Question Id : 627289193 Display Question Number : Yes Single Line Question Option : No Option Orientation : Vertical

In which of the following sport did Sanjita Khumukcham represent India in Glasgow 2014 XX Commonwealth Games?

Options :

1. ✘ Badminton
2. ✔ Weightlifting
3. ✘ Swimming
4. ✘ Shooting

Question Number : 93 Question Id : 627289193 Display Question Number : Yes Single Line Question Option : No Option Orientation : Vertical

निम्नलिखित में से किस खेल में संजीता खुमुकचम ने ग्लासगो 2014 बीसवें कॉमनवेल्थ खेलों में भारत का प्रतिनिधित्व किया था?

Options :

1. ✘ बैडमिंटन
2. ✔ भारोत्तोलन

3. ✘ तैराकी

4. ✘ निशानेबाज़ी

Question Number : 94 Question Id : 627289194 Display Question Number : Yes Single Line Question Option : No Option Orientation : Vertical

In 2017, P.A. Raphael was awarded the Dronacharya Awards in which of the following categories?

Options :

1. ✘ Badminton

2. ✔ Hockey

3. ✘ Kabaddi

4. ✘ Shooting

Question Number : 94 Question Id : 627289194 Display Question Number : Yes Single Line Question Option : No Option Orientation : Vertical

2017 में पी. ए. राफ़ेल को निम्नलिखित में से किस श्रेणी के लिए द्रोणाचार्य पुरस्कार से सम्मानित किया गया था?

Options :

1. ✘ बैडमिंटन

2. ✔ हॉकी

3. ✘ कबड्डी

4. ✘ निशानेबाज़ी

Question Number : 95 Question Id : 627289195 Display Question Number : Yes Single Line Question Option : No Option Orientation : Vertical

Which of the following Indian state is associated with the traditional glove puppet play called Pavakoothu?

Options :

1. ✔ Kerala

2. ✘ Odisha

3. ✘ Andhra Pradesh

4. ✘ West Bengal

Question Number : 95 Question Id : 627289195 Display Question Number : Yes Single Line Question Option : No Option Orientation : Vertical

निम्नलिखित में से कौन-सा भारतीय राज्य, पावाकुथु नामक परंपरागत दस्ताने वाली कठपुतली के खेल से संबद्ध है?

Options :

1. ✓ केरल
2. ✗ ओड़िशा
3. ✗ आंध्र प्रदेश
4. ✗ पश्चिम बंगाल

Question Number : 96 Question Id : 627289196 Display Question Number : Yes Single Line Question Option : No Option Orientation : Vertical

If SOFTWARE can be coded as EQZVSENS, how can be COMPUTER coded?

Options :

1. ✓ RDSTOLNC
2. ✗ RSDTOLNC
3. ✗ RDSOTLNC
4. ✗ RDSTONLC

Question Number : 96 Question Id : 627289196 Display Question Number : Yes Single Line Question Option : No Option Orientation : Vertical

यदि SOFTWARE को EQZVSENS के रूप में कोड किया जाता है, तो COMPUTER को कैसे कोड किया जाएगा?

Options :

1. ✓ RDSTOLNC
2. ✗ RSDTOLNC
3. ✗ RDSOTLNC
4. ✗ RDSTONLC

Question Number : 97 Question Id : 627289197 Display Question Number : Yes Single Line Question Option : No Option Orientation : Vertical

Select the best option to complete the analogy.

Square : Box :: Triangle : _____

Options :

1. ✘ Cone
2. ✘ Rhombus
3. ✔ Pyramid
4. ✘ Sphere

Question Number : 97 Question Id : 627289197 Display Question Number : Yes Single Line Question Option : No Option Orientation : Vertical

सहि विकल्प का चयन कर सादृश्य को पुरा करें।

वर्ग : डिब्बा : : त्रिभुज : _____

Options :

1. ✘ शंकु
2. ✘ समचतुर्भुज
3. ✔ पिरामिड
4. ✘ गोला

Question Number : 98 Question Id : 627289198 Display Question Number : Yes Single Line Question Option : No Option Orientation : Vertical

Insert the word that completes the first word and begins the second.

DEC (----) AGE

Options :

1. ✘ all
2. ✘ ear
3. ✘ des
4. ✔ line

Question Number : 98 Question Id : 627289198 Display Question Number : Yes Single Line Question Option : No Option Orientation : Vertical

खाली जगह के लिए वह शब्द चुनें जो पहले शब्द को पूरा करता हो और दूसरे का आरंभ करता हो।

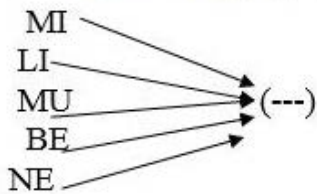
DEC (----) AGE

Options :

1. ✘ all
2. ✘ ear
3. ✘ des
4. ✔ line

Question Number : 99 Question Id : 627289199 Display Question Number : Yes Single Line Question Option : No Option Orientation : Vertical

Which of the following options, when joined by each letter in the image as a prefix, forms a meaningful word?

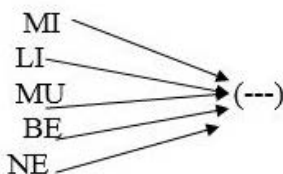


Options :

1. ✘ KE
2. ✔ ST
3. ✘ TS
4. ✘ ND

Question Number : 99 Question Id : 627289199 Display Question Number : Yes Single Line Question Option : No Option Orientation : Vertical

निम्न में से कौन-सा ऐसा विकल्प है जिसमें एक उपसर्ग के रूप में जोड़े जाने पर चित्र में दिखाया गया प्रत्येक अक्षर एक सार्थक अंग्रेज़ी शब्द बनाता है?



Options :

1. ✘ KE
2. ✔ ST

3. ✘ TS

4. ✘ ND

Question Number : 100 Question Id : 627289200 Display Question Number : Yes Single Line Question Option : No Option Orientation : Vertical

Select the missing number in the series.

3, 7, 16, 35, 74, _____

Options :

1. ✘ 129

2. ✘ 148

3. ✔ 153

4. ✘ 154

Question Number : 100 Question Id : 627289200 Display Question Number : Yes Single Line Question Option : No Option Orientation : Vertical

श्रृंखला में अगली संख्या का पता लगाएं।

3, 7, 16, 35, 74, _____

Options :

1. ✘ 129

2. ✘ 148

3. ✔ 153

4. ✘ 154