



## Haryana Staff Selection Commission

**Notations :**

1. Options shown in **green** color and with  icon are correct.
2. Options shown in **red** color and with  icon are incorrect.

<b>Subject Name:</b>	CAT 1 Steno Typist English CBT Exam
<b>Total Marks:</b>	200
<b>Display Marks:</b>	Yes
<b>Calculator:</b>	None
<b>Magnifying Glass Required?:</b>	No
<b>Ruler Required?:</b>	No
<b>Eraser Required?:</b>	No
<b>Scratch Pad Required?:</b>	No
<b>Rough Sketch/Notepad Required?:</b>	No
<b>Protractor Required?:</b>	No

CAT 1 Steno Typist English CBT Exam

**Group Marks:** 200





CAT 1 Steno Typist English CBT Exam

<b>Section Marks:</b>	200
<b>Display Number Panel:</b>	Yes
<b>Group All Questions:</b>	No

**Question Number : 1 Question Id : 1680001 Display Question Number : Yes Single Line Question Option : No Option Orientation : Vertical**

Which of the following archaeological sites has yielded the evidence of the existence of Mauryan Period?

**Options :**

1.  Banawali
2.  Mitathal
3.  Rakhi Garhi
4.  Sugh

**Question Number : 1 Question Id : 1680001 Display Question Number : Yes Single Line Question Option : No Option Orientation : Vertical**

निम्नलिखित पुरातात्विक स्थलों में से कहां पर मौर्य काल के अस्तित्व का प्रमाण मिला है?

Options :

1. ✘ बनावली
2. ✘ मिताथल
3. ✘ राखीगढ़ी
4. ✔ सुघ

Question Number : 2 Question Id : 1680002 Display Question Number : Yes Single Line Question Option : No Option Orientation : Vertical

Yaudheyas were a:

Options :

1. ✘ Bactrian clan
2. ✘ Dravidian clan
3. ✔ Indo-Iranian clan
4. ✘ Scythian clan

Question Number : 2 Question Id : 1680002 Display Question Number : Yes Single Line Question Option : No Option Orientation : Vertical

यौधेय कौन थे?

Options :

1. ✘ बैक्ट्रियन कबीले
2. ✘ द्रविड़ियन कबीले
3. ✔ इंडो-ईरानियन कबीले
4. ✘ स्काइथियन कबीले

Question Number : 3 Question Id : 1680003 Display Question Number : Yes Single Line Question Option : No Option Orientation : Vertical

Which of the following inscription refers to Yaudheyas as the tributaries of Gupta empire:

Options :

1. ✓ Allahabad Pillar Inscription of Samudragupta
2. ✗ Delhi Iron Pillar Inscription of Chandra
3. ✗ Poona Plates of Prabhavatigupta
4. ✗ Tumain Inscription of Kumargupta

Question Number : 3 Question Id : 1680003 Display Question Number : Yes Single Line Question Option : No Option Orientation : Vertical

निम्नलिखित में से कौन सा शिलालेख गुप्त साम्राज्य के सहयोगी के रूप में यौधेयों को दर्शाता है?

Options :

1. ✓ समुद्रगुप्त का इलाहाबाद स्तंभ शिलालेख
2. ✗ चंद्रा का दिल्ली लौह स्तंभ शिलालेख
3. ✗ प्रभावतीगुप्त का पूना ताम्रपत्र
4. ✗ कुमारगुप्त का तुमान का शिलालेख

Question Number : 4 Question Id : 1680004 Display Question Number : Yes Single Line Question Option : No Option Orientation : Vertical

Which of the following Chinese Buddhist monks visited Thanesar?

Options :

1. ✗ An Shigao
2. ✗ Fa-Hien
3. ✓ Hiuen Tsang
4. ✗ I Tsing

Question Number : 4 Question Id : 1680004 Display Question Number : Yes Single Line Question Option : No Option Orientation : Vertical

निम्नलिखित चीनी बौद्ध भिक्षुओं में से किसने थानेसर का दौरा किया था?

Options :

1. ✗ एन शिगाओ

2. ✘ फा-हिएन
3. ✔ ह्यूएन त्सांग
4. ✘ आई त्सिंग

Question Number : 5 Question Id : 1680005 Display Question Number : Yes Single Line Question Option : No Option Orientation : Vertical

Haryana is observing the year 2017 as:

Options :

1. ✘ Bal Kalyan Varsh
2. ✘ Mahila Kalyan Varsh
3. ✔ Garib Kalyan Varsh
4. ✘ Pashu Kalyan Varsh

Question Number : 5 Question Id : 1680005 Display Question Number : Yes Single Line Question Option : No Option Orientation : Vertical

हरियाणा, वर्ष 2017 को इस वर्ष के रूप में मना रहा है:

Options :

1. ✘ बाल कल्याण वर्ष
2. ✘ महिला कल्याण वर्ष
3. ✔ गरीब कल्याण वर्ष
4. ✘ पशु कल्याण वर्ष

Question Number : 6 Question Id : 1680006 Display Question Number : Yes Single Line Question Option : No Option Orientation : Vertical

As per the Economic Survey of Haryana (2016-17), the contribution of the primary sector to GSVA (Gross State Value Added) in Haryana was approximately:

Options :

1. ✔ 17.8%
2. ✘ 5.1%

3. ✘ 80.3%

4. ✘ 40.8%

Question Number : 6 Question Id : 1680006 Display Question Number : Yes Single Line Question Option : No Option Orientation : Vertical

हरियाणा के आर्थिक सर्वे (2016-17) के अनुसार हरियाणा में सकल राज्य मूल्य वर्धन (जीएसवीए) में प्राथमिक क्षेत्र का योगदान लगभग \_\_\_\_\_ था।

Options :

1. ✔ 17.8%

2. ✘ 5.1%

3. ✘ 80.3%

4. ✘ 40.8%

Question Number : 7 Question Id : 1680007 Display Question Number : Yes Single Line Question Option : No Option Orientation : Vertical

As per the announcement by the Ministry of Chemicals and Fertilizers, Pharma Park will come up in the \_\_\_\_\_ district of Haryana.

Options :

1. ✔ Karnal

2. ✘ Sonipat

3. ✘ Panipat

4. ✘ Faridabad

Question Number : 7 Question Id : 1680007 Display Question Number : Yes Single Line Question Option : No Option Orientation : Vertical

रसायन और उर्वरक मंत्रालय द्वारा की गयी घोषणा के अनुसार, फार्मा पार्क हरियाणा के \_\_\_\_\_ जिले में स्थापित किया जायेगा।

Options :

1. ✔ करनाल

2. ✘ सोनीपत

3. ✘ पानीपत

4. ✘ फरीदाबाद

Question Number : 8 Question Id : 1680008 Display Question Number : Yes Single Line Question Option : No Option Orientation : Vertical

Which of the following districts of Haryana hosted the first ever International Gita Mahotsav?

Options :

1. ✘ Karnal

2. ✘ Sonapat

3. ✔ Kurukshetra

4. ✘ Faridabad

Question Number : 8 Question Id : 1680008 Display Question Number : Yes Single Line Question Option : No Option Orientation : Vertical

हरियाणा के निम्नलिखित में से कौन से जिले ने पहली बार अंतर्राष्ट्रीय गीता महोत्सव की मेजबानी की थी?

Options :

1. ✘ करनाल

2. ✘ सोनीपत

3. ✔ कुरुक्षेत्र

4. ✘ फरीदाबाद

Question Number : 9 Question Id : 1680009 Display Question Number : Yes Single Line Question Option : No Option Orientation : Vertical

Name the poet from Bhiwani who wrote 'Shyam Satsai'.

Options :

1. ✘ Ishwar Chandra Pandey

2. ✘ Gemini Haryanavi

3. ✔ Tulsiram Sharma Dinesh

4. ✘ Hari Singh Dilbar

Question Number : 9 Question Id : 1680009 Display Question Number : Yes Single Line Question Option : No Option Orientation : Vertical

'श्याम सतसई' लिखने वाले भिवानी के कवि का नाम क्या है?

Options :

1. ✘ ईश्वर चन्द्र पांडे
2. ✘ जैमिनी हरियाणवी
3. ✔ तुलसीराम शर्मा दिनेश
4. ✘ हरि सिंह दिलबर

Question Number : 10 Question Id : 16800010 Display Question Number : Yes Single Line Question Option : No Option Orientation : Vertical

Name the writer of the book 'Jin Khoja Tin Paiyan', a collection of short stories.

Options :

1. ✔ Ayodhya Prasad Goyaliya
2. ✘ Tushar Raheja
3. ✘ Prem Chowdhary
4. ✘ Naresh Kumar Sharma

Question Number : 10 Question Id : 16800010 Display Question Number : Yes Single Line Question Option : No Option Orientation : Vertical

लघु कथाओं के एक संग्रह 'जिन खोजा तिन पाइया' पुस्तक के लेखक का नाम बताइए:

Options :

1. ✔ अयोध्या प्रसाद गोयलीय
2. ✘ तुषार रहेजा
3. ✘ प्रेम चौधरी
4. ✘ नरेश कुमार शर्मा

Question Number : 11 Question Id : 16800011 Display Question Number : Yes Single Line Question Option : No Option Orientation : Vertical

Name the freedom fighter and the literary genius in whose memory the Government of Haryana established a museum in Sirsa.

Options :

1. ✘ Mehar Singh
2. ✘ Balmukund Gupta
3. ✘ Joginder Singh
4. ✔ Liladhar Dukhi

Question Number : 11 Question Id : 16800011 Display Question Number : Yes Single Line Question Option : No Option Orientation : Vertical

उस स्वतंत्रता सेनानी और साहित्यिक प्रतिभा का नाम बताइए जिनकी स्मृति में हरियाणा सरकार ने सिरसा में एक संग्रहालय की स्थापना की है।

Options :

1. ✘ मेहर सिंह
2. ✘ बालमुकुंद गुप्त
3. ✘ जोगिंदर सिंह
4. ✔ लीलाधर दुखी

Question Number : 12 Question Id : 16800012 Display Question Number : Yes Single Line Question Option : No Option Orientation : Vertical

Which of the following states does not share its boundary with Haryana?

Options :

1. ✘ Uttar Pradesh
2. ✘ Punjab
3. ✘ Rajasthan
4. ✔ Gujarat

Question Number : 12 Question Id : 16800012 Display Question Number : Yes Single Line Question Option : No Option Orientation : Vertical

निम्नलिखित में से किस राज्य से हरियाणा की सीमा नहीं मिलती है?

Options :



1. ✘ उत्तर प्रदेश
2. ✘ पंजाब
3. ✘ राजस्थान
4. ✔ गुजरात

Question Number : 13 Question Id : 16800013 Display Question Number : Yes Single Line Question Option : No Option Orientation : Vertical

Which city in Haryana has the highest population?

Options :

1. ✔ Faridabad
2. ✘ Ambala
3. ✘ Bhiwani
4. ✘ Rohtak

Question Number : 13 Question Id : 16800013 Display Question Number : Yes Single Line Question Option : No Option Orientation : Vertical

हरियाणा के किस शहर की जनसंख्या सबसे अधिक है?

Options :

1. ✔ फरीदाबाद
2. ✘ अंबाला
3. ✘ भिवानी
4. ✘ रोहतक

Question Number : 14 Question Id : 16800014 Display Question Number : Yes Single Line Question Option : No Option Orientation : Vertical

\_\_\_\_\_ district is known as Sripad Janapad.

Options :

1. ✘ Ambala
2. ✔ Kurukshetra

3. ✘ Karnal

4. ✘ Faridabad

Question Number : 14 Question Id : 16800014 Display Question Number : Yes Single Line Question Option : No Option Orientation : Vertical

\_\_\_\_\_ जिले को श्रीपद जनपद के नाम से जाना जाता है।

Options :

1. ✘ अंबाला

2. ✔ कुरुक्षेत्र

3. ✘ करनाल

4. ✘ फरीदाबाद

Question Number : 15 Question Id : 16800015 Display Question Number : Yes Single Line Question Option : No Option Orientation : Vertical

ZEE Media Chairman Mr Subhash Chandra, supported by the \_\_\_\_\_, won a Rajya Sabha seat from Haryana.

Options :

1. ✘ Congress

2. ✘ Aam Aadmi Party

3. ✔ BJP

4. ✘ Akali Dal

Question Number : 15 Question Id : 16800015 Display Question Number : Yes Single Line Question Option : No Option Orientation : Vertical

ज़ी मीडिया के अध्यक्ष श्री सुभाष चंद्र ने \_\_\_\_\_ से समर्थन प्राप्त करके, हरियाणा से राज्यसभा सीट जीती थी।

Options :

1. ✘ कांग्रेस

2. ✘ आम आदमी पार्टी

3. ✔ बीजेपी

4. ✘ अकाली दल

Question Number : 16 Question Id : 16800016 Display Question Number : Yes Single Line Question Option : No Option Orientation : Vertical

Which political leader of Haryana is known for his commendable work for the betterment of farmers?

Options :

1. ✘ Bhajan Lal
2. ✔ Chaudhary Devi Lal
3. ✘ Bansi Lal
4. ✘ Om Prakash Chautala

Question Number : 16 Question Id : 16800016 Display Question Number : Yes Single Line Question Option : No Option Orientation : Vertical

हरियाणा के किस राजनीतिक नेता को किसानों की भलाई के लिए किये गये उनके सराहनीय कार्यों के लिए जाना जाता है?

Options :

1. ✘ भजन लाल
2. ✔ चौधरी देवी लाल
3. ✘ बंसी लाल
4. ✘ ओम प्रकाश चौटाला

Question Number : 17 Question Id : 16800017 Display Question Number : Yes Single Line Question Option : No Option Orientation : Vertical

The Indian National Lok Dal (INLD) is led by:

Options :

1. ✘ A.S. Chautala
2. ✘ B.S. Hooda
3. ✔ O.P. Chautala
4. ✘ O.P. Dhankar

Question Number : 17 Question Id : 16800017 Display Question Number : Yes Single Line Question Option : No Option Orientation : Vertical

भारतीय राष्ट्रीय लोक दल (INLD) का नेतृत्व कौन कर रहा है?

Options :

1. ✘ ए.एस. चौटाला
2. ✘ बी.एस. हुड्डा
3. ✔ ओ.पी. चौटाला
4. ✘ ओ.पी. धनकर

Question Number : 18 Question Id : 16800018 Display Question Number : Yes Single Line Question Option : No Option Orientation : Vertical

Voter turnout for the assembly election held on 15 October 2014 set a new state record with a turnout of \_\_\_\_.

Options :

1. ✘ 70.14%
2. ✘ 72.34%
3. ✘ 74.45%
4. ✔ 76.54%

Question Number : 18 Question Id : 16800018 Display Question Number : Yes Single Line Question Option : No Option Orientation : Vertical

15 अक्टूबर 2014 को हुए राज्य विधानसभा चुनाव में मतदाताओं ने \_\_\_\_\_ मतदान करके एक नया राज्य रिकॉर्ड बनाया।

Options :

1. ✘ 70.14%
2. ✘ 72.34%
3. ✘ 74.45%
4. ✔ 76.54%

Question Number : 19 Question Id : 16800019 Display Question Number : Yes Single Line Question Option : No Option Orientation : Vertical

The Municipal Corporation of Gurugram has planned to set up a waste-to-energy plant with the help of a \_\_\_\_\_ company in Bandhwari.

Options :

1. ✔ Chinese

2. ✘ Japanese
3. ✘ South Korean
4. ✘ Malaysian

Question Number : 19 Question Id : 16800019 Display Question Number : Yes Single Line Question Option : No Option Orientation : Vertical

गुरुग्राम नगर निगम ने बंधवाड़ी में \_\_\_\_\_ कंपनी की मदद से एक अपशिष्ट-से-ऊर्जा संयंत्र स्थापित करने की योजना बनाई है।

Options :

1. ✔ चाइनीज़
2. ✘ जापानी
3. ✘ दक्षिण कोरियाई
4. ✘ मलेशियाई

Question Number : 20 Question Id : 16800020 Display Question Number : Yes Single Line Question Option : No Option Orientation : Vertical

Three of the following together are called 'Tricity'. Find the odd one out.

Options :

1. ✔ Ambala
2. ✘ Panchkula
3. ✘ Chandigarh
4. ✘ Mohali

Question Number : 20 Question Id : 16800020 Display Question Number : Yes Single Line Question Option : No Option Orientation : Vertical

निम्नलिखित में से तीन को 'ट्राईसिटी' कहा जाता है। असंगत की पहचान करें।

Options :

1. ✔ अंबाला
2. ✘ पंचकुला

3. ✘ चंडीगढ़

4. ✘ मोहाली

Question Number : 21 Question Id : 16800021 Display Question Number : Yes Single Line Question Option : No Option Orientation : Vertical

Haryana is the nation's \_\_\_\_\_ most populous state according to the 2011 census.

Options :

1. ✔ 17<sup>th</sup>

2. ✘ 16<sup>th</sup>

3. ✘ 18<sup>th</sup>

4. ✘ 15<sup>th</sup>

Question Number : 21 Question Id : 16800021 Display Question Number : Yes Single Line Question Option : No Option Orientation : Vertical

2011 की जनगणना के अनुसार हरियाणा देश का \_\_\_\_\_ सबसे अधिक आबादी वाला राज्य है।

Options :

1. ✔ 17वां

2. ✘ 16वां

3. ✘ 18वां

4. ✘ 15वां

Question Number : 22 Question Id : 16800022 Display Question Number : Yes Single Line Question Option : No Option Orientation : Vertical

All of the following districts in Haryana are famous for Zari Jutti EXCEPT:

Options :

1. ✘ Karnal

2. ✘ Sonapat

3. ✘ Hisar

4. ✓ Sirsa

Question Number : 22 Question Id : 16800022 Display Question Number : Yes Single Line Question Option : No Option Orientation : Vertical

हरियाणा के निम्नलिखित सभी जिले ज़री जुड़ी के लिए प्रसिद्ध हैं, इसे छोड़कर:

Options :

1. ✗ करनाल
2. ✗ सोनीपत
3. ✗ हिसार
4. ✓ सिरसा

Question Number : 23 Question Id : 16800023 Display Question Number : Yes Single Line Question Option : No Option Orientation : Vertical

The \_\_\_\_\_ edition of the Sohna Car Rally was organised in the year 2017.

Options :

1. ✗ 21st
2. ✓ 53rd
3. ✗ 87th
4. ✗ 4th

Question Number : 23 Question Id : 16800023 Display Question Number : Yes Single Line Question Option : No Option Orientation : Vertical

सोहना कार रैली का \_\_\_\_\_ संस्करण वर्ष 2017 में आयोजित किया गया था।

Options :

1. ✗ 21वां
2. ✓ 53वां
3. ✗ 87वां
4. ✗ चौथा

Question Number : 24 Question Id : 16800024 Display Question Number : Yes Single Line Question Option : No Option Orientation : Vertical

Which among the following is a popular breed of buffalo in Haryana?

Options :

1. ✓ Murrah
2. ✗ Jaisti
3. ✗ Singora
4. ✗ Philnur

Question Number : 24 Question Id : 16800024 Display Question Number : Yes Single Line Question Option : No Option Orientation : Vertical

हरियाणा में निम्नलिखित में से कौन सी भैंस की एक लोकप्रिय प्रजाति है?

Options :

1. ✓ मुर्रा
2. ✗ जैस्ती
3. ✗ सिंगोरा
4. ✗ फिल्नुर

Question Number : 25 Question Id : 16800025 Display Question Number : Yes Single Line Question Option : No Option Orientation : Vertical

Which among the following places in Haryana is famous for basketry?

Options :

1. ✗ Gurugram
2. ✓ Faridabad
3. ✗ Jhajjar
4. ✗ Sirsa

Question Number : 25 Question Id : 16800025 Display Question Number : Yes Single Line Question Option : No Option Orientation : Vertical

निम्नलिखित में से कौन सा स्थान हरियाणा में टोकरी बनाने के लिए प्रसिद्ध है?

Options :



1. ✘ गुरुग्राम
2. ✔ फ़रीदाबाद
3. ✘ झज्जर
4. ✘ सिरसा

Question Number : 26 Question Id : 16800026 Display Question Number : Yes Single Line Question Option : No Option Orientation : Vertical

The diphthong 'ow' and 'u' are written in \_\_\_\_\_ vowel place.

Options :

1. ✘ 2<sup>nd</sup>
2. ✘ 1<sup>st</sup>
3. ✘ 4<sup>th</sup>
4. ✔ 3<sup>rd</sup>

Question Number : 26 Question Id : 16800026 Display Question Number : Yes Single Line Question Option : No Option Orientation : Vertical

The diphthong 'ow' and 'u' are written in \_\_\_\_\_ vowel place.

Options :

1. ✘ 2<sup>nd</sup>
2. ✘ 1<sup>st</sup>
3. ✘ 4<sup>th</sup>
4. ✔ 3<sup>rd</sup>

Question Number : 27 Question Id : 16800027 Display Question Number : Yes Single Line Question Option : No Option Orientation : Vertical

In a phrase the words \_\_\_\_\_ are represented by the "n" hook.

Options :

1.  own and on
2.  on and in
3.  own and not
4.  have and of

Question Number : 27 Question Id : 16800027 Display Question Number : Yes Single Line Question Option : No Option Orientation : Vertical

In a phrase the words \_\_\_\_\_ are represented by the “n” hook.

Options :

1.  own and on
2.  on and in
3.  own and not
4.  have and of

Question Number : 28 Question Id : 16800028 Display Question Number : Yes Single Line Question Option : No Option Orientation : Vertical

The doubling principle is not used in the \_\_\_\_\_.

Options :

1.  future tense
2.  past tense
3.  present tense
4.  present continuous tense

Question Number : 28 Question Id : 16800028 Display Question Number : Yes Single Line Question Option : No Option Orientation : Vertical

The doubling principle is not used in the \_\_\_\_\_.

Options :

1.  future tense
2.  past tense

3. ✘ present tense

4. ✘ present continuous tense

Question Number : 29 Question Id : 16800029 Display Question Number : Yes Single Line Question Option : No Option Orientation : Vertical

The vowel  $\bar{o}\bar{o}$  is represented by a \_\_\_\_\_.

Options :

1. ✘ Heavy dot

2. ✘ Light dash

3. ✘ Light dot

4. ✔ Heavy dash

Question Number : 29 Question Id : 16800029 Display Question Number : Yes Single Line Question Option : No Option Orientation : Vertical

The vowel  $\bar{o}\bar{o}$  is represented by a \_\_\_\_\_.

Options :

1. ✘ Heavy dot

2. ✘ Light dash

3. ✘ Light dot

4. ✔ Heavy dash

Question Number : 30 Question Id : 16800030 Display Question Number : Yes Single Line Question Option : No Option Orientation : Vertical

A heavy M represents \_\_\_\_\_.

Options :

1. ✔ Mp

2. ✘ Ml

3. ✘ Mr

4. ✘ Md

Question Number : 30 Question Id : 16800030 Display Question Number : Yes Single Line Question Option : No Option Orientation : Vertical

A heavy M represents \_\_\_\_\_.

Options :

1. ✓ Mp
2. ✗ Ml
3. ✗ Mr
4. ✗ Md

Question Number : 31 Question Id : 16800031 Display Question Number : Yes Single Line Question Option : No Option Orientation : Vertical

'Lity', preceded by any vowel, is expressed by \_\_\_\_\_.

Options :

1. ✗ Joining the preceding stroke
2. ✗ Doubling the preceding stroke
3. ✓ Disjoining the preceding stroke
4. ✗ Halving

Question Number : 31 Question Id : 16800031 Display Question Number : Yes Single Line Question Option : No Option Orientation : Vertical

'Lity', preceded by any vowel, is expressed by \_\_\_\_\_.

Options :

1. ✗ Joining the preceding stroke
2. ✗ Doubling the preceding stroke
3. ✓ Disjoining the preceding stroke
4. ✗ Halving

Question Number : 32 Question Id : 16800032 Display Question Number : Yes Single Line Question Option : No Option Orientation : Vertical

\_\_\_\_\_ G series are strokes written.

Options :

1. ✘ Backward
2. ✘ Upward
3. ✔ Forward
4. ✘ Downward

Question Number : 32 Question Id : 16800032 Display Question Number : Yes Single Line Question Option : No Option Orientation : Vertical

\_\_\_\_\_ G series are strokes written.

Options :

1. ✘ Backward
2. ✘ Upward
3. ✔ Forward
4. ✘ Downward

Question Number : 33 Question Id : 16800033 Display Question Number : Yes Single Line Question Option : No Option Orientation : Vertical

Downward L is halved and \_\_\_\_\_ to indicate a following d.

Options :

1. ✘ Lightened
2. ✘ Doubled
3. ✘ Halved
4. ✔ Thickened

Question Number : 33 Question Id : 16800033 Display Question Number : Yes Single Line Question Option : No Option Orientation : Vertical

Downward L is halved and \_\_\_\_\_ to indicate a following d.

Options :

1. ✘ Lightened
2. ✘ Doubled

3. ✘ Halved

4. ✔ Thickened

Question Number : 34 Question Id : 16800034 Display Question Number : Yes Single Line Question Option : No Option Orientation : Vertical

The vowel ũ is a \_\_\_\_\_ vowel.

Options :

1. ✘ 1<sup>st</sup> place

2. ✘ 3<sup>rd</sup> place

3. ✔ 2<sup>nd</sup> place

4. ✘ 4<sup>th</sup> place

Question Number : 34 Question Id : 16800034 Display Question Number : Yes Single Line Question Option : No Option Orientation : Vertical

The vowel ũ is a \_\_\_\_\_ vowel.

Options :

1. ✘ 1<sup>st</sup> place

2. ✘ 3<sup>rd</sup> place

3. ✔ 2<sup>nd</sup> place

4. ✘ 4<sup>th</sup> place

Question Number : 35 Question Id : 16800035 Display Question Number : Yes Single Line Question Option : No Option Orientation : Vertical

The downward R is used before \_\_\_\_\_.

Options :

1. ✔ M

2. ✘ N

3. ✘ L

4. ✘ D

Question Number : 35 Question Id : 16800035 Display Question Number : Yes Single Line Question Option : No Option Orientation : Vertical

The downward R is used before \_\_\_\_\_.

Options :

1. ✔ M

2. ✘ N

3. ✘ L

4. ✘ D

Question Number : 36 Question Id : 16800036 Display Question Number : Yes Single Line Question Option : No Option Orientation : Vertical

An intersection \_\_\_\_\_ represents the word limited.

Options :

1. ✘ Pl

2. ✔ L

3. ✘ ler

4. ✘ kr

Question Number : 36 Question Id : 16800036 Display Question Number : Yes Single Line Question Option : No Option Orientation : Vertical

An intersection \_\_\_\_\_ represents the word limited.

Options :

1. ✘ Pl

2. ✔ L

3. ✘ ler

4. ✘ kr

Question Number : 37 Question Id : 16800037 Display Question Number : Yes Single Line Question Option : No Option Orientation : Vertical

The stroke n is halved and \_\_\_\_\_ to indicate a following d.

Options :

1.  Thickened
2.  Halved
3.  Lightened
4.  Doubled

Question Number : 37 Question Id : 16800037 Display Question Number : Yes Single Line Question Option : No Option Orientation : Vertical

The stroke n is halved and \_\_\_\_\_ to indicate a following d.

Options :

1.  Thickened
2.  Halved
3.  Lightened
4.  Doubled

Question Number : 38 Question Id : 16800038 Display Question Number : Yes Single Line Question Option : No Option Orientation : Vertical

When a word ends with the combination of 'vowel + r', use a/an \_\_\_\_\_ 'r'.

Options :

1.  Upward
2.  Downward
3.  Horizontal
4.  Vertical

Question Number : 38 Question Id : 16800038 Display Question Number : Yes Single Line Question Option : No Option Orientation : Vertical

When a word ends with the combination of 'vowel + r', use a/an \_\_\_\_\_ 'r'.

Options :

1.  Upward
2.  Downward



3. ✘ Horizontal

4. ✘ Vertical

Question Number : 39 Question Id : 16800039 Display Question Number : Yes Single Line Question Option : No Option Orientation : Vertical

The \_\_\_\_\_ loop is not used at the beginning of a word.

Options :

1. ✘ S

2. ✘ Sd

3. ✘ St

4. ✔ ster

Question Number : 39 Question Id : 16800039 Display Question Number : Yes Single Line Question Option : No Option Orientation : Vertical

The \_\_\_\_\_ loop is not used at the beginning of a word.

Options :

1. ✘ S

2. ✘ Sd

3. ✘ St

4. ✔ ster

Question Number : 40 Question Id : 16800040 Display Question Number : Yes Single Line Question Option : No Option Orientation : Vertical

The small semi circle is used as an abbreviation for w at the beginning of \_\_\_\_\_.

Options :

1. ✘ L

2. ✔ M

3. ✘ N

4. ✘ pr

Question Number : 40 Question Id : 16800040 Display Question Number : Yes Single Line Question Option : No Option Orientation : Vertical


The small semi circle is used as an abbreviation for w at the beginning of \_\_\_\_\_.





Options :

- 1. ✘ L
- 2. ✔ M
- 3. ✘ N
- 4. ✘ pr

Question Number : 41 Question Id : 16800041 Display Question Number : Yes Single Line Question Option : No Option Orientation : Vertical

Select the right word from the options given below to fill in the blank.




- A 
- B 
- C 
- D 

Options :

- 1. ✔ A
- 2. ✘ B
- 3. ✘ C
- 4. ✘ D

Question Number : 41 Question Id : 16800041 Display Question Number : Yes Single Line Question Option : No Option Orientation : Vertical

Select the right word from the options given below to fill in the blank.



Options :

1. ✓ A

2. ✗ B

3. ✗ C

4. ✗ D

Question Number : 42 Question Id : 16800042 Display Question Number : Yes Single Line Question Option : No Option Orientation : Vertical

Select the right word from the options given below to fill in the blank.

\_\_\_\_\_

A \_\_\_\_\_

B \_\_\_\_\_

C \_\_\_\_\_

D \_\_\_\_\_

Options :

1. ✓ A


2. ✗ B

3. ✗ C

4. ✗ D

Question Number : 42 Question Id : 16800042 Display Question Number : Yes Single Line Question Option : No Option Orientation : Vertical

Select the right word from the options given below to fill in the blank.



A 

B 

C 

D 

Options :

1. ✓ A

2. ✗ B

3. ✗ C


4. ✗ D

Question Number : 43 Question Id : 16800043 Display Question Number : Yes Single Line Question Option : No Option Orientation : Vertical

Select the right word from the options given below to fill in the blank.



A 

B 

C 

D 

Options :

1. ✘ A

2. ✔ B

3. ✘ C

4. ✘ D

Question Number : 43 Question Id : 16800043 Display Question Number : Yes Single Line Question Option : No Option Orientation : Vertical

Select the right word from the options given below to fill in the blank.



A 

B 

C 

D 

Options :

1. ✘ A

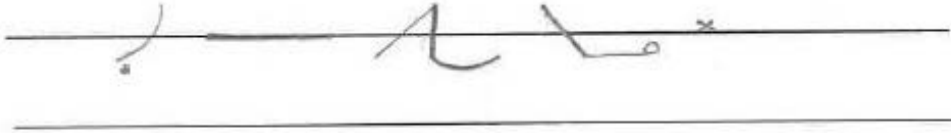
2. ✔ B





3. ✘ C

4. ✘ D

Question Number : 44 Question Id : 16800044 Display Question Number : Yes Single Line Question Option : No Option Orientation : Vertical

Select the right word from the options given below to fill in the blank.



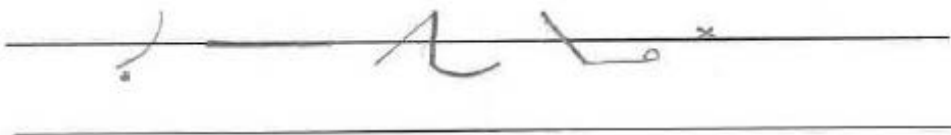
- A 
- B 
- C 
- D 





Options :

- 1. ✘ A
- 2. ✘ B
- 3. ✔ C
- 4. ✘ D

Question Number : 44 Question Id : 16800044 Display Question Number : Yes Single Line Question Option : No Option Orientation : Vertical

Select the right word from the options given below to fill in the blank.



- A 
- B 
- C 
- D 

Options :

1. ✘ A


2. ✘ B

3. ✔ C

4. ✘ D

Question Number : 45 Question Id : 16800045 Display Question Number : Yes Single Line Question Option : No Option Orientation : Vertical

Select the right word from the options given below to fill in the blank.



A

B

C

D

Options :

1. ✔ A

2. ✘ B


3. ✘ C

4. ✘ D

Question Number : 45 Question Id : 16800045 Display Question Number : Yes Single Line Question Option : No Option Orientation : Vertical



Select the right word from the options given below to fill in the blank.



- A
- B
- C
- D

Options :

- 1. ✓ A
- 2. ✗ B
- 3. ✗ C
- 4. ✗ D

Question Number : 46 Question Id : 16800046 Display Question Number : Yes Single Line Question Option : No Option Orientation : Vertical

Fill in the blanks in the sentence below with suitable articles. Choose your answer from the options given:

Today the homestead looks much as it did in \_\_\_ 1880s: \_\_\_ neat cluster of whitewashed, red-roofed buildings set on \_\_\_ sheltered bay, flanked by green hills and jagged, snow-streaked Andean peaks.

Options :

- 1. ✓ the, a, a
- 2. ✗ a, the, the
- 3. ✗ a, a, the
- 4. ✗ a, a, a

Question Number : 46 Question Id : 16800046 Display Question Number : Yes Single Line Question Option : No Option Orientation : Vertical

Fill in the blanks in the sentence below with suitable articles. Choose your answer from the options given:

Today the homestead looks much as it did in \_\_\_ 1880s: \_\_\_ neat cluster of whitewashed, red-roofed buildings set on \_\_\_ sheltered bay, flanked by green hills and jagged, snow-streaked Andean peaks.

Options :

1. ✓ the, a, a
2. ✗ a, the, the
3. ✗ a, a, the
4. ✗ a, a, a

Question Number : 47 Question Id : 16800047 Display Question Number : Yes Single Line Question Option : No Option Orientation : Vertical

Fill in the blanks in the sentence below with suitable articles. Choose your answer from the options given:

Harberton was \_\_\_ working sheep ranch until \_\_\_ mid-1990s, when falling wool prices, poaching, wild dog attacks and \_\_\_ particularly harsh winter that wiped out 80% of \_\_\_ livestock prompted the move into tourism.

Options :

1. ✗ the, the, a, the
2. ✓ a, the, a, the
3. ✗ the, a, the, the
4. ✗ a, a, the, the

Question Number : 47 Question Id : 16800047 Display Question Number : Yes Single Line Question Option : No Option Orientation : Vertical

Fill in the blanks in the sentence below with suitable articles. Choose your answer from the options given:

Harberton was \_\_\_ working sheep ranch until \_\_\_ mid-1990s, when falling wool prices, poaching, wild dog attacks and \_\_\_ particularly harsh winter that wiped out 80% of \_\_\_ livestock prompted the move into tourism.

Options :

1. ✗ the, the, a, the
2. ✓ a, the, a, the
3. ✗ the, a, the, the
4. ✗ a, a, the, the

Question Number : 48 Question Id : 16800048 Display Question Number : Yes Single Line Question Option : No Option Orientation : Vertical

Fill in the blanks in the sentence below with suitable prepositions. Choose your answer from the options given:

Located \_\_ a peninsula jutting out \_\_\_ the gunboat-grey Beagle Channel, Estancia Harborton was founded \_\_ 1886 \_\_  
British missionary Thomas Bridges.

Options :

1. ✘ in, under, on, by
2. ✘ under, in, in, by
3. ✔ on, into, in, by
4. ✘ off, over, in, by

Question Number : 48 Question Id : 16800048 Display Question Number : Yes Single Line Question Option : No Option  
Orientation : Vertical

Fill in the blanks in the sentence below with suitable prepositions. Choose your answer from the options given:

Located \_\_ a peninsula jutting out \_\_\_ the gunboat-grey Beagle Channel, Estancia Harborton was founded \_\_ 1886 \_\_  
British missionary Thomas Bridges.

Options :

1. ✘ in, under, on, by
2. ✘ under, in, in, by
3. ✔ on, into, in, by
4. ✘ off, over, in, by

Question Number : 49 Question Id : 16800049 Display Question Number : Yes Single Line Question Option : No Option  
Orientation : Vertical

Fill in the blank in the sentence below with a suitable modal verb. Choose your answer from the options given:

There \_\_\_\_\_ only be one maistu at a time, and in order to become one, you must devote your life to learning the  
techniques from the existing master.

Options :

1. ✔ can
2. ✘ could
3. ✘ have
4. ✘ ought

Question Number : 49 Question Id : 16800049 Display Question Number : Yes Single Line Question Option : No Option Orientation : Vertical

Fill in the blank in the sentence below with a suitable modal verb. Choose your answer from the options given:

There \_\_\_\_\_ only be one maistu at a time, and in order to become one, you must devote your life to learning the techniques from the existing master.

Options :

1. ✓ can
2. ✗ could
3. ✗ have
4. ✗ ought

Question Number : 50 Question Id : 16800050 Display Question Number : Yes Single Line Question Option : No Option Orientation : Vertical

A sentence is given in four parts as options. One of the parts contains an error. Choose the option that has the error:

Options :

1. ✓ Each springs, under the cover of darkness and guarded
2. ✗ by members of the Italian Coast Guard, 62-year-old Chiara Vigo
3. ✗ slips on a white tunic, recites a prayer and plunges
4. ✗ headfirst into the crystalline sea off the tiny Sardinian island of Sant'Antioco.

Question Number : 50 Question Id : 16800050 Display Question Number : Yes Single Line Question Option : No Option Orientation : Vertical

A sentence is given in four parts as options. One of the parts contains an error. Choose the option that has the error:

Options :

1. ✓ Each springs, under the cover of darkness and guarded
2. ✗ by members of the Italian Coast Guard, 62-year-old Chiara Vigo
3. ✗ slips on a white tunic, recites a prayer and plunges
4. ✗ headfirst into the crystalline sea off the tiny Sardinian island of Sant'Antioco.

Question Number : 51 Question Id : 16800051 Display Question Number : Yes Single Line Question Option : No Option Orientation : Vertical

Choose the option that offers the correct **synonym** of the highlighted word in the sentence given below. Pay attention to the meaning of the highlighted word in context of the sentence:

Tierra del Fuego, a **remote**, windswept archipelago at the bottom of South America, might offer little in terms of animals and trees, but when it comes to lichen, fungi and bryophytes (the collective name for mosses, liverworts and hornworts) it is among the richest corners of the planet.

Options :

1. ✘ nearby
2. ✘ device
3. ✔ distant
4. ✘ known

Question Number : 51 Question Id : 16800051 Display Question Number : Yes Single Line Question Option : No Option Orientation : Vertical

Choose the option that offers the correct **synonym** of the highlighted word in the sentence given below. Pay attention to the meaning of the highlighted word in context of the sentence:

Tierra del Fuego, a **remote**, windswept archipelago at the bottom of South America, might offer little in terms of animals and trees, but when it comes to lichen, fungi and bryophytes (the collective name for mosses, liverworts and hornworts) it is among the richest corners of the planet.

Options :

1. ✘ nearby
2. ✘ device
3. ✔ distant
4. ✘ known

Question Number : 52 Question Id : 16800052 Display Question Number : Yes Single Line Question Option : No Option Orientation : Vertical

Choose the option that offers the correct **antonym** of the highlighted word in the sentence given below. Pay attention to the meaning of the highlighted word in context of the sentence:

The **minute** plants play host to even smaller insects, snails and other creepy crawlies.

Options :

1. ✘ wee
2. ✘ puny
3. ✔ giant

4. ✘ significant

Question Number : 52 Question Id : 16800052 Display Question Number : Yes Single Line Question Option : No Option Orientation : Vertical

Choose the option that offers the correct **antonym** of the highlighted word in the sentence given below. Pay attention to the meaning of the highlighted word in context of the sentence:

The **minute** plants play host to even smaller insects, snails and other creepy crawlies.

Options :

1. ✘ wee

2. ✘ puny

3. ✔ giant

4. ✘ significant

Question Number : 53 Question Id : 16800053 Display Question Number : Yes Single Line Question Option : No Option Orientation : Vertical

From the options given below, choose the sentence that has the conjunctions used correctly:

Options :

1. ✔ Scarcely had I gone, when my daughter returned home.

2. ✘ Scarcely had I gone, then my daughter returned home.

3. ✘ Scarcely had I gone, than my daughter returned home.

4. ✘ Scarcely had I gone, while my daughter returned home.

Question Number : 53 Question Id : 16800053 Display Question Number : Yes Single Line Question Option : No Option Orientation : Vertical

From the options given below, choose the sentence that has the conjunctions used correctly:

Options :

1. ✔ Scarcely had I gone, when my daughter returned home.

2. ✘ Scarcely had I gone, then my daughter returned home.

3. ✘ Scarcely had I gone, than my daughter returned home.

4. ✘ Scarcely had I gone, while my daughter returned home.

Question Number : 54 Question Id : 16800054 Display Question Number : Yes Single Line Question Option : No Option Orientation : Vertical

*From the options given below, choose the word that can be used as a relative pronoun:*

The girl and her pet dog \_\_\_ trespassed on the club premises were turned out.

Options :

1. ✘ whom
2. ✘ who
3. ✘ which
4. ✔ that

Question Number : 54 Question Id : 16800054 Display Question Number : Yes Single Line Question Option : No Option Orientation : Vertical

*From the options given below, choose the word that can be used as a relative pronoun:*

The girl and her pet dog \_\_\_ trespassed on the club premises were turned out.

Options :

1. ✘ whom
2. ✘ who
3. ✘ which
4. ✔ that

Question Number : 55 Question Id : 16800055 Display Question Number : Yes Single Line Question Option : No Option Orientation : Vertical

*From the options given below choose the one that has been spelt correctly to form a proper sentence:*

Vigo has an \_\_\_\_\_ knowledge of 124 natural dye variations made from fruits, flowers and seashells.

Options :

1. ✘ encyclopeadic
2. ✘ encycloepaedic
3. ✘ encyclopaedac
4. ✔ encyclopedic

Question Number : 55 Question Id : 16800055 Display Question Number : Yes Single Line Question Option : No Option Orientation : Vertical

From the options given below choose the one that has been spelt correctly to form a proper sentence:

Vigo has an \_\_\_\_\_ knowledge of 124 natural dye variations made from fruits, flowers and seashells.

Options :

1. ✘ encyclopeadic
2. ✘ encycloepaedic
3. ✘ encyclopaedac
4. ✔ encyclopedic

Question Number : 56 Question Id : 16800056 Display Question Number : Yes Single Line Question Option : No Option Orientation : Vertical

जिस संज्ञा से किसी एक वस्तु या व्यक्ति का बोध होता है, वह संज्ञा है-

Options :

1. ✘ जातिवाचक संज्ञा
2. ✔ व्यक्तिवाचक संज्ञा
3. ✘ भाववाचक संज्ञा
4. ✘ समूहवाचक संज्ञा

Question Number : 56 Question Id : 16800056 Display Question Number : Yes Single Line Question Option : No Option Orientation : Vertical

जिस संज्ञा से किसी एक वस्तु या व्यक्ति का बोध होता है, वह संज्ञा है-

Options :

1. ✘ जातिवाचक संज्ञा
2. ✔ व्यक्तिवाचक संज्ञा
3. ✘ भाववाचक संज्ञा



4. ✘ समूहवाचक संज्ञा

Question Number : 57 Question Id : 16800057 Display Question Number : Yes Single Line Question Option : No Option Orientation : Vertical

जिस अलंकार में वर्णों की पुनरावृत्ति होती है वह अलंकार होगा-

Options :

1. ✔ अनुप्रास

2. ✘ यमक

3. ✘ उत्पेक्षा

4. ✘ उपमा

Question Number : 57 Question Id : 16800057 Display Question Number : Yes Single Line Question Option : No Option Orientation : Vertical

जिस अलंकार में वर्णों की पुनरावृत्ति होती है वह अलंकार होगा-

Options :

1. ✔ अनुप्रास

2. ✘ यमक

3. ✘ उत्पेक्षा

4. ✘ उपमा

Question Number : 58 Question Id : 16800058 Display Question Number : Yes Single Line Question Option : No Option Orientation : Vertical

'सात्विक' शब्द का सटीक विलोम होगा-

Options :

1. ✘ राजसी

2. ✘ आनंदित

3. ✘ दुःखी

4. ✔ तामसिक

Question Number : 58 Question Id : 16800058 Display Question Number : Yes Single Line Question Option : No Option Orientation : Vertical

‘सात्विक’ शब्द का सटीक विलोम होगा-

Options :

1. ✘ राजसी
2. ✘ आनंदित
3. ✘ दुःखी
4. ✔ तामसिक

Question Number : 59 Question Id : 16800059 Display Question Number : Yes Single Line Question Option : No Option Orientation : Vertical

मेरे पिताजी अपने वादे के पक्के हैं। इस वाक्य के रेखांकित मुहावरे का सही अर्थ होगा-

Options :

1. ✘ डींग हाकना।
2. ✘ बड़ी-बड़ी शर्तें लगाना।
3. ✔ बात का धनी होना।
4. ✘ बड़ी बड़ी कल्पनाएं करना।

Question Number : 59 Question Id : 16800059 Display Question Number : Yes Single Line Question Option : No Option Orientation : Vertical

मेरे पिताजी अपने वादे के पक्के हैं। इस वाक्य के रेखांकित मुहावरे का सही अर्थ होगा-

Options :

1. ✘ डींग हाकना।
2. ✘ बड़ी-बड़ी शर्तें लगाना।
3. ✔ बात का धनी होना।
4. ✘ बड़ी बड़ी कल्पनाएं करना।

Question Number : 60 Question Id : 16800060 Display Question Number : Yes Single Line Question Option : No Option Orientation : Vertical

'चन्द्रोदय' शब्द का संधि विच्छेद होगा-

Options :

1. ✓ चन्द्र + उदय
2. ✗ चन्द्र + ऊदय
3. ✗ चन्द्रो + दय
4. ✗ चन्द्र + दाय

Question Number : 60 Question Id : 16800060 Display Question Number : Yes Single Line Question Option : No Option Orientation : Vertical

'चन्द्रोदय' शब्द का संधि विच्छेद होगा-

Options :

1. ✓ चन्द्र + उदय
2. ✗ चन्द्र + ऊदय
3. ✗ चन्द्रो + दय
4. ✗ चन्द्र + दाय

Question Number : 61 Question Id : 16800061 Display Question Number : Yes Single Line Question Option : No Option Orientation : Vertical

कौन-से वाक्य में अपादान कारक का प्रयोग हुआ है?

Options :

1. ✗ मेरा घर बहुत ही अच्छा है।
2. ✗ रेखांकित वाक्य को पूरा कीजिए।
3. ✗ उसे बाहर जाना है।
4. ✓ वृक्ष से फल गिरते हैं।

Question Number : 61 Question Id : 16800061 Display Question Number : Yes Single Line Question Option : No Option Orientation : Vertical

कौन-से वाक्य में अपादान कारक का प्रयोग हुआ है?

Options :

1. ✘ मेरा घर बहुत ही अच्छा है।
2. ✘ रेखांकित वाक्य को पूरा कीजिए।
3. ✘ उसे बाहर जाना है।
4. ✔ वृक्ष से फल गिरते हैं।

Question Number : 62 Question Id : 16800062 Display Question Number : Yes Single Line Question Option : No Option Orientation : Vertical

जिस दृश्य में नायक-नायिका का विरह वर्णन हो वहां रस होगा-

Options :

1. ✘ वीर रस
2. ✘ रौद्र रस
3. ✔ वियोग शृंगार रस
4. ✘ करुण रस

Question Number : 62 Question Id : 16800062 Display Question Number : Yes Single Line Question Option : No Option Orientation : Vertical

जिस दृश्य में नायक-नायिका का विरह वर्णन हो वहां रस होगा-

Options :

1. ✘ वीर रस
2. ✘ रौद्र रस
3. ✔ वियोग शृंगार रस
4. ✘ करुण रस

Question Number : 63 Question Id : 16800063 Display Question Number : Yes Single Line Question Option : No Option Orientation : Vertical

'मुरलीधर' शब्द में कौन-सा समास समाहित है?

Options :

1. ✘ कर्मधारय समास
2. ✘ अव्ययीभाव समास
3. ✔ बहुब्रीहि समास
4. ✘ तत्पुरुष समास

Question Number : 63 Question Id : 16800063 Display Question Number : Yes Single Line Question Option : No Option Orientation : Vertical

‘मुरलीधर’ शब्द में कौन-सा समास समाहित है?

Options :

1. ✘ कर्मधारय समास
2. ✘ अव्ययीभाव समास
3. ✔ बहुब्रीहि समास
4. ✘ तत्पुरुष समास

Question Number : 64 Question Id : 16800064 Display Question Number : Yes Single Line Question Option : No Option Orientation : Vertical

जो आलोचना करता है उसे कहते हैं-

Options :

1. ✘ समीक्षक
2. ✘ समालोचक
3. ✘ जिज्ञासु
4. ✔ आलोचक

Question Number : 64 Question Id : 16800064 Display Question Number : Yes Single Line Question Option : No Option Orientation : Vertical

जो आलोचना करता है उसे कहते हैं-

Options :

1. ✘ समीक्षक

2. ✘ समालोचक
3. ✘ जिज्ञासु
4. ✔ आलोचक

Question Number : 65 Question Id : 16800065 Display Question Number : Yes Single Line Question Option : No Option Orientation : Vertical

'जल की मछली जल ही में पली' लोकोक्ति का सही अर्थ होगा-

Options :

1. ✘ हमें जल की मछली की तरह रहना चाहिए।
2. ✘ अपना कार्य खुद करना चाहिए।
3. ✘ जीवन में सदैव हँसते रहना चाहिए।
4. ✔ जो जहां होता है उसे वहीं अच्छा लगता है।

Question Number : 65 Question Id : 16800065 Display Question Number : Yes Single Line Question Option : No Option Orientation : Vertical

'जल की मछली जल ही में पली' लोकोक्ति का सही अर्थ होगा-

Options :

1. ✘ हमें जल की मछली की तरह रहना चाहिए।
2. ✘ अपना कार्य खुद करना चाहिए।
3. ✘ जीवन में सदैव हँसते रहना चाहिए।
4. ✔ जो जहां होता है उसे वहीं अच्छा लगता है।

Question Number : 66 Question Id : 16800066 Display Question Number : Yes Single Line Question Option : No Option Orientation : Vertical

The total number of even factors of  $2^5 \times 3^3 \times 5^2$  is:

Options :

1. ✘ 65

2. ✘ 30

3. ✘ 10

4. ✔ 60

Question Number : 66 Question Id : 16800066 Display Question Number : Yes Single Line Question Option : No Option Orientation : Vertical

$2^5 \times 3^3 \times 5^2$  के सम गुणखंडों की कुल संख्या है:

Options :

1. ✘ 65

2. ✘ 30

3. ✘ 10

4. ✔ 60

Question Number : 67 Question Id : 16800067 Display Question Number : Yes Single Line Question Option : No Option Orientation : Vertical

The average of the first 50 positive integers is:

Options :

1. ✔ 25.5

2. ✘ 25

3. ✘ 637.5

4. ✘ 25.6

Question Number : 67 Question Id : 16800067 Display Question Number : Yes Single Line Question Option : No Option Orientation : Vertical

पहले 50 धनात्मक पूर्णांकों का औसत है:

Options :

1. ✔ 25.5

2. ✘ 25

3. ✘ 637.5

4. ✘ 25.6

Question Number : 68 Question Id : 16800068 Display Question Number : Yes Single Line Question Option : No Option Orientation : Vertical

A person deposits ₹ 1,000 each on 1 January and 1 July in a year. The compound interest obtained at the end of the year, if the interest is 10% compounded half yearly, is:

Options :

1. ✘ ₹ 155

2. ✘ ₹ 152

3. ✔ ₹ 152.5

4. ✘ ₹ 158

Question Number : 68 Question Id : 16800068 Display Question Number : Yes Single Line Question Option : No Option Orientation : Vertical

एक व्यक्ति एक वर्ष में 1 जनवरी और 1 जुलाई को ₹ 1,000 जमा करता है। यदि ब्याज की दर 10% है और ब्याज अर्धवार्षिक संयोजित होता है, तो वर्ष के अंत में प्राप्त होने वाला चक्रवृद्धि ब्याज है:

Options :

1. ✘ ₹ 155

2. ✘ ₹ 152

3. ✔ ₹ 152.5

4. ✘ ₹ 158

Question Number : 69 Question Id : 16800069 Display Question Number : Yes Single Line Question Option : No Option Orientation : Vertical

A person's salary increased by 50% and then decreased by 50%. His gain or loss percentage is:

Options :

1. ✘ 25% gain

2. ✔ 25% loss

3. ✘ 75% loss

4. ✘ 75% gain



Question Number : 69 Question Id : 16800069 Display Question Number : Yes Single Line Question Option : No Option Orientation : Vertical

एक व्यक्ति के वेतन में 50% की वृद्धि की जाती है और फिर 50% कमी कर दी जाती है। उसका लाभ या हानि प्रतिशत है:

Options :

1. ✘ 25% लाभ
2. ✔ 25% हानि
3. ✘ 75% हानि
4. ✘ 75% लाभ

Question Number : 70 Question Id : 16800070 Display Question Number : Yes Single Line Question Option : No Option Orientation : Vertical

If roots of the equation  $x^2 + bx + c = 0$  are two consecutive odd numbers, then  $b^2 - 4c = ?$

Options :

1. ✘ -4
2. ✔ 4
3. ✘ 2
4. ✘ -2

Question Number : 70 Question Id : 16800070 Display Question Number : Yes Single Line Question Option : No Option Orientation : Vertical

यदि समीकरण  $x^2 + bx + c = 0$  के मूल दो क्रमागत विषम संख्याएं हैं, तो  $b^2 - 4c = ?$

Options :

1. ✘ -4
2. ✔ 4
3. ✘ 2
4. ✘ -2

Question Number : 71 Question Id : 16800071 Display Question Number : Yes Single Line Question Option : No Option Orientation : Vertical

X and Y together have ₹ 700. If  $\frac{8}{5}$  of X's share is equal to  $\frac{4}{15}$  of Y's share. Then what is the amount that Y has?

Options :

1. ✓ ₹ 600
2. ✗ ₹ 160
3. ✗ ₹ 100
4. ✗ ₹ 500

Question Number : 71 Question Id : 16800071 Display Question Number : Yes Single Line Question Option : No Option Orientation : Vertical

X और Y के पास कुल मिलाकर ₹ 700 है। यदि X के हिस्से का  $\frac{8}{5}$  भाग Y के हिस्से के  $\frac{4}{15}$  भाग के बराबर है, तो Y के पास कितनी धनराशि है?

Options :

1. ✓ ₹ 600
2. ✗ ₹ 160
3. ✗ ₹ 100
4. ✗ ₹ 500

Question Number : 72 Question Id : 16800072 Display Question Number : Yes Single Line Question Option : No Option Orientation : Vertical

A person covers a road trip in 15 hours. He travels half trip at 20 kmph and second half at 25 kmph. Then the total road trip in km is: (Round to one decimal place)

Options :

1. ✗ 333 km
2. ✗ 330.3 km
3. ✓ 333.3 km
4. ✗ 323.3 km

Question Number : 72 Question Id : 16800072 Display Question Number : Yes Single Line Question Option : No Option Orientation : Vertical

एक व्यक्ति एक सड़क-यात्रा को 15 घंटों में पूरा करता है। वह यात्रा का पहला आधा भाग 20 किमी/घंटे और दूसरा आधा भाग 25 किमी/घंटे की चाल से तय करता है। सड़क-यात्रा की कुल दूरी किमी में है: (दशमलव के एक स्थान तक पूर्णांकित किया हुआ)

Options :

1. ✗ 333 किमी

2. ✘ 330.3 किमी
3. ✔ 333.3 किमी
4. ✘ 323.3 किमी

Question Number : 73 Question Id : 16800073 Display Question Number : Yes Single Line Question Option : No Option Orientation : Vertical

To finish a work, X takes thrice as much time as Y or twice as much time as Z. If they all work together, they can finish the work in 4 days. If Z works alone, the number of days taken to complete the same work is:

Options :

1. ✘ 8
2. ✘ 24
3. ✘ 6
4. ✔ 12

Question Number : 73 Question Id : 16800073 Display Question Number : Yes Single Line Question Option : No Option Orientation : Vertical

एक कार्य को समाप्त करने के लिए X द्वारा लिया जाने वाला समय Y द्वारा लिये जाने वाले समय से तीन गुना या Z द्वारा लिये जाने वाले समय से दोगुना है। यदि वे तीनों मिलकर कार्य करते हैं, तो वे कार्य को 4 दिनों में समाप्त कर सकते हैं। यदि Z अकेला कार्य करता है, तो उसी कार्य को समाप्त करने के लिए आवश्यक दिनों की संख्या है:

Options :

1. ✘ 8
2. ✘ 24
3. ✘ 6
4. ✔ 12

Question Number : 74 Question Id : 16800074 Display Question Number : Yes Single Line Question Option : No Option Orientation : Vertical

A milkman possesses 30 litres of milk. From this milk container, he removes 3 litres of milk and replaces it with water. To obtain the profit, he repeats this process further two more times. So, finally, the amount of milk in the container is:

Options :

1. ✘ 22 litres
2. ✔ 21.87 litres

3. ✘ 21 litres

4. ✘ 21.5 litres

Question Number : 74 Question Id : 16800074 Display Question Number : Yes Single Line Question Option : No Option Orientation : Vertical

एक दूधवाले के पास 30 लीटर दूध है। इस दूध के डिब्बे से वह 3 लीटर दूध निकाल देता है और इसमें उतना ही पानी मिला देता है। लाभ अर्जित करने के लिए वह इस प्रक्रिया को दो बार और दोहराता है। अंत में डिब्बे में दूध की मात्रा है:

Options :

1. ✘ 22 लीटर

2. ✔ 21.87 लीटर

3. ✘ 21 लीटर

4. ✘ 21.5 लीटर

Question Number : 75 Question Id : 16800075 Display Question Number : Yes Single Line Question Option : No Option Orientation : Vertical

The owner of a shop expects a gain of 25% on his cost price. If his sale was ₹ 500, then his profit would be:

Options :

1. ✔ ₹ 100

2. ✘ ₹ 400

3. ✘ ₹ 200

4. ✘ ₹ 150

Question Number : 75 Question Id : 16800075 Display Question Number : Yes Single Line Question Option : No Option Orientation : Vertical

एक दुकानदार अपने क्रय मूल्य पर 25% के लाभ की अपेक्षा करता है। यदि उसकी बिक्री ₹ 500 थी, तो उसके द्वारा अर्जित लाभ होगा:

Options :

1. ✔ ₹ 100

2. ✘ ₹ 400

3. ✘ ₹ 200

4. ✘ ₹ 150

Question Number : 76 Question Id : 16800076 Display Question Number : Yes Single Line Question Option : No Option Orientation : Vertical

A block of wood floats in water such that one-fifth of its volume is under water. Let  $d_b$  and  $d_w$  be the density of the block and water respectively. Then  $d_b/d_w$  is:

Options :

1. ✘ 0.1

2. ✔ 0.2

3. ✘ 2.0

4. ✘ 5.0

Question Number : 76 Question Id : 16800076 Display Question Number : Yes Single Line Question Option : No Option Orientation : Vertical

लकड़ी का एक ब्लॉक पानी में इस प्रकार तैरता है कि इसका पांचवां भाग पानी के नीचे है। मान लीजिए  $d_b$  और  $d_w$  क्रमशः ब्लॉक और पानी का घनत्व हैं। तो  $d_b/d_w$  है:

Options :

1. ✘ 0.1

2. ✔ 0.2

3. ✘ 2.0

4. ✘ 5.0

Question Number : 77 Question Id : 16800077 Display Question Number : Yes Single Line Question Option : No Option Orientation : Vertical

An object is thrown vertically upwards and rises to a height of 19.6 m. The speed with which it was thrown is:

Options :

1. ✘ 4.8 m/s

2. ✘ 9.6 m/s

3. ✘ 14.4 m/s

4. ✔ 19.6 m/s

Question Number : 77 Question Id : 16800077 Display Question Number : Yes Single Line Question Option : No Option  
Orientation : Vertical

किसी वस्तु को उर्ध्वाधर दिशा में ऊपर की ओर फेंका जाता है और यह 19.6 मीटर की ऊंचाई तक जाती है। इसे फेंकने की गति है:

Options :

1. ✘ 4.8 मीटर/सेकंड
2. ✘ 9.6 मीटर/सेकंड
3. ✘ 14.4 मीटर/सेकंड
4. ✔ 19.6 मीटर/सेकंड

Question Number : 78 Question Id : 16800078 Display Question Number : Yes Single Line Question Option : No Option  
Orientation : Vertical

An object is placed on the principal axis of a concave mirror at a distance greater than twice its focal length. How the image formed by the mirror can be described?

Options :

1. ✔ Real and Diminished
2. ✘ Real and Enlarged
3. ✘ Virtual and Enlarged
4. ✘ Virtual and Diminished

Question Number : 78 Question Id : 16800078 Display Question Number : Yes Single Line Question Option : No Option  
Orientation : Vertical

किसी वस्तु को अवतल दर्पण के मुख्य अक्ष रेखा पर इसकी फोकल लम्बाई से, दुगने से अधिक दूरी पर रखा जाता है। दर्पण द्वारा बनाई गई छवि को कैसे वर्णित किया जा सकता है?

Options :

1. ✔ वास्तविक और संकुचित
2. ✘ वास्तविक और आकार में बड़ी
3. ✘ आभासी और आकार में बड़ी
4. ✘ आभासी और संकुचित

Question Number : 79 Question Id : 16800079 Display Question Number : Yes Single Line Question Option : No Option Orientation : Vertical

When a ray of light passes from air to a slab of ice, it bends \_\_\_\_\_

Options :

1. ✘ away from the normal and slows down.
2. ✔ towards the normal and slows down.
3. ✘ away from the normal and speeds up.
4. ✘ towards the normal and speeds up.

Question Number : 79 Question Id : 16800079 Display Question Number : Yes Single Line Question Option : No Option Orientation : Vertical

जब रोशनी की किरण हवा से होती हुई बर्फ के खंड से गुजरती है, तो यह:

Options :

1. ✘ सामान्य से दूर मुड़ जाती है और गति में धीमी हो जाती है।
2. ✔ सामान्य की तरफ मुड़ जाती है और गति में धीमी हो जाती है।
3. ✘ सामान्य से दूर मुड़ जाती है और गति तीव्र हो जाती है।
4. ✘ सामान्य की तरफ मुड़ जाती है और गति तीव्र हो जाती है।

Question Number : 80 Question Id : 16800080 Display Question Number : Yes Single Line Question Option : No Option Orientation : Vertical

An object is placed at a distance of 30 cm in front of a convex mirror of radius of curvature 40 cm. Following Cartesian sign convention, the image distance  $v$  and the magnification  $m$  are respectively:

Options :

1. ✘ 12 cm, -0.4
2. ✘ 15 cm, -0.5
3. ✔ 12 cm, 0.4
4. ✘ 15 cm, 0.5

Question Number : 80 Question Id : 16800080 Display Question Number : Yes Single Line Question Option : No Option Orientation : Vertical

एक वस्तु को 40 सेंटीमीटर वक्रता त्रिज्या वाले उत्तल दर्पण के सामने 30 सेंटीमीटर की दूरी पर रखा जाता है। कार्टेसियन संकेत रीति में, प्रतिबिम्ब की दूरी  $v$  और आवर्धन  $m$  क्रमशः हैं:

Options :

1. ✘ 12 सेंटीमीटर, -0.4
2. ✘ 15 सेंटीमीटर, -0.5
3. ✔ 12 सेंटीमीटर, 0.4
4. ✘ 15 सेंटीमीटर, 0.5

Question Number : 81 Question Id : 16800081 Display Question Number : Yes Single Line Question Option : No Option Orientation : Vertical

What is the total number of atoms present in 17 grams of Ammonia (NH<sub>3</sub>)?

Options :

1. ✔  $4 \times 6.023 \times 10^{23}$
2. ✘  $2 \times 6.023 \times 10^{23}$
3. ✘  $3 \times 6.023 \times 10^{23}$
4. ✘  $5 \times 6.023 \times 10^{23}$

Question Number : 81 Question Id : 16800081 Display Question Number : Yes Single Line Question Option : No Option Orientation : Vertical

17 ग्राम अमोनिया (NH<sub>3</sub>) में उपस्थित कुल परमाणुओं की संख्या कितनी होगी?

Options :

1. ✔  $4 \times 6.023 \times 10^{23}$
2. ✘  $2 \times 6.023 \times 10^{23}$
3. ✘  $3 \times 6.023 \times 10^{23}$
4. ✘  $5 \times 6.023 \times 10^{23}$

Question Number : 82 Question Id : 16800082 Display Question Number : Yes Single Line Question Option : No Option Orientation : Vertical

Which one of the following non-metals is trivalent?



Options :

1. ✘ Oxygen
2. ✔ Nitrogen
3. ✘ Chlorine
4. ✘ Bromine

Question Number : 82 Question Id : 16800082 Display Question Number : Yes Single Line Question Option : No Option Orientation : Vertical

निम्नलिखित में से कौन सी अधातु त्रिसंयोजी है?

Options :

1. ✘ ऑक्सीजन
2. ✔ नाइट्रोजन
3. ✘ क्लोरीन
4. ✘ ब्रोमीन

Question Number : 83 Question Id : 16800083 Display Question Number : Yes Single Line Question Option : No Option Orientation : Vertical

Which one of the following represents the formula of an ester?

Options :

1. ✘ RCOR
2. ✔ RCOOR
3. ✘ ROR
4. ✘ R-H

Question Number : 83 Question Id : 16800083 Display Question Number : Yes Single Line Question Option : No Option Orientation : Vertical

निम्नलिखित में से कौन सा विकल्प एस्टर का सूत्र दर्शाता है?

Options :

1. ✘ RCOR

2. ✓ RCOOR

3. ✗ ROR

4. ✗ R-H

Question Number : 84 Question Id : 16800084 Display Question Number : Yes Single Line Question Option : No Option Orientation : Vertical

Which one of the following is the functional isomer of  $\text{CH}_3\text{OCH}_3$  (dimethyl ether)?

Options :

1. ✗  $\text{CH}_3\text{COCH}_3$ 2. ✓  $\text{CH}_3\text{CH}_2\text{OH}$ 3. ✗  $\text{CH}_3\text{COOH}$ 4. ✗  $\text{CH}_3\text{CHO}$ 

Question Number : 84 Question Id : 16800084 Display Question Number : Yes Single Line Question Option : No Option Orientation : Vertical

निम्नलिखित में से कौन सा विकल्प  $\text{CH}_3\text{OCH}_3$  (डाइमेथिल ईथर) का क्रियात्मक समावयवी (आयसोमर) है?

Options :

1. ✗  $\text{CH}_3\text{COCH}_3$ 2. ✓  $\text{CH}_3\text{CH}_2\text{OH}$ 3. ✗  $\text{CH}_3\text{COOH}$ 4. ✗  $\text{CH}_3\text{CHO}$ 

Question Number : 85 Question Id : 16800085 Display Question Number : Yes Single Line Question Option : No Option Orientation : Vertical

Which one of the following hydrocarbons is unsaturated?

Options :

1. ✗ Cyclohexane

2. ✓ Benzene

3. ✗ Propane

4. ✘ 2 Methyl Butane

Question Number : 85 Question Id : 16800085 Display Question Number : Yes Single Line Question Option : No Option Orientation : Vertical

निम्नलिखित में से कौन सा हाइड्रोकार्बन असंतृप्त है?

Options :

1. ✘ साइक्लोहेक्सेन

2. ✔ बेंजीन

3. ✘ प्रोपेन

4. ✘ 2 मिथाइल ब्यूटेन

Question Number : 86 Question Id : 16800086 Display Question Number : Yes Single Line Question Option : No Option Orientation : Vertical

Which of the following is **NOT** a form of traditional Indian theatre?

Options :

1. ✘ Raasleela

2. ✘ Yakshagaana

3. ✔ Jhanj

4. ✘ Maach

Question Number : 86 Question Id : 16800086 Display Question Number : Yes Single Line Question Option : No Option Orientation : Vertical

निम्नलिखित में से कौन सा पारंपरिक भारतीय नाटक का एक रूप नहीं है?

Options :

1. ✘ रासलीला

2. ✘ यक्षगान

3. ✔ झांझ

4. ✘ माच

Question Number : 87 Question Id : 16800087 Display Question Number : Yes Single Line Question Option : No Option Orientation : Vertical

When did the Chauri Chaura incident take place?

Options :

1. ✘ January 1920
2. ✘ August 1924
3. ✘ March 1918
4. ✔ February 1922

Question Number : 87 Question Id : 16800087 Display Question Number : Yes Single Line Question Option : No Option Orientation : Vertical

चौरी-चौरा कांड कब हुआ था?

Options :

1. ✘ जनवरी 1920
2. ✘ अगस्त 1924
3. ✘ मार्च 1918
4. ✔ फरवरी 1922

Question Number : 88 Question Id : 16800088 Display Question Number : Yes Single Line Question Option : No Option Orientation : Vertical

Sri Lanka is separated from India by a narrow channel of sea, formed by the \_\_\_\_\_ and the Gulf of Mannar.

Options :

1. ✘ Bering Strait
2. ✘ Davis Strait
3. ✔ Palk Strait
4. ✘ Hudson Strait

Question Number : 88 Question Id : 16800088 Display Question Number : Yes Single Line Question Option : No Option Orientation : Vertical

श्रीलंका को भारत से पृथक करने वाला समुद्र का संकीर्ण चैनल \_\_\_\_\_ और मन्नार की खाड़ी द्वारा निर्मित है।

Options :

1. ✘ बेरिंग जलडमरूमध्य (Bering Strait)
2. ✘ डेविस जलडमरूमध्य (Davis Strait)
3. ✔ पाक जलडमरूमध्य (Palk Strait)
4. ✘ हडसन जलडमरूमध्य (Hudson Strait)

Question Number : 89 Question Id : 16800089 Display Question Number : Yes Single Line Question Option : No Option Orientation : Vertical

According to the Union Budget 2017-18, existing rate of taxation for individual assesses (resident or non-resident) between income of 2.5 lakh to 5 lakh is reduced to \_\_\_\_\_ from the present rate of \_\_\_\_\_, for the assessment year 2018-19.

Options :

1. ✔ 5%, 10%
2. ✘ 0%, 10%
3. ✘ 2.5%, 5%
4. ✘ 2.5%, 10%

Question Number : 89 Question Id : 16800089 Display Question Number : Yes Single Line Question Option : No Option Orientation : Vertical

केंद्रीय बजट 2017-18 के अनुसार आकलन वर्ष 2018-19 के लिए 2.5 लाख से 5 लाख तक की आय वाले व्यक्तिगत करदाताओं (निवासी या अनिवासी) हेतु कराधान की दर \_\_\_\_\_ की वर्तमान दर से घटाकर \_\_\_\_\_ कर दी गई है।

Options :

1. ✔ 5%, 10%
2. ✘ 0%, 10%
3. ✘ 2.5%, 5%
4. ✘ 2.5%, 10%

Question Number : 90 Question Id : 16800090 Display Question Number : Yes Single Line Question Option : No Option Orientation : Vertical

According to the Constitution (101<sup>st</sup> Amendment) Act, 2016, who is the Chairperson of the Goods and Services Tax Council?

Options :

1. ✘ The President of India
2. ✘ The Prime Minister of India
3. ✔ The Union Finance Minister
4. ✘ The Minister in charge of Finance or Taxation

Question Number : 90 Question Id : 16800090 Display Question Number : Yes Single Line Question Option : No Option Orientation : Vertical

संविधान के (101वें संशोधन) अधिनियम 2016 के अनुसार वस्तु और सेवा कर परिषद के अध्यक्ष कौन हैं?

Options :

1. ✘ भारत के राष्ट्रपति
2. ✘ भारत के प्रधानमंत्री
3. ✔ केंद्रीय वित्त मंत्री
4. ✘ वित्त या कराधान के प्रभारी मंत्री

Question Number : 91 Question Id : 16800091 Display Question Number : Yes Single Line Question Option : No Option Orientation : Vertical

Ronald Ross' Nobel Prize win in 1902 was in relation to which common disease?

Options :

1. ✔ Malaria
2. ✘ Prostatic Cancer
3. ✘ Tuberculosis
4. ✘ Polio

Question Number : 91 Question Id : 16800091 Display Question Number : Yes Single Line Question Option : No Option Orientation : Vertical

1902 में रोनाल्ड रॉस ने किस आम बीमारी के संबंध में नोबल पुरस्कार प्राप्त किया था?

Options :

1. ✔ मलेरिया

2. ✘ प्रोस्टेटिक कैंसर
3. ✘ यक्ष्मा (ट्यूबरक्युलोसिस)
4. ✘ पोलियो

Question Number : 92 Question Id : 16800092 Display Question Number : Yes Single Line Question Option : No Option Orientation : Vertical

Which of the following authors has won the Man Booker International Prize 2017?

Options :

1. ✔ David Grossman
2. ✘ Ismail Kadare
3. ✘ Roy Jacobsen
4. ✘ Mathias Enard

Question Number : 92 Question Id : 16800092 Display Question Number : Yes Single Line Question Option : No Option Orientation : Vertical

निम्नलिखित लेखकों में से किसने वर्ष 2017 का मैन बुकर अंतर्राष्ट्रीय पुरस्कार प्राप्त किया?

Options :

1. ✔ डेविड ग्रॉसमैन
2. ✘ इस्माइल कादरे
3. ✘ रॉय जैकब्सन
4. ✘ मैथायस एनार्ड

Question Number : 93 Question Id : 16800093 Display Question Number : Yes Single Line Question Option : No Option Orientation : Vertical

Which country did athlete Michael Johnson represent in the XXVI Olympic Games?

Options :

1. ✘ China
2. ✘ Australia

3. ✓ United States

4. ✗ Brazil

Question Number : 93 Question Id : 16800093 Display Question Number : Yes Single Line Question Option : No Option Orientation : Vertical

एथलीट माइकल जॉनसन ने 26वें ओलंपिक खेलों में किस देश का प्रतिनिधित्व किया था?

Options :

1. ✗ चीन

2. ✗ ऑस्ट्रेलिया

3. ✓ संयुक्त राज्य अमेरिका

4. ✗ ब्राज़ील

Question Number : 94 Question Id : 16800094 Display Question Number : Yes Single Line Question Option : No Option Orientation : Vertical

Which of the following Padma Bhushan 2017 awardee is **NOT** an Indian citizen?

Options :

1. ✗ Tehemton Udwadia

2. ✗ Cho Ramaswamy

3. ✓ Maha Chakri Sirindhorn

4. ✗ Zubin Mehta

Question Number : 94 Question Id : 16800094 Display Question Number : Yes Single Line Question Option : No Option Orientation : Vertical

वर्ष 2017 के निम्नलिखित पद्म भूषण पुरस्कार प्राप्तकर्ताओं में से कौन भारतीय नागरिक नहीं है?

Options :

1. ✗ तेहेमटन उदवाडिया

2. ✗ चो रामास्वामी

3. ✓ महा चक्री सिरिनधर



4. ✘ जुबिन मेहता

Question Number : 95 Question Id : 16800095 Display Question Number : Yes Single Line Question Option : No Option Orientation : Vertical

Which of the following is the main musical instrument played during a Manipuri classical dance performance?

Options :

1. ✘ Ukulele
2. ✘ Kamancheh
3. ✘ Surando
4. ✔ Pung

Question Number : 95 Question Id : 16800095 Display Question Number : Yes Single Line Question Option : No Option Orientation : Vertical

मणिपुरी शास्त्रीय नृत्य प्रदर्शन के दौरान बजाया जाने वाला मुख्य वाद्ययंत्र निम्नलिखित में से कौन-सा है?

Options :

1. ✘ उकुलेले
2. ✘ कमानचेह
3. ✘ सुरांदो
4. ✔ पुंग

Question Number : 96 Question Id : 16800096 Display Question Number : Yes Single Line Question Option : No Option Orientation : Vertical

In a certain code language, 'CHENNAI' is coded as DIFOOBJ. Find how is 'MUMBAI' coded in that language?

Options :

1. ✘ NVCNBJ
2. ✘ NUNCBJ
3. ✔ NVNCBJ

4. ✘ NUCNBJ

Question Number : 96 Question Id : 16800096 Display Question Number : Yes Single Line Question Option : No Option  
Orientation : Vertical

एक संकेत भाषा में 'CHENNAI' को DIFOOBJ के रूप में लिखा जाता है। उसी भाषा में 'MUMBAI' को किस प्रकार लिखा जाएगा?

Options :

1. ✘ NVCNBJ

2. ✘ NUNCBJ

3. ✔ NVNCBJ

4. ✘ NUCNBJ

Question Number : 97 Question Id : 16800097 Display Question Number : Yes Single Line Question Option : No Option  
Orientation : Vertical

Complete the analogy.

ABCD : GHIJ :: PQRS : \_\_\_\_\_

Options :

1. ✘ UVWX

2. ✔ VWXY

3. ✘ WXYZ

4. ✘ WVXY

Question Number : 97 Question Id : 16800097 Display Question Number : Yes Single Line Question Option : No Option  
Orientation : Vertical

सादृश्य को पूरा करें।

ABCD : GHIJ :: PQRS : \_\_\_\_\_

Options :

1. ✘ UVWX

2. ✔ VWXY

3. ✘ WXYZ

4. ✘ WVXY

Question Number : 98 Question Id : 16800098 Display Question Number : Yes Single Line Question Option : No Option Orientation : Vertical

Select from the options the word that has a similar meaning as that of the words on the right and left side of the brackets.

CUT ( ) OPENING

Options :

1. ✘ Sharp
2. ✘ Puncture
3. ✘ Wound
4. ✔ Slit

Question Number : 98 Question Id : 16800098 Display Question Number : Yes Single Line Question Option : No Option Orientation : Vertical

विकल्पों में से उस शब्द का चयन करें जिसका अर्थ कोष्ठक के दाहिने और बाएँ शब्दों के अर्थ के समान हो।

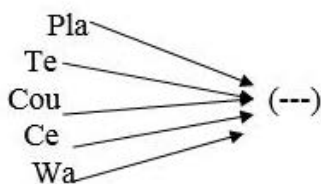
CUT ( ) OPENING

Options :

1. ✘ Sharp
2. ✘ Puncture
3. ✘ Wound
4. ✔ Slit

Question Number : 99 Question Id : 16800099 Display Question Number : Yes Single Line Question Option : No Option Orientation : Vertical

Select the set of letters that, when added as suffix to each set of letters in the image, forms a meaningful English word.



Options :

1. ✘ tn

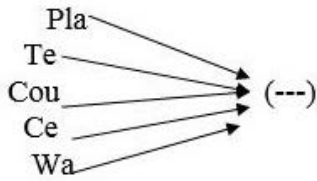
2. ✘ ier

3. ✘ net

4. ✔ nt

Question Number : 99 Question Id : 16800099 Display Question Number : Yes Single Line Question Option : No Option  
Orientation : Vertical

अक्षरों के उस समूह का चयन करें जिसे चित्र में दिए गए प्रत्येक अक्षर-समूह के साथ प्रत्यय के रूप में जोड़ने पर एक सार्थक अंग्रेज़ी शब्द बन जाता है:



Options :

1. ✘ tn

2. ✘ ier

3. ✘ net

4. ✔ nt

Question Number : 100 Question Id : 168000100 Display Question Number : Yes Single Line Question Option : No Option  
Orientation : Vertical

Select the number that would complete the series given below:

3, 9, 18, 54, 108, 324, \_\_\_\_\_

Options :

1. ✔ 648

2. ✘ 684

3. ✘ 726

4. ✘ 432

Question Number : 100 Question Id : 168000100 Display Question Number : Yes Single Line Question Option : No Option  
Orientation : Vertical

उस संख्या का चयन करें जो नीचे दी गई श्रृंखला को पूरा कर दे:

3, 9, 18, 54, 108, 324, \_\_\_\_\_

Options :

1. ✓ 648

2. ✗ 684

3. ✗ 726

4. ✗ 432