



Haryana Staff Selection Commission

Notations :

1. Options shown in **green** color and with  icon are correct.
2. Options shown in **red** color and with  icon are incorrect.

Subject Name:	CAT 1 Steno Typist English CBT Exam
Total Marks:	200
Display Marks:	Yes
Calculator:	None
Magnifying Glass Required?:	No
Ruler Required?:	No
Eraser Required?:	No
Scratch Pad Required?:	No
Rough Sketch/Notepad Required?:	No
Protractor Required?:	No

CAT 1 Steno Typist English CBT Exam

Group Marks: 200

CAT 1 Steno Typist English CBT Exam

Section Marks:	200
Display Number Panel:	Yes
Group All Questions:	No

Question Number : 1 Question Id : 2602691 Display Question Number : Yes Single Line Question Option : No Option Orientation : Vertical

Who among the following rulers inflicted a crushing defeat on the Bhadanakas and annexed their territory?

Options :

1.  Anangapala
2.  Harsha Vardhan
3.  Mahendrapala I
4.  Prithviraj III

Question Number : 1 Question Id : 2602691 Display Question Number : Yes Single Line Question Option : No Option Orientation : Vertical

निम्नलिखित शासकों में से किसने भादनकों को युद्ध में हराया था और उनके क्षेत्र पर कब्जा कर लिया था?

Options :

1. ✘ अनंगपाल
2. ✘ हर्षवर्धन
3. ✘ महेन्द्रपाल ।
4. ✔ पृथ्वीराज III

Question Number : 2 Question Id : 2602692 Display Question Number : Yes Single Line Question Option : No Option Orientation : Vertical

Puran Bhagat, a 12th century saint, is also known as:

Options :

1. ✔ Chaurangi Nath
2. ✘ Gorakh Nath
3. ✘ Mast Nath
4. ✘ Tota Nath

Question Number : 2 Question Id : 2602692 Display Question Number : Yes Single Line Question Option : No Option Orientation : Vertical

12वीं शताब्दी के संत पूरन भगत को किस नाम से भी जाना जाता है?

Options :

1. ✔ चौरंगी नाथ
2. ✘ गोरख नाथ
3. ✘ मस्त नाथ
4. ✘ तोता नाथ

Question Number : 3 Question Id : 2602693 Display Question Number : Yes Single Line Question Option : No Option Orientation : Vertical

A bulk of the evidence from the archaeological site of Kunal in Fatehabad belongs to:

Options :

1. ✓ Pre-Harappan period
2. ✗ Mature Harappan period
3. ✗ Late Harappan period
4. ✗ Post-Harappan period

Question Number : 3 Question Id : 2602693 Display Question Number : Yes Single Line Question Option : No Option Orientation : Vertical

फतेहाबाद में कुणाल के पुरातात्विक स्थल से प्राप्त हुए अधिकांश प्रमाण किससे सम्बंधित हैं?

Options :

1. ✓ पूर्व हड़प्पा काल
2. ✗ परिपक्व हड़प्पा काल
3. ✗ उत्तर हड़प्पा काल
4. ✗ पश्च हड़प्पा काल

Question Number : 4 Question Id : 2602694 Display Question Number : Yes Single Line Question Option : No Option Orientation : Vertical

Famous Bhasha Granth *Vichar Sagar* was written by:

Options :

1. ✗ Baba Meghnath
2. ✓ Sadhu Nischal Das
3. ✗ Yogi Mehar Nath
4. ✗ Mahant Shriyu Nath

Question Number : 4 Question Id : 2602694 Display Question Number : Yes Single Line Question Option : No Option Orientation : Vertical

प्रसिद्ध भाषा ग्रंथ *विचार सागर* किसने लिखा था?

Options :

1. ✗ बाबा मेघनाथ

2. ✓ साधू निश्चल दास

3. ✗ योगी मेहर नाथ

4. ✗ महंत श्रीयु नाथ

Question Number : 5 Question Id : 2602695 Display Question Number : Yes Single Line Question Option : No Option Orientation : Vertical

The recently organised 'Swarna Jayanti Journalists Meet' was held in the _____ district of Haryana.

Options :

1. ✗ Karnal

2. ✗ Sonipat

3. ✗ Gurugram

4. ✓ Panchkula

Question Number : 5 Question Id : 2602695 Display Question Number : Yes Single Line Question Option : No Option Orientation : Vertical

'स्वर्ण जयंती पत्रकार सम्मेलन' हाल ही में हरियाणा के कौन से जिले में आयोजित किया गया था?

Options :

1. ✗ करनाल

2. ✗ सोनीपत

3. ✗ गुरुग्राम

4. ✓ पंचकुला

Question Number : 6 Question Id : 2602696 Display Question Number : Yes Single Line Question Option : No Option Orientation : Vertical

Haryana's budget for the financial year 2017-18 was presented by:

Options :

1. ✓ Captain Abhimanyu

2. ✗ Kaptan Singh Solanki

3. ✘ Manohar Lal Khattar

4. ✘ Narendra Singh Tomar

Question Number : 6 Question Id : 2602696 Display Question Number : Yes Single Line Question Option : No Option Orientation : Vertical

वित्तीय वर्ष 2017-18 के लिए हरियाणा का बजट किसने प्रस्तुत किया था?

Options :

1. ✔ कप्तान अभिमन्यु

2. ✘ कप्तान सिंह सोलंकी

3. ✘ मनोहर लाल खट्टर

4. ✘ नरेन्द्र सिंह तोमर

Question Number : 7 Question Id : 2602697 Display Question Number : Yes Single Line Question Option : No Option Orientation : Vertical

As per data of December 2016, child sex ratio at birth in Haryana was approximately:

Options :

1. ✘ 700

2. ✘ 800

3. ✔ 900

4. ✘ 1000

Question Number : 7 Question Id : 2602697 Display Question Number : Yes Single Line Question Option : No Option Orientation : Vertical

दिसंबर 2016 के आंकड़ों के अनुसार, हरियाणा में जन्म के समय बाल लिंग अनुपात क्या था?

Options :

1. ✘ 700

2. ✘ 800

3. ✔ 900

4. ✘ 1000

Question Number : 8 Question Id : 2602698 Display Question Number : Yes Single Line Question Option : No Option Orientation : Vertical

As per the Economic Survey of Haryana (2016-17), the secondary sector in Haryana was approximately growing at:

Options :

1. ✔ 6.4%

2. ✘ 15.1%

3. ✘ 30.1%

4. ✘ 1.8%

Question Number : 8 Question Id : 2602698 Display Question Number : Yes Single Line Question Option : No Option Orientation : Vertical

हरियाणा आर्थिक सर्वे (वर्ष 2016-2017) के अनुसार, हरियाणा में द्वितीयक क्षेत्र में लगभग कितनी वृद्धि हुई थी?

Options :

1. ✔ 6.4%

2. ✘ 15.1%

3. ✘ 30.1%

4. ✘ 1.8%

Question Number : 9 Question Id : 2602699 Display Question Number : Yes Single Line Question Option : No Option Orientation : Vertical

Who wrote 'Sri Guru Nanak Prakash', an epic poem dealing with the life and teachings of Guru Nanak?

Options :

1. ✔ Bhai Santokh Singh

2. ✘ Deedar Singh

3. ✘ Sahib Singh Mrigendra

4. ✘ Bagg Singh

Question Number : 9 Question Id : 2602699 Display Question Number : Yes Single Line Question Option : No Option Orientation : Vertical

गुरु नानक की जिंदगी और उपदेशों से संबंधित एक महाकाव्य कविता 'श्री गुरु नानक प्रकाश' के रचयिता कौन हैं?

Options :

1. ✓ भाई संतोख सिंह
2. ✗ दीदार सिंह
3. ✗ साहिब सिंह मृगेंद्र
4. ✗ बग्ग सिंह

Question Number : 10 Question Id : 26026910 Display Question Number : Yes Single Line Question Option : No Option Orientation : Vertical

Name the book for which writer Deep Chand Nirmohi was given the Haryana Sahitya Akademi Award?

Options :

1. ✗ Dharti Ka Safar
2. ✗ Chaand Ka Safar
3. ✓ Suraj Ka Safar
4. ✗ Suraj Ka Satvan Ghoda

Question Number : 10 Question Id : 26026910 Display Question Number : Yes Single Line Question Option : No Option Orientation : Vertical

लेखक दीप चंद निर्मोही को किस पुस्तक के लिए हरियाणा साहित्य अकादमी पुरस्कार दिया गया था?

Options :

1. ✗ धरती का सफर
2. ✗ चांद का सफर
3. ✓ सूरज का सफर
4. ✗ सूरज का सातवां घोड़ा

Question Number : 11 Question Id : 26026911 Display Question Number : Yes Single Line Question Option : No Option Orientation : Vertical

Who has written the poem 'Idhar Bhi Gadhe Hain Udhar Bhi Gadhe Hain'?

Options :

1. ✗ Surendra Sharma

2. ✓ Om Prakash 'Aditya'

3. ✗ Gemini Haryanvi

4. ✗ Alhar Bikaneri

Question Number : 11 Question Id : 26026911 Display Question Number : Yes Single Line Question Option : No Option Orientation : Vertical

'इधर भी गधे हैं उधर भी गधे हैं' कविता किसने लिखी है?

Options :

1. ✗ सुरेंद्र शर्मा

2. ✓ ओम प्रकाश 'आदित्य'

3. ✗ जैमिनी हरियाणवी

4. ✗ अल्हड़ बीकानेरी

Question Number : 12 Question Id : 26026912 Display Question Number : Yes Single Line Question Option : No Option Orientation : Vertical

How many districts did Haryana consist of during its formation?

Options :

1. ✗ Eleven

2. ✗ Nine

3. ✗ Eight

4. ✓ Seven

Question Number : 12 Question Id : 26026912 Display Question Number : Yes Single Line Question Option : No Option Orientation : Vertical

हरियाणा के गठन के समय इसमें कितने जिले थे?

Options :

1. ✗ ग्यारह

2. ✗ नौ

3. ✘ आठ

4. ✔ सात

Question Number : 13 Question Id : 26026913 Display Question Number : Yes Single Line Question Option : No Option Orientation : Vertical

In which district has the Topra Ashokan Pillar been found?

Options :

1. ✘ Kurukshetra

2. ✘ Bhiwani

3. ✔ Ambala

4. ✘ Karnal

Question Number : 13 Question Id : 26026913 Display Question Number : Yes Single Line Question Option : No Option Orientation : Vertical

टोपरा अशोक स्तंभ कौन से जिले में पाया गया है?

Options :

1. ✘ कुरुक्षेत्र

2. ✘ भिवानी

3. ✔ अंबाला

4. ✘ करनाल

Question Number : 14 Question Id : 26026914 Display Question Number : Yes Single Line Question Option : No Option Orientation : Vertical

How many villages does Haryana have?

Options :

1. ✔ 6,841

2. ✘ 6,348

3. ✘ 6,184

4. ✘ 6,048

Question Number : 14 Question Id : 26026914 Display Question Number : Yes Single Line Question Option : No Option Orientation : Vertical

हरियाणा में कितने गांव हैं?

Options :

1. ✓ 6,841
2. ✗ 6,348
3. ✗ 6,184
4. ✗ 6,048

Question Number : 15 Question Id : 26026915 Display Question Number : Yes Single Line Question Option : No Option Orientation : Vertical

Who was the first Chief Minister of Haryana?

Options :

1. ✗ Bansilal
2. ✗ Rao Virender Singh
3. ✓ Bhagwat Dayal Sharma
4. ✗ Banarsi Das Gupta

Question Number : 15 Question Id : 26026915 Display Question Number : Yes Single Line Question Option : No Option Orientation : Vertical

हरियाणा के पहले मुख्यमंत्री कौन थे?

Options :

1. ✗ बंसीलाल
2. ✗ राव बिरेन्द्र सिंह
3. ✓ भगवत दयाल शर्मा
4. ✗ बनारसी दास गुप्ता

Question Number : 16 Question Id : 26026916 Display Question Number : Yes Single Line Question Option : No Option Orientation : Vertical

What is the minimum educational qualification set for women and schedule caste candidates to participate in panchayat elections?

Options :

1. ✓ 8th pass
2. ✗ 10th pass
3. ✗ 11th pass
4. ✗ 12th pass

Question Number : 16 Question Id : 26026916 Display Question Number : Yes Single Line Question Option : No Option Orientation : Vertical

पंचायत चुनावों में महिलाओं और अनुसूचित जाति के प्रत्याशियों के लिए निर्धारित न्यूनतम शैक्षणिक योग्यता क्या है?

Options :

1. ✓ आठवीं पास
2. ✗ दसवीं पास
3. ✗ ग्यारहवीं पास
4. ✗ बारहवीं पास

Question Number : 17 Question Id : 26026917 Display Question Number : Yes Single Line Question Option : No Option Orientation : Vertical

In Haryana, of the total 90 legislative seats, _____ are reserved for the schedule castes.

Options :

1. ✗ 15 seats
2. ✓ 17 seats
3. ✗ 19 seats
4. ✗ 23 seats

Question Number : 17 Question Id : 26026917 Display Question Number : Yes Single Line Question Option : No Option Orientation : Vertical

हरियाणा की कुल 90 विधानसभा सीटों में से _____ अनुसूचित जातियों के लिए आरक्षित हैं।

Options :

1. ✘ 15 सीटें
2. ✔ 17 सीटें
3. ✘ 19 सीटें
4. ✘ 23 सीटें

Question Number : 18 Question Id : 26026918 Display Question Number : Yes Single Line Question Option : No Option Orientation : Vertical

On 26th August 2014, the state government of Haryana had raised the retirement age of Government employees:

Options :

1. ✘ from 55 years to 58 years
2. ✔ from 58 years to 60 years
3. ✘ from 60 years to 62 years
4. ✘ from 62 years to 65 years

Question Number : 18 Question Id : 26026918 Display Question Number : Yes Single Line Question Option : No Option Orientation : Vertical

26 अगस्त 2014 को, हरियाणा राज्य सरकार ने सरकारी कर्मचारियों की सेवानिवृत्ति की आयु बढ़ाकर कितनी कर दी है?

Options :

1. ✘ 55 वर्ष से 58 वर्ष
2. ✔ 58 वर्ष से 60 वर्ष
3. ✘ 60 वर्ष से 62 वर्ष
4. ✘ 62 वर्ष से 65 वर्ष

Question Number : 19 Question Id : 26026919 Display Question Number : Yes Single Line Question Option : No Option Orientation : Vertical

_____ is the only seasonal river that flows through the northern fringes of Haryana.

Options :

1. ✓ Ghaggar

2. ✗ Yamuna

3. ✗ Sutlej

4. ✗ Beas

Question Number : 19 Question Id : 26026919 Display Question Number : Yes Single Line Question Option : No Option Orientation : Vertical

_____ एकमात्र मौसमी नदी है जो हरियाणा के उत्तरी किनारे से होकर बहती है।

Options :

1. ✓ घग्गर

2. ✗ यमुना

3. ✗ सतलुज

4. ✗ ब्यास

Question Number : 20 Question Id : 26026920 Display Question Number : Yes Single Line Question Option : No Option Orientation : Vertical

The state government of Haryana has set up _____ under National Green Corps scheme.

Options :

1. ✓ Eco-Clubs

2. ✗ Nature Clubs

3. ✗ Eco-Groups

4. ✗ Solar Clubs

Question Number : 20 Question Id : 26026920 Display Question Number : Yes Single Line Question Option : No Option Orientation : Vertical

हरियाणा की राज्य सरकार ने राष्ट्रीय हरित कोर योजना के तहत _____ की स्थापना की है।

Options :

1. ✓ पारिस्थितिकी-क्लब

2. ✗ प्रकृति क्लब

3. ✘ पारिस्थितिकी समूह

4. ✘ सौर क्लब

Question Number : 21 Question Id : 26026921 Display Question Number : Yes Single Line Question Option : No Option Orientation : Vertical

As per India State of Forest Report, 2015, around _____ of Haryana's geographical area is under forest cover.

Options :

1. ✔ 3.58%

2. ✘ 5.54%

3. ✘ 7.91%

4. ✘ 1.75%

Question Number : 21 Question Id : 26026921 Display Question Number : Yes Single Line Question Option : No Option Orientation : Vertical

भारत राज्य वन रिपोर्ट 2015 के अनुसार, हरियाणा के भौगोलिक क्षेत्र का लगभग _____ वन क्षेत्र है।

Options :

1. ✔ 3.58%

2. ✘ 5.54%

3. ✘ 7.91%

4. ✘ 1.75%

Question Number : 22 Question Id : 26026922 Display Question Number : Yes Single Line Question Option : No Option Orientation : Vertical

Baisakhi Mela is celebrated every year in the _____ gardens.

Options :

1. ✔ Pinjore

2. ✘ Gondar

3. ✘ Bilaspur

4. ✘ Badhara

Question Number : 22 Question Id : 26026922 Display Question Number : Yes Single Line Question Option : No Option Orientation : Vertical

बैसाखी मेला प्रत्येक वर्ष _____ के उद्यानों में मनाया जाता है।

Options :

1. ✓ पिंजौर
2. ✗ गोंडार
3. ✗ बिलासपुर
4. ✗ बदहारा

Question Number : 23 Question Id : 26026923 Display Question Number : Yes Single Line Question Option : No Option Orientation : Vertical

The Pinjore Heritage Festival was first held in:

Options :

1. ✗ 2001
2. ✗ 1995
3. ✓ 2006
4. ✗ 1992

Question Number : 23 Question Id : 26026923 Display Question Number : Yes Single Line Question Option : No Option Orientation : Vertical

पिंजौर विरासत महोत्सव पहली बार कब आयोजित किया गया था?

Options :

1. ✗ 2001
2. ✗ 1995
3. ✓ 2006
4. ✗ 1992

Question Number : 24 Question Id : 26026924 Display Question Number : Yes Single Line Question Option : No Option Orientation : Vertical

A fair known as Mela Sacha Sauda is celebrated at Sirsa town on the last Sunday of every month in the memory of:

Options :

1. ✓ Faqir Shah Mastana
2. ✗ Baba Boota Singh
3. ✗ Saint Shah-Bu-Shah
4. ✗ Bhuman Shah

Question Number : 24 Question Id : 26026924 Display Question Number : Yes Single Line Question Option : No Option Orientation : Vertical

_____ की स्मृति में हर महीने के अंतिम रविवार को हरियाणा के सिरसा जिले में, मेला सच्चा सौदा मनाया जाता है।

Options :

1. ✓ फकीर शाह मस्ताना
2. ✗ बाबा बूटा सिंह
3. ✗ संत शाह-बू-शाह
4. ✗ भूमान शाह

Question Number : 25 Question Id : 26026925 Display Question Number : Yes Single Line Question Option : No Option Orientation : Vertical

The Surajkund Mela is organised every year in the suburbs of _____.

Options :

1. ✗ Pinjore
2. ✗ Gondar
3. ✗ Bilaspur
4. ✓ Faridabad

Question Number : 25 Question Id : 26026925 Display Question Number : Yes Single Line Question Option : No Option Orientation : Vertical

सूरजकुंड मेला का आयोजन प्रत्येक वर्ष _____ के उपनगरों में किया जाता है।

Options :

1. ✘ पिंजौर
2. ✘ गोंडार
3. ✘ बिलासपुर
4. ✔ फ़रीदाबाद

Question Number : 26 Question Id : 26026926 Display Question Number : Yes Single Line Question Option : No Option Orientation : Vertical

When a word ends with a combination _____, the upward r is used.

Options :

1. ✔ r + vowel
2. ✘ vowel + r
3. ✘ t + vowel
4. ✘ vowel + t

Question Number : 26 Question Id : 26026926 Display Question Number : Yes Single Line Question Option : No Option Orientation : Vertical

When a word ends with a combination _____, the upward r is used.

Options :

1. ✔ r + vowel
2. ✘ vowel + r
3. ✘ t + vowel
4. ✘ vowel + t

Question Number : 27 Question Id : 26026927 Display Question Number : Yes Single Line Question Option : No Option Orientation : Vertical

The intersection 'th' represents the word _____.

Options :

1. ✔ Month

2. ✘ Think

3. ✘ Thank

4. ✘ Thanked

Question Number : 27 Question Id : 26026927 Display Question Number : Yes Single Line Question Option : No Option Orientation : Vertical

The intersection 'th' represents the word _____.

Options :

1. ✔ Month

2. ✘ Think

3. ✘ Thank

4. ✘ Thanked

Question Number : 28 Question Id : 26026928 Display Question Number : Yes Single Line Question Option : No Option Orientation : Vertical

Strokes w and y are straight _____.

Options :

1. ✘ Horizontal

2. ✘ Downstroke

3. ✘ Vertical

4. ✔ Upstroke

Question Number : 28 Question Id : 26026928 Display Question Number : Yes Single Line Question Option : No Option Orientation : Vertical

Strokes w and y are straight _____.

Options :

1. ✘ Horizontal

2. ✘ Downstroke

3. ✘ Vertical

4. ✔ Upstroke

Question Number : 29 Question Id : 26026929 Display Question Number : Yes Single Line Question Option : No Option Orientation : Vertical

Stroke "d" written above the line represents the short form _____.

Options :

1. ✘ do
2. ✔ had
3. ✘ different
4. ✘ difference

Question Number : 29 Question Id : 26026929 Display Question Number : Yes Single Line Question Option : No Option Orientation : Vertical

Stroke "d" written above the line represents the short form _____.

Options :

1. ✘ do
2. ✔ had
3. ✘ different
4. ✘ difference

Question Number : 30 Question Id : 26026930 Display Question Number : Yes Single Line Question Option : No Option Orientation : Vertical

m and n are _____ strokes.

Options :

1. ✔ Curved
2. ✘ Straight
3. ✘ Up
4. ✘ Down

Question Number : 30 Question Id : 26026930 Display Question Number : Yes Single Line Question Option : No Option Orientation : Vertical

m and n are _____ strokes.

Options :

1. Curved
2. Straight
3. Up
4. Down

Question Number : 31 Question Id : 26026931 Display Question Number : Yes Single Line Question Option : No Option Orientation : Vertical

Downward r is halved and thickened to indicate a following _____.

Options :

1. T
2. Rt
3. D
4. Rd

Question Number : 31 Question Id : 26026931 Display Question Number : Yes Single Line Question Option : No Option Orientation : Vertical

Downward r is halved and thickened to indicate a following _____.

Options :

1. T
2. Rt
3. D
4. Rd

Question Number : 32 Question Id : 26026932 Display Question Number : Yes Single Line Question Option : No Option Orientation : Vertical

Stroke "m" is _____ and thickened to indicate following "d"

Options :

1. doubled
2. halved
3. lightened

4. ✘ darkened

Question Number : 32 Question Id : 26026932 Display Question Number : Yes Single Line Question Option : No Option Orientation : Vertical

Stroke “m” is _____ and thickened to indicate following “d”

Options :

1. ✘ doubled

2. ✔ halved

3. ✘ lightened

4. ✘ darkened

Question Number : 33 Question Id : 26026933 Display Question Number : Yes Single Line Question Option : No Option Orientation : Vertical

Vowel u is represented by a _____ dash.

Options :

1. ✘ Heavy

2. ✘ Big

3. ✘ Small

4. ✔ Light

Question Number : 33 Question Id : 26026933 Display Question Number : Yes Single Line Question Option : No Option Orientation : Vertical

Vowel u is represented by a _____ dash.

Options :

1. ✘ Heavy

2. ✘ Big

3. ✘ Small

4. ✔ Light

Question Number : 34 Question Id : 26026934 Display Question Number : Yes Single Line Question Option : No Option Orientation : Vertical

Light simple down strokes are _____.

Options :

1. ✓ P, t, ch
2. ✗ F, th, s
3. ✗ Fr, vr, thr
4. ✗ Fl, vl, thl

Question Number : 34 Question Id : 26026934 Display Question Number : Yes Single Line Question Option : No Option Orientation : Vertical

Light simple down strokes are _____.

Options :

1. ✓ P, t, ch
2. ✗ F, th, s
3. ✗ Fr, vr, thr
4. ✗ Fl, vl, thl

Question Number : 35 Question Id : 26026935 Display Question Number : Yes Single Line Question Option : No Option Orientation : Vertical

The intersection M represents the word _____.

Options :

1. ✓ Mail
2. ✗ Meal
3. ✗ Monday
4. ✗ Measure

Question Number : 35 Question Id : 26026935 Display Question Number : Yes Single Line Question Option : No Option Orientation : Vertical

The intersection M represents the word _____.

Options :

1. ✓ Mail

2. ✘ Meal

3. ✘ Monday

4. ✘ Measure

Question Number : 36 Question Id : 26026936 Display Question Number : Yes Single Line Question Option : No Option Orientation : Vertical

The initial sound 'Z' is represented by _____.

Options :

1. ✘ Circle S

2. ✘ Circle Z

3. ✘ Stroke S

4. ✔ Stroke Z

Question Number : 36 Question Id : 26026936 Display Question Number : Yes Single Line Question Option : No Option Orientation : Vertical

The initial sound 'Z' is represented by _____.

Options :

1. ✘ Circle S

2. ✘ Circle Z

3. ✘ Stroke S

4. ✔ Stroke Z

Question Number : 37 Question Id : 26026937 Display Question Number : Yes Single Line Question Option : No Option Orientation : Vertical

When an initial circle or a loop is written on the same side as the hook of the pr series, the _____ is included.

Options :

1. ✘ T

2. ✔ R

3. ✘ B

4. ✘ D

Question Number : 37 Question Id : 26026937 Display Question Number : Yes Single Line Question Option : No Option Orientation : Vertical

When an initial circle or a loop is written on the same side as the hook of the pr series, the _____ is included.

Options :

1. ✘ T

2. ✔ R

3. ✘ B

4. ✘ D

Question Number : 38 Question Id : 26026938 Display Question Number : Yes Single Line Question Option : No Option Orientation : Vertical

Final r, when hooked, is usually written _____.

Options :

1. ✘ Vertically

2. ✘ Horizontally

3. ✔ Upward

4. ✘ Downward

Question Number : 38 Question Id : 26026938 Display Question Number : Yes Single Line Question Option : No Option Orientation : Vertical

Final r, when hooked, is usually written _____.

Options :

1. ✘ Vertically

2. ✘ Horizontally

3. ✔ Upward

4. ✘ Downward

Question Number : 39 Question Id : 26026939 Display Question Number : Yes Single Line Question Option : No Option Orientation : Vertical

A _____ hooked stroke f, v, n is halved to indicate a following t or d.

Options :

1. Finally l
2. Medieval
3. Ending
4. Beginning

Question Number : 39 Question Id : 26026939 Display Question Number : Yes Single Line Question Option : No Option Orientation : Vertical

A _____ hooked stroke f, v, n is halved to indicate a following t or d.

Options :

1. Finally l
2. Medieval
3. Ending
4. Beginning

Question Number : 40 Question Id : 26026940 Display Question Number : Yes Single Line Question Option : No Option Orientation : Vertical

“had not” is written _____ the line.

Options :

1. On
2. Above
3. Below
4. Through

Question Number : 40 Question Id : 26026940 Display Question Number : Yes Single Line Question Option : No Option Orientation : Vertical

“had not” is written _____ the line.

Options :


1. On
2. Above

3. ✘ Below

4. ✘ Through

Question Number : 41 Question Id : 26026941 Display Question Number : Yes Single Line Question Option : No Option Orientation : Vertical

Select the right word from the options given below to fill in the blank.



A 

B 

C 

D 

Options :

1. ✘ A

2. ✘ B

3. ✔ C

4. ✘ D

Question Number : 41 Question Id : 26026941 Display Question Number : Yes Single Line Question Option : No Option Orientation : Vertical

Select the right word from the options given below to fill in the blank.

Handwritten scribbles above a blank line.

A *Handwritten scribble above a line.*

B *Handwritten scribble above a line.*

C *Handwritten scribble above a line.*

D *Handwritten scribble above a line.*

Options :

1. ✘ A


2. ✘ B

3. ✔ C

4. ✘ D

Question Number : 42 Question Id : 26026942 Display Question Number : Yes Single Line Question Option : No Option Orientation : Vertical

Select the right word from the options given below to fill in the blank.




- A
- B
- C
- D

Options :

- 1. ✓ A
- 2. ✗ B
- 3. ✗ C
- 4. ✗ D

Question Number : 42 Question Id : 26026942 Display Question Number : Yes Single Line Question Option : No Option Orientation : Vertical

Select the right word from the options given below to fill in the blank.



Options :

1. ✓ A

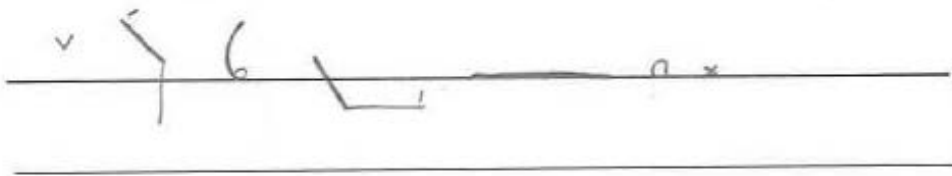
2. ✗ B

3. ✗ C

4. ✗ D

Question Number : 43 Question Id : 26026943 Display Question Number : Yes Single Line Question Option : No Option Orientation : Vertical

Select the right word from the options given below to fill in the blank.



Options :

1. ✘ A

2. ✘ B

3. ✔ C

4. ✘ D

Question Number : 43 Question Id : 26026943 Display Question Number : Yes Single Line Question Option : No Option Orientation : Vertical

Select the right word from the options given below to fill in the blank.

✓ 6

A 

B 

C 

D 

Options :

1. ✘ A


2. ✘ B

3. ✔ C


4. ✘ D

Question Number : 44 Question Id : 26026944 Display Question Number : Yes Single Line Question Option : No Option Orientation : Vertical

Select the right word from the options given below to fill in the blank.



A 

B 

C 

D 

Options :

1. ✘ A


2. ✔ B

3. ✘ C


4. ✘ D

Question Number : 44 Question Id : 26026944 Display Question Number : Yes Single Line Question Option : No Option Orientation : Vertical

Select the right word from the options given below to fill in the blank.



A 

B 

C 

D 

Options :

1. ✘ A

2. ✔ B

3. ✘ C

4. ✘ D

Question Number : 45 Question Id : 26026945 Display Question Number : Yes Single Line Question Option : No Option Orientation : Vertical

Select the right word from the options given below to fill in the blank.

A *qv*

B *q-*

C *qv*

D *q*

Options :

1. ✘ A

2. ✔ B

3. ✘ C

4. ✘ D

Question Number : 45 Question Id : 26026945 Display Question Number : Yes Single Line Question Option : No Option Orientation : Vertical

Select the right word from the options given below to fill in the blank.

A 

B 

C 

D 

Options :

1. ✘ A

2. ✔ B

3. ✘ C

4. ✘ D

Question Number : 46 Question Id : 26026946 Display Question Number : Yes Single Line Question Option : No Option Orientation : Vertical

Fill in the blanks in the sentence below with suitable articles. Choose your answer from the options given.

Auto rickshaw drivers have become _____ major stumbling block to _____ concerted efforts of the Municipal Corporation and city police to ease traffic congestion at Heritage Square in Chowk Bazaar.

Options :

1. ✘ the, a

2. ✔ a, the

3. ✘ a, a

4. ✘ a, an

Question Number : 46 Question Id : 26026946 Display Question Number : Yes Single Line Question Option : No Option Orientation : Vertical

Fill in the blanks in the sentence below with suitable articles. Choose your answer from the options given.

Auto rickshaw drivers have become _____ major stumbling block to _____ concerted efforts of the Municipal Corporation and city police to ease traffic congestion at Heritage Square in Chowk Bazaar.

Options :

1. ✘ the, a
2. ✔ a, the
3. ✘ a, a
4. ✘ a, an

Question Number : 47 Question Id : 26026947 Display Question Number : Yes Single Line Question Option : No Option Orientation : Vertical

Fill in the blanks in the sentence below with suitable articles. Choose your answer from the options given.

As per _____ figures available from _____ RTO, there are around 99,000 auto rickshaws plying on _____ city roads.

Options :

1. ✔ the, the, the
2. ✘ a, the, a
3. ✘ the, a, the
4. ✘ a, a, the

Question Number : 47 Question Id : 26026947 Display Question Number : Yes Single Line Question Option : No Option Orientation : Vertical

Fill in the blanks in the sentence below with suitable articles. Choose your answer from the options given.

As per _____ figures available from _____ RTO, there are around 99,000 auto rickshaws plying on _____ city roads.

Options :

1. ✔ the, the, the
2. ✘ a, the, a
3. ✘ the, a, the
4. ✘ a, a, the

Question Number : 48 Question Id : 26026948 Display Question Number : Yes Single Line Question Option : No Option Orientation : Vertical

Fill in the blanks in the sentence below with suitable prepositions. Choose your answer from the options given:

People __ Khapat village were __ for a surprise when they saw a pride ___ four lions taking shelter __ a dilapidated house on Monday.

Options :

1. ✘ in, under, on, by
2. ✔ of, in, of, in
3. ✘ on, into, in, by
4. ✘ off, over, in, by

Question Number : 48 Question Id : 26026948 Display Question Number : Yes Single Line Question Option : No Option Orientation : Vertical

Fill in the blanks in the sentence below with suitable prepositions. Choose your answer from the options given:

People __ Khapat village were __ for a surprise when they saw a pride ___ four lions taking shelter __ a dilapidated house on Monday.

Options :

1. ✘ in, under, on, by
2. ✔ of, in, of, in
3. ✘ on, into, in, by
4. ✘ off, over, in, by

Question Number : 49 Question Id : 26026949 Display Question Number : Yes Single Line Question Option : No Option Orientation : Vertical

Fill in the blank in the sentence below with a suitable collective noun. Choose your answer from the options given:

While I was on a vacation on a cruise ship, I watched a ___ of dolphins swim in a line close to the ship.

Options :

1. ✘ pride
2. ✘ herd
3. ✔ pod
4. ✘ shoal

Question Number : 49 Question Id : 26026949 Display Question Number : Yes Single Line Question Option : No Option Orientation : Vertical

Fill in the blank in the sentence below with a suitable collective noun. Choose your answer from the options given:

While I was on a vacation on a cruise ship, I watched a ___ of dolphins swim in a line close to the ship.

Options :

1. ✘ pride
2. ✘ herd
3. ✔ pod
4. ✘ shoal

Question Number : 50 Question Id : 26026950 Display Question Number : Yes Single Line Question Option : No Option Orientation : Vertical

A sentence is given in four parts as options. One of the parts contains an error. Choose the option that has the error.

Options :

1. ✔ Used a star-shaped cutter to stamp out six bread stars
2. ✘ from the whole meal bread; swirl the red pesto through the cream
3. ✘ cheese and spread onto both sides of the stars.
4. ✘

Close, wrap in cling film and leave them to chill in the fridge if you are making it the night before.

Question Number : 50 Question Id : 26026950 Display Question Number : Yes Single Line Question Option : No Option Orientation : Vertical

A sentence is given in four parts as options. One of the parts contains an error. Choose the option that has the error.

Options :

1. ✔ Used a star-shaped cutter to stamp out six bread stars
2. ✘ from the whole meal bread; swirl the red pesto through the cream
3. ✘ cheese and spread onto both sides of the stars.
4. ✘

Close, wrap in cling film and leave them to chill in the fridge if you are making it the night before.

Question Number : 51 Question Id : 26026951 Display Question Number : Yes Single Line Question Option : No Option Orientation : Vertical

Choose the option that offers the correct **synonym** of the highlighted word in the sentence given below. Pay attention to the meaning of the highlighted word in context of the sentence:

You eat them, you wear them, you put them in vases and **gawk** at them appreciatively – but are you really using them to their full potential?

Options :

1. ✘ ogle
2. ✔ gaze
3. ✘ glance
4. ✘ blink

Question Number : 51 Question Id : 26026951 Display Question Number : Yes Single Line Question Option : No Option Orientation : Vertical

Choose the option that offers the correct **synonym** of the highlighted word in the sentence given below. Pay attention to the meaning of the highlighted word in context of the sentence:

You eat them, you wear them, you put them in vases and **gawk** at them appreciatively – but are you really using them to their full potential?

Options :

1. ✘ ogle
2. ✔ gaze
3. ✘ glance
4. ✘ blink

Question Number : 52 Question Id : 26026952 Display Question Number : Yes Single Line Question Option : No Option Orientation : Vertical

Choose the option that offers the correct **antonym** of the highlighted word in the sentence given below. Pay attention to the meaning of the highlighted word in context of the sentence:

Backed by the major banks, Paytm allows customers to send money securely to anyone else with the app, just by using their mobile number.

Options :

1. ✘ fostered
2. ✔ opposed
3. ✘ backless
4. ✘ propped

Question Number : 52 Question Id : 26026952 Display Question Number : Yes Single Line Question Option : No Option Orientation : Vertical

Choose the option that offers the correct **antonym** of the highlighted word in the sentence given below. Pay attention to the meaning of the highlighted word in context of the sentence:

Backed by the major banks, Paytm allows customers to send money securely to anyone else with the app, just by using their mobile number.

Options :

1. ✘ fostered
2. ✔ opposed
3. ✘ backless
4. ✘ propped

Question Number : 53 Question Id : 26026953 Display Question Number : Yes Single Line Question Option : No Option Orientation : Vertical

From the options given below, choose the sentence that has the conjunctions used correctly.

Options :

1. ✔ If you wish to excel in the annual exams, you must study diligently.
2. ✘ You wish to excel in the annual exams, because you must study diligently.
3. ✘ Although you wish to excel in the annual exams, you must study diligently.
4. ✘ If you wish to excel in the annual exams, so you must study diligently.

Question Number : 53 Question Id : 26026953 Display Question Number : Yes Single Line Question Option : No Option Orientation : Vertical

From the options given below, choose the sentence that has the conjunctions used correctly.

Options :

1. ✔ If you wish to excel in the annual exams, you must study diligently.
2. ✘ You wish to excel in the annual exams, because you must study diligently.
3. ✘ Although you wish to excel in the annual exams, you must study diligently.
4. ✘ If you wish to excel in the annual exams, so you must study diligently.

Question Number : 54 Question Id : 26026954 Display Question Number : Yes Single Line Question Option : No Option Orientation : Vertical

From the options given below, choose the phrasal verb that can be used to replace the highlighted phrase:

Deepak promised to sing at the concert and though he doesn't want to perform now, he can't **free himself from the obligation**.

Options :

1. ✘ Get into it
2. ✘ Give up
3. ✘ Give into
4. ✔ Get out of it

Question Number : 54 Question Id : 26026954 Display Question Number : Yes Single Line Question Option : No Option Orientation : Vertical

From the options given below, choose the phrasal verb that can be used to replace the highlighted phrase:

Deepak promised to sing at the concert and though he doesn't want to perform now, he can't **free himself from the obligation**.

Options :

1. ✘ Get into it
2. ✘ Give up
3. ✘ Give into
4. ✔ Get out of it

Question Number : 55 Question Id : 26026955 Display Question Number : Yes Single Line Question Option : No Option Orientation : Vertical

From the options given below choose the one that has been spelt correctly to form a proper sentence.

A ____ is a period of one thousand years, especially one which begins and ends with a year ending in '000'.

Options :

1. ✘ millennium
2. ✘ millenium
3. ✘ millinnium
4. ✔ millennium

Question Number : 55 Question Id : 26026955 Display Question Number : Yes Single Line Question Option : No Option Orientation : Vertical

From the options given below choose the one that has been spelt correctly to form a proper sentence.

A ____ is a period of one thousand years, especially one which begins and ends with a year ending in '000'.

Options :

1. ✘ millennium
2. ✘ millenium
3. ✘ millinnium
4. ✔ millennium

Question Number : 56 Question Id : 26026956 Display Question Number : Yes Single Line Question Option : No Option Orientation : Vertical

निम्नलिखित में से 'तत्सम' शब्द है:

Options :

1. ✘ ऊंचा
2. ✔ आम
3. ✘ खत्री
4. ✘ केला

Question Number : 56 Question Id : 26026956 Display Question Number : Yes Single Line Question Option : No Option Orientation : Vertical

निम्नलिखित में से 'तत्सम' शब्द है:

Options :

1. ✘ ऊंचा
2. ✔ आम
3. ✘ खत्री
4. ✘ केला

Question Number : 57 Question Id : 26026957 Display Question Number : Yes Single Line Question Option : No Option Orientation : Vertical

निम्नलिखित में से 'तद्भव' शब्द कौन-सा है?

Options :

1. ✘ गर्दभ
2. ✘ तिलक
3. ✔ धरती
4. ✘ प्रतिच्छाया

Question Number : 57 Question Id : 26026957 Display Question Number : Yes Single Line Question Option : No Option Orientation : Vertical

निम्नलिखित में से 'तद्भव' शब्द कौन-सा है?

Options :

1. ✘ गर्दभ
2. ✘ तिलक
3. ✔ धरती
4. ✘ प्रतिच्छाया

Question Number : 58 Question Id : 26026958 Display Question Number : Yes Single Line Question Option : No Option Orientation : Vertical

'वीर तुम बड़े चलो बड़े चलो' पंक्ति में कौन-सा रस समाहित है?

Options :

1. ✘ करुण रस
2. ✔ वीर रस
3. ✘ श्रृंगार रस
4. ✘ वीभत्स रस

Question Number : 58 Question Id : 26026958 Display Question Number : Yes Single Line Question Option : No Option Orientation : Vertical

'वीर तुम बड़े चलो बड़े चलो' पंक्ति में कौन-सा रस समाहित है?

Options :

1. ✘ करुण रस
2. ✔ वीर रस
3. ✘ श्रृंगार रस
4. ✘ वीभत्स रस

Question Number : 59 Question Id : 26026959 Display Question Number : Yes Single Line Question Option : No Option Orientation : Vertical

उस शब्द को क्या कहते हैं जिससे किसी काम के करने या होने का बोध होता है?

Options :

1. ✘ सर्वनाम
2. ✘ अव्यय
3. ✘ विशेषण
4. ✔ क्रिया

Question Number : 59 Question Id : 26026959 Display Question Number : Yes Single Line Question Option : No Option Orientation : Vertical

उस शब्द को क्या कहते हैं जिससे किसी काम के करने या होने का बोध होता है?

Options :

1. ✘ सर्वनाम
2. ✘ अव्यय
3. ✘ विशेषण
4. ✔ क्रिया

Question Number : 60 Question Id : 26026960 Display Question Number : Yes Single Line Question Option : No Option Orientation : Vertical

'सच्चिदानन्द' शब्द का संधि विच्छेद क्या होगा?

Options :

1. ✘ सत् + चीत + आनंद

2. ✓ सत् + चित् + आनंद

3. ✗ सद + चित् + आनन्द

4. ✗ सत् + चीद + आनन्द

Question Number : 60 Question Id : 26026960 Display Question Number : Yes Single Line Question Option : No Option Orientation : Vertical

'सच्चिदानन्द' शब्द का संधि विच्छेद क्या होगा?

Options :

1. ✗ सत् + चीत + आनंद

2. ✓ सत् + चित् + आनंद

3. ✗ सद + चित् + आनन्द

4. ✗ सत् + चीद + आनन्द

Question Number : 61 Question Id : 26026961 Display Question Number : Yes Single Line Question Option : No Option Orientation : Vertical

'आंख' शब्द का पर्यायवाची नहीं है:

Options :

1. ✗ चक्षु

2. ✗ लोचन

3. ✓ रजनीश

4. ✗ नयन

Question Number : 61 Question Id : 26026961 Display Question Number : Yes Single Line Question Option : No Option Orientation : Vertical

'आंख' शब्द का पर्यायवाची नहीं है:

Options :

1. ✗ चक्षु

2. ✗ लोचन

3. ✓ रजनीश

4. ✗ नयन

Question Number : 62 Question Id : 26026962 Display Question Number : Yes Single Line Question Option : No Option Orientation : Vertical

‘सजना है मुझे सजना के लिए’ पंक्ति में कौन-सा अलंकार समाया हुआ है?

Options :

1. ✗ उपमा

2. ✓ यमक

3. ✗ रूपक

4. ✗ उत्प्रेक्षा

Question Number : 62 Question Id : 26026962 Display Question Number : Yes Single Line Question Option : No Option Orientation : Vertical

‘सजना है मुझे सजना के लिए’ पंक्ति में कौन-सा अलंकार समाया हुआ है?

Options :

1. ✗ उपमा

2. ✓ यमक

3. ✗ रूपक

4. ✗ उत्प्रेक्षा

Question Number : 63 Question Id : 26026963 Display Question Number : Yes Single Line Question Option : No Option Orientation : Vertical

‘असली भेद खुलना’ के लिए सही मुहावरा होगा:

Options :

1. ✓ कलई खुलना

2. ✗ कान काटना

3. ✗ करम फूटना

4. ✗ कान भरना

Question Number : 63 Question Id : 26026963 Display Question Number : Yes Single Line Question Option : No Option Orientation : Vertical

‘असली भेद खुलना’ के लिए सही मुहावरा होगा:

Options :

1. ✓ कलई खुलना
2. ✗ कान काटना
3. ✗ करम फूटना
4. ✗ कान भरना

Question Number : 64 Question Id : 26026964 Display Question Number : Yes Single Line Question Option : No Option Orientation : Vertical

अनेकार्थी शब्द कौन-सा है?

Options :

1. ✗ बिल्ली
2. ✗ ईमान
3. ✗ वर्जित
4. ✓ सारंग

Question Number : 64 Question Id : 26026964 Display Question Number : Yes Single Line Question Option : No Option Orientation : Vertical

अनेकार्थी शब्द कौन-सा है?

Options :

1. ✗ बिल्ली
2. ✗ ईमान
3. ✗ वर्जित
4. ✓ सारंग

Question Number : 65 Question Id : 26026965 Display Question Number : Yes Single Line Question Option : No Option Orientation : Vertical

'महात्मा' शब्द का सटीक विलोम बताइए।

Options :

1. ✓ दुरात्मा
2. ✗ परमात्मा
3. ✗ दुर्जन
4. ✗ तुच्छ

Question Number : 65 Question Id : 26026965 Display Question Number : Yes Single Line Question Option : No Option Orientation : Vertical

'महात्मा' शब्द का सटीक विलोम बताइए।

Options :

1. ✓ दुरात्मा
2. ✗ परमात्मा
3. ✗ दुर्जन
4. ✗ तुच्छ

Question Number : 66 Question Id : 26026966 Display Question Number : Yes Single Line Question Option : No Option Orientation : Vertical

The LCM of 56, 160 and 250 is:

Options :

1. ✗ 56,000
2. ✗ 2,80,000
3. ✗ 14,000
4. ✓ 28,000

Question Number : 66 Question Id : 26026966 Display Question Number : Yes Single Line Question Option : No Option Orientation : Vertical

56, 160 और 250 का लघुत्तम समापवर्तक है:

Options :

1. ✘ 56,000
2. ✘ 2,80,000
3. ✘ 14,000
4. ✔ 28,000

Question Number : 67 Question Id : 26026967 Display Question Number : Yes Single Line Question Option : No Option Orientation : Vertical

A hotel has 2 managers, 2 cooks, 3 waiters and 3 housekeeping staff. The averages of their ages are 45 years, 50 years, 36 years and 24 years respectively. The average age of the entire staff of the hotel is:

Options :

1. ✔ 37
2. ✘ 30
3. ✘ 35
4. ✘ 32

Question Number : 67 Question Id : 26026967 Display Question Number : Yes Single Line Question Option : No Option Orientation : Vertical

एक होटल में 2 प्रबंधक, 2 बावर्ची, 3 वेटर और 3 हाउसकीपिंग स्टाफ़ हैं। उनकी आयु के औसत क्रमशः 45 वर्ष, 50 वर्ष, 36 वर्ष और 24 वर्ष हैं। होटल के पूरे स्टाफ़ की औसत आयु ज्ञात कीजिए।

Options :

1. ✔ 37
2. ✘ 30
3. ✘ 35
4. ✘ 32

Question Number : 68 Question Id : 26026968 Display Question Number : Yes Single Line Question Option : No Option Orientation : Vertical

Simple interest on a certain sum with 5% interest per annum for 2 years is ₹ 500. Then the compound interest for the same sum for the same period and interest is:

Options :

1. ✘ ₹ 512
2. ✘ ₹ 513
3. ✔ ₹ 512.5
4. ✘ ₹ 525

Question Number : 68 Question Id : 26026968 Display Question Number : Yes Single Line Question Option : No Option Orientation : Vertical

एक निश्चित धनराशि पर साधारण ब्याज की 5% वार्षिक दर से 2 वर्षों में ₹ 500 ब्याज प्राप्त होता है। इसी धनराशि के लिए समान अवधि व समान ब्याज दर पर चक्रवृद्धि ब्याज कितना होगा?

Options :

1. ✘ ₹ 512
2. ✘ ₹ 513
3. ✔ ₹ 512.5
4. ✘ ₹ 525

Question Number : 69 Question Id : 26026969 Display Question Number : Yes Single Line Question Option : No Option Orientation : Vertical

$x\%$ of y is 50 and $y\%$ of 18 is 27, then $x = ?$

Options :

1. ✘ $33\frac{1}{2}$
2. ✘ $32\frac{1}{3}$
3. ✘ $33\frac{1}{4}$
4. ✔ $33\frac{1}{3}$

Question Number : 69 Question Id : 26026969 Display Question Number : Yes Single Line Question Option : No Option Orientation : Vertical

यदि y का $x\%$ 50 है और 18 का $y\%$ 27 है, तो $x = ?$

Options :

1. ✘ $33\frac{1}{2}$

2. ✘ $32\frac{1}{3}$

3. ✘ $33\frac{1}{4}$

4. ✔ $33\frac{1}{3}$

Question Number : 70 Question Id : 26026970 Display Question Number : Yes Single Line Question Option : No Option Orientation : Vertical

If one root of the equation $x^2 - 12x + c = 0$ is three times the other, then $c = ?$

Options :

1. ✘ 9

2. ✔ 27

3. ✘ 18

4. ✘ 25

Question Number : 70 Question Id : 26026970 Display Question Number : Yes Single Line Question Option : No Option Orientation : Vertical

यदि समीकरण $x^2 - 12x + c = 0$ का एक मूल दूसरे मूल का तीन गुना है, तो $c = ?$

Options :

1. ✘ 9

2. ✔ 27

3. ✘ 18

4. ✘ 25

Question Number : 71 Question Id : 26026971 Display Question Number : Yes Single Line Question Option : No Option Orientation : Vertical

Two numbers are in the ratio 5 : 7. If 10 is subtracted from both numerator and denominator, we get the new ratio as 25 : 37. The numbers are:

Options :

1. ✔ 60, 84

2. ✘ 55, 77

3. ✘ 15, 21

4. ✘ 20, 28

Question Number : 71 Question Id : 26026971 Display Question Number : Yes Single Line Question Option : No Option Orientation : Vertical

दो संख्याओं का अनुपात 5 : 7 है। यदि अंश और हर दोनों में से 10 घटाया जाता है, तो हमें 25 : 37 के रूप में एक नया अनुपात प्राप्त होता है। संख्याएं हैं:

Options :

1. ✔ 60, 84

2. ✘ 55, 77

3. ✘ 15, 21

4. ✘ 20, 28

Question Number : 72 Question Id : 26026972 Display Question Number : Yes Single Line Question Option : No Option Orientation : Vertical

The time taken by a 110 m long train travelling at a speed of 60 kmph to cross a bridge of 170 m in length is:

Options :

1. ✘ 17 seconds

2. ✘ 16.9 seconds

3. ✔ 16.8 seconds

4. ✘ 16 seconds

Question Number : 72 Question Id : 26026972 Display Question Number : Yes Single Line Question Option : No Option Orientation : Vertical

110 मी लंबी रेलगाड़ी द्वारा 60 किमी/घंटे की चाल से 170 मी लंबे पुल को पार करने में कितना समय लगेगा?

Options :

1. ✘ 17 सेकंड

2. ✘ 16.9 सेकंड

3. ✓ 16.8 सेकंड

4. ✗ 16 सेकंड

Question Number : 73 Question Id : 26026973 Display Question Number : Yes Single Line Question Option : No Option Orientation : Vertical

Together A and B, B and C, C and A can complete a given task in 3, 4 and 6 days respectively. The time taken for C alone to complete the same task is:

Options :

1. ✗ 22 days

2. ✗ 23 days

3. ✗ 21 days

4. ✓ 24 days

Question Number : 73 Question Id : 26026973 Display Question Number : Yes Single Line Question Option : No Option Orientation : Vertical

एक काम को A और B, B और C, C और A मिलकर क्रमशः 3, 4 और 6 दिनों में पूरा कर सकते हैं। C द्वारा अकेले इसी कार्य को समाप्त करने में कितना समय लगेगा?

Options :

1. ✗ 22 दिन

2. ✗ 23 दिन

3. ✗ 21 दिन

4. ✓ 24 दिन

Question Number : 74 Question Id : 26026974 Display Question Number : Yes Single Line Question Option : No Option Orientation : Vertical

A container contains 100 litres mixture of water and milk with the proportion of water as 10%. The amount of water (in litres) to be added so that the resultant mixture has 15% of water is: (round to one decimal value)

Options :

1. ✗ 6

2. ✓ 5.9

3. ✗ 5.5

4. ✘ 5

Question Number : 74 Question Id : 26026974 Display Question Number : Yes Single Line Question Option : No Option Orientation : Vertical

एक डिब्बे में पानी और दूध के मिश्रण की मात्रा 100 लीटर है, जिसमें पानी 10% है। इस मिश्रण में कितना पानी (लीटर में) मिलाया जाना चाहिए कि परिणामस्वरूप प्राप्त मिश्रण में पानी की मात्रा 15% हो जाए (दशमलव के एक स्थान तक पूर्णांकित किया हुआ)?

Options :

1. ✘ 6

2. ✔ 5.9

3. ✘ 5.5

4. ✘ 5

Question Number : 75 Question Id : 26026975 Display Question Number : Yes Single Line Question Option : No Option Orientation : Vertical

Person 'A' sells a car to person 'B' at a 10% loss. Person 'B' then sells the same car for ₹ 32,400 and gains 20%. The cost price of the car for 'A' is:

Options :

1. ✔ ₹ 30,000

2. ✘ ₹ 32,000

3. ✘ ₹ 33,000

4. ✘ ₹ 30,500

Question Number : 75 Question Id : 26026975 Display Question Number : Yes Single Line Question Option : No Option Orientation : Vertical

एक व्यक्ति 'A' एक अन्य व्यक्ति 'B' को एक कार 10% की हानि पर बेचता है। व्यक्ति 'B' उसी कार को ₹ 32,400 में बेचकर 20% का लाभ अर्जित करता है। 'A' के लिए कार का क्रय मूल्य ज्ञात कीजिए।

Options :

1. ✔ ₹ 30,000

2. ✘ ₹ 32,000

3. ✘ ₹ 33,000

4. ✘ ₹ 30,500

Question Number : 76 Question Id : 26026976 Display Question Number : Yes Single Line Question Option : No Option Orientation : Vertical

A ball of 500 g is moving in a straight line. A constant force increases the velocity of the ball from 1 m/s to 5 m/s in 10 seconds. The magnitude of the force is:

Options :

1. ✘ 0.1 N

2. ✔ 0.2 N

3. ✘ 0.4 N

4. ✘ 4.0 N

Question Number : 76 Question Id : 26026976 Display Question Number : Yes Single Line Question Option : No Option Orientation : Vertical

500 ग्राम की एक गेंद सीधी रेखा में गतिमान है। एक निरंतर बल गेंद की गति को 10 सेकंड में 1 मीटर/सेकंड से बढ़ाकर 5 मीटर/सेकंड कर देता है। बल की मात्रा है:

Options :

1. ✘ 0.1 N (न्यूटन)

2. ✔ 0.2 N (न्यूटन)

3. ✘ 0.4 N (न्यूटन)

4. ✘ 4.0 N (न्यूटन)

Question Number : 77 Question Id : 26026977 Display Question Number : Yes Single Line Question Option : No Option Orientation : Vertical

A canon of 1,200 kg is initially at rest but free to recoil. It fires a ball of 60 kg with a velocity of 40 m/s. After firing, the velocity of the canon is: (all velocities relative to the ground)

Options :

1. ✘ 1.0 m/s

2. ✘ -1.0 m/s

3. ✘ 2.0 m/s

4. ✓ -2.0 m/s

Question Number : 77 Question Id : 26026977 Display Question Number : Yes Single Line Question Option : No Option Orientation : Vertical

1,200 किलोग्राम की एक तोप आरंभ में विश्राम अवस्था में है लेकिन प्रतिघात करने के लिए मुक्त है। यह 60 किलोग्राम का गोला 40 मीटर/सेकंड की गति से दागती है। दागने के बाद तोप की गति है: (सभी गति आधार से संबंधित हैं)

Options :

1. ✗ 1.0 मीटर/सेकंड
2. ✗ -1.0 मीटर/सेकंड
3. ✗ 2.0 मीटर/सेकंड
4. ✓ -2.0 मीटर/सेकंड

Question Number : 78 Question Id : 26026978 Display Question Number : Yes Single Line Question Option : No Option Orientation : Vertical

A car of weight 800 kg is moving with a speed of 5 m/s. An amount of 80 kJ of work is done on it. The final speed of the car (ignoring friction) is:

Options :

1. ✗ 10 m/s
2. ✓ 15 m/s
3. ✗ 20 m/s
4. ✗ 25 m/s

Question Number : 78 Question Id : 26026978 Display Question Number : Yes Single Line Question Option : No Option Orientation : Vertical

800 किलोग्राम भार की एक कार 5 मीटर/सेकंड की गति से गतिमान है। 80 किलो जूल मात्रा का कार्य इस पर किया जाता है। (घर्षण बल को नजरंदाज करते हुए) कार की अंतिम गति है:

Options :

1. ✗ 10 मीटर/सेकंड
2. ✓ 15 मीटर/सेकंड
3. ✗ 20 मीटर/सेकंड

4. ✘ 25 मीटर/सेकंड

Question Number : 79 Question Id : 26026979 Display Question Number : Yes Single Line Question Option : No Option Orientation : Vertical

A ball of mass m falls from height h under gravity. Let V and K denote the potential and the kinetic energy of the ball at the height of x . When $x = 3h/4$, the ratio V/K is:

Options :

1. ✘ $1/3$

2. ✘ $1/2$

3. ✘ 2

4. ✔ 3

Question Number : 79 Question Id : 26026979 Display Question Number : Yes Single Line Question Option : No Option Orientation : Vertical

m द्रव्यमान की एक गेंद गुरुत्वाकर्षण बल के तहत h ऊंचाई से गिरती है। मान लीजिए x ऊंचाई पर V और K स्थितिज ऊर्जा और गतिज ऊर्जा के द्योतक हैं। जब $x = 3h/4$, तो V/K का अनुपात है:

Options :

1. ✘ $1/3$

2. ✘ $1/2$

3. ✘ 2

4. ✔ 3

Question Number : 80 Question Id : 26026980 Display Question Number : Yes Single Line Question Option : No Option Orientation : Vertical

The acceleration due to gravity on a planet is $1/8$ times of that on Earth. The radius of the planet is half that of Earth. Then the mass of the planet is n times that of Earth, where n is:

Options :

1. ✘ $1/4$

2. ✘ $1/8$

3. ✘ $1/16$

4. ✔ $1/32$

Question Number : 80 Question Id : 26026980 Display Question Number : Yes Single Line Question Option : No Option Orientation : Vertical

एक ग्रह पर गुरुत्व के कारण त्वरण, पृथ्वी के त्वरण का $1/8$ है। ग्रह का अर्धव्यास पृथ्वी के मुकाबले आधा है। तब ग्रह का द्रव्यमान पृथ्वी के मुकाबले n गुणा है, जहां n है:

Options :

1. ✘ $1/4$
2. ✘ $1/8$
3. ✘ $1/16$
4. ✔ $1/32$

Question Number : 81 Question Id : 26026981 Display Question Number : Yes Single Line Question Option : No Option Orientation : Vertical

What is the colour of the universal indicator in a strongly acidic solution?

Options :

1. ✘ Yellow
2. ✘ Purple
3. ✔ Red
4. ✘ Blue

Question Number : 81 Question Id : 26026981 Display Question Number : Yes Single Line Question Option : No Option Orientation : Vertical

प्रबल अम्लीय विलयन में सार्वत्रिक सूचक का रंग क्या होता है?

Options :

1. ✘ पीला
2. ✘ बैंगनी
3. ✔ लाल
4. ✘ नीला

Question Number : 82 Question Id : 26026982 Display Question Number : Yes Single Line Question Option : No Option Orientation : Vertical

The aqueous solution of the salt sodium chloride is:

Options :

1. ✘ Acidic
2. ✘ Basic
3. ✔ Neutral
4. ✘ Amphoteric

Question Number : 82 Question Id : 26026982 Display Question Number : Yes Single Line Question Option : No Option Orientation : Vertical

सोडियम क्लोराइड लवण का जलीय विलयन होता है:

Options :

1. ✘ अम्लीय
2. ✘ क्षारीय
3. ✔ उदासीन
4. ✘ उभयधर्मी

Question Number : 83 Question Id : 26026983 Display Question Number : Yes Single Line Question Option : No Option Orientation : Vertical

Which one of the following metals are above hydrogen in the metal activity series?

Options :

1. ✔ Zinc
2. ✘ Silver
3. ✘ Platinum
4. ✘ Copper

Question Number : 83 Question Id : 26026983 Display Question Number : Yes Single Line Question Option : No Option Orientation : Vertical

निम्नलिखित में से कौन सी धातु, धातु सक्रियता श्रेणी में हाइड्रोजन से ऊपर होती है?

Options :

1. ✔ जिंक
2. ✘ सिल्वर

3. ✘ प्लैटिनम

4. ✘ कॉपर

Question Number : 84 Question Id : 26026984 Display Question Number : Yes Single Line Question Option : No Option Orientation : Vertical

What happens when a piece of copper metal is kept in an aqueous solution of zinc sulphate?

Options :

1. ✔ No reaction takes place

2. ✘ Copper displaces zinc

3. ✘ Hydrogen gas is released

4. ✘ Sulphur dioxide gas is released

Question Number : 84 Question Id : 26026984 Display Question Number : Yes Single Line Question Option : No Option Orientation : Vertical

क्या होता है जब कॉपर धातु के एक टुकड़े को जिंक सल्फेट के जलीय विलयन में रखा जाता है?

Options :

1. ✔ कोई अभिक्रिया नहीं होती

2. ✘ कॉपर जिंक को विस्थापित कर देता है

3. ✘ हाइड्रोजन गैस निकलती है

4. ✘ सल्फर डाइऑक्साइड गैस निकलती है

Question Number : 85 Question Id : 26026985 Display Question Number : Yes Single Line Question Option : No Option Orientation : Vertical

The only non-metal which exists as liquid under normal conditions is:

Options :

1. ✘ Oxygen

2. ✘ Nitrogen

3. ✘ Chlorine

4. ✓ Bromine

Question Number : 85 Question Id : 26026985 Display Question Number : Yes Single Line Question Option : No Option Orientation : Vertical

सामान्य परिस्थितियों में तरल अवस्था में पाई जाने वाली एकमात्र अधातु है:

Options :

1. ✗ ऑक्सीजन

2. ✗ नाइट्रोजन

3. ✗ क्लोरीन

4. ✓ ब्रोमीन

Question Number : 86 Question Id : 26026986 Display Question Number : Yes Single Line Question Option : No Option Orientation : Vertical

Which of the following is a folk music popular in the Jammu region?

Options :

1. ✗ Bhuta

2. ✗ Bihu

3. ✗ Mando

4. ✓ Bhakha

Question Number : 86 Question Id : 26026986 Display Question Number : Yes Single Line Question Option : No Option Orientation : Vertical

निम्नलिखित में से क्या जम्मू क्षेत्र का लोकप्रिय लोक संगीत है?

Options :

1. ✗ भूटा

2. ✗ बिहू

3. ✗ मंडो

4. ✓ भाखा

Question Number : 87 Question Id : 26026987 Display Question Number : Yes Single Line Question Option : No Option Orientation : Vertical

In 1930, Mahatma Gandhi's march to break the salt law started from _____ to the coastal town of _____.

Options :

1. ✗ Jamnagar; Dandi
2. ✗ Sabarmati; Okha
3. ✓ Sabarmati; Dandi
4. ✗ Sabarmati; Daman

Question Number : 87 Question Id : 26026987 Display Question Number : Yes Single Line Question Option : No Option Orientation : Vertical

1930 में, नमक कानून को तोड़ने के लिए महात्मा गांधी ने _____ से तटीय शहर _____ तक की पदयात्रा की थी।

Options :

1. ✗ जामनगर; दांडी
2. ✗ साबरमती; ओखा
3. ✓ साबरमती; दांडी
4. ✗ साबरमती; दमन

Question Number : 88 Question Id : 26026988 Display Question Number : Yes Single Line Question Option : No Option Orientation : Vertical

Which of the following national parks is the abode of the endangered Asiatic lions?

Options :

1. ✗ Kanha National Park
2. ✓ Gir National Park
3. ✗ Corbett National Park
4. ✗ Kaziranga National Park

Question Number : 88 Question Id : 26026988 Display Question Number : Yes Single Line Question Option : No Option Orientation : Vertical

निम्नलिखित में से कौन-सा राष्ट्रीय उद्यान लुप्तप्राय एशियाई शेरों का निवास है?

Options :

1. ✘ कान्हा राष्ट्रीय उद्यान
2. ✔ गीर राष्ट्रीय उद्यान
3. ✘ कॉर्बेट राष्ट्रीय उद्यान
4. ✘ काज़ीरंगा राष्ट्रीय उद्यान

Question Number : 89 Question Id : 26026989 Display Question Number : Yes Single Line Question Option : No Option Orientation : Vertical

While presenting the Union Budget 2017-18, the government proposed to launch the next phase of STRIVE in the financial year 2017-18 at a cost of ₹ 2200 crore. STRIVE focuses on improving the quality and market relevance of vocational training and strengthen the apprenticeship programmes. What is the full form of STRIVE?

Options :

1. ✘ Skill Support for Individual Value Enhancement
2. ✔ Skill Strengthening for Industrial Value Enhancement
3. ✘ Skill Support for Industrial Value Enhancement
4. ✘ Skill Sustenance for Industrial Value Enhancement

Question Number : 89 Question Id : 26026989 Display Question Number : Yes Single Line Question Option : No Option Orientation : Vertical

2017-18 का केंद्रीय बजट पेश करते हुए सरकार ने वित्तीय वर्ष 2017-18 में ₹ 2200 करोड़ की लागत से स्ट्राइव (STRIVE) के अगले चरण को लॉन्च करने का प्रस्ताव रखा। स्ट्राइव व्यावसायिक प्रशिक्षण की गुणवत्ता और बाज़ार संगतता में सुधार लाने और प्रशिक्षु कार्यक्रमों के सुदृढीकरण पर केंद्रित है। स्ट्राइव (STRIVE) का पूरा नाम क्या है?

Options :

1. ✘ स्किल सपोर्ट फ़ॉर इंडिविजुअल वैल्यू एनहैन्समेंट
2. ✔ स्किल स्ट्रेंथनिंग फ़ॉर इंडस्ट्रियल वैल्यू एनहैन्समेंट
3. ✘ स्किल सपोर्ट फ़ॉर इंडस्ट्रियल वैल्यू एनहैन्समेंट
4. ✘ स्किल सस्टेनेन्स फ़ॉर इंडस्ट्रियल वैल्यू एनहैन्समेंट

Question Number : 90 Question Id : 26026990 Display Question Number : Yes Single Line Question Option : No Option Orientation : Vertical

Which of the following does Part III / Articles 12-35 of the Indian Constitution explain in detail?

Options :

1. ✓ Fundamental Rights
2. ✗ The Union Judiciary
3. ✗ The Union and its territories
4. ✗ Citizenship

Question Number : 90 Question Id : 26026990 Display Question Number : Yes Single Line Question Option : No Option Orientation : Vertical

भारतीय संविधान के भाग III / अनुच्छेद 12-35 में निम्नलिखित में से किसे विस्तार से समझाया गया है?

Options :

1. ✓ मौलिक अधिकार
2. ✗ केंद्रीय न्यायपालिका
3. ✗ संघ और उसके क्षेत्र
4. ✗ नागरिकता

Question Number : 91 Question Id : 26026991 Display Question Number : Yes Single Line Question Option : No Option Orientation : Vertical

Name the heaviest naturally occurring element on Earth (i.e. having largest atomic number).

Options :

1. ✗ Hydrogen
2. ✓ Uranium
3. ✗ Promethium
4. ✗ Neptunium

Question Number : 91 Question Id : 26026991 Display Question Number : Yes Single Line Question Option : No Option Orientation : Vertical

पृथ्वी पर स्वाभाविक रूप से मिलने वाले सबसे भारी (अर्थात सबसे बड़ी परमाणु संख्या वाले) तत्व का नाम बताएं।

Options :

1. ✘ हाइड्रोजन
2. ✔ यूरेनियम
3. ✘ प्रोमीथियम
4. ✘ नेप्टूनियम

Question Number : 92 Question Id : 26026992 Display Question Number : Yes Single Line Question Option : No Option Orientation : Vertical

Who won the Wimbledon Championship 2017 under the Gentlemen's Singles category?

Options :

1. ✘ Marin Cilic
2. ✘ Milos Raonic
3. ✔ Roger Federer
4. ✘ Andy Murray

Question Number : 92 Question Id : 26026992 Display Question Number : Yes Single Line Question Option : No Option Orientation : Vertical

पुरुषों की एकल श्रेणी में विम्बलडन चैम्पियनशिप 2017 के विजेता कौन थे?

Options :

1. ✘ मैरिन सिलिक
2. ✘ मिलोस राओनिक
3. ✔ रोजर फेडरर
4. ✘ एंडी मरे

Question Number : 93 Question Id : 26026993 Display Question Number : Yes Single Line Question Option : No Option Orientation : Vertical

In which of the following sport did Elizabeth Susan Koshy represent India in Glasgow 2014 XX Commonwealth Games?

Options :

1. ✓ Shooting
2. ✗ Swimming
3. ✗ Weightlifting
4. ✗ Squash

Question Number : 93 Question Id : 26026993 Display Question Number : Yes Single Line Question Option : No Option Orientation : Vertical

निम्नलिखित में से किस खेल में एलिजाबेथ सूज़न कोशी ने ग्लासगो 2014 बीसवें कॉमनवेल्थ खेलों में भारत का प्रतिनिधित्व किया था?

Options :

1. ✓ निशानेबाज़ी
2. ✗ तैराकी
3. ✗ भारोत्तोलन
4. ✗ स्क्वाश

Question Number : 94 Question Id : 26026994 Display Question Number : Yes Single Line Question Option : No Option Orientation : Vertical

In 2017, K J Yesudas was awarded which of the following awards?

Options :

1. ✗ Padma Shri
2. ✗ Padma Bhushan
3. ✗ Bharat Ratna
4. ✓ Padma Vibhushan

Question Number : 94 Question Id : 26026994 Display Question Number : Yes Single Line Question Option : No Option Orientation : Vertical

वर्ष 2017 में, के जे यसुदास को निम्नलिखित में से किस पुरस्कार से सम्मानित किया गया?

Options :

1. ✗ पद्मश्री

2. ✘ पद्म भूषण
3. ✘ भारत रत्न
4. ✔ पद्म विभूषण

Question Number : 95 Question Id : 26026995 Display Question Number : Yes Single Line Question Option : No Option Orientation : Vertical

Which of the following is **NOT** a traditional dance form of India?

Options :

1. ✘ Mohiniattam
2. ✘ Sattriya
3. ✔ Cham
4. ✘ Kuchipudi

Question Number : 95 Question Id : 26026995 Display Question Number : Yes Single Line Question Option : No Option Orientation : Vertical

निम्नलिखित में से कौन सा भारत का पारंपरिक नृत्य नहीं है?

Options :

1. ✘ मोहिनीअट्टम
2. ✘ सत्रीया
3. ✔ छम
4. ✘ कुचिपुडी

Question Number : 96 Question Id : 26026996 Display Question Number : Yes Single Line Question Option : No Option Orientation : Vertical

If ORANGE is coded as NQZMFD, how can APPLE be coded?

Options :

1. ✘ ZOODK

2. ✘ ZODOK

3. ✘ ZOKOD

4. ✔ ZOOKD

Question Number : 96 Question Id : 26026996 Display Question Number : Yes Single Line Question Option : No Option Orientation : Vertical

यदि ORANGE को NQZMFD के रूप में कोड किया जाता है, तो APPLE को कैसे कोड किया जाएगा?

Options :

1. ✘ ZOODK

2. ✘ ZODOK

3. ✘ ZOKOD

4. ✔ ZOOKD

Question Number : 97 Question Id : 26026997 Display Question Number : Yes Single Line Question Option : No Option Orientation : Vertical

Complete the analogy.

PEN : PAPER :: ?

Options :

1. ✘ GATE : HANDLE

2. ✔ CHALK : BLACKBOARD

3. ✘ INK : HAND

4. ✘ TABLE : CHAIR

Question Number : 97 Question Id : 26026997 Display Question Number : Yes Single Line Question Option : No Option Orientation : Vertical

सादृश्य को पूरा करें।

कलम : कागज :: _____

Options :

1. ✘ दरवाजा : हत्था (हैंडल)

2. ✔ चाक : श्यामपट

3. ✘ स्याही : हाथ

4. ✘ मेज : कुर्सी

Question Number : 98 Question Id : 26026998 Display Question Number : Yes Single Line Question Option : No Option Orientation : Vertical

Select from the options the word that has a similar meaning as that of the words on the right and left side of the brackets.

FORM (-----) SHAPE

Options :

1. ✔ DESIGN

2. ✘ GROUP

3. ✘ CLASS

4. ✘ SECTION

Question Number : 98 Question Id : 26026998 Display Question Number : Yes Single Line Question Option : No Option Orientation : Vertical

विकल्पों में से उस शब्द का चयन करें जिसका अर्थ कोष्ठक के दाहिनी तथा बाईं ओर के शब्दों के अर्थ के समान हो।

FORM (-----) SHAPE

Options :

1. ✔ DESIGN

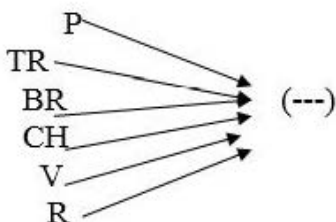
2. ✘ GROUP

3. ✘ CLASS

4. ✘ SECTION

Question Number : 99 Question Id : 26026999 Display Question Number : Yes Single Line Question Option : No Option Orientation : Vertical

Select the set of letters that, when added as suffix to the letter/set of letters in the image, forms a meaningful word.

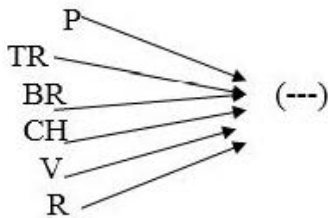


Options :

1. ✘ ien
2. ✘ nie
3. ✘ inr
4. ✔ ain

Question Number : 99 Question Id : 26026999 Display Question Number : Yes Single Line Question Option : No Option Orientation : Vertical

अक्षरों के उस समूह का चयन करें जिसे चित्र में दिए गए प्रत्येक अक्षर/अक्षर-समूह के साथ प्रत्यय के रूप में जोड़ने पर एक सार्थक अंग्रेज़ी शब्द बन जाता है:



Options :

1. ✘ ien
2. ✘ nie
3. ✘ inr
4. ✔ ain

Question Number : 100 Question Id : 260269100 Display Question Number : Yes Single Line Question Option : No Option Orientation : Vertical

Select the number that would complete the series below.

32, 31, 33, 32, 34, 33, _____

Options :

1. ✘ 33
2. ✔ 35
3. ✘ 36
4. ✘ 31

Question Number : 100 Question Id : 260269100 Display Question Number : Yes Single Line Question Option : No Option Orientation : Vertical

उस संख्या का चयन करें जो नीचे दी गई श्रृंखला को पूरा कर दे:

32, 31, 33, 32, 34, 33, _____

Options :

1. ✘ 33

2. ✔ 35

3. ✘ 36

4. ✘ 31