

Haryana Staff Selection Commission

Notations :

- Options shown in green color and with ✓ icon are correct.
- Options shown in red color and with ✗ icon are incorrect.

Subject Name:	CAT 3 Steno Typist English and Hindi CBT Exam
Total Marks:	200
Display Marks:	Yes
Calculator:	None
Magnifying Glass Required?:	No
Ruler Required?:	No
Eraser Required?:	No
Scratch Pad Required?:	No
Rough Sketch/Notepad Required?:	No
Protractor Required?:	No

CAT 3 Steno Typist English and Hindi CBT Exam

Group Marks: 200

CAT 3 Steno Typist English and Hindi CBT Exam

Section Marks:	200
Display Number Panel:	Yes
Group All Questions:	No

Question Number : 1 Question Id : 168000501 Display Question Number : Yes Single Line Question Option : No Option Orientation : Vertical

After the battle of Taraori, Sirsa came under the control of:

Options :

- ✗ Mahmud of Ghazni
- ✗ Muhammad ibn Tekish
- ✓ Nasir-uddin Qubacha
- ✗ Taj-ud-din Yildiz

Question Number : 1 Question Id : 168000501 Display Question Number : Yes Single Line Question Option : No Option Orientation : Vertical

तरौरी की लड़ाई के बाद, सिरसा किसके नियंत्रण में आ गया था?

Options :

1. ✘ महमूद गजनी
2. ✘ मोहम्मद इब्न तेकिश
3. ✔ नासिर-उद्दीन कबाचा
4. ✘ ताज-उद-दीन यिल्डिज

Question Number : 2 Question Id : 168000502 Display Question Number : Yes Single Line Question Option : No Option Orientation : Vertical

Which of the following Delhi Sultans tried to chastise the Meos through massacre and pillage?

Options :

1. ✔ Balban
2. ✘ Iltutmish
3. ✘ Razia
4. ✘ Tughluq

Question Number : 2 Question Id : 168000502 Display Question Number : Yes Single Line Question Option : No Option Orientation : Vertical

निम्नलिखित में से दिल्ली के किस सुल्तान ने मेयों को नरसंहार और लूट के माध्यम से दंडित करने का प्रयास किया था?

Options :

1. ✔ बलबन
2. ✘ इल्तुतमिश
3. ✘ रज़िया
4. ✘ तुगलक

Question Number : 3 Question Id : 168000503 Display Question Number : Yes Single Line Question Option : No Option Orientation : Vertical

Firozabad near Rania (Haryana) was founded in:

Options :

1. ✘ 1340

2. ✘ 1350

3. ✔ 1360

4. ✘ 1370

Question Number : 3 Question Id : 168000503 Display Question Number : Yes Single Line Question Option : No Option Orientation : Vertical

रानिया (हरियाणा) के निकट फिरोजाबाद की स्थापना कब की गयी थी?

Options :

1. ✘ 1340

2. ✘ 1350

3. ✔ 1360

4. ✘ 1370

Question Number : 4 Question Id : 168000504 Display Question Number : Yes Single Line Question Option : No Option Orientation : Vertical

The decisive battle between the armies of Ibrahim Lodi and Babur took place on:

Options :

1. ✘ 21 March 1526

2. ✔ 21 April 1526

3. ✘ 21 May 1526

4. ✘ 21 June 1526

Question Number : 4 Question Id : 168000504 Display Question Number : Yes Single Line Question Option : No Option Orientation : Vertical

इब्राहिम लोदी और बाबर की सेनाओं के बीच निर्णायक लड़ाई कब हुई थी?

Options :

1. ✘ 21 मार्च 1526

2. ✔ 21 अप्रैल 1526

3. ✘ 21 मई 1526

4. ✘ 21 जून 1526

Question Number : 5 Question Id : 168000505 Display Question Number : Yes Single Line Question Option : No Option Orientation : Vertical

Haryana was awarded the _____ at the 9th Global Agricultural Leadership Award.

Options :

1. ✘ best irrigation state

2. ✘ best step farming state

3. ✔ best horticulture state

4. ✘ best periculture state

Question Number : 5 Question Id : 168000505 Display Question Number : Yes Single Line Question Option : No Option Orientation : Vertical

हरियाणा को 9वें ग्लोबल कृषि नेतृत्व पुरस्कारों, में _____ के पुरस्कार से सम्मानित किया गया था।

Options :

1. ✘ सर्वोत्तम सिंचाई राज्य

2. ✘ सर्वोत्तम सीढ़ीदार खेती राज्य

3. ✔ सर्वोत्तम बागवानी राज्य

4. ✘ सर्वोत्तम पेरिकल्चर राज्य

Question Number : 6 Question Id : 168000506 Display Question Number : Yes Single Line Question Option : No Option Orientation : Vertical

As per the memorandum of understanding (MoU) signed with the Haryana government, Gionee plans to establish its manufacturing hub in:

Options :

1. ✘ Karnal

2. ✘ Gurugram

3. ✘ Kurukshetra

4. ✓ Faridabad

Question Number : 6 Question Id : 168000506 Display Question Number : Yes Single Line Question Option : No Option Orientation : Vertical

हरियाणा सरकार के साथ हस्ताक्षर किये गये समझौता ज्ञापन (एमओयू) के अनुसार जिओनी ने अपना विनिर्माण केंद्र कहां पर स्थापित करने की योजना बनायी है?

Options :

1. ✗ करनाल

2. ✗ गुरुग्राम

3. ✗ कुरुक्षेत्र

4. ✓ फरीदाबाद

Question Number : 7 Question Id : 168000507 Display Question Number : Yes Single Line Question Option : No Option Orientation : Vertical

Who among the following is the current sports and youth affairs minister of Haryana?

Options :

1. ✗ Ram Bilas Sharma

2. ✗ Captain Abhimanyu

3. ✓ Anil Vij

4. ✗ Om Prakash Dhankar

Question Number : 7 Question Id : 168000507 Display Question Number : Yes Single Line Question Option : No Option Orientation : Vertical

हरियाणा के वर्तमान खेल और युवा मामलों के मंत्री निम्नलिखित में से कौन हैं?

Options :

1. ✗ राम बिलास शर्मा

2. ✗ कैप्टन अभिमन्यु

3. ✓ अनिल विज

4. ✗ ओम प्रकाश धनकर

Question Number : 8 Question Id : 168000508 Display Question Number : Yes Single Line Question Option : No Option
Orientation : Vertical

What is name of the wrestling competition being held as a part of the Haryana Swarn Jayanti Utsav celebrations?

Options :

1. ✓ Bharat Kesari Dangal
2. ✗ Haryana Sresth Balwan
3. ✗ Mitti ka Sher Pratiyogita
4. ✗ Bharat Freestyle Kushti

Question Number : 8 Question Id : 168000508 Display Question Number : Yes Single Line Question Option : No Option
Orientation : Vertical

हरियाणा स्वर्ण जयंती उत्सव समारोह के तहत आयोजित की गई कुश्ती प्रतियोगिता का नाम क्या है?

Options :

1. ✓ भारत केसरी दंगल
2. ✗ हरियाणा श्रेष्ठ बलवान
3. ✗ मिट्टी का शेर प्रतियोगिता
4. ✗ भारत फ्रीस्टाइल कुश्ती

Question Number : 9 Question Id : 168000509 Display Question Number : Yes Single Line Question Option : No Option
Orientation : Vertical

Who is the author of the book 'Gharounde Ret Ke'?

Options :

1. ✓ Roop Narayan Chandana
2. ✗ Parveen Sethi
3. ✗ Himmat Singh
4. ✗ Om Parkash Panwar

Question Number : 9 Question Id : 168000509 Display Question Number : Yes Single Line Question Option : No Option
Orientation : Vertical

'घरौंदे रेत के' नामक पुस्तक के लेखक कौन हैं?

Options :

1. ✓ रूप नारायण चंदना
2. ✗ प्रवीण सेठी
3. ✗ हिम्मत सिंह
4. ✗ ओम प्रकाश पंवार

Question Number : 10 Question Id : 168000510 Display Question Number : Yes Single Line Question Option : No Option Orientation : Vertical

“Bal Geetanjali” was written by:

Options :

1. ✗ Ranjeet Verma
2. ✗ Subhash Rashtogi
3. ✓ Ghamandi Lal Agarwal
4. ✗ K. P. Singh

Question Number : 10 Question Id : 168000510 Display Question Number : Yes Single Line Question Option : No Option Orientation : Vertical

“बाल गीतांजलि” के लेखक हैं:

Options :

1. ✗ रंजीत वर्मा
2. ✗ सुभाष रस्तोगी
3. ✓ घमंडी लाल अग्रवाल
4. ✗ के. पी. सिंह

Question Number : 11 Question Id : 168000511 Display Question Number : Yes Single Line Question Option : No Option Orientation : Vertical

Who among the following is the author of “Naya Rang”?

Options :

1. ✓ Anita

2. ✘ Pawan Choudhari 'Manmouji'

3. ✘ Amrit Lal Madan

4. ✘ Ranjeet Verma

Question Number : 11 Question Id : 168000511 Display Question Number : Yes Single Line Question Option : No Option Orientation : Vertical

निम्नलिखित में से 'नया रंग' के लेखक कौन हैं?

Options :

1. ✔ अनीता

2. ✘ पवन चौधरी 'मनमौजी'

3. ✘ अमृत लाल मदान

4. ✘ रंजीत वर्मा

Question Number : 12 Question Id : 168000512 Display Question Number : Yes Single Line Question Option : No Option Orientation : Vertical

National Highway 10 (renumbered National Highway 9) runs between Delhi and _____.

Options :

1. ✘ Ambala

2. ✔ Fazilka

3. ✘ Panipat

4. ✘ Pinjore

Question Number : 12 Question Id : 168000512 Display Question Number : Yes Single Line Question Option : No Option Orientation : Vertical

राष्ट्रीय राजमार्ग 10 (पुनःक्रमबद्ध राष्ट्रीय राजमार्ग 9) दिल्ली और _____ को जोड़ता है।

Options :

1. ✘ अंबाला

2. ✔ फाजिल्का

3. ✘ पानीपत

4. ✘ पिंजौर

Question Number : 13 Question Id : 168000513 Display Question Number : Yes Single Line Question Option : No Option Orientation : Vertical

Which river of Haryana originates from the lower Shivalik Hills?

Options :

1. ✘ Sahibi River

2. ✘ Yamuna River

3. ✘ Saraswati River

4. ✔ Markanda River

Question Number : 13 Question Id : 168000513 Display Question Number : Yes Single Line Question Option : No Option Orientation : Vertical

कौन-सी नदी हरियाणा की शिवालिक पहाड़ियों के निचले भाग से निकलती है?

Options :

1. ✘ साहिबी नदी

2. ✘ यमुना नदी

3. ✘ सरस्वती नदी

4. ✔ मारकंडा नदी

Question Number : 14 Question Id : 168000514 Display Question Number : Yes Single Line Question Option : No Option Orientation : Vertical

Which is the smallest district of Haryana?

Options :

1. ✘ Palwal

2. ✘ Sonapat

3. ✔ Panchkula

4. ✘ Kaithal

Question Number : 14 Question Id : 168000514 Display Question Number : Yes Single Line Question Option : No Option Orientation : Vertical

हरियाणा का सबसे छोटा जिला कौन-सा है?

Options :

1. ✘ पलवल
2. ✘ सोनीपत
3. ✔ पंचकुला
4. ✘ कैथल

Question Number : 15 Question Id : 168000515 Display Question Number : Yes Single Line Question Option : No Option Orientation : Vertical

Third time President's rule was imposed in the state of Haryana from:

Options :

1. ✘ 17/07/1990 to 22/03/1991
2. ✔ 06/04/1991 to 23/07/1991
3. ✘ 24/06/1999 to 01/03/2000
4. ✘ 02/03/2000 to 04/03/2001

Question Number : 15 Question Id : 168000515 Display Question Number : Yes Single Line Question Option : No Option Orientation : Vertical

हरियाणा राज्य में तीसरी बार राष्ट्रपति शासन कब लागू किया गया था?

Options :

1. ✘ 17/07/1990 से 22/03/1991
2. ✔ 06/04/1991 से 23/07/1991
3. ✘ 24/06/1999 से 01/03/2000
4. ✘ 02/03/2000 से 04/03/2001

Question Number : 16 Question Id : 168000516 Display Question Number : Yes Single Line Question Option : No Option Orientation : Vertical

In the recently held elections for Rajya Sabha seats in Haryana, how many votes of the Congress were declared invalid?

Options :

1. ✘ 10

2. ✘ 12

3. ✔ 14

4. ✘ 16

Question Number : 16 Question Id : 168000516 Display Question Number : Yes Single Line Question Option : No Option Orientation : Vertical

हाल ही में हरियाणा में राज्यसभा की सीटों के लिए हुए चुनाव में कांग्रेस के कितने वोट अमान्य घोषित किए गए थे?

Options :

1. ✘ 10

2. ✘ 12

3. ✔ 14

4. ✘ 16

Question Number : 17 Question Id : 168000517 Display Question Number : Yes Single Line Question Option : No Option Orientation : Vertical

Who is the MLA from the famous Panchkula seat?

Options :

1. ✘ Anand Singh Dangi

2. ✘ Randeep Singh Surjewala

3. ✘ Captain Abhimanyu

4. ✔ Gian Chand Gupta

Question Number : 17 Question Id : 168000517 Display Question Number : Yes Single Line Question Option : No Option Orientation : Vertical

प्रसिद्ध पंचकुला सीट से विधायक कौन है?

Options :

1. ✘ आनंद सिंह डांगी

2. ✘ रणदीप सिंह सुरजेवाला

3. ✘ कैप्टन अभिमन्यु

4. ✔ ज्ञान चंद गुप्ता

Question Number : 18 Question Id : 168000518 Display Question Number : Yes Single Line Question Option : No Option Orientation : Vertical

Bansi Lal formed the _____ in 1996 after quitting the Congress party.

Options :

1. ✘ Haryana Janhit Congress Party

2. ✘ Indian National Lok Dal Party

3. ✔ Haryana Vikas Party

4. ✘ Bharatiya Lok Dal Party

Question Number : 18 Question Id : 168000518 Display Question Number : Yes Single Line Question Option : No Option Orientation : Vertical

कांग्रेस पार्टी को छोड़ने के बाद 1996 में बंसी लाल ने _____ का गठन किया था।

Options :

1. ✘ हरियाणा जनहित कांग्रेस पार्टी

2. ✘ इंडियन नेशनल लोक दल पार्टी

3. ✔ हरियाणा विकास पार्टी

4. ✘ भारतीय लोक दल पार्टी

Question Number : 19 Question Id : 168000519 Display Question Number : Yes Single Line Question Option : No Option Orientation : Vertical

The Deenbandhu Chhotu Ram Power Plant, which is located at Yamunanagar, generates which of the following types of power?

Options :

1. ✔ Thermal

2. ✘ Hydel

3. ✘ Nuclear

4. ✘ Solar

Question Number : 19 Question Id : 168000519 Display Question Number : Yes Single Line Question Option : No Option Orientation : Vertical

यमुनानगर में स्थित दीनबंधु छोटूराम पावर प्लांट निम्नलिखित में से किस प्रकार के विद्युत का निर्माण करता है?

Options :

1. ✔ तापीय

2. ✘ जल विद्युत

3. ✘ नाभिकीय

4. ✘ सौर

Question Number : 20 Question Id : 168000520 Display Question Number : Yes Single Line Question Option : No Option Orientation : Vertical

The Bombay Natural History Society has set up 'Vulture Conservation Breeding Centre' in collaboration with the Forest Department of Haryana near _____.

Options :

1. ✔ Pinjore

2. ✘ Yamunanagar

3. ✘ Rewari

4. ✘ Rohtak

Question Number : 20 Question Id : 168000520 Display Question Number : Yes Single Line Question Option : No Option Orientation : Vertical

बॉम्बे नेचुरल हिस्ट्री सोसाइटी ने _____ के पास हरियाणा के वन विभाग के सहयोग से 'गिद्ध संरक्षण प्रजनन केंद्र' की स्थापना की है।

Options :

1. ✔ पिंजौर

2. ✘ यमुनानगर

3. ✘ रेवाड़ी

4. ✘ रोहतक

Question Number : 21 Question Id : 168000521 Display Question Number : Yes Single Line Question Option : No Option Orientation : Vertical

Arrange the following districts in the descending order of their population:

1. Ambala
2. Kurukshetra
3. Hisar
4. Panchkula
5. Gurugram

Options :

1. ✔ 3, 5, 1, 2, 4

2. ✘ 5, 3, 1, 2, 4

3. ✘ 3, 2, 5, 1, 4

4. ✘ 5, 2, 3, 4, 1

Question Number : 21 Question Id : 168000521 Display Question Number : Yes Single Line Question Option : No Option Orientation : Vertical

निम्नलिखित जिलों को उनकी आबादी के अवरोही क्रम में व्यवस्थित करें।

1. अंबाला
2. कुरुक्षेत्र
3. हिसार
4. पंचकुला
5. गुरुग्राम

Options :

1. ✔ 3, 5, 1, 2, 4

2. ✘ 5, 3, 1, 2, 4

3. ✘ 3, 2, 5, 1, 4

4. ✘ 5, 2, 3, 4, 1

Question Number : 22 Question Id : 168000522 Display Question Number : Yes Single Line Question Option : No Option Orientation : Vertical

Saraswati Tirath in Pehowa is famous for its association with:

Options :

1. ✘ The worship of snakes
2. ✘ The Mango Fair
3. ✘ Demonstration of crafts
4. ✔ Pind Daan or offering made to the departed souls

Question Number : 22 Question Id : 168000522 Display Question Number : Yes Single Line Question Option : No Option Orientation : Vertical

पेहवा में सरस्वती तीर्थ इनसे संबंधित होने के कारण प्रसिद्ध है:

Options :

1. ✘ सांपों की पूजा
2. ✘ आम मेला
3. ✘ शिल्प प्रदर्शनी
4. ✔ दिवंगत आत्माओं को पिंड दान करना या उन्हें आहुति देना

Question Number : 23 Question Id : 168000523 Display Question Number : Yes Single Line Question Option : No Option Orientation : Vertical

In Haryana, the Chaitra Chaudas Mela is held on the banks of:

Options :

1. ✘ Yayati Tirtha
2. ✘ Havya Tirtha
3. ✔ Saraswati Tirtha
4. ✘ Varaha Tirtha

Question Number : 23 Question Id : 168000523 Display Question Number : Yes Single Line Question Option : No Option Orientation : Vertical

हरियाणा में, चैत्र चौदस मेला इसके तट पर आयोजित होता है:

Options :

1. ✘ ययाति तीर्थ
2. ✘ हव्या तीर्थ
3. ✔ सरस्वती तीर्थ
4. ✘ वराहा तीर्थ

Question Number : 24 Question Id : 168000524 Display Question Number : Yes Single Line Question Option : No Option Orientation : Vertical

According to legend, at which place of Haryana did the Pandavas perform the rituals of 'Jal Tarpan' and 'Pind Dan' for the peace of souls of those killed in the Mahabharata war?

Options :

1. ✔ Pehowa
2. ✘ Devsar
3. ✘ Burhara
4. ✘ Pindara

Question Number : 24 Question Id : 168000524 Display Question Number : Yes Single Line Question Option : No Option Orientation : Vertical

पौराणिक कथाओं के अनुसार, महाभारत युद्ध में मारे गए लोगों की शांति के लिए हरियाणा के किस स्थान पर पांडवों ने 'जल तर्पण' और 'पिंड दान' किया था?

Options :

1. ✔ पेहवा
2. ✘ देवसर
3. ✘ बुर्हरा
4. ✘ पिंडारा

Question Number : 25 Question Id : 168000525 Display Question Number : Yes Single Line Question Option : No Option Orientation : Vertical

Asvini Kumara Tirtha is located in which district of Haryana?

Options :

1. ✘ Mewat
2. ✔ Jind
3. ✘ Bhiwani
4. ✘ Gurgaon

Question Number : 25 Question Id : 168000525 Display Question Number : Yes Single Line Question Option : No Option Orientation : Vertical

अश्विनी कुमार तीर्थ हरियाणा के किस जिले में स्थित है?

Options :

1. ✘ मेवात
2. ✔ जींद
3. ✘ भिवानी
4. ✘ गुडगांव

Question Number : 26 Question Id : 168000526 Display Question Number : Yes Single Line Question Option : No Option Orientation : Vertical

With regard to shorthand, the consonants are divided into _____ groups.

Options :

1. ✘ 4
2. ✘ 5
3. ✔ 6
4. ✘ 7

Question Number : 26 Question Id : 168000526 Display Question Number : Yes Single Line Question Option : No Option Orientation : Vertical

With regard to shorthand, the consonants are divided into _____ groups.

Options :

1. ✘ 4

2. ✘ 5

3. ✔ 6

4. ✘ 7

Question Number : 27 Question Id : 168000527 Display Question Number : Yes Single Line Question Option : No Option Orientation : Vertical

How many diphthongs are there in Pitman Shorthand?

Options :

1. ✔ 2

2. ✘ 3

3. ✘ 4

4. ✘ 5

Question Number : 27 Question Id : 168000527 Display Question Number : Yes Single Line Question Option : No Option Orientation : Vertical

How many diphthongs are there in Pitman Shorthand?

Options :

1. ✔ 2

2. ✘ 3

3. ✘ 4

4. ✘ 5

Question Number : 28 Question Id : 168000528 Display Question Number : Yes Single Line Question Option : No Option Orientation : Vertical

How many types of 'H' are present in Pitman Shorthand?

Options :

1. ✘ 1

2. ✘ 2

3. ✘ 3

4. ✔ 4

Question Number : 28 Question Id : 168000528 Display Question Number : Yes Single Line Question Option : No Option Orientation : Vertical

How many types of 'H' are present in Pitman Shorthand?

Options :

1. ✘ 1

2. ✘ 2

3. ✘ 3

4. ✔ 4

Question Number : 29 Question Id : 168000529 Display Question Number : Yes Single Line Question Option : No Option Orientation : Vertical

The position of an outline is governed by the _____ sounded vowel in the word.

Options :

1. ✘ last

2. ✘ second

3. ✔ first

4. ✘ fourth

Question Number : 29 Question Id : 168000529 Display Question Number : Yes Single Line Question Option : No Option Orientation : Vertical

The position of an outline is governed by the _____ sounded vowel in the word.

Options :

1. ✘ last

2. ✘ second

3. ✔ first

4. ✘ fourth

Question Number : 30 Question Id : 168000530 Display Question Number : Yes Single Line Question Option : No Option Orientation : Vertical

The liquids flow into union with other consonants and form _____ consonants.

Options :

1. ✘ single

2. ✓ double

3. ✗ triple

4. ✗ four

Question Number : 30 Question Id : 168000530 Display Question Number : Yes Single Line Question Option : No Option Orientation : Vertical

The liquids flow into union with other consonants and form _____ consonants.

Options :

1. ✗ single

2. ✓ double

3. ✗ triple

4. ✗ four

Question Number : 31 Question Id : 168000531 Display Question Number : Yes Single Line Question Option : No Option Orientation : Vertical

The Diphthong is a union of _____ vowel(s).

Options :

1. ✓ two

2. ✗ five

3. ✗ three

4. ✗ four

Question Number : 31 Question Id : 168000531 Display Question Number : Yes Single Line Question Option : No Option Orientation : Vertical

The Diphthong is a union of _____ vowel(s).

Options :

1. ✓ two

2. ✗ five

3. ✗ three

4. ✘ four

Question Number : 32 Question Id : 168000532 Display Question Number : Yes Single Line Question Option : No Option Orientation : Vertical

A large initial circle represents the double consonant _____.

Options :

1. ✘ kwa

2. ✘ str

3. ✔ sw

4. ✘ shan

Question Number : 32 Question Id : 168000532 Display Question Number : Yes Single Line Question Option : No Option Orientation : Vertical

A large initial circle represents the double consonant _____.

Options :

1. ✘ kwa

2. ✘ str


3. ✔ sw

4. ✘ shan

Question Number : 33 Question Id : 168000533 Display Question Number : Yes Single Line Question Option : No Option Orientation : Vertical

Choose the correct outline for situation.

Options :

1. ✘ 

2. ✘ 


3. ✘ 

4. ✔ 

Question Number : 33 Question Id : 168000533 Display Question Number : Yes Single Line Question Option : No Option Orientation : Vertical

Choose the correct outline for situation.

Options :

1. ✘ 

2. ✘ 

3. ✘ 


4. ✔ 


Question Number : 34 Question Id : 168000534 Display Question Number : Yes Single Line Question Option : No Option Orientation : Vertical

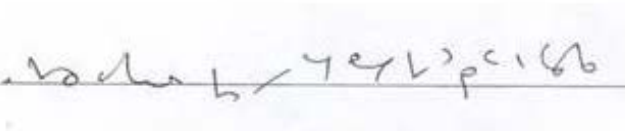
How to represent the below sentence in shorthand:


The premises we have now taken one in the central part of the city with all facilities

Options :

1. ✘ 

2. ✔ 

3. ✘ 

4. ✘ 

Question Number : 34 Question Id : 168000534 Display Question Number : Yes Single Line Question Option : No Option Orientation : Vertical

How to represent the below sentence in shorthand:

The premises we have now taken one in the central part of the city with all facilities

Options :

1. ✘

2. ✔

3. ✘

4. ✘

Question Number : 35 Question Id : 168000535 Display Question Number : Yes Single Line Question Option : No Option Orientation : Vertical

How to represent the below sentence in shorthand:

Thank you for your letter of the 4th instant forwarding cheque for thousand rupees.

Options :

1. ✘

2. ✘

3. ✘


4. ✔


Question Number : 35 Question Id : 168000535 Display Question Number : Yes Single Line Question Option : No Option Orientation : Vertical

How to represent the below sentence in shorthand:


Thank you for your letter of the 4th instant forwarding cheque for thousand rupees.

Options :

1. ✘ 

2. ✘ 

3. ✘ 


4. ✔ 

Question Number : 36 Question Id : 168000536 Display Question Number : Yes Single Line Question Option : No Option Orientation : Vertical

₹ : 'ध' व्यंजन का दूसरा प्रारूप बताएं?

A. 

B. 

C. 

D. 

Options :

1. ✘ A

2. ✘ B

3. ✘ C


4. ✓ D

Question Number : 36 Question Id : 168000536 Display Question Number : Yes Single Line Question Option : No Option Orientation : Vertical

₹. 'ध' व्यंजन का दूसरा प्रारूप बताएं?

A. 

B. 

C. 

D. 

Options :


1. ✗ A

2. ✗ B

3. ✗ C

4. ✓ D

Question Number : 37 Question Id : 168000537 Display Question Number : Yes Single Line Question Option : No Option Orientation : Vertical

 इस शब्द चिन्ह को पहचाने।

Options :

1. ✓ वे

2. ✗ से

3. ✗ वे

4. ✗ वे

Question Number : 37 Question Id : 168000537 Display Question Number : Yes Single Line Question Option : No Option Orientation : Vertical

इस शब्द चिन्ह को पहचाने।

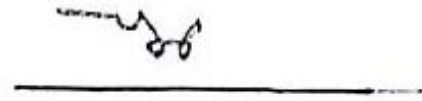
Options :

1. ✓ ने
2. ✗ से
3. ✗ वे
4. ✗ में


Question Number : 38 Question Id : 168000538 Display Question Number : Yes Single Line Question Option : No Option Orientation : Vertical

'क्या तुम बता सकते हो' इस वाक्यांश के लिए सही संकेत-लिपि पहचानें।

A. 

B. 

C. 

D. 

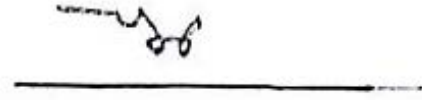
Options :

1. ✗ A
2. ✓ B
3. ✗ C
4. ✗ D


Question Number : 38 Question Id : 168000538 Display Question Number : Yes Single Line Question Option : No Option Orientation : Vertical

'क्या तुम बता सकते हो' इस वाक्यांश के लिए सही संकेत-लिपि पहचानें।

A. 

B. 

C. 

D. 

Options :


1. ✘ A

2. ✔ B

3. ✘ C

4. ✘ D

Question Number : 39 Question Id : 168000539 Display Question Number : Yes Single Line Question Option : No Option Orientation : Vertical

 इस शब्दांश को पहचाने।

Options :

1. ✘ वरन् गिरफ्तारी

2. ✘ वरना गिरफ्तारी

3. ✔ वारंट गिरफ्तारी

4. ✘ विरोध गिरफ्तारी

Question Number : 39 Question Id : 168000539 Display Question Number : Yes Single Line Question Option : No Option Orientation : Vertical

इस शब्दांश को पहचाने।

Options :

1. ✘ वरन् गिरफ्तारी
2. ✘ वरना गिरफ्तारी
3. ✔ वारंट गिरफ्तारी
4. ✘ विरोध गिरफ्तारी

Question Number : 40 Question Id : 168000540 Display Question Number : Yes Single Line Question Option : No Option Orientation : Vertical

साधारण व्यंजन को अर्ध्य करने के अनुसार 'प्रतिस्पर्धा' शब्द में किस व्यंजन को आधा कर देना चाहिए?

Options :

1. ✘ त
2. ✘ ध
3. ✘ स
4. ✔ प्र

Question Number : 40 Question Id : 168000540 Display Question Number : Yes Single Line Question Option : No Option Orientation : Vertical

साधारण व्यंजन को अर्ध्य करने के अनुसार 'प्रतिस्पर्धा' शब्द में किस व्यंजन को आधा कर देना चाहिए?

Options :

1. ✘ त
2. ✘ ध
3. ✘ स
4. ✔ प्र

Question Number : 41 Question Id : 168000541 Display Question Number : Yes Single Line Question Option : No Option Orientation : Vertical

शब्द में साधारण व्यंजन रेखा को दुगुना करने के अनुसार 'बदतर' में किस व्यंजन को बड़ा करते हैं?

Options :

1. ✘ ब
2. ✔ द
3. ✘ त
4. ✘ र

Question Number : 41 Question Id : 168000541 Display Question Number : Yes Single Line Question Option : No Option Orientation : Vertical

शब्द में साधारण व्यंजन रेखा को दुगुना करने के अनुसार 'बदतर' में किस व्यंजन को बड़ा करते हैं?

Options :

1. ✘ ब
2. ✔ द
3. ✘ त
4. ✘ र

Question Number : 42 Question Id : 168000542 Display Question Number : Yes Single Line Question Option : No Option Orientation : Vertical

किसी भी व्यंजन के पहले (.) बिन्दु आये तो क्या पढ़ा जाता है?

Options :

1. ✘ पन, तन, मन, धन
2. ✔ सम, सन, कन, कम
3. ✘ रन, चन, हन, फन
4. ✘ बन, लन, दन, गन

Question Number : 42 Question Id : 168000542 Display Question Number : Yes Single Line Question Option : No Option Orientation : Vertical

किसी भी व्यंजन के पहले (.) बिन्दु आये तो क्या पढ़ा जाता है?

Options :


1. ✘ पन, तन, मन, धन
2. ✔ सम, सन, कन, कम

3. ✘ रन, चन, हन, फन

4. ✘ बन, लन, दन, गन

Question Number : 43 Question Id : 168000543 Display Question Number : Yes Single Line Question Option : No Option Orientation : Vertical

पूर्ण नियमानुसार शब्दांश  (कतिपय) के दूसरे प्रारूप को पहचानें:

A. 

B. 

C. 

D. 

Options :

1. ✘ A

2. ✘ B

3. ✘ C

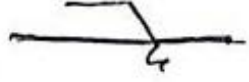
4. ✔ D


Question Number : 43 Question Id : 168000543 Display Question Number : Yes Single Line Question Option : No Option Orientation : Vertical

पूर्ण नियमानुसार शब्दांश  (कतिपय) के दूसरे प्रारूप को पहचानें:

A. 

B. 

C. 

D. 

Options :

1. ✘ A

2. ✘ B

3. ✘ C

4. ✔ D

Question Number : 44 Question Id : 168000544 Display Question Number : Yes Single Line Question Option : No Option Orientation : Vertical

हिन्दी शीघ्रलिपि में 'न' व्यंजन को काटने से क्या बनता है?

Options :

1. ✘ अंग

2. ✘ न्व

3. ✘ न्न

4. ✔ म

Question Number : 44 Question Id : 168000544 Display Question Number : Yes Single Line Question Option : No Option Orientation : Vertical

हिन्दी शीघ्रलिपि में 'न' व्यंजन को काटने से क्या बनता है?

Options :

1. ✘ अंग

2. ✘ न्व

3. ✘ न्न

4. ✔ म

Question Number : 45 Question Id : 168000545 Display Question Number : Yes Single Line Question Option : No Option Orientation : Vertical

पूर्ण नियमानुसार वाक्यांश  का सही हिन्दी रूपान्तर बताएँ।

Options :

1. ✔ कार्य करते रहना चाहिए

2. ✘ कार्य करते रहना चाहता है

3. ✘ कार्य होते रहना चाहिए

4. ✘ कार्य होते रहना चाहते हैं

Question Number : 45 Question Id : 168000545 Display Question Number : Yes Single Line Question Option : No Option Orientation : Vertical

पूर्ण नियमानुसार वाक्यांश  का सही हिन्दी रूपान्तर बताएँ।

Options :

1. ✔ कार्य करते रहना चाहिए

2. ✘ कार्य करते रहना चाहता है

3. ✘ कार्य होते रहना चाहिए

4. ✘ कार्य होते रहना चाहते हैं

Question Number : 46 Question Id : 168000546 Display Question Number : Yes Single Line Question Option : No Option Orientation : Vertical

Fill in the blanks in the sentence below with suitable articles. Select your answer from the options given:

Pyongyang said that it had tested _____ hydrogen bomb _____ device many times more powerful than _____ atomic bomb.

Options :

1. ✓ a, a, an
2. ✗ a, an, an
3. ✗ the, the, an
4. ✗ a, the, an

Question Number : 46 Question Id : 168000546 Display Question Number : Yes Single Line Question Option : No Option Orientation : Vertical

Fill in the blanks in the sentence below with suitable articles. Select your answer from the options given:

Pyongyang said that it had tested _____ hydrogen bomb _____ device many times more powerful than _____ atomic bomb.

Options :

1. ✓ a, a, an
2. ✗ a, an, an
3. ✗ the, the, an
4. ✗ a, the, an

Question Number : 47 Question Id : 168000547 Display Question Number : Yes Single Line Question Option : No Option Orientation : Vertical

Fill in the blanks in the sentence below with suitable articles. Select your answer from the options given:

_____ head of _____ International Atomic Energy Agency, the global nuclear watchdog, described _____ test as "_____ extremely regrettable act".

Options :

1. ✓ The, the, the, an
2. ✗ The, a, the, an
3. ✗ A, the, the, an
4. ✗ A, a, the, an

Question Number : 47 Question Id : 168000547 Display Question Number : Yes Single Line Question Option : No Option Orientation : Vertical

Fill in the blanks in the sentence below with suitable articles. Select your answer from the options given:

_____ head of _____ International Atomic Energy Agency, the global nuclear watchdog, described _____ test as "_____ extremely regrettable act".

Options :

1. ✓ The, the, the, an
2. ✗ The, a, the, an
3. ✗ A, the, the, an
4. ✗ A, a, the, an

Question Number : 48 Question Id : 168000548 Display Question Number : Yes Single Line Question Option : No Option Orientation : Vertical

Fill in the blank in the sentence below with a suitable modal verb. Select your answer from the options given:

North Korea says that it has successfully tested a nuclear weapon that _____ be loaded on to a long-range missile.

Options :

1. ✓ could
2. ✗ should
3. ✗ might
4. ✗ would

Question Number : 48 Question Id : 168000548 Display Question Number : Yes Single Line Question Option : No Option Orientation : Vertical

Fill in the blank in the sentence below with a suitable modal verb. Select your answer from the options given:

North Korea says that it has successfully tested a nuclear weapon that _____ be loaded on to a long-range missile.

Options :

1. ✓ could
2. ✗ should
3. ✗ might
4. ✗ would

Question Number : 49 Question Id : 168000549 Display Question Number : Yes Single Line Question Option : No Option Orientation : Vertical

Read the sentence given below and fill in the blank with a collective noun, select your answer from the options given below:

I have _____ of tasks on my desk which I have to complete before I leave office.

Options :

1. ✓ an agenda
2. ✗ a heap
3. ✗ a clutter
4. ✗ a battery

Question Number : 49 Question Id : 168000549 Display Question Number : Yes Single Line Question Option : No Option Orientation : Vertical

Read the sentence given below and fill in the blank with a collective noun, select your answer from the options given below:

I have _____ of tasks on my desk which I have to complete before I leave office.

Options :

1. ✓ an agenda
2. ✗ a heap
3. ✗ a clutter
4. ✗ a battery

Question Number : 50 Question Id : 168000550 Display Question Number : Yes Single Line Question Option : No Option Orientation : Vertical

The passage below has been given in four parts as options. One of the parts contains an error. Select the option that has the error:

Options :

1. ✗ The country's elite team of rescuers, known as "the moles",
2. ✗ are leading the volunteer rescue efforts.
3. ✗ The group was formed in the wake of the devastating 1985 earthquake
4. ✓ who killed up to 10,000 people.

Question Number : 50 Question Id : 168000550 Display Question Number : Yes Single Line Question Option : No Option Orientation : Vertical

The passage below has been given in four parts as options. One of the parts contains an error. Select the option that has the error:

Options :

1. ✘ The country's elite team of rescuers, known as "the moles",
2. ✘ are leading the volunteer rescue efforts.
3. ✘ The group was formed in the wake of the devastating 1985 earthquake
4. ✔ who killed up to 10,000 people.

Question Number : 51 Question Id : 168000551 Display Question Number : Yes Single Line Question Option : No Option Orientation : Vertical

From the options given below select the one that has the correct spelling of the highlighted word:

Options :

1. ✘
Previous studies of **Neonderthal** remains indicated that they developed more quickly than modern humans - suggesting that their brains might be less sophisticated.
2. ✘
Previous studies of **Naendertheal** remains indicated that they developed more quickly than modern humans - suggesting that their brains might be less sophisticated.
3. ✔
Previous studies of **Neanderthal** remains indicated that they developed more quickly than modern humans - suggesting that their brains might be less sophisticated.
4. ✘
Previous studies of **Nianderthal** remains indicated that they developed more quickly than modern humans - suggesting that their brains might be less sophisticated.

Question Number : 51 Question Id : 168000551 Display Question Number : Yes Single Line Question Option : No Option Orientation : Vertical

From the options given below select the one that has the correct spelling of the highlighted word:

Options :

1. ✘
Previous studies of **Neonderthal** remains indicated that they developed more quickly than modern humans - suggesting that their brains might be less sophisticated.
2. ✘
Previous studies of **Naendertheal** remains indicated that they developed more quickly than modern humans - suggesting that their brains might be less sophisticated.
3. ✔
Previous studies of **Neanderthal** remains indicated that they developed more quickly than modern humans - suggesting that their brains might be less sophisticated.

4. ✘

Previous studies of **Nianderthal** remains indicated that they developed more quickly than modern humans - suggesting that their brains might be less sophisticated.

Question Number : 52 Question Id : 168000552 Display Question Number : Yes Single Line Question Option : No Option Orientation : Vertical

Select the option that offers the correct synonym of the highlighted word in the sentence given below. Pay attention to the meaning of the highlighted word **in the context of the sentence**:

Due to the earthquake some buildings were severely damaged and a bridge had collapsed in the **state**.

Options :

1. ✔ region

2. ✘ environment

3. ✘ testify

4. ✘ proclaim

Question Number : 52 Question Id : 168000552 Display Question Number : Yes Single Line Question Option : No Option Orientation : Vertical

Select the option that offers the correct synonym of the highlighted word in the sentence given below. Pay attention to the meaning of the highlighted word **in the context of the sentence**:

Due to the earthquake some buildings were severely damaged and a bridge had collapsed in the **state**.

Options :

1. ✔ region

2. ✘ environment

3. ✘ testify

4. ✘ proclaim

Question Number : 53 Question Id : 168000553 Display Question Number : Yes Single Line Question Option : No Option Orientation : Vertical

Select the option that offers the correct antonym of the highlighted word in the sentence given below. Pay attention to the meaning of the highlighted word **in the context of the sentence**:

Last evening I trotted through the narrow streets, making my way through **rubble** and debris to the park in the center of the city.

Options :

1. ✔ building

2. ✘ development

3. ✘ scree

4. ✘ brash

Question Number : 53 Question Id : 168000553 Display Question Number : Yes Single Line Question Option : No Option Orientation : Vertical

*Select the option that offers the correct antonym of the highlighted word in the sentence given below. Pay attention to the meaning of the highlighted word **in the context of the sentence**:*

Last evening I trotted through the narrow streets, making my way through **rubble** and debris to the park in the center of the city.

Options :

1. ✔ building

2. ✘ development

3. ✘ scree

4. ✘ brash

Question Number : 54 Question Id : 168000554 Display Question Number : Yes Single Line Question Option : No Option Orientation : Vertical

From the options given below select the one that can be used as preposition to fill in the blanks in the given sentence:

A strong tremor _____ southern Mexico temporarily suspended the search _____ survivors _____ this week's powerful earthquake _____ the capital, Mexico City.

Options :

1. ✔ in, for, of, in

2. ✘ of, for, of, in

3. ✘ in, for, off, in

4. ✘ in, with, of, on

Question Number : 54 Question Id : 168000554 Display Question Number : Yes Single Line Question Option : No Option Orientation : Vertical

From the options given below select the one that can be used as preposition to fill in the blanks in the given sentence:

A strong tremor _____ southern Mexico temporarily suspended the search _____ survivors _____ this week's powerful earthquake _____ the capital, Mexico City.

Options :

1. ✔ in, for, of, in

2. ✘ of, for, of, in
3. ✘ in, for, off, in
4. ✘ in, with, of, on

Question Number : 55 Question Id : 168000555 Display Question Number : Yes Single Line Question Option : No Option Orientation : Vertical

From the options given below select the one that has the prepositions placed correctly to form a proper sentence:

Options :

1. ✘
Shipments for food, water and generators are starting to arrive in the main port in San Juan, which has reopened.
2. ✘
Shipments of food, water and generators are starting to arrive into the main port on San Juan, which has reopened.
3. ✘
Shipments of food, water and generators are starting to arrive for the main port in San Juan, which has reopened.
4. ✔
Shipments of food, water and generators are starting to arrive at the main port in San Juan, which has reopened.

Question Number : 55 Question Id : 168000555 Display Question Number : Yes Single Line Question Option : No Option Orientation : Vertical

From the options given below select the one that has the prepositions placed correctly to form a proper sentence:

Options :

1. ✘
Shipments for food, water and generators are starting to arrive in the main port in San Juan, which has reopened.
2. ✘
Shipments of food, water and generators are starting to arrive into the main port on San Juan, which has reopened.
3. ✘
Shipments of food, water and generators are starting to arrive for the main port in San Juan, which has reopened.
4. ✔
Shipments of food, water and generators are starting to arrive at the main port in San Juan, which has reopened.

Question Number : 56 Question Id : 168000556 Display Question Number : Yes Single Line Question Option : No Option Orientation : Vertical

‘उपयुक्त’ शब्द में संधि है:

Options :

1. ✘ गुण संधि
2. ✘ व्यंजन संधि
3. ✔ यण् संधि
4. ✘ वृद्धि संधि

Question Number : 56 Question Id : 168000556 Display Question Number : Yes Single Line Question Option : No Option Orientation : Vertical

‘उपयुक्त’ शब्द में संधि है:

Options :

1. ✘ गुण संधि
2. ✘ व्यंजन संधि
3. ✔ यण् संधि
4. ✘ वृद्धि संधि

Question Number : 57 Question Id : 168000557 Display Question Number : Yes Single Line Question Option : No Option Orientation : Vertical

‘यथासंभव’ शब्द में समास है:

Options :

1. ✔ अव्ययी भाव
2. ✘ तत्पुरुष
3. ✘ बहुब्रीहि
4. ✘ द्वंद्व

Question Number : 57 Question Id : 168000557 Display Question Number : Yes Single Line Question Option : No Option Orientation : Vertical

‘यथासंभव’ शब्द में समास है:

Options :

1. ✓ अट्ययी भाव
2. ✘ तत्पुरुष
3. ✘ बहुब्रीहि
4. ✘ द्वंद्व

Question Number : 58 Question Id : 168000558 Display Question Number : Yes Single Line Question Option : No Option Orientation : Vertical

‘इतिहास को जानने वाला’ वाक्यांश के लिए एक शब्द होगा:

Options :

1. ✘ ऐतिहासिक
2. ✘ इतिहासकर
3. ✘ इतिहासविद
4. ✓ इतिहासज्ञ

Question Number : 58 Question Id : 168000558 Display Question Number : Yes Single Line Question Option : No Option Orientation : Vertical

‘इतिहास को जानने वाला’ वाक्यांश के लिए एक शब्द होगा:

Options :

1. ✘ ऐतिहासिक
2. ✘ इतिहासकर
3. ✘ इतिहासविद
4. ✓ इतिहासज्ञ

Question Number : 59 Question Id : 168000559 Display Question Number : Yes Single Line Question Option : No Option Orientation : Vertical

‘दुष्ट’ शब्द का पर्यायवाची नहीं है:

Options :

1. ✘ खल
2. ✔ अमानव
3. ✘ दुर्जन
4. ✘ धूर्त

Question Number : 59 Question Id : 168000559 Display Question Number : Yes Single Line Question Option : No Option Orientation : Vertical

'दुष्ट' शब्द का पर्यायवाची नहीं है:

Options :

1. ✘ खल
2. ✔ अमानव
3. ✘ दुर्जन
4. ✘ धूर्त

Question Number : 60 Question Id : 168000560 Display Question Number : Yes Single Line Question Option : No Option Orientation : Vertical

कौन-से शब्द की वर्तनी अशुद्ध है?

Options :

1. ✘ आकस्मिक
2. ✔ तदोपरांत
3. ✘ निर्धन
4. ✘ अष्ट

Question Number : 60 Question Id : 168000560 Display Question Number : Yes Single Line Question Option : No Option Orientation : Vertical

कौन-से शब्द की वर्तनी अशुद्ध है?

Options :

1. ✘ आकस्मिक

2. ✓ तदोपरांत

3. ✗ निर्धन

4. ✗ अष्ट

Question Number : 61 Question Id : 168000561 Display Question Number : Yes Single Line Question Option : No Option Orientation : Vertical

‘देव’ शब्द का विलोम होता है:

Options :

1. ✗ सुर

2. ✗ मानव

3. ✓ दानव

4. ✗ अजर

Question Number : 61 Question Id : 168000561 Display Question Number : Yes Single Line Question Option : No Option Orientation : Vertical

‘देव’ शब्द का विलोम होता है:

Options :

1. ✗ सुर

2. ✗ मानव

3. ✓ दानव

4. ✗ अजर

Question Number : 62 Question Id : 168000562 Display Question Number : Yes Single Line Question Option : No Option Orientation : Vertical

कौन-सा शब्द तत्सम है?

Options :

1. ✗ भगत

2. ✗ प्यासा

3. ✓ शिक्षा

4. ✘ भाई

Question Number : 62 Question Id : 168000562 Display Question Number : Yes Single Line Question Option : No Option Orientation : Vertical

कौन-सा शब्द तत्सम है?

Options :

1. ✘ भगत

2. ✘ प्यासा

3. ✔ शिक्षा

4. ✘ भाई

Question Number : 63 Question Id : 168000563 Display Question Number : Yes Single Line Question Option : No Option Orientation : Vertical

'जी ललचाना' का लिए मुहावरा है:

Options :

1. ✔ मुँह में पानी आना

2. ✘ मुँह लगना

3. ✘ मुँह की खाना

4. ✘ मुँह फुलाना

Question Number : 63 Question Id : 168000563 Display Question Number : Yes Single Line Question Option : No Option Orientation : Vertical

'जी ललचाना' का लिए मुहावरा है:

Options :

1. ✔ मुँह में पानी आना

2. ✘ मुँह लगना

3. ✘ मुँह की खाना

4. ✘ मुँह फुलाना

Question Number : 64 Question Id : 168000564 Display Question Number : Yes Single Line Question Option : No Option Orientation : Vertical

कौन-सा शब्द तद्भव है?

Options :

1. ✘ पद

2. ✘ गति

3. ✘ स्वर

4. ✔ मुँह

Question Number : 64 Question Id : 168000564 Display Question Number : Yes Single Line Question Option : No Option Orientation : Vertical

कौन-सा शब्द तद्भव है?

Options :

1. ✘ पद

2. ✘ गति

3. ✘ स्वर

4. ✔ मुँह

Question Number : 65 Question Id : 168000565 Display Question Number : Yes Single Line Question Option : No Option Orientation : Vertical

'आकाश' शब्द का अर्थ नहीं है:

Options :

1. ✘ व्योम

2. ✘ गगन

3. ✘ शून्य

4. ✔ धरा

Question Number : 65 Question Id : 168000565 Display Question Number : Yes Single Line Question Option : No Option Orientation : Vertical

'आकाश' शब्द का अर्थ नहीं है:

Options :

1. ✘ व्योम
2. ✘ गगन
3. ✘ शून्य
4. ✔ धरा

Question Number : 66 Question Id : 168000566 Display Question Number : Yes Single Line Question Option : No Option Orientation : Vertical

If $w = -2, x = 3, y = 0$ and $z = -\frac{1}{2}$, then $\frac{yz - xw}{xz - w} = ?$

Options :

1. ✘ -12
2. ✘ 14
3. ✔ 12
4. ✘ -14

Question Number : 66 Question Id : 168000566 Display Question Number : Yes Single Line Question Option : No Option Orientation : Vertical

यदि $w = -2, x = 3, y = 0$ और $z = -\frac{1}{2}$ है, तो $\frac{yz - xw}{xz - w} = ?$

Options :

1. ✘ -12
2. ✘ 14
3. ✔ 12
4. ✘ -14

Question Number : 67 Question Id : 168000567 Display Question Number : Yes Single Line Question Option : No Option Orientation : Vertical

In a circus show, due to decrease in crowd, the 1st day, 2nd day and 3rd day show tickets were sold at \$ 15, \$ 7.5 and \$ 2.5 respectively. The total strength of visitors in these 3 days were in ratio 2 : 5 : 13 respectively. For the whole show, the average charge per visitor is:

Options :

1. ✘ \$ 5.5
2. ✔ \$ 5
3. ✘ \$ 4.5
4. ✘ \$ 6

Question Number : 67 Question Id : 168000567 Display Question Number : Yes Single Line Question Option : No Option Orientation : Vertical

एक सर्कस में दर्शकों में कमी होने के कारण पहले दिन, दूसरे दिन और तीसरे दिन शो टिकटें क्रमशः \$ 15, \$ 7.5 और \$ 2.5 पर बेची गयी थी। इन तीन दिनों के दौरान दर्शकों की कुल संख्या का अनुपात क्रमशः 2 : 5 : 13 था। पूरे शो के लिए, औसत शुल्क प्रति दर्शक है:

Options :

1. ✘ \$ 5.5
2. ✔ \$ 5
3. ✘ \$ 4.5
4. ✘ \$ 6

Question Number : 68 Question Id : 168000568 Display Question Number : Yes Single Line Question Option : No Option Orientation : Vertical

A person deposits ₹ 2,000 in a bank which becomes ₹ 2,600 in 5 years at a certain rate of simple interest. If the rate is increased by 4%, then the amount after 5 years would have been:

Options :

1. ✘ ₹ 2,850
2. ✘ ₹ 2,950
3. ✘ ₹ 2,900
4. ✔ ₹ 3,000

Question Number : 68 Question Id : 168000568 Display Question Number : Yes Single Line Question Option : No Option Orientation : Vertical

एक व्यक्ति एक बैंक में ₹ 2,000 साधारण ब्याज की एक निश्चित दर पर जमा करता है, जो 5 वर्ष बाद ₹ 2,600 बन जाते हैं। यदि ब्याज की दर में 4% की वृद्धि की जाती है, तो 5 वर्ष बाद प्राप्त होने वाली धनराशि होगी:

Options :

1. ✘ ₹ 2,850
2. ✘ ₹ 2,950
3. ✘ ₹ 2,900
4. ✔ ₹ 3,000

Question Number : 69 Question Id : 168000569 Display Question Number : Yes Single Line Question Option : No Option Orientation : Vertical

A, B and C are three traders. A sells his goods such that it is 50% cheaper than B's goods but 50% costlier than C's goods. The cheapest among the three traders is:

Options :

1. ✘ A
2. ✘ B
3. ✔ C
4. ✘ All are equal

Question Number : 69 Question Id : 168000569 Display Question Number : Yes Single Line Question Option : No Option Orientation : Vertical

A, B और C तीन व्यापारी हैं। A अपनी वस्तुएं B की अपेक्षा 50% कम दाम पर बेचता है, लेकिन इसकी वस्तुएं C की वस्तुओं की अपेक्षा 50% महंगी होती हैं। तीनों व्यापारियों में सबसे सस्ती वस्तुएं किसकी हैं?

Options :

1. ✘ A
2. ✘ B
3. ✔ C
4. ✘ सभी बराबर हैं

Question Number : 70 Question Id : 168000570 Display Question Number : Yes Single Line Question Option : No Option Orientation : Vertical

Number of complex roots of the equation $x^2 - |3x| = 0$ is:

Options :

1. ✘ 4

2. ✘ 2

3. ✔ 0

4. ✘ 1

Question Number : 70 Question Id : 168000570 Display Question Number : Yes Single Line Question Option : No Option Orientation : Vertical

$x^2 - |3x| = 0$ समीकरण के सम्मिश्र मूलों की संख्या है:

Options :

1. ✘ 4

2. ✘ 2

3. ✔ 0

4. ✘ 1

Question Number : 71 Question Id : 168000571 Display Question Number : Yes Single Line Question Option : No Option Orientation : Vertical

An overhead tank has two holes. 1st and 2nd can empty the tank in 9 minutes and 6 minutes respectively. What will be the time taken to empty the tank if water leaks at a constant rate and both the holes are open together?

Options :

1. ✘ $3\frac{1}{5}$ minutes2. ✘ $3\frac{2}{5}$ minutes3. ✘ $3\frac{4}{5}$ minutes4. ✔ $3\frac{3}{5}$ minutes

Question Number : 71 Question Id : 168000571 Display Question Number : Yes Single Line Question Option : No Option Orientation : Vertical

एक ओवरहेड टैंक में दो छिद्र हैं। पहला और दूसरा छिद्र टैंक को क्रमशः 9 मिनट और 6 मिनट में खाली कर सकता है। यदि दोनों छिद्र एक साथ खोल दिये जाते हैं और पानी का रिसाव एक स्थिर दर पर होता है, तो टैंक को खाली होने में कितना समय लगेगा?

Options :

1. ✘ $3\frac{1}{5}$ मिनट

2. ✘ $3\frac{2}{5}$ मिनट

3. ✘ $3\frac{4}{5}$ मिनट

4. ✔ $3\frac{3}{5}$ मिनट

Question Number : 72 Question Id : 168000572 Display Question Number : Yes Single Line Question Option : No Option Orientation : Vertical

Train A, which is 120 m long, and train B, which is 280 m long, are moving towards each other in parallel lines at speeds of 45 km/hr and 30 km/hr respectively. The time taken to completely cross each other is:

Options :

1. ✘ 22.4 Sec

2. ✘ 20 Sec

3. ✘ 19 Sec

4. ✔ 19.2 Sec

Question Number : 72 Question Id : 168000572 Display Question Number : Yes Single Line Question Option : No Option Orientation : Vertical

रेल A, जो 120 मीटर लंबी है, और रेल B, जो 280 मीटर लंबी है, एक दूसरे की ओर समांतर लाइनों पर क्रमशः 45 किलोमीटर/घंटे और 30 किलोमीटर/घंटे की चाल से चल रही हैं। एक दूसरे को पार करने में दोनों के द्वारा लिया जाने वाला समय है:

Options :

1. ✘ 22.4 सेकंड

2. ✘ 20 सेकंड

3. ✘ 19 सेकंड

4. ✔ 19.2 सेकंड

Question Number : 73 Question Id : 168000573 Display Question Number : Yes Single Line Question Option : No Option Orientation : Vertical

Working 7 hours per day, 2 men and 3 women can complete a task in 5 days. Working 3 hours per day, 4 men and 4 women can complete the same task in 7 days. Then, working 4 hours per day, 7 men can complete the same task in:

Options :

1. ✓ 5 days
2. ✗ 4.5 days
3. ✗ 5.5 days
4. ✗ 6 days

Question Number : 73 Question Id : 168000573 Display Question Number : Yes Single Line Question Option : No Option Orientation : Vertical

2 पुरुष और 3 महिलाएं प्रतिदिन 7 घंटे कार्य करके एक कार्य को 5 दिन में पूरा कर सकते हैं। 4 पुरुष और 4 महिलाएं प्रतिदिन 3 घंटे कार्य करके उसी कार्य को 7 दिन में समाप्त कर सकते हैं। तो, 7 पुरुष प्रतिदिन 4 घंटे कार्य करके उसी कार्य को कितने दिन में समाप्त कर सकते हैं?

Options :

1. ✓ 5 दिन
2. ✗ 4.5 दिन
3. ✗ 5.5 दिन
4. ✗ 6 दिन

Question Number : 74 Question Id : 168000574 Display Question Number : Yes Single Line Question Option : No Option Orientation : Vertical

A mixture is made with liquid, 4 parts of which are water and 6 parts syrup. What part of the mixture must be taken and replaced with water so that the mixture contains half water and half syrup?

Options :

1. ✗ $\frac{1}{5}$
2. ✓ $\frac{1}{6}$
3. ✗ $\frac{1}{7}$
4. ✗ $\frac{1}{3}$

Question Number : 74 Question Id : 168000574 Display Question Number : Yes Single Line Question Option : No Option Orientation : Vertical

एक मिश्रण एक तरल से बनाया जाता है, जिसमें 4 भाग पानी और 6 भाग सिरप हैं। मिश्रण में से कितनी मात्रा को पानी से बदला जाना चाहिए ताकि मिश्रण में आधा पानी और आधा सिरप हो जाये?

Options :

1. ✘ $\frac{1}{5}$

2. ✔ $\frac{1}{6}$

3. ✘ $\frac{1}{7}$

4. ✘ $\frac{1}{3}$

Question Number : 75 Question Id : 168000575 Display Question Number : Yes Single Line Question Option : No Option Orientation : Vertical

Lekhya bought an article for ₹ 5,844. Due to some defects in it, she had pay ₹ 156 to a mechanic for its repair. Then, she sold it for ₹ 5,700. Her loss percent is:

Options :

1. ✘ 5.5

2. ✘ 2.46

3. ✔ 5

4. ✘ 2.5

Question Number : 75 Question Id : 168000575 Display Question Number : Yes Single Line Question Option : No Option Orientation : Vertical

लेख्या एक वस्तु को ₹ 5,844 में खरीदती है। इसमें कुछ खराबी होने के कारण, वह इसे रिपेयर कराने के लिए मेकैनिक को ₹ 156 का भुगतान करती है। फिर यह इसे ₹ 5,700 में बेच देती है। उसका हानि का प्रतिशत है:

Options :

1. ✘ 5.5

2. ✘ 2.46

3. ✔ 5

4. ✘ 2.5

Question Number : 76 Question Id : 168000576 Display Question Number : Yes Single Line Question Option : No Option Orientation : Vertical

A ball of 400 g starts moving in a straight line with a velocity of 4 m/s on a rough plane surface. Its velocity reduces to 1 m/s in 2 s. The decrease in its momentum is:

Options :

1. ✘ 0.4 kg m s⁻¹
2. ✘ 0.8 kg m s⁻¹
3. ✔ 1.2 kg m s⁻¹
4. ✘ 1.6 kg m s⁻¹

Question Number : 76 Question Id : 168000576 Display Question Number : Yes Single Line Question Option : No Option Orientation : Vertical

400 ग्राम की एक गेंद 4 मीटर/सेकंड के वेग से एक सीधी रेखा में खुरदुरे समतल पृष्ठ पर चलना शुरू करती है। इसका वेग 2 सेकंड में 1 मीटर/सेकंड कम हो जाता है। गेंद के संवेग में आने वाली कमी होगी:

Options :

1. ✘ 0.4 किलोग्राम मीटर सेकंड⁻¹
2. ✘ 0.8 किलोग्राम मीटर सेकंड⁻¹
3. ✔ 1.2 किलोग्राम मीटर सेकंड⁻¹
4. ✘ 1.6 किलोग्राम मीटर सेकंड⁻¹

Question Number : 77 Question Id : 168000577 Display Question Number : Yes Single Line Question Option : No Option Orientation : Vertical

A girl of mass 38 kg jumps with a horizontal velocity of 4 m/s onto a stationary cart of 2 kg free to move on a smooth plane surface. The magnitude of her velocity after the cart starts moving is:

Options :

1. ✘ 1.4 m/s
2. ✘ 2.8 m/s
3. ✔ 3.8 m/s
4. ✘ 5.2 m/s

Question Number : 77 Question Id : 168000577 Display Question Number : Yes Single Line Question Option : No Option Orientation : Vertical

38 किलोग्राम भार की एक लड़की 4 मीटर/सेकंड के क्षैतिज वेग से 2 किलोग्राम की एक स्थिर ठेलागाड़ी पर कूदती है जो एक चिकने समतल पृष्ठ पर चलने के लिए स्वतंत्र है। ठेलागाड़ी के चलने के बाद उसके वेग का परिमाण होगा:

Options :

1. ✘ 1.4 मीटर/सेकंड
2. ✘ 2.8 मीटर/सेकंड
3. ✔ 3.8 मीटर/सेकंड
4. ✘ 5.2 मीटर/सेकंड

Question Number : 78 Question Id : 168000578 Display Question Number : Yes Single Line Question Option : No Option Orientation : Vertical

A porter raises a box of 10 kg through a height of 1.5 m. During this process, the work done by force of gravity is:

Options :

1. ✔ -147 J
2. ✘ 147 J
3. ✘ -294 J
4. ✘ 294 J

Question Number : 78 Question Id : 168000578 Display Question Number : Yes Single Line Question Option : No Option Orientation : Vertical

एक कुली 10 किलोग्राम के एक डब्बे को 1.5 मीटर की ऊंचाई तक उठाता है। इस प्रक्रिया के दौरान, गुरुत्वाकर्षण बल द्वारा किया गया कार्य है:

Options :

1. ✔ -147 जूल
2. ✘ 147 जूल
3. ✘ -294 जूल
4. ✘ 294 जूल

Question Number : 79 Question Id : 168000579 Display Question Number : Yes Single Line Question Option : No Option Orientation : Vertical

Anjni of 30 kg runs up a flight of stairs in her school having a rise of 4 m in a time of 3.0 s. The rate of work done by her is:

Options :

1. ✘ 196 W
2. ✘ 240 W
3. ✔ 392 W
4. ✘ 588 W

Question Number : 79 Question Id : 168000579 Display Question Number : Yes Single Line Question Option : No Option Orientation : Vertical

30 किलोग्राम की अंजनी अपने स्कूल की 4 मीटर ऊंची सीढ़ियां 3.0 सेकंड में चढ़ जाती है। उसके द्वारा किए गए कार्य का दर है:

Options :

1. ✘ 196 वाट
2. ✘ 240 वाट
3. ✔ 392 वाट
4. ✘ 588 वाट

Question Number : 80 Question Id : 168000580 Display Question Number : Yes Single Line Question Option : No Option Orientation : Vertical

The mass of a planet is $\frac{1}{6}$ th that of the Earth and its radius is $\frac{1}{4}$ th that of the Earth. If the weight of an object on the planet is n times that on Earth, then n is:

Options :

1. ✘ $\frac{2}{3}$
2. ✘ 1
3. ✘ $\frac{4}{3}$
4. ✔ $\frac{8}{3}$

Question Number : 80 Question Id : 168000580 Display Question Number : Yes Single Line Question Option : No Option Orientation : Vertical

एक ग्रह का द्रव्यमान पृथ्वी के द्रव्यमान का $\frac{1}{6}$ वां और इसकी त्रिज्या पृथ्वी की त्रिज्या की $\frac{1}{4}$ वां है। यदि ग्रह पर किसी वस्तु का भार पृथ्वी पर इसके भार का n गुना हो तो n है:

Options :

1. ✘ $\frac{2}{3}$

2. ✘ 1


3. ✘ $\frac{4}{3}$

4. ✔ $\frac{8}{3}$

Question Number : 81 Question Id : 168000581 Display Question Number : Yes Single Line Question Option : No Option Orientation : Vertical

Which one of the following is an acidic oxide?


Options :



Question Number : 81 Question Id : 168000581 Display Question Number : Yes Single Line Question Option : No Option Orientation : Vertical

निम्नलिखित में से कौन अम्लीय ऑक्साइड है?

Options :



Question Number : 82 Question Id : 168000582 Display Question Number : Yes Single Line Question Option : No Option Orientation : Vertical

What is the pH value of an aqueous solution containing sodium chloride salt?

Options :

1. ✘ 0
2. ✘ >7
3. ✘ <7
4. ✔ =7

Question Number : 82 Question Id : 168000582 Display Question Number : Yes Single Line Question Option : No Option Orientation : Vertical

सोडियम क्लोराइड लवण युक्त जलीय विलयन का pH मान क्या होगा?

Options :

1. ✘ 0
2. ✘ >7
3. ✘ <7
4. ✔ =7

Question Number : 83 Question Id : 168000583 Display Question Number : Yes Single Line Question Option : No Option Orientation : Vertical

Which one of the following is **NOT** a general characteristic feature of non-metals?

Options :

1. ✘ Electronegativity
2. ✘ Ability to form anions
3. ✘ Presence of 4 to 7 electrons in the outermost orbit
4. ✔ Ability to form basic oxides

Question Number : 83 Question Id : 168000583 Display Question Number : Yes Single Line Question Option : No Option Orientation : Vertical

निम्नलिखित में से कौन अधातुओं की सामान्य अभिलाक्षणिक विशेषता नहीं है?

Options :

1. ✘ विद्युतऋणात्मकता

2. ✘ ऋणायन बनाने की क्षमता
3. ✘ बाह्य कक्षा में 4 से 7 इलेक्ट्रॉनों की उपस्थिति
4. ✔ क्षारीय ऑक्साइड बनाने की क्षमता

Question Number : 84 Question Id : 168000584 Display Question Number : Yes Single Line Question Option : No Option Orientation : Vertical

Which one of the following metals can displace lead from its salts?

(The descending position of metals in the reactivity series is - iron, lead, copper, silver, gold.)

Options :

1. ✘ Copper
2. ✔ Iron
3. ✘ Silver
4. ✘ Gold

Question Number : 84 Question Id : 168000584 Display Question Number : Yes Single Line Question Option : No Option Orientation : Vertical

निम्नलिखित में से कौन-सी धातु अपने लवण से लेड विस्थापित कर सकती है?

(सक्रियता श्रृंखला में धातुओं का अवरोही क्रम इस प्रकार है - लोहा, लेड, तांबा, चांदी, सोना।)

Options :

1. ✘ कॉपर (तांबा)
2. ✔ आयरन (लोहा)
3. ✘ सिलवर (चांदी)
4. ✘ गोल्ड (सोना)

Question Number : 85 Question Id : 168000585 Display Question Number : Yes Single Line Question Option : No Option Orientation : Vertical

What is the total number of molecules present in 14 grams of nitrogen gas (N₂)?

Options :

1. ✔ 3.015×10^{23}

2. ✘ $2 \times 6.023 \times 10^{23}$

3. ✘ 6.023×10^{22}

4. ✘ 6.023×10^{21}

Question Number : 85 Question Id : 168000585 Display Question Number : Yes Single Line Question Option : No Option Orientation : Vertical

14 ग्राम नाइट्रोजन गैस (N_2) में उपस्थित कुल अणुओं की संख्या कितनी होगी?

Options :

1. ✔ 3.015×10^{23}

2. ✘ $2 \times 6.023 \times 10^{23}$

3. ✘ 6.023×10^{22}

4. ✘ 6.023×10^{21}

Question Number : 86 Question Id : 168000586 Display Question Number : Yes Single Line Question Option : No Option Orientation : Vertical

The National Song of India – “Vande Mataram” is composed in which raga?

Options :

1. ✔ Desh

2. ✘ Malhar

3. ✘ Shankarabaranam

4. ✘ Todi

Question Number : 86 Question Id : 168000586 Display Question Number : Yes Single Line Question Option : No Option Orientation : Vertical

भारत का राष्ट्रीय गीत - "वंदे मातरम्" कौन-से राग में रचा गया है?

Options :

1. ✔ देश

2. ✘ मल्हार

3. ✘ शंकराभरणम

4. ✘ तोड़ी

Question Number : 87 Question Id : 168000587 Display Question Number : Yes Single Line Question Option : No Option Orientation : Vertical

In which language did Gautama Buddha deliver his discourses?

Options :

1. ✘ Sanskrit

2. ✔ Pali

3. ✘ Magadhi

4. ✘ Apabhramsa

Question Number : 87 Question Id : 168000587 Display Question Number : Yes Single Line Question Option : No Option Orientation : Vertical

गौतम बुद्ध ने अपने प्रवचन कौन-सी भाषा में दिए थे?

Options :

1. ✘ संस्कृत

2. ✔ पाली

3. ✘ मगधी

4. ✘ अपभ्रंश

Question Number : 88 Question Id : 168000588 Display Question Number : Yes Single Line Question Option : No Option Orientation : Vertical

The black soil found in India gets the colour due to the presence of which of the following material/compound?

Options :

1. ✘ Nitrogen

2. ✘ Carbon

3. ✔ Titanium

4. ✘ Iron Oxides

Question Number : 88 Question Id : 168000588 Display Question Number : Yes Single Line Question Option : No Option Orientation : Vertical

निम्नलिखित में से कौन-से पदार्थ/यौगिक की उपस्थिति के कारण भारत में पाई जाने वाली काली मिट्टी का रंग प्राप्त होता है?

Options :

1. ✘ नाइट्रोजन
2. ✘ कार्बन
3. ✔ टाइटेनियम
4. ✘ आयरन ऑक्साइड

Question Number : 89 Question Id : 168000589 Display Question Number : Yes Single Line Question Option : No Option Orientation : Vertical

India has made progress in the area of education after the inclusion of which of the following in the 86th amendment of 2002?

Options :

1. ✘ Right to independent skill
2. ✘ Right of alternate education
3. ✘ Right to lower education fees
4. ✔ Right to education as fundamental right

Question Number : 89 Question Id : 168000589 Display Question Number : Yes Single Line Question Option : No Option Orientation : Vertical

वर्ष 2002 के 86 वें संशोधन में किस विषय को शामिल करने के बाद भारत ने शिक्षा क्षेत्र में प्रगति की है?

Options :

1. ✘ स्वतंत्र कौशल का अधिकार
2. ✘ वैकल्पिक शिक्षा का अधिकार
3. ✘ शिक्षा शुल्क कम करने का अधिकार
4. ✔ मौलिक अधिकार के रूप में शिक्षा का अधिकार

Question Number : 90 Question Id : 168000590 Display Question Number : Yes Single Line Question Option : No Option Orientation : Vertical

Which union territories send their members to the Council of States?

Options :

1. ✓ Puducherry and Delhi
2. ✗ Andaman and Nicobar Islands
3. ✗ Dadra and Nagar Haveli
4. ✗ Daman and Diu

Question Number : 90 Question Id : 168000590 Display Question Number : Yes Single Line Question Option : No Option Orientation : Vertical

केंद्र शासित प्रदेशों में कौन अपने सदस्यों को राज्यों की परिषद में भेजते हैं?

Options :

1. ✓ पुडुचेरी और दिल्ली
2. ✗ अंडमान व निकोबार द्वीप समूह
3. ✗ दादरा व नगर हवेली
4. ✗ दमन व दीव

Question Number : 91 Question Id : 168000591 Display Question Number : Yes Single Line Question Option : No Option Orientation : Vertical

Name the first Indian space mission to study the Sun, which is slated to be launched in 2019-2020:

Options :

1. ✗ Viraj L1
2. ✓ Aditya-L1
3. ✗ Surya L1
4. ✗ Ravi L1

Question Number : 91 Question Id : 168000591 Display Question Number : Yes Single Line Question Option : No Option Orientation : Vertical

सूर्य का अध्ययन करने के लिए पहले भारतीय अंतरिक्ष मिशन का नाम, जिसे 2019-2020 में लॉन्च किया जाना है:

Options :

1. ✘ विराज एल 1
2. ✔ आदित्य-एल 1
3. ✘ सूर्य एल 1
4. ✘ रवि एल 1

Question Number : 92 Question Id : 168000592 Display Question Number : Yes Single Line Question Option : No Option Orientation : Vertical

What does the 2015 Rohingya crisis refer to?

Options :

1. ✘ Severe drought in parts of Myanmar caused by El Niño
2. ✘ Thousands of people originally from Thailand fleeing on boats to the neighbouring countries
3. ✔ Mass migration of thousands of people from Myanmar (also known as Burma) and Bangladesh in 2015
4. ✘ Thousands of acres of crops in Myanmar being destroyed by higher concentration of CO₂

Question Number : 92 Question Id : 168000592 Display Question Number : Yes Single Line Question Option : No Option Orientation : Vertical

वर्ष 2015 का रोहिंग्या संकट क्या है?

Options :

1. ✘ एल नीनो के कारण म्यांमार के कई स्थानों में गंभीर सूखा
2. ✘ मूल रूप से थाईलैंड से हजारों लोग का नौकाओं से पड़ोसी देशों की ओर भागना
3. ✔ म्यांमार (जिसे बर्मा के नाम से भी जाना जाता है) और बांग्लादेश से 2015 में हजारों रोहिंग्यों का बड़े पैमाने पर पलायन
4. ✘ म्यांमार की हजारों एकड़ भूमि पर फैली फसलों का CO₂ की उच्च सांद्रता के कारण नष्ट होना

Question Number : 93 Question Id : 168000593 Display Question Number : Yes Single Line Question Option : No Option Orientation : Vertical

India will play the host of the ICC Cricket World Cup in which upcoming year?

Options :

1. ✘ 2031
2. ✘ 2027
3. ✘ 2019
4. ✔ 2023

Question Number : 93 Question Id : 168000593 Display Question Number : Yes Single Line Question Option : No Option Orientation : Vertical

भारत किस वर्ष आईसीसी क्रिकेट विश्व कप की मेजबानी करेगा?

Options :

1. ✘ 2031
2. ✘ 2027
3. ✘ 2019
4. ✔ 2023

Question Number : 94 Question Id : 168000594 Display Question Number : Yes Single Line Question Option : No Option Orientation : Vertical

Which village in India won the Smart Village Award 2017?

Options :

1. ✔ ISKCONs Govardhan Eco Village
2. ✘ Buchkewadi
3. ✘ Dhule
4. ✘ Nandurbar

Question Number : 94 Question Id : 168000594 Display Question Number : Yes Single Line Question Option : No Option Orientation : Vertical

भारत के किस गांव ने स्मार्ट ग्राम पुरस्कार 2017 जीता है?

Options :

1. ✔ इस्कॉन का गोवर्धन इको विलेज
2. ✘ बुचकेवड़ी

3. ✘ धुले

4. ✘ नंदुरबार

Question Number : 95 Question Id : 168000595 Display Question Number : Yes Single Line Question Option : No Option Orientation : Vertical

What is the name the festival featuring the best and the most creative takes on the potato pancakes, which is slated to be held in New York in December 2017?

Options :

1. ✘ Reibekuchen

2. ✘ Bramborák

3. ✘ Tortilla de papas

4. ✔ Latke

Question Number : 95 Question Id : 168000595 Display Question Number : Yes Single Line Question Option : No Option Orientation : Vertical

पॉटेटो पैनकेक पर सबसे अच्छी और सर्वाधिक रचनात्मक प्रस्तुति वाले त्यौहार का नाम क्या है, जिसे दिसंबर 2017 में न्यूयॉर्क में आयोजित किया जाएगा?

Options :

1. ✘ राइबेकुचे

2. ✘ ब्रम्बोरक

3. ✘ टॉटिला डी पापस

4. ✔ लाटके

Question Number : 96 Question Id : 168000596 Display Question Number : Yes Single Line Question Option : No Option Orientation : Vertical

If LONDON is coded as 379879 and CHINA is coded as 24695, then how would you code CANADA?

Options :

1. ✔ 259585

2. ✘ 255985

3. ✘ 259855

4. ✘ 295855

Question Number : 96 Question Id : 168000596 Display Question Number : Yes Single Line Question Option : No Option Orientation : Vertical

यदि LONDON को 379879 और CHINA को 24695 के रूप में कोड किया जाता है तो आप CANADA को कैसे कोड करेंगे?

Options :

1. ✔ 259585

2. ✘ 255985

3. ✘ 259855

4. ✘ 295855

Question Number : 97 Question Id : 168000597 Display Question Number : Yes Single Line Question Option : No Option Orientation : Vertical

If BOOK = 5, SCHOOL = 7 then TEACHER = ?

Options :

1. ✘ 6

2. ✔ 8

3. ✘ 9

4. ✘ 10

Question Number : 97 Question Id : 168000597 Display Question Number : Yes Single Line Question Option : No Option Orientation : Vertical

यदि BOOK = 5, SCHOOL = 7 तो TEACHER = ?

Options :

1. ✘ 6

2. ✔ 8

3. ✘ 9

4. ✘ 10

Question Number : 98 Question Id : 168000598 Display Question Number : Yes Single Line Question Option : No Option Orientation : Vertical

Select the set of letters that completes the first word and begins the second.

MENT () IGIN

Options :

1. ✘ AR
2. ✘ ER
3. ✔ OR
4. ✘ IR

Question Number : 98 Question Id : 168000598 Display Question Number : Yes Single Line Question Option : No Option Orientation : Vertical

उस अक्षर-युग्म को जोड़ें जो पहले शब्द को पूरा करता हो और दूसरे शब्द का आरम्भ करता हो।

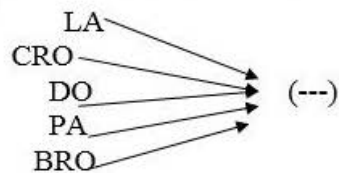
MENT () IGIN

Options :

1. ✘ AR
2. ✘ ER
3. ✔ OR
4. ✘ IR

Question Number : 99 Question Id : 168000599 Display Question Number : Yes Single Line Question Option : No Option Orientation : Vertical

Select the set of letters that, when added as suffix to the letter/set of letters from the image, forms a meaningful English word.



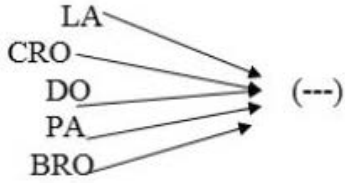
Options :

1. ✘ NK
2. ✘ KE
3. ✘ EN

4. ✓ WN

Question Number : 99 Question Id : 168000599 Display Question Number : Yes Single Line Question Option : No Option Orientation : Vertical

अक्षरों के उस सेट का चयन करें जिसे चित्र के अक्षर/अक्षर-समूहों के साथ प्रत्यय के रूप में जोड़े जाने पर एक अर्थपूर्ण अंग्रेज़ी शब्द बने।



Options :

1. ✗ NK

2. ✗ KE

3. ✗ EN

4. ✓ WN

Question Number : 100 Question Id : 168000600 Display Question Number : Yes Single Line Question Option : No Option Orientation : Vertical

Which of the given numbers would complete the series given below?

8, 11, 9, 12, 10, 13, _____

Options :

1. ✗ 10

2. ✗ 13

3. ✓ 11

4. ✗ 12

Question Number : 100 Question Id : 168000600 Display Question Number : Yes Single Line Question Option : No Option Orientation : Vertical

निम्नलिखित में से कौन-सी संख्या नीचे दी गई श्रृंखला को पूर्ण करेगी?

8, 11, 9, 12, 10, 13, _____

Options :

1. ✘ 10

2. ✘ 13

3. ✔ 11

4. ✘ 12