



Haryana Staff Selection Commission

Notations :

1. Options shown in **green** color and with  icon are correct.
2. Options shown in **red** color and with  icon are incorrect.

Subject Name:	CAT 1 Steno Typist English CBT Exam
Total Marks:	200
Display Marks:	Yes
Calculator:	None
Magnifying Glass Required?:	No
Ruler Required?:	No
Eraser Required?:	No
Scratch Pad Required?:	No
Rough Sketch/Notepad Required?:	No
Protractor Required?:	No

	CAT 1 Steno Typist English CBT Exam
Group Marks:	200

	CAT 1 Steno Typist English CBT Exam
Section Marks:	200
Display Number Panel:	Yes
Group All Questions:	No

Question Number : 1 Question Id : 6272891 Display Question Number : Yes Single Line Question Option : No Option Orientation : Vertical

Which administrative unit was present-day Haryana a part of during the revolt of 1857?

Options :

1.  Bengal Presidency
2.  Bombay Presidency
3.  North West Provinces
4.  United Provinces

Question Number : 1 Question Id : 6272891 Display Question Number : Yes Single Line Question Option : No Option Orientation : Vertical

सन् 1857 के विद्रोह के दौरान कौन सा प्रशासनिक इकाई वर्तमान हरियाणा का हिस्सा था?

Options :

1. ✘ बंगाल प्रेसीडेंसी
2. ✘ बाँम्बे प्रेसीडेंसी
3. ✔ उत्तर पश्चिम प्रांत
4. ✘ संयुक्त प्रांत

Question Number : 2 Question Id : 6272892 Display Question Number : Yes Single Line Question Option : No Option Orientation : Vertical

Haryana was formed on:

Options :

1. ✘ 1st September 1966
2. ✘ 1st October 1966
3. ✔ 1st November 1966
4. ✘ 1st December 1966

Question Number : 2 Question Id : 6272892 Display Question Number : Yes Single Line Question Option : No Option Orientation : Vertical

हरियाणा राज्य का गठन कब किया गया था?

Options :

1. ✘ 1 सितम्बर 1966
2. ✘ 1 अक्टूबर 1966
3. ✔ 1 नवंबर 1966
4. ✘ 1 दिसंबर 1966

Question Number : 3 Question Id : 6272893 Display Question Number : Yes Single Line Question Option : No Option Orientation : Vertical

When did Haryana come under the rule of the British East India Company?

Options :

1. ✓ 1803

2. ✗ 1805

3. ✗ 1832

4. ✗ 1833

Question Number : 3 Question Id : 6272893 Display Question Number : Yes Single Line Question Option : No Option Orientation : Vertical

हरियाणा ब्रिटिश ईस्ट इंडिया कंपनी के शासन के तहत कब आया था?

Options :

1. ✓ 1803

2. ✗ 1805

3. ✗ 1832

4. ✗ 1833

Question Number : 4 Question Id : 6272894 Display Question Number : Yes Single Line Question Option : No Option Orientation : Vertical

In Vedic literature, the region between the Saraswati and Drishdawati rivers was known as:

Options :

1. ✗ Aryavarta

2. ✓ Brahmavarta

3. ✗ Madhya Desha

4. ✗ Valhika Desha

Question Number : 4 Question Id : 6272894 Display Question Number : Yes Single Line Question Option : No Option Orientation : Vertical

वैदिक साहित्य में, सरस्वती और दृषद्वती नदियों के बीच के क्षेत्र को इस नाम से जाना जाता था:

Options :

1. ✗ आर्यावर्त

2. ✓ ब्रह्मवर्त

3. ✘ मध्य देश

4. ✘ वल्लिका देश

Question Number : 5 Question Id : 6272895 Display Question Number : Yes Single Line Question Option : No Option Orientation : Vertical

In the financial year 2016-17, contribution of the tertiary sector to the GSVA (Gross State Value Added) in Haryana was approximately:

Options :

1. ✔ 51.7%

2. ✘ 80.1%

3. ✘ 21.3%

4. ✘ 10.8%

Question Number : 5 Question Id : 6272895 Display Question Number : Yes Single Line Question Option : No Option Orientation : Vertical

वित्तीय वर्ष 2016-17 में, हरियाणा के तृतीय श्रेणी के उद्योग का GSVA (सकल राज्य मूल्य वर्धन) में योगदान लगभग कितना था?

Options :

1. ✔ 51.7%

2. ✘ 80.1%

3. ✘ 21.3%

4. ✘ 10.8%

Question Number : 6 Question Id : 6272896 Display Question Number : Yes Single Line Question Option : No Option Orientation : Vertical

The 31st Surajkund International Crafts Mela was held in _____.

Options :

1. ✘ Karnal

2. ✘ Sonipat

3. ✘ Gurugram

4. ✓ Faridabad

Question Number : 6 Question Id : 6272896 Display Question Number : Yes Single Line Question Option : No Option Orientation : Vertical

31वां सूरजकुंड अंतर्राष्ट्रीय शिल्प मेला _____ में आयोजित किया गया था।

Options :

1. ✗ करनाल

2. ✗ सोनीपत

3. ✗ गुरुग्राम

4. ✓ फरीदाबाद

Question Number : 7 Question Id : 6272897 Display Question Number : Yes Single Line Question Option : No Option Orientation : Vertical

Who among the following was recently appointed as Director General of Police for Haryana?

Options :

1. ✗ K P Singh

2. ✓ B S Sandhu

3. ✗ KPS Gill

4. ✗ P S Verma

Question Number : 7 Question Id : 6272897 Display Question Number : Yes Single Line Question Option : No Option Orientation : Vertical

हाल ही में निम्नलिखित में से किसको हरियाणा पुलिस महानिदेशक के रूप में नियुक्त किया गया था?

Options :

1. ✗ के पी सिंह

2. ✓ बी एस संधू

3. ✗ केपीएस गिल

4. ✗ पी एस वर्मा

Question Number : 8 Question Id : 6272898 Display Question Number : Yes Single Line Question Option : No Option Orientation : Vertical

As per the report published in Quarter 4 of 2016, Haryana ranks _____ in the country in "Ease of doing business".

Options :

1. ✓ 6th
2. ✗ 5th
3. ✗ 4th
4. ✗ 3rd

Question Number : 8 Question Id : 6272898 Display Question Number : Yes Single Line Question Option : No Option Orientation : Vertical

वर्ष 2016 की चौथी तिमाही (क्वार्टर 4) में प्रकाशित रिपोर्ट के अनुसार, हरियाणा का देश में "व्यापार में आसानी" वाले राज्यों में _____ स्थान है।

Options :

1. ✓ छठा
2. ✗ पांचवा
3. ✗ चौथा
4. ✗ तीसरा

Question Number : 9 Question Id : 6272899 Display Question Number : Yes Single Line Question Option : No Option Orientation : Vertical

Which of the following poets is also a cricket coach?

Options :

1. ✗ Chander Lal
2. ✗ Shrikrishna Gotan Manjar
3. ✓ Narendra Gulia
4. ✗ Satyavir Nahadiya

Question Number : 9 Question Id : 6272899 Display Question Number : Yes Single Line Question Option : No Option Orientation : Vertical

निम्नलिखित कवियों में से कौन एक क्रिकेट कोच भी है?

Options :

1. ✘ चंदर लाल
2. ✘ श्रीकृष्ण गोतान मंजर
3. ✔ नरेंद्र गुलिया
4. ✘ सत्यवीर नाहडिया

Question Number : 10 Question Id : 62728910 Display Question Number : Yes Single Line Question Option : No Option Orientation : Vertical

Which of the following poets/poetesses is also a Doctor of Medicine?

Options :

1. ✘ Narendra Guliya
2. ✔ Shyam Sakha Shyam
3. ✘ Asha Khatri 'Lata'
4. ✘ Vinod Mehra Bechain

Question Number : 10 Question Id : 62728910 Display Question Number : Yes Single Line Question Option : No Option Orientation : Vertical

निम्नलिखित कवियों/कवयित्रियों में से कौन एक आयुर्विज्ञान चिकित्सक (डॉक्टर ऑफ मेडिसिन) भी हैं?

Options :

1. ✘ नरेंद्र गुलिया
2. ✔ श्याम सखा श्याम
3. ✘ आशा खत्री 'लता'
4. ✘ विनोद मेहरा बेचैन

Question Number : 11 Question Id : 62728911 Display Question Number : Yes Single Line Question Option : No Option Orientation : Vertical

Which one of the following authors has played a role in a recent film 'Dangal'?

Options :

1. ✘ Sandip Kanwal Bhurtana

2. ✓ Jagbir Rathee
3. ✗ Viren Sanwadia
4. ✗ Rohit Kumar 'Happy'

Question Number : 11 Question Id : 62728911 Display Question Number : Yes Single Line Question Option : No Option Orientation : Vertical

निम्नलिखित में से किस लेखक ने हाल ही में आई फिल्म 'दंगल' में एक भूमिका निभाई थी?

Options :

1. ✗ संदीप कंवल भुरटाना
2. ✓ जगबीर राठी
3. ✗ वीरेन संवादिया
4. ✗ रोहित कुमार 'हैप्पी'

Question Number : 12 Question Id : 62728912 Display Question Number : Yes Single Line Question Option : No Option Orientation : Vertical

The total area of Haryana is:

Options :

1. ✗ 40,252 sq. km
2. ✗ 42,512 sq. km
3. ✓ 44,212 sq. km
4. ✗ 47,712 sq. km

Question Number : 12 Question Id : 62728912 Display Question Number : Yes Single Line Question Option : No Option Orientation : Vertical

हरियाणा का कुल क्षेत्रफल है:

Options :

1. ✗ 40,252 वर्ग किमी
2. ✗ 42,512 वर्ग किमी

3. ✓ 44,212 वर्ग किमी

4. ✗ 47,712 वर्ग किमी

Question Number : 13 Question Id : 62728913 Display Question Number : Yes Single Line Question Option : No Option Orientation : Vertical

There are _____ districts in Haryana.

Options :

1. ✓ 22

2. ✗ 25

3. ✗ 28

4. ✗ 31

Question Number : 13 Question Id : 62728913 Display Question Number : Yes Single Line Question Option : No Option Orientation : Vertical

हरियाणा में _____ जिले हैं।

Options :

1. ✓ 22

2. ✗ 25

3. ✗ 28

4. ✗ 31

Question Number : 14 Question Id : 62728914 Display Question Number : Yes Single Line Question Option : No Option Orientation : Vertical

As of 2010-11 according to the Government, per capita income of Haryana at current prices was _____ rupees.

Options :

1. ✗ 89,216

2. ✗ 90,547

3. ✓ 92,327

4. ✗ 94,813

Question Number : 14 Question Id : 62728914 Display Question Number : Yes Single Line Question Option : No Option Orientation : Vertical

वर्ष 2010-11 की तहत सरकार के अनुसार, वर्तमान कीमतों पर हरियाणा की प्रति व्यक्ति आय _____ रुपए थी।

Options :

1. ✘ 89,216
2. ✘ 90,547
3. ✔ 92,327
4. ✘ 94,813

Question Number : 15 Question Id : 62728915 Display Question Number : Yes Single Line Question Option : No Option Orientation : Vertical

According to the latest amendments in the Haryana Panchayati Raj Act, 1994, which of the following is NOT mandatory for candidates fighting panchayat elections?

Options :

1. ✘ To have basic educational qualification
2. ✘ To have functional toilets at home
3. ✔ To have at least one bank account in his/her name
4. ✘ To ensure that they have cleared their outstanding dues of rural domestic electricity connections

Question Number : 15 Question Id : 62728915 Display Question Number : Yes Single Line Question Option : No Option Orientation : Vertical

हरियाणा पंचायती राज अधिनियम, 1994 में नवीनतम संशोधन के अनुसार, पंचायत चुनाव लड़ रहे प्रत्याशियों के लिए निम्नलिखित में से कौन सा अनिवार्य नहीं है?

Options :

1. ✘ आधारभूत शैक्षणिक योग्यता होना
2. ✘ घर पर कार्यात्मक शौचालय होना
3. ✔ उसका/उसकी नाम से कम से कम एक बैंक खाता होना
4. ✘ यह सुनिश्चित करना कि उन्होंने ग्रामीण घरेलू बिजली कनेक्शनों के अपने बकाया देय राशि का भुगतान कर दिया है

Question Number : 16 Question Id : 62728916 Display Question Number : Yes Single Line Question Option : No Option Orientation : Vertical

Dalits are approximately _____ of the total Haryana population of 2.5 crore.

Options :

1. ✘ 18%
2. ✔ 20%
3. ✘ 23%
4. ✘ 25%

Question Number : 16 Question Id : 62728916 Display Question Number : Yes Single Line Question Option : No Option Orientation : Vertical

हरियाणा की कुल जनसंख्या 2.5 करोड़ में दलित _____ हैं।

Options :

1. ✘ 18%
2. ✔ 20%
3. ✘ 23%
4. ✘ 25%

Question Number : 17 Question Id : 62728917 Display Question Number : Yes Single Line Question Option : No Option Orientation : Vertical

Which of the following districts is not in the Rohtak administrative division?

Options :

1. ✘ Bhiwani
2. ✘ Jhajjar
3. ✘ Sonipat
4. ✔ Panipat

Question Number : 17 Question Id : 62728917 Display Question Number : Yes Single Line Question Option : No Option Orientation : Vertical

निम्नलिखित जिलों में से कौन सा रोहतक प्रशासनिक प्रभाग में नहीं है?

Options :

1. ✘ भिवानी
2. ✘ झज्जर
3. ✘ सोनीपत
4. ✔ पानीपत

Question Number : 18 Question Id : 62728918 Display Question Number : Yes Single Line Question Option : No Option Orientation : Vertical

On 12 September 2014, the Election Commission announced Haryana's Legislative Assembly election under Article 324 and 172(1) of the Constitution of India and Section _____ of The Representation of the People Act, 1951.

Options :

1. ✘ 14
2. ✔ 15
3. ✘ 16
4. ✘ 18

Question Number : 18 Question Id : 62728918 Display Question Number : Yes Single Line Question Option : No Option Orientation : Vertical

चुनाव आयोग ने 12 सितंबर 2014 को, भारत के संविधान के अनुच्छेद 324 और 172 (1) और लोक प्रतिनिधित्व अधिनियम, 1951 की धारा _____ के तहत हरियाणा में विधान सभा चुनावों की घोषणा की थी।

Options :

1. ✘ 14
2. ✔ 15
3. ✘ 16
4. ✘ 18

Question Number : 19 Question Id : 62728919 Display Question Number : Yes Single Line Question Option : No Option Orientation : Vertical

As per the Annual Report 2014-15 of the Central Pollution Control Board, there were _____ common bio-medical waste treatment facilities/private agencies operational in Haryana.

Options :

1. ✔ 11

2. ✘ 6

3. ✘ 15

4. ✘ 19

Question Number : 19 Question Id : 62728919 Display Question Number : Yes Single Line Question Option : No Option
Orientation : Vertical

केन्द्रीय प्रदूषण नियंत्रण बोर्ड की वार्षिक रिपोर्ट 2014-15 के अनुसार, हरियाणा में _____ सामान्य बायो-मेडिकल अपशिष्ट उपचार सुविधाएं/निजी एजेंसियां कार्यरत थीं।

Options :

1. ✔ 11

2. ✘ 6

3. ✘ 15

4. ✘ 19

Question Number : 20 Question Id : 62728920 Display Question Number : Yes Single Line Question Option : No Option
Orientation : Vertical

The State Environment Protection Council of Haryana functions as _____.

Options :

1. ✔ an advisory committee

2. ✘ an enforcement agency

3. ✘ a regulatory body

4. ✘ an environment court

Question Number : 20 Question Id : 62728920 Display Question Number : Yes Single Line Question Option : No Option
Orientation : Vertical

हरियाणा का राज्य पर्यावरण संरक्षण परिषद, _____ के रूप में कार्य करता है।

Options :

1. ✔ एक सलाहकार समिति

2. ✘ एक प्रवर्तन एजेंसी

3. ✘ एक नियामक संस्था

4. ✘ एक पर्यावरण न्यायालय

Question Number : 21 Question Id : 62728921 Display Question Number : Yes Single Line Question Option : No Option Orientation : Vertical

The WYC Hydro Electric Power Station is located at _____.

Options :

1. ✔ Yamunanagar

2. ✘ Faridabad

3. ✘ Hisar

4. ✘ Jhajjar

Question Number : 21 Question Id : 62728921 Display Question Number : Yes Single Line Question Option : No Option Orientation : Vertical

डब्ल्यूवाईसी (WYC) जल विद्युत पावर स्टेशन _____ में स्थित है।

Options :

1. ✔ यमुनानगर

2. ✘ फरीदाबाद

3. ✘ हिसार

4. ✘ झज्जर

Question Number : 22 Question Id : 62728922 Display Question Number : Yes Single Line Question Option : No Option Orientation : Vertical

Which among the following places in Haryana is famous for leather work?

Options :

1. ✘ Gurugram

2. ✔ Rohtak

3. ✘ Jhajjar

4. ✘ Sirsa

Question Number : 22 Question Id : 62728922 Display Question Number : Yes Single Line Question Option : No Option Orientation : Vertical

निम्नलिखित में से कौन सी जगह हरियाणा में चमड़े के काम के लिए प्रसिद्ध है?

Options :

1. ✘ गुरुग्राम
2. ✔ रोहतक
3. ✘ झज्जर
4. ✘ सिरसा

Question Number : 23 Question Id : 62728923 Display Question Number : Yes Single Line Question Option : No Option Orientation : Vertical

The Golden Jubilee edition of the Sohna Car Rally was organised in the year:

Options :

1. ✘ 2017
2. ✘ 2004
3. ✔ 2014
4. ✘ 2001

Question Number : 23 Question Id : 62728923 Display Question Number : Yes Single Line Question Option : No Option Orientation : Vertical

सोहना कार रैली की स्वर्ण जयंती संस्करण किस वर्ष आयोजित की गई थी?

Options :

1. ✘ 2017
2. ✘ 2004
3. ✔ 2014
4. ✘ 2001

Question Number : 24 Question Id : 62728924 Display Question Number : Yes Single Line Question Option : No Option Orientation : Vertical

All of the following are popular festivals in Haryana, EXCEPT:

Options :

1. ✓ Chath Puja
2. ✗ Teej
3. ✗ Guga Navami
4. ✗ Kartik Cultural Festival

Question Number : 24 Question Id : 62728924 Display Question Number : Yes Single Line Question Option : No Option Orientation : Vertical

निम्नलिखित सभी हरियाणा के लोकप्रिय त्यौहार हैं, इसे छोड़कर:

Options :

1. ✓ छठ पूजा
2. ✗ तीज
3. ✗ गुग्गा नवमी
4. ✗ कार्तिक सांस्कृतिक महोत्सव

Question Number : 25 Question Id : 62728925 Display Question Number : Yes Single Line Question Option : No Option Orientation : Vertical

All of the following districts in Haryana are famous for terracotta, EXCEPT:

Options :

1. ✗ Gurugram
2. ✗ Faridabad
3. ✗ Jhajjar
4. ✓ Sirsa

Question Number : 25 Question Id : 62728925 Display Question Number : Yes Single Line Question Option : No Option Orientation : Vertical

हरियाणा के निम्नलिखित सभी ज़िले टेराकोटा के लिए प्रसिद्ध हैं, इसे छोड़कर:

Options :

1. ✗ गुरुग्राम

2. ✘ फ़रीदाबाद

3. ✘ झज्जर

4. ✔ सिरसा

Question Number : 26 Question Id : 62728926 Display Question Number : Yes Single Line Question Option : No Option Orientation : Vertical

The stroke _____ is written upward in certain words to obtain a better outline.

Options :

1. ✘ Upward R

2. ✔ Upward Sh

3. ✘ Upward L

4. ✘ Upward H

Question Number : 26 Question Id : 62728926 Display Question Number : Yes Single Line Question Option : No Option Orientation : Vertical

The stroke _____ is written upward in certain words to obtain a better outline.

Options :

1. ✘ Upward R

2. ✔ Upward Sh

3. ✘ Upward L

4. ✘ Upward H

Question Number : 27 Question Id : 62728927 Display Question Number : Yes Single Line Question Option : No Option Orientation : Vertical

Mp and mb is doubled to add a final _____.

Options :

1. ✘ Tr

2. ✘ Ng

3. ✘ Kr

4. ✔ Er

Question Number : 27 Question Id : 62728927 Display Question Number : Yes Single Line Question Option : No Option Orientation : Vertical

Mp and mb is doubled to add a final _____.

Options :

1. ✘ Tr

2. ✘ Ng

3. ✘ Kr

4. ✔ Er

Question Number : 28 Question Id : 62728928 Display Question Number : Yes Single Line Question Option : No Option Orientation : Vertical

M and n are halved and _____ to indicate a following d.

Options :

1. ✘ Lightened

2. ✘ Straightened

3. ✔ Thickened

4. ✘ Doubled

Question Number : 28 Question Id : 62728928 Display Question Number : Yes Single Line Question Option : No Option Orientation : Vertical

M and n are halved and _____ to indicate a following d.

Options :

1. ✘ Lightened

2. ✘ Straightened

3. ✔ Thickened

4. ✘ Doubled

Question Number : 29 Question Id : 62728929 Display Question Number : Yes Single Line Question Option : No Option Orientation : Vertical

When a vowel comes between l-d and r-d, a _____ must be written.

Options :

1. ✓ Full stroke
2. ✗ Double stroke
3. ✗ Half stroke
4. ✗ Quarter stroke

Question Number : 29 Question Id : 62728929 Display Question Number : Yes Single Line Question Option : No Option Orientation : Vertical

When a vowel comes between l-d and r-d, a _____ must be written.

Options :

1. ✓ Full stroke
2. ✗ Double stroke
3. ✗ Half stroke
4. ✗ Quarter stroke

Question Number : 30 Question Id : 62728930 Display Question Number : Yes Single Line Question Option : No Option Orientation : Vertical

A straight stroke is doubled to indicate _____.

Options :

1. ✗ Fl, vl and thl
2. ✗ Pr, br or tr
3. ✓ Tr, dr or thr
4. ✗ Fr, vr or thr

Question Number : 30 Question Id : 62728930 Display Question Number : Yes Single Line Question Option : No Option Orientation : Vertical

A straight stroke is doubled to indicate _____.

Options :

1. ✗ Fl, vl and thl

2. ✘ Pr, br or tr
3. ✔ Tr, dr or thr
4. ✘ Fr, vr or thr

Question Number : 31 Question Id : 62728931 Display Question Number : Yes Single Line Question Option : No Option Orientation : Vertical

A large final circle represents _____.

Options :

1. ✘ S
2. ✔ Ses
3. ✘ Sw
4. ✘ Z

Question Number : 31 Question Id : 62728931 Display Question Number : Yes Single Line Question Option : No Option Orientation : Vertical

A large final circle represents _____.

Options :

1. ✘ S
2. ✔ Ses
3. ✘ Sw
4. ✘ Z

Question Number : 32 Question Id : 62728932 Display Question Number : Yes Single Line Question Option : No Option Orientation : Vertical

The S circle is written on the _____ of the angle formed by two straight strokes.

Options :

1. ✘ Inside
2. ✘ Left side
3. ✘ Right side
4. ✔ Outside

Question Number : 32 Question Id : 62728932 Display Question Number : Yes Single Line Question Option : No Option Orientation : Vertical

The S circle is written on the _____ of the angle formed by two straight strokes.

Options :

1. ✘ Inside
2. ✘ Left side
3. ✘ Right side
4. ✔ Outside

Question Number : 33 Question Id : 62728933 Display Question Number : Yes Single Line Question Option : No Option Orientation : Vertical

Final S circle represents the word _____ in a phrase.

Options :

1. ✘ Is
2. ✘ As
3. ✘ Has
4. ✔ Us

Question Number : 33 Question Id : 62728933 Display Question Number : Yes Single Line Question Option : No Option Orientation : Vertical

Final S circle represents the word _____ in a phrase.

Options :

1. ✘ Is
2. ✘ As
3. ✘ Has
4. ✔ Us

Question Number : 34 Question Id : 62728934 Display Question Number : Yes Single Line Question Option : No Option Orientation : Vertical

The word _____ is contracted to stroke 'P' to form the phrase.

Options :

1. ✘ Policy

2. ✘ Happy

3. ✘ Heap

4. ✔ Hope

Question Number : 34 Question Id : 62728934 Display Question Number : Yes Single Line Question Option : No Option Orientation : Vertical

The word _____ is contracted to stroke 'P' to form the phrase.

Options :

1. ✘ Policy

2. ✘ Happy

3. ✘ Heap

4. ✔ Hope

Question Number : 35 Question Id : 62728935 Display Question Number : Yes Single Line Question Option : No Option Orientation : Vertical

A small tick added to a diphthong sign represents a _____.

Options :

1. ✔ Triphone

2. ✘ Diphone

3. ✘ Triple Vowel

4. ✘ Double Vowel

Question Number : 35 Question Id : 62728935 Display Question Number : Yes Single Line Question Option : No Option Orientation : Vertical

A small tick added to a diphthong sign represents a _____.

Options :

1. ✔ Triphone

2. ✘ Diphone

3. ✘ Triple Vowel

4. ✘ Double Vowel

Question Number : 36 Question Id : 62728936 Display Question Number : Yes Single Line Question Option : No Option Orientation : Vertical

Upward _____ is used after a straight upstroke.

Options :

1. ✘ W

2. ✘ Y

3. ✔ R

4. ✘ H

Question Number : 36 Question Id : 62728936 Display Question Number : Yes Single Line Question Option : No Option Orientation : Vertical

Upward _____ is used after a straight upstroke.

Options :

1. ✘ W

2. ✘ Y

3. ✔ R

4. ✘ H

Question Number : 37 Question Id : 62728937 Display Question Number : Yes Single Line Question Option : No Option Orientation : Vertical

The vowel 'a' is represented by a heavy dot and is a _____ place vowel.

Options :

1. ✔ Second

2. ✘ First

3. ✘ Third

4. ✘ Fourth

Question Number : 37 Question Id : 62728937 Display Question Number : Yes Single Line Question Option : No Option Orientation : Vertical

The vowel 'a' is represented by a heavy dot and is a _____ place vowel.

Options :

1. ✓ Second

2. ✗ First

3. ✗ Third

4. ✗ Fourth

Question Number : 38 Question Id : 62728938 Display Question Number : Yes Single Line Question Option : No Option Orientation : Vertical

Words that end in ____ or _____, however spelt, are written with a 2nd place heavy vowel.

Options :

1. ✓ Ore or air

2. ✗ Our or air

3. ✗ Ray or ar

4. ✗ Ear or ar

Question Number : 38 Question Id : 62728938 Display Question Number : Yes Single Line Question Option : No Option Orientation : Vertical

Words that end in ____ or _____, however spelt, are written with a 2nd place heavy vowel.

Options :

1. ✓ Ore or air

2. ✗ Our or air

3. ✗ Ray or ar

4. ✗ Ear or ar

Question Number : 39 Question Id : 62728939 Display Question Number : Yes Single Line Question Option : No Option Orientation : Vertical

The diphthong _____ is written in the first vowel place.

Options :

1. ✗ OW

2. ✓ i

3. ✗ e

4. ✘ OO

Question Number : 39 Question Id : 62728939 Display Question Number : Yes Single Line Question Option : No Option Orientation : Vertical

The diphthong _____ is written in the first vowel place.

Options :

1. ✘ OW

2. ✔ i

3. ✘ e

4. ✘ OO

Question Number : 40 Question Id : 62728940 Display Question Number : Yes Single Line Question Option : No Option Orientation : Vertical

The short form _____ is turned on its side to form phrases.

Options :

1. ✘ I

2. ✔ You

3. ✘ How

4. ✘ Why

Question Number : 40 Question Id : 62728940 Display Question Number : Yes Single Line Question Option : No Option Orientation : Vertical

The short form _____ is turned on its side to form phrases.

Options :

1. ✘ I


2. ✔ You

3. ✘ How

4. ✘ Why

Question Number : 41 Question Id : 62728941 Display Question Number : Yes Single Line Question Option : No Option Orientation : Vertical

Select the option that rearranges the following shorthand to denote a proper sentence:



Options :

1. ✘ A



2. ✘ B

3. ✔ C

4. ✘ D

Question Number : 41 Question Id : 62728941 Display Question Number : Yes Single Line Question Option : No Option Orientation : Vertical

Select the option that rearranges the following shorthand to denote a proper sentence:



Options :

1. ✘ A


2. ✘ B

3. ✔ C

4. ✘ D

Question Number : 42 Question Id : 62728942 Display Question Number : Yes Single Line Question Option : No Option Orientation : Vertical

Select the right word from the options given below to fill in the blank.



A 

B 

C 

D 

Options :

1. ✔ A

2. ✘ B

3. ✘ C

4. ✘ D

Question Number : 42 Question Id : 62728942 Display Question Number : Yes Single Line Question Option : No Option Orientation : Vertical

Select the right word from the options given below to fill in the blank.

A _____

B _____

C _____

D _____

Options :

1. ✓ A


2. ✗ B

3. ✗ C

4. ✗ D

Question Number : 43 Question Id : 62728943 Display Question Number : Yes Single Line Question Option : No Option Orientation : Vertical

Select the option that rearranges the following shorthand to denote a proper sentence:




- A
- B
- C
- D

Options :

- 1. ✓ A
- 2. ✗ B
- 3. ✗ C
- 4. ✗ D

Question Number : 43 Question Id : 62728943 Display Question Number : Yes Single Line Question Option : No Option Orientation : Vertical

Select the option that rearranges the following shorthand to denote a proper sentence:



- A
- B
- C
- D

Options :

- 1. ✓ A
- 2. ✗ B
- 3. ✗ C
- 4. ✗ D

Question Number : 44 Question Id : 62728944 Display Question Number : Yes Single Line Question Option : No Option Orientation : Vertical

Select the right word from the options given below to fill in the blank.

ed p y u x

A

B

C

D

- Options :
- 1. ✘ A
 - 2. ✔ B
 - 3. ✘ C
 - 4. ✘ D

Question Number : 44 Question Id : 62728944 Display Question Number : Yes Single Line Question Option : No Option Orientation : Vertical

Select the right word from the options given below to fill in the blank.

ed p y u x

A

B

C

D

Options :

1. ✘ A

2. ✔ B

3. ✘ C

4. ✘ D

Question Number : 45 Question Id : 62728945 Display Question Number : Yes Single Line Question Option : No Option Orientation : Vertical

Select the right word from the options given below to fill in the blank.

A _____

B _____

C _____

D _____

Options :

1. ✔ A

2. ✘ B

3. ✘ C

4. ✘ D

Question Number : 45 Question Id : 62728945 Display Question Number : Yes Single Line Question Option : No Option Orientation : Vertical

Select the right word from the options given below to fill in the blank.

A *_____*

B *_____*

C *_____*

D *_____*

Options :

1. ✓ A

2. ✗ B

3. ✗ C

4. ✗ D

Question Number : 46 Question Id : 62728946 Display Question Number : Yes Single Line Question Option : No Option Orientation : Vertical

Fill in the blanks in the sentence below with suitable articles. Select your answer from the options given:

Water levels are already rising on ___ coast of ___ US state where ___ huge storm surge is expected.

Options :

1. ✓ the, the, a

2. ✗ a, the, the

3. ✗ the, a, a

4. ✗ a, a, a

Question Number : 46 Question Id : 62728946 Display Question Number : Yes Single Line Question Option : No Option Orientation : Vertical

Fill in the blanks in the sentence below with suitable articles. Select your answer from the options given:

Water levels are already rising on ___ coast of ___ US state where ___ huge storm surge is expected.

Options :

1. ✓ the, the, a
2. ✗ a, the, the
3. ✗ the, a, a
4. ✗ a, a, a

Question Number : 47 Question Id : 62728947 Display Question Number : Yes Single Line Question Option : No Option Orientation : Vertical

Fill in the blanks in the sentence below with suitable articles. Select your answer from the options given:

Wind gusts close to hurricane force are battering islands in Florida's south as Hurricane Irma is due to hit ___ mainland in ___ coming hours.

Options :

1. ✓ the, the
2. ✗ a, the
3. ✗ the, a
4. ✗ a, a

Question Number : 47 Question Id : 62728947 Display Question Number : Yes Single Line Question Option : No Option Orientation : Vertical

Fill in the blanks in the sentence below with suitable articles. Select your answer from the options given:

Wind gusts close to hurricane force are battering islands in Florida's south as Hurricane Irma is due to hit ___ mainland in ___ coming hours.

Options :

1. ✓ the, the
2. ✗ a, the
3. ✗ the, a
4. ✗ a, a

Question Number : 48 Question Id : 62728948 Display Question Number : Yes Single Line Question Option : No Option Orientation : Vertical

Fill in the blank in the sentence below with a suitable preposition. Select your answer from the options given:

Thousands of people _____ the mainland are currently without electricity.

Options :

1. ✘ in
2. ✘ under
3. ✔ on
4. ✘ at

Question Number : 48 Question Id : 62728948 Display Question Number : Yes Single Line Question Option : No Option Orientation : Vertical

Fill in the blank in the sentence below with a suitable preposition. Select your answer from the options given:

Thousands of people _____ the mainland are currently without electricity.

Options :

1. ✘ in
2. ✘ under
3. ✔ on
4. ✘ at

Question Number : 49 Question Id : 62728949 Display Question Number : Yes Single Line Question Option : No Option Orientation : Vertical

Fill in the blank in the sentence below with a suitable modal verb. Select your answer from the options given:

It has also been difficult to track down the fourth image, of people immersed in a canal, but it _____ be found on a website appealing for funds to help victims of the recent flooding in Nepal.

Options :

1. ✔ can
2. ✘ would
3. ✘ shall
4. ✘ must

Question Number : 49 Question Id : 62728949 Display Question Number : Yes Single Line Question Option : No Option Orientation : Vertical

Fill in the blank in the sentence below with a suitable modal verb. Select your answer from the options given:

It has also been difficult to track down the fourth image, of people immersed in a canal, but it _____ be found on a website appealing for funds to help victims of the recent flooding in Nepal.

Options :

1. ✓ can
2. ✗ would
3. ✗ shall
4. ✗ must

Question Number : 50 Question Id : 62728950 Display Question Number : Yes Single Line Question Option : No Option Orientation : Vertical

A sentence is given in four parts as options. One of the parts contains an error. Select the option that has the error:

Options :

1. ✓ A harmful virus who
2. ✗ can cause devastating brain damage in babies
3. ✗ could offer up a surprising new treatment.
4. ✗ for adult brain cancer, according to US scientists.

Question Number : 50 Question Id : 62728950 Display Question Number : Yes Single Line Question Option : No Option Orientation : Vertical

A sentence is given in four parts as options. One of the parts contains an error. Select the option that has the error:

Options :

1. ✓ A harmful virus who
2. ✗ can cause devastating brain damage in babies
3. ✗ could offer up a surprising new treatment.
4. ✗ for adult brain cancer, according to US scientists.

Question Number : 51 Question Id : 62728951 Display Question Number : Yes Single Line Question Option : No Option Orientation : Vertical

Select the option that offers the correct **synonym** of the highlighted word in the sentence given below. Pay attention to the meaning of the highlighted word **IN THE CONTEXT OF THE SENTENCE**:

Perhaps the easiest way of becoming invisible is by being **transparent** and letting light travel completely through you.

Options :

1. ✘ Lucid
2. ✔ Crystalline
3. ✘ Opaque
4. ✘ Vague

Question Number : 51 Question Id : 62728951 Display Question Number : Yes Single Line Question Option : No Option Orientation : Vertical

Select the option that offers the correct **synonym** of the highlighted word in the sentence given below. Pay attention to the meaning of the highlighted word *IN THE CONTEXT OF THE SENTENCE*:

Perhaps the easiest way of becoming invisible is by being **transparent** and letting light travel completely through you.

Options :

1. ✘ Lucid
2. ✔ Crystalline
3. ✘ Opaque
4. ✘ Vague

Question Number : 52 Question Id : 62728952 Display Question Number : Yes Single Line Question Option : No Option Orientation : Vertical

Select the option that offers the correct **antonym** of the highlighted word in the sentence given below. Pay attention to the meaning of the highlighted word *IN THE CONTEXT OF THE SENTENCE*:

She was the **perfect** symbol of democracy. Highly intelligent, well-read, articulate and photogenic.

Options :

1. ✘ Impeccable
2. ✘ Unskilled
3. ✔ Corrupt
4. ✘ Immaculate

Question Number : 52 Question Id : 62728952 Display Question Number : Yes Single Line Question Option : No Option Orientation : Vertical

Select the option that offers the correct **antonym** of the highlighted word in the sentence given below. Pay attention to the meaning of the highlighted word *IN THE CONTEXT OF THE SENTENCE*:

She was the **perfect** symbol of democracy. Highly intelligent, well-read, articulate and photogenic.

Options :

1. ✘ Impeccable
2. ✘ Unskilled
3. ✔ Corrupt
4. ✘ Immaculate

Question Number : 53 Question Id : 62728953 Display Question Number : Yes Single Line Question Option : No Option Orientation : Vertical

From the options given below, complete the following sentences using the appropriate collective nouns.

A ___ of locusts attacked a ___ of cattle that were grazing in the meadows.

Options :

1. ✔ swarm, herd
2. ✘ flight, herd
3. ✘ band, herd
4. ✘ mob, herd

Question Number : 53 Question Id : 62728953 Display Question Number : Yes Single Line Question Option : No Option Orientation : Vertical

From the options given below, complete the following sentences using the appropriate collective nouns.

A ___ of locusts attacked a ___ of cattle that were grazing in the meadows.

Options :

1. ✔ swarm, herd
2. ✘ flight, herd
3. ✘ band, herd
4. ✘ mob, herd

Question Number : 54 Question Id : 62728954 Display Question Number : Yes Single Line Question Option : No Option Orientation : Vertical

From the options given below, select the word that is the one word substitute for the highlighted words:

During the interview Krishna claimed to be an employee who could **work well using both his hands**.

Options :

1. ✘ ambitious
2. ✔ ambidextrous
3. ✘ adolescence
4. ✘ anthropologist

Question Number : 54 Question Id : 62728954 Display Question Number : Yes Single Line Question Option : No Option Orientation : Vertical

From the options given below, select the word that is the one word substitute for the highlighted words:

During the interview Krishna claimed to be an employee who could **work well using both his hands**.

Options :

1. ✘ ambitious
2. ✔ ambidextrous
3. ✘ adolescence
4. ✘ anthropologist

Question Number : 55 Question Id : 62728955 Display Question Number : Yes Single Line Question Option : No Option Orientation : Vertical

From the options given below select the one that has been spelt correctly to form a proper sentence:

In 1901-1902, excavations in the _____ of Santa Priscilla, near the Cappella Greca, revealed a polygonal chamber.

Options :

1. ✘ cementery
2. ✘ semetry
3. ✘ cemetry
4. ✔ cemetery

Question Number : 55 Question Id : 62728955 Display Question Number : Yes Single Line Question Option : No Option Orientation : Vertical

From the options given below select the one that has been spelt correctly to form a proper sentence:

In 1901-1902, excavations in the _____ of Santa Priscilla, near the Cappella Greca, revealed a polygonal chamber.

Options :

1. ✘ cementery
2. ✘ semetry
3. ✘ cemetry
4. ✔ cemetery

Question Number : 56 Question Id : 62728956 Display Question Number : Yes Single Line Question Option : No Option Orientation : Vertical

'पिता' शब्द का सही विशेषण रूप _____ होगा।

Options :

1. ✘ पितृक
2. ✔ पैतृक
3. ✘ पेतृक
4. ✘ पीतृक

Question Number : 56 Question Id : 62728956 Display Question Number : Yes Single Line Question Option : No Option Orientation : Vertical

'पिता' शब्द का सही विशेषण रूप _____ होगा।

Options :

1. ✘ पितृक
2. ✔ पैतृक
3. ✘ पेतृक
4. ✘ पीतृक

Question Number : 57 Question Id : 62728957 Display Question Number : Yes Single Line Question Option : No Option Orientation : Vertical

कौन-सा शब्द 'हिमालय' शब्द का पर्यायवाची नहीं है?

Options :

1. ✘ गिरिराज
2. ✘ नगेश
3. ✘ नगेन्द्र
4. ✔ गिरिजा

Question Number : 57 Question Id : 62728957 Display Question Number : Yes Single Line Question Option : No Option Orientation : Vertical

कौन-सा शब्द 'हिमालय' शब्द का पर्यायवाची नहीं है?

Options :

1. ✘ गिरिराज
2. ✘ नगेश
3. ✘ नगेन्द्र
4. ✔ गिरिजा

Question Number : 58 Question Id : 62728958 Display Question Number : Yes Single Line Question Option : No Option Orientation : Vertical

अव्यय की सही व्याख्या क्या है?

Options :

1. ✘ जो शब्द विकारी हैं, वे अव्यय हैं।
2. ✔ जो शब्द अविकारी हैं, वे अव्यय हैं।
3. ✘ क्रिया की विशेषता दिखानेवाले शब्द अव्यय कहलाते हैं।
4. ✘ एक ही वस्तु या व्यक्ति का बोध हो उन शब्दों को अव्यय कहते हैं।

Question Number : 58 Question Id : 62728958 Display Question Number : Yes Single Line Question Option : No Option Orientation : Vertical

अव्यय की सही व्याख्या क्या है?

Options :

1. ✘ जो शब्द विकारी हैं, वे अव्यय हैं।
2. ✔ जो शब्द अविकारी हैं, वे अव्यय हैं।
3. ✘ क्रिया की विशेषता दिखानेवाले शब्द अव्यय कहलाते हैं।
4. ✘ एक ही वस्तु या व्यक्ति का बोध हो उन शब्दों को अव्यय कहते हैं।

Question Number : 59 Question Id : 62728959 Display Question Number : Yes Single Line Question Option : No Option Orientation : Vertical

‘भूरी भूरी भेदभाव भूमि से भगा दिया’ पंक्ति में कौन-सा अलंकार समाहित है?

Options :

1. ✔ अनुप्रास
2. ✘ यमक
3. ✘ उपमा
4. ✘ रूपक

Question Number : 59 Question Id : 62728959 Display Question Number : Yes Single Line Question Option : No Option Orientation : Vertical

‘भूरी भूरी भेदभाव भूमि से भगा दिया’ पंक्ति में कौन-सा अलंकार समाहित है?

Options :

1. ✔ अनुप्रास
2. ✘ यमक
3. ✘ उपमा
4. ✘ रूपक

Question Number : 60 Question Id : 62728960 Display Question Number : Yes Single Line Question Option : No Option Orientation : Vertical

‘पंचवटी’ शब्द में कौन-सा समास है?

Options :

1. ✘ कर्मधारय समास
2. ✔ द्विगु समास
3. ✘ बहुब्रीहि समास
4. ✘ तत्पुरुष समास

Question Number : 60 Question Id : 62728960 Display Question Number : Yes Single Line Question Option : No Option Orientation : Vertical

'पंचवटी' शब्द में कौन-सा समास है?

Options :

1. ✘ कर्मधारय समास
2. ✔ द्विगु समास
3. ✘ बहुब्रीहि समास
4. ✘ तत्पुरुष समास

Question Number : 61 Question Id : 62728961 Display Question Number : Yes Single Line Question Option : No Option Orientation : Vertical

निम्नलिखित वाक्यों में से शुद्ध वाक्य होगा-

Options :

1. ✔ जीवन में तकलीफ उसी को आती है, जो जिम्मेदार है।
2. ✘ जीवन में तकलिफें जीम्मेदार को ही आती है।
3. ✘ जिवन में तकलिफ वे ही उठाते है, जो जिम्मेदार है।
4. ✘ जीवनभर तकलीफें वही उठाता है जो जिमेदार है।

Question Number : 61 Question Id : 62728961 Display Question Number : Yes Single Line Question Option : No Option Orientation : Vertical

निम्नलिखित वाक्यों में से शुद्ध वाक्य होगा-

Options :

1. ✓ जीवन में तकलीफ उसी को आती है, जो जिम्मेदार है।
2. ✘ जीवन में तकलीफें जिम्मेदार को ही आती हैं।
3. ✘ जिवन में तकलिफ वे ही उठाते हैं, जो जिम्मेदार हैं।
4. ✘ जीवनभर तकलीफें वही उठाता है जो जिमेदार है।

Question Number : 62 Question Id : 62728962 Display Question Number : Yes Single Line Question Option : No Option Orientation : Vertical

जन्मदिन का तोहफा देखकर उसकी बांछें खिलीं।
रेखांकित मुहावरे का सही अर्थ होगा।

Options :

1. ✘ जन्मदिन का तोहफा देखकर नाराज होना।
2. ✓ अत्यन्त प्रसन्न होना।
3. ✘ गुस्से में आ जाना।
4. ✘ बहुत ही दुःखी हो जाना।

Question Number : 62 Question Id : 62728962 Display Question Number : Yes Single Line Question Option : No Option Orientation : Vertical

जन्मदिन का तोहफा देखकर उसकी बांछें खिलीं।
रेखांकित मुहावरे का सही अर्थ होगा।

Options :

1. ✘ जन्मदिन का तोहफा देखकर नाराज होना।
2. ✓ अत्यन्त प्रसन्न होना।
3. ✘ गुस्से में आ जाना।
4. ✘ बहुत ही दुःखी हो जाना।

Question Number : 63 Question Id : 62728963 Display Question Number : Yes Single Line Question Option : No Option Orientation : Vertical

‘उत्साह’ किस रस का स्थायीभाव है?

Options :

1. ✘ शृंगार रस का
2. ✔ वीर रस का
3. ✘ करुण रस का
4. ✘ रौद्र रस का

Question Number : 63 Question Id : 62728963 Display Question Number : Yes Single Line Question Option : No Option Orientation : Vertical

‘उत्साह’ किस रस का स्थायीभाव है?

Options :

1. ✘ शृंगार रस का
2. ✔ वीर रस का
3. ✘ करुण रस का
4. ✘ रौद्र रस का

Question Number : 64 Question Id : 62728964 Display Question Number : Yes Single Line Question Option : No Option Orientation : Vertical

‘तद्भव’ शब्द को पहचानिए:

Options :

1. ✘ प्रस्तर
2. ✘ पौत्र
3. ✘ हस्त
4. ✔ जामुन

Question Number : 64 Question Id : 62728964 Display Question Number : Yes Single Line Question Option : No Option Orientation : Vertical

‘तद्भव’ शब्द को पहचानिए:

Options :

1. ✘ प्रस्तर
2. ✘ पौत्र
3. ✘ हस्त
4. ✔ जामुन

Question Number : 65 Question Id : 62728965 Display Question Number : Yes Single Line Question Option : No Option Orientation : Vertical

तत्सम शब्द को पहचानिए:

Options :

1. ✘ मिठाई
2. ✔ कर्पट
3. ✘ घोडा
4. ✘ करेला

Question Number : 65 Question Id : 62728965 Display Question Number : Yes Single Line Question Option : No Option Orientation : Vertical

तत्सम शब्द को पहचानिए:

Options :

1. ✘ मिठाई
2. ✔ कर्पट
3. ✘ घोडा
4. ✘ करेला

Question Number : 66 Question Id : 62728966 Display Question Number : Yes Single Line Question Option : No Option Orientation : Vertical

The number that occupies the unit place in the product of $7^{285} \times 3^{169}$ is:

Options :

1. ✘ 7
2. ✘ 3
3. ✘ 9
4. ✔ 1

Question Number : 66 Question Id : 62728966 Display Question Number : Yes Single Line Question Option : No Option Orientation : Vertical

$7^{285} \times 3^{169}$ के गुणनफल में इकाई के स्थान पर आने वाला अंक है:

Options :

1. ✘ 7
2. ✘ 3
3. ✘ 9
4. ✔ 1

Question Number : 67 Question Id : 62728967 Display Question Number : Yes Single Line Question Option : No Option Orientation : Vertical

Mr. Vishal was supposed to calculate the average marks of the class. While calculating, he accidentally entered 113 instead of 93, because of which the average marks of the class increased by $\frac{1}{3}$. Then the total number of students in the class is:

Options :

1. ✔ 60
2. ✘ 65
3. ✘ 63
4. ✘ 61

Question Number : 67 Question Id : 62728967 Display Question Number : Yes Single Line Question Option : No Option Orientation : Vertical

श्री. विशाल को एक कक्षा के औसत अंकों की गणना करने का कार्य दिया गया था। गणना करते समय उसने गलती से 93 के स्थान पर 113 की प्रविष्टि कर दी थी, जिसकी वजह से कक्षा के औसत अंकों में $\frac{1}{3}$ की वृद्धि हो गई। कक्षा में बच्चों की कुल संख्या है:

Options :

1. ✔ 60

2. ✘ 65

3. ✘ 63

4. ✘ 61

Question Number : 68 Question Id : 62728968 Display Question Number : Yes Single Line Question Option : No Option Orientation : Vertical

The compound interest on ₹ 8,000 for 3 years at 5% per annum is double the simple interest on a certain principal for 2 years at 10% per annum. The principal amount is:

Options :

1. ✘ ₹ 3,125.50

2. ✘ ₹ 3,512.50

3. ✔ ₹ 3,152.50

4. ✘ ₹ 3,152

Question Number : 68 Question Id : 62728968 Display Question Number : Yes Single Line Question Option : No Option Orientation : Vertical

₹ 8,000 का 3 वर्ष के लिए 5% की वार्षिक दर पर मिलने वाला चक्रवृद्धि ब्याज एक निश्चित मूलधन पर 10% की वार्षिक दर से 2 वर्ष में प्राप्त होने वाले साधारण ब्याज का दोगुना है। मूलधन की राशि है:

Options :

1. ✘ ₹ 3,125.50

2. ✘ ₹ 3,512.50

3. ✔ ₹ 3,152.50

4. ✘ ₹ 3,152

Question Number : 69 Question Id : 62728969 Display Question Number : Yes Single Line Question Option : No Option Orientation : Vertical

Consider three numbers 'X', 'Y', 'Z' such that 'X' and 'Y' are 51% and 62% lesser than 'Z' respectively. Then 'Y' is lesser than 'X' by _____. (round to one decimal place)

Options :

1. ✘ 22.0%

2. ✔ 22.4%

3. ✘ 23.0%

4. ✘ 22.5%

Question Number : 69 Question Id : 62728969 Display Question Number : Yes Single Line Question Option : No Option Orientation : Vertical

तीन संख्याएं 'X', 'Y', 'Z' इस प्रकार हैं कि 'X' और 'Y' 'Z' से क्रमशः 51% और 62% कम हैं। तो 'Y' 'X' से _____ कम है। (दशमलव के एक स्थान तक पूर्णांकित किया हुआ।)

Options :

1. ✘ 22%

2. ✔ 22.4%

3. ✘ 23%

4. ✘ 22.5%

Question Number : 70 Question Id : 62728970 Display Question Number : Yes Single Line Question Option : No Option Orientation : Vertical

If the roots of the equation $x^2 + bx + c = 0$ are two consecutive numbers of an arithmetic progression with common difference of 2, then $b^2 - 4c =$

Options :

1. ✘ -4

2. ✔ 4

3. ✘ 2

4. ✘ -2

Question Number : 70 Question Id : 62728970 Display Question Number : Yes Single Line Question Option : No Option Orientation : Vertical

यदि समीकरण $x^2 + bx + c = 0$ के मूल नियत अंतर 2 वाली एक समान्तर श्रेणी की दो क्रमागत संख्याएं हैं, तो $b^2 - 4c =$

Options :

1. ✘ -4

2. ✔ 4

3. ✘ 2

4. ✘ -2

Question Number : 71 Question Id : 62728971 Display Question Number : Yes Single Line Question Option : No Option Orientation : Vertical

Ms. Hema divides ₹ 4,061 such that 2 times the 1st share, 5 times the 2nd share and 3 times the 3rd share amount to the same number. Then the value of the 1st share is:

Options :

1. ✔ ₹ 1,965

2. ✘ ₹ 1,956

3. ✘ ₹ 1,966

4. ✘ ₹ 1,955

Question Number : 71 Question Id : 62728971 Display Question Number : Yes Single Line Question Option : No Option Orientation : Vertical

सुश्री. हेमा ₹ 4,061 इस प्रकार विभाजित करती है कि पहले भाग की 2 गुना, दूसरे भाग की 5 गुना और तीसरे भाग की 3 गुना राशियों का मान समान है। पहले भाग का मान ज्ञात कीजिए।

Options :

1. ✔ ₹ 1,965

2. ✘ ₹ 1,956

3. ✘ ₹ 1,966

4. ✘ ₹ 1,955

Question Number : 72 Question Id : 62728972 Display Question Number : Yes Single Line Question Option : No Option Orientation : Vertical

A flight has to travel between 2 cities 'X' and 'Y' that are 3,000 km apart. The flight was slowed down due to bad weather. Its average speed for the trip reduced by 200 kmph and the duration of the flight increased by 30 mins. The duration of the flight with the original speed would have been:

Options :

1. ✘ 1.5 hrs

2. ✘ 3 hrs

3. ✔ 2.5 hrs

4. ✘ 2.7 hrs

Question Number : 72 Question Id : 62728972 Display Question Number : Yes Single Line Question Option : No Option Orientation : Vertical

एक हवाई जहाज से 3,000 किमी की दूरी पर स्थित दो शहरों 'X' और 'Y' के बीच यात्रा की जाती है। खराब मौसम के कारण हवाई जहाज की गति धीमी कर दी जाती है। यात्रा की औसत गति में 200 किमी/घंटे की कमी हो गई और यात्रा के समय में 30 मिनट की वृद्धि हो गई। हवाई जहाज द्वारा उसकी मूल गति से यह दूरी तय करने में लगने वाला समय होगा:

Options :

1. ✘ 1.5 घंटे

2. ✘ 3 घंटे

3. ✔ 2.5 घंटे

4. ✘ 2.7 घंटे

Question Number : 73 Question Id : 62728973 Display Question Number : Yes Single Line Question Option : No Option Orientation : Vertical

'X' can finish a task in 15 days and 'Y' can finish the same task in 30 days. They both work together for 5 days and then 'Y' leaves. The number of days that 'X' will take to complete the remaining task is _____.
(Round to one decimal place)

Options :

1. ✘ 8 days

2. ✘ 7.8 days

3. ✘ 7 days

4. ✔ 7.5 days

Question Number : 73 Question Id : 62728973 Display Question Number : Yes Single Line Question Option : No Option Orientation : Vertical

'X' एक काम को 15 दिनों में समाप्त कर सकता है, और 'Y' उसी काम को 30 दिनों में समाप्त कर सकता है। यदि दोनों मिलकर 5 दिन काम करते हैं और उसके बाद 'Y' काम छोड़कर चला जाता है, तो 'X' द्वारा शेष कार्य को पूरा करने के लिए आवश्यक दिनों की संख्या कितनी है? (दशमलव के एक स्थान तक पूर्णांकित किया हुआ)

Options :

1. ✘ 8 दिन

2. ✘ 7.8 दिन

3. ✘ 7 दिन

4. ✔ 7.5 दिन

Question Number : 74 Question Id : 62728974 Display Question Number : Yes Single Line Question Option : No Option Orientation : Vertical

In a college laboratory, 2 beakers 'X' and 'Y' contain 63.5% and 85.5% of spirit respectively. Two litres of solution from beaker 'X' are mixed with 4 litres of solution in beaker 'Y'. The ratio of spirit and water in the resultant mixture is:

Options :

1. ✔ $\frac{469}{131}$ 2. ✘ $\frac{131}{469}$ 3. ✘ $\frac{135}{496}$ 4. ✘ $\frac{469}{135}$

Question Number : 74 Question Id : 62728974 Display Question Number : Yes Single Line Question Option : No Option Orientation : Vertical

एक कॉलेज की प्रयोगशाला में 2 बीकर 'X' और 'Y' में क्रमशः 63.5% व 85.5% स्पिरिट है। यदि बीकर 'X' के 2 लीटर विलयन को बीकर 'Y' के 4 लीटर विलयन में मिश्रित किया जाता है, तो परिणाम स्वरूप प्राप्त मिश्रण में स्पिरिट और पानी का अनुपात है:

Options :

1. ✔ $\frac{469}{131}$ 2. ✘ $\frac{131}{469}$ 3. ✘ $\frac{135}{496}$ 4. ✘ $\frac{469}{135}$

Question Number : 75 Question Id : 62728975 Display Question Number : Yes Single Line Question Option : No Option Orientation : Vertical

The marked price of a toy is ₹ 600. A person bought it after 2 successive discounts of 5% and 10%. He further sold the toy for ₹ 675. The profit percentage he obtained is _____. (Round to one decimal place)

Options :

1. ✓ 31.6%
2. ✗ 30.6%
3. ✗ 32%
4. ✗ 31.9%

Question Number : 75 Question Id : 62728975 Display Question Number : Yes Single Line Question Option : No Option Orientation : Vertical

एक खिलौने का अंकित मूल्य ₹ 600 है। एक व्यक्ति इसे 5% और 10% की 2 क्रमागत छूटों के बाद खरीदता है। फिर वह उसे ₹ 675 में बेच देता है। उसके द्वारा अर्जित लाभ प्रतिशत _____ है।
(दशमलव के एक स्थान तक पूर्णांकित किया हुआ)

Options :

1. ✓ 31.6%
2. ✗ 30.6%
3. ✗ 32%
4. ✗ 31.9%

Question Number : 76 Question Id : 62728976 Display Question Number : Yes Single Line Question Option : No Option Orientation : Vertical

A ball of 200 g is moving with a velocity of 5 m/s in a straight line. It is stopped by a force, acting against the direction of the motion of the ball, in 10 seconds. The magnitude of the force is:

Options :

1. ✓ 0.1 N
2. ✗ 0.2 N
3. ✗ 0.4 N
4. ✗ 4.0 N

Question Number : 76 Question Id : 62728976 Display Question Number : Yes Single Line Question Option : No Option Orientation : Vertical

200 ग्राम की एक गेंद 5 मीटर/सेकंड की गति से सीधी रेखा में गतिमान है। इसे गेंद के गतिमान होने की दिशा के विपरीत बल लगाकर 10 सेकंड में रोका जाता है। बल की मात्रा है:

Options :

1. ✓ 0.1 N (न्यूटन)
2. ✗ 0.2 N (न्यूटन)
3. ✗ 0.4 N (न्यूटन)
4. ✗ 4.0 N (न्यूटन)

Question Number : 77 Question Id : 62728977 Display Question Number : Yes Single Line Question Option : No Option Orientation : Vertical

A bullet of 0.01 kg moving horizontally with 72 m/s hits a 0.4 kg wooden block, which is initially at rest on a smooth frictionless horizontal table. The bullet does not come out of the block. The speed of the block after the collision is close to:

Options :

1. ✗ 0.9 m/s
2. ✓ 1.8 m/s
3. ✗ 9.0 m/s
4. ✗ 18 m/s

Question Number : 77 Question Id : 62728977 Display Question Number : Yes Single Line Question Option : No Option Orientation : Vertical

0.01 किग्रा की एक गोली क्षितिज के समानांतर दिशा में 72 मीटर/सेकंड की गति से 0.4 किलोग्राम के लकड़ी के ब्लॉक में लगती है जोकि एक घर्षणरहित सपाट क्षितिज मेज पर आरंभतः विश्राम अवस्था में है। गोली ब्लॉक से बाहर नहीं निकलती है। गोली से टकराने के बाद ब्लॉक की गति लगभग है:

Options :

1. ✗ 0.9 मीटर/सेकंड
2. ✓ 1.8 मीटर/सेकंड
3. ✗ 9.0 मीटर/सेकंड
4. ✗ 18 मीटर/सेकंड

Question Number : 78 Question Id : 62728978 Display Question Number : Yes Single Line Question Option : No Option Orientation : Vertical

The speed of a car of 1,200 kg is increased from 18 kmph to 36 kmph. The work done on the car (ignoring friction) is:

Options :

1. ✘ 3.0 kJ
2. ✘ 15 kJ
3. ✘ 30 kJ
4. ✔ 45 kJ

Question Number : 78 Question Id : 62728978 Display Question Number : Yes Single Line Question Option : No Option Orientation : Vertical

1,200 किलोग्राम की एक कार की गति को 18 किलोमीटर/घंटा से बढ़ाकर 36 किलोमीटर/घंटा किया जाता है। कार पर किया गया कार्य (घर्षण बल को नजरअंदाज करते हुए) है:

Options :

1. ✘ 3.0 किलो जूल
2. ✘ 15 किलो जूल
3. ✘ 30 किलो जूल
4. ✔ 45 किलो जूल

Question Number : 79 Question Id : 62728979 Display Question Number : Yes Single Line Question Option : No Option Orientation : Vertical

A ball of mass m falls from height h under gravity. Let V and K denote the potential and kinetic energy of the ball at a point at height x . When $x = h/4$, the ratio V/K is:

Options :

1. ✘ 1
2. ✘ 3
3. ✔ $\frac{1}{3}$
4. ✘ $\frac{1}{4}$

Question Number : 79 Question Id : 62728979 Display Question Number : Yes Single Line Question Option : No Option Orientation : Vertical

m द्रव्यमान की एक गेंद गुरुत्वाकर्षण बल के तहत h ऊंचाई से गिरती है। मान लीजिए x ऊंचाई पर V और K स्थितिज ऊर्जा और गतिज ऊर्जा के द्योतक हैं। जब $x = h/4$, तो V/K का अनुपात है:

Options :

1. ✘ 1

2. ✘ 3

3. ✔ $\frac{1}{3}$

4. ✘ $\frac{1}{4}$

Question Number : 80 Question Id : 62728980 Display Question Number : Yes Single Line Question Option : No Option Orientation : Vertical

Consider a planet 'X'. Its mass is $1/16$ times the mass of Earth and its diameter is half the diameter of Earth. The acceleration due to gravity near the surface of the planet 'X' is approximately:

Options :

1. ✘ 0.61 m/s^2

2. ✘ 1.23 m/s^2

3. ✔ 2.45 m/s^2

4. ✘ 4.90 m/s^2

Question Number : 80 Question Id : 62728980 Display Question Number : Yes Single Line Question Option : No Option Orientation : Vertical

मान लीजिए एक ग्रह 'X' है। इसका द्रव्यमान पृथ्वी के द्रव्यमान का $1/16$ गुणा है और इसका व्यास पृथ्वी के व्यास का आधा है। ग्रह 'X' की सतह के निकट गुरुत्वाकर्षण बल के कारण त्वरण लगभग है:

Options :

1. ✘ $0.61 \text{ मीटर/सेकंड}^2$

2. ✘ $1.23 \text{ मीटर/सेकंड}^2$

3. ✔ $2.45 \text{ मीटर/सेकंड}^2$

4. ✘ $4.90 \text{ मीटर/सेकंड}^2$

Question Number : 81 Question Id : 62728981 Display Question Number : Yes Single Line Question Option : No Option Orientation : Vertical

The colour of phenolphthalein in acidic medium is:

Options :

1. ✘ Yellow
2. ✘ Pink
3. ✔ Colourless
4. ✘ Blue

Question Number : 81 Question Id : 62728981 Display Question Number : Yes Single Line Question Option : No Option Orientation : Vertical

अम्लीय माध्यम में फीनॉलफथेलिन का रंग होता है:

Options :

1. ✘ पीला
2. ✘ गुलाबी
3. ✔ रंगहीन
4. ✘ नीला

Question Number : 82 Question Id : 62728982 Display Question Number : Yes Single Line Question Option : No Option Orientation : Vertical

The aqueous solution of the salt sodium acetate (CH_3COONa) is:

Options :

1. ✘ Acidic
2. ✔ Basic
3. ✘ Neutral
4. ✘ Amphoteric

Question Number : 82 Question Id : 62728982 Display Question Number : Yes Single Line Question Option : No Option Orientation : Vertical

सोडियम एसिटेट (CH_3COONa) लवण का जलीय विलयन होता है:

Options :

1. ✘ अम्लीय
2. ✔ क्षारीय
3. ✘ उदासीन
4. ✘ उभयधर्मी

Question Number : 83 Question Id : 62728983 Display Question Number : Yes Single Line Question Option : No Option Orientation : Vertical

Which one of the following metals cannot displace hydrogen from dilute hydrochloric acid?

Options :

1. ✘ Zinc
2. ✘ Magnesium
3. ✘ Lead
4. ✔ Copper

Question Number : 83 Question Id : 62728983 Display Question Number : Yes Single Line Question Option : No Option Orientation : Vertical

निम्नलिखित में से कौन सी धातु तनु हाइड्रोक्लोरिक अम्ल से हाइड्रोजन विस्थापित नहीं कर सकती?

Options :

1. ✘ जिंक
2. ✘ मैग्नीशियम
3. ✘ लेड
4. ✔ कॉपर

Question Number : 84 Question Id : 62728984 Display Question Number : Yes Single Line Question Option : No Option Orientation : Vertical

The type of chemical bond between metal atoms in a solid metal is:

Options :

1. ✘ Ionic bonding

2. ✘ Covalent bonding
3. ✘ Hydrogen bonding
4. ✔ Metallic bonding

Question Number : 84 Question Id : 62728984 Display Question Number : Yes Single Line Question Option : No Option Orientation : Vertical

किसी ठोस धातु में धातु परमाणुओं के बीच रासायनिक बंध इस प्रकार का होता है:

Options :

1. ✘ आयनिक बंध
2. ✘ सहसंयोजी बंध
3. ✘ हाइड्रोजन बंध
4. ✔ धात्विक बंध

Question Number : 85 Question Id : 62728985 Display Question Number : Yes Single Line Question Option : No Option Orientation : Vertical

Which one of the following is the mass of one mole of chlorine molecules?

Options :

1. ✔ 71 grams
2. ✘ 35.5 grams
3. ✘ 3.55 grams
4. ✘ 7.1 grams

Question Number : 85 Question Id : 62728985 Display Question Number : Yes Single Line Question Option : No Option Orientation : Vertical

निम्नलिखित में से क्लोरीन अणुओं के एक मोल का द्रव्यमान है?

Options :

1. ✔ 71 ग्राम
2. ✘ 35.5 ग्राम

3. ✘ 3.55 ग्राम

4. ✘ 7.1 ग्राम

Question Number : 86 Question Id : 62728986 Display Question Number : Yes Single Line Question Option : No Option Orientation : Vertical

Which of the following artists mastered and refined the art of playing the Mridangam?

Options :

1. ✔ Palghat Mani Iyer

2. ✘ Lalgudi G Jayaraman

3. ✘ Hariprasad Chaurasia

4. ✘ Brij Bhushan Kabra

Question Number : 86 Question Id : 62728986 Display Question Number : Yes Single Line Question Option : No Option Orientation : Vertical

निम्नलिखित में से किस कलाकार ने मृदंगम बजाने की कला में महारत हासिल की?

Options :

1. ✔ पालघाट मणि अय्यर

2. ✘ लालगुडी जी जयरामन

3. ✘ हरिप्रसाद चौरसिया

4. ✘ बृज भूषण काबरा

Question Number : 87 Question Id : 62728987 Display Question Number : Yes Single Line Question Option : No Option Orientation : Vertical

In which year did the Sepoy Mutiny, the First War of Independence, take place?

Options :

1. ✘ 1901

2. ✔ 1857

3. ✘ 1922

4. ✘ 1839

Question Number : 87 Question Id : 62728987 Display Question Number : Yes Single Line Question Option : No Option Orientation : Vertical

स्वतंत्रता का प्रथम युद्ध, जिसे 'सिपाही विद्रोह' के नाम से जाना जाता है, किस वर्ष हुआ था?

Options :

1. ✘ 1901

2. ✔ 1857

3. ✘ 1922

4. ✘ 1839

Question Number : 88 Question Id : 62728988 Display Question Number : Yes Single Line Question Option : No Option Orientation : Vertical

With which of the following countries does India NOT share its borders?

Options :

1. ✘ Myanmar

2. ✘ Bhutan

3. ✘ Bangladesh

4. ✔ Tajikistan

Question Number : 88 Question Id : 62728988 Display Question Number : Yes Single Line Question Option : No Option Orientation : Vertical

निम्नलिखित में से किस देश के साथ भारत की सीमा नहीं लगती है?

Options :

1. ✘ म्यांमार

2. ✘ भूटान

3. ✘ बांग्लादेश

4. ✔ ताजिकिस्तान

Question Number : 89 Question Id : 62728989 Display Question Number : Yes Single Line Question Option : No Option Orientation : Vertical

According to the Union Budget 2017-18, which of the following will be set up to provide one-stop convergent support services to empower rural women with opportunities for skill development, employment, digital literacy, health and nutrition?

Options :

1. ✘ Mahila Aarogya Kendra
2. ✘ Mahila Shiksha Kendra
3. ✔ Mahila Shakti Kendra
4. ✘ Mahila Vyavasay Kendra

Question Number : 89 Question Id : 62728989 Display Question Number : Yes Single Line Question Option : No Option Orientation : Vertical

केंद्रीय बजट 2017-18 के अनुसार ग्रामीण महिलाओं को कौशल विकास, रोज़गार, डिजिटल साक्षरता, स्वास्थ्य और पोषण के अवसर प्रदान करने के लिए निम्नलिखित में से किसे 'वन-स्टॉप' सामूहिक सहायता सेवा मंच के रूप में स्थापित किया जाएगा?

Options :

1. ✘ महिला आरोग्य केंद्र
2. ✘ महिला शिक्षा केंद्र
3. ✔ महिला शक्ति केंद्र
4. ✘ महिला व्यवसाय केंद्र

Question Number : 90 Question Id : 62728990 Display Question Number : Yes Single Line Question Option : No Option Orientation : Vertical

According to the Constitution (Forty-second Amendment) Act, 1976, 'SOVEREIGN SOCIALIST SECULAR DEMOCRATIC REPUBLIC' was substituted FOR:

Options :

1. ✘ SOCIALIST DEMOCRATIC REPUBLIC
2. ✔ SOVEREIGN DEMOCRATIC REPUBLIC
3. ✘ SOVEREIGN SECULAR REPUBLIC
4. ✘ SECULAR DEMOCRATIC REPUBLIC

Question Number : 90 Question Id : 62728990 Display Question Number : Yes Single Line Question Option : No Option Orientation : Vertical

संविधान (बयालीसवाँ संशोधन) अधिनियम, 1976 के अनुसार 'संपूर्ण प्रभुत्व-संपन्न समाजवादी पंथनिरपेक्ष लोकतंत्रात्मक गणराज्य' से किसे प्रतिस्थापित किया गया था?

Options :

1. ✘ समाजवादी लोकतंत्रात्मक गणराज्य
2. ✔ प्रभुत्व-संपन्न लोकतंत्रात्मक गणराज्य
3. ✘ प्रभुत्व-संपन्न पंथनिरपेक्ष गणराज्य
4. ✘ पंथनिरपेक्ष लोकतंत्रात्मक गणराज्य

Question Number : 91 Question Id : 62728991 Display Question Number : Yes Single Line Question Option : No Option Orientation : Vertical

Which of the following institution's researchers have created the first quantitative global map of water and its chemical building blocks trapped in the uppermost portion of the Moon's soil?

Options :

1. ✘ Stanford University
2. ✘ Duke University
3. ✔ Brown University
4. ✘ Yale University

Question Number : 91 Question Id : 62728991 Display Question Number : Yes Single Line Question Option : No Option Orientation : Vertical

निम्नलिखित में से किस संस्थान के शोधकर्ताओं ने चन्द्रमा की मिट्टी के सबसे ऊपरी भाग में फँसे जल और इसके रासायनिक निर्माण ब्लॉक का पहला व्यापक परिमाणात्मक मानचित्र बनाया है?

Options :

1. ✘ स्टैनफोर्ड विश्वविद्यालय
2. ✘ ड्यूक विश्वविद्यालय
3. ✔ ब्राउन विश्वविद्यालय
4. ✘ येल विश्वविद्यालय

Question Number : 92 Question Id : 62728992 Display Question Number : Yes Single Line Question Option : No Option Orientation : Vertical

Who won the Wimbledon Championship 2017 under the ladies singles category?

Options :

1. ✘ Venus Williams
2. ✔ Garbiñe Muguruza
3. ✘ Serena Williams
4. ✘ Maria Sharapova

Question Number : 92 Question Id : 62728992 Display Question Number : Yes Single Line Question Option : No Option Orientation : Vertical

महिला एकल श्रेणी के अंतर्गत 2017 की विंबलडन चैंपियनशिप किसने जीती थी?

Options :

1. ✘ वीनस विलियम्स
2. ✔ गरबीना मुगुरुज़ा
3. ✘ सेरेना विलियम्स
4. ✘ मारिया शारापोवा

Question Number : 93 Question Id : 62728993 Display Question Number : Yes Single Line Question Option : No Option Orientation : Vertical

Which of the following is Alexei Shirov associated with?

Options :

1. ✘ Cricket
2. ✔ Chess
3. ✘ Hockey
4. ✘ Lawn Tennis

Question Number : 93 Question Id : 62728993 Display Question Number : Yes Single Line Question Option : No Option Orientation : Vertical

एलेक्सी शिरोव निम्नलिखित में से किस खेल से संबंधित हैं?

Options :

1. ✘ क्रिकेट
2. ✔ शतरंज
3. ✘ हॉकी
4. ✘ लॉन टेनिस

Question Number : 94 Question Id : 62728994 Display Question Number : Yes Single Line Question Option : No Option Orientation : Vertical

In 2017, which of the following artists was awarded the Padma Bhushan?

Options :

1. ✔ Vishwa Mohan Bhatt
2. ✘ K J Yesudas
3. ✘ Sultan Khan
4. ✘ Parween Sultana

Question Number : 94 Question Id : 62728994 Display Question Number : Yes Single Line Question Option : No Option Orientation : Vertical

वर्ष 2017, में किस कलाकार को पद्म भूषण प्रदान किया गया था?

Options :

1. ✔ विश्व मोहन भट्ट
2. ✘ के जे येसुदास
3. ✘ सुल्तान खान
4. ✘ परवीन सुल्ताना

Question Number : 95 Question Id : 62728995 Display Question Number : Yes Single Line Question Option : No Option Orientation : Vertical

In Bharatnatyam, which of the following persons is the one who conducts the dance recitation?

Options :

1. ✘ Ilakiattam

2. ✓ Nattuvanar
3. ✗ Maharis
4. ✗ Kalaapam

Question Number : 95 Question Id : 62728995 Display Question Number : Yes Single Line Question Option : No Option Orientation : Vertical

भरतनाट्यम नृत्य प्रदर्शन का संचालन करने वाला व्यक्ति क्या कहलाता है?

Options :

1. ✗ इलकिअट्टम
2. ✓ नट्टुवनार
3. ✗ महारिस
4. ✗ कलापम

Question Number : 96 Question Id : 62728996 Display Question Number : Yes Single Line Question Option : No Option Orientation : Vertical

In a certain code, 'FLOWER' is written as ENNZDV. Find how is 'FOSTER' represented in that code?

Options :

1. ✓ EQRWDV
2. ✗ EQRDWW
3. ✗ EQWRDV
4. ✗ EQDRWW

Question Number : 96 Question Id : 62728996 Display Question Number : Yes Single Line Question Option : No Option Orientation : Vertical

एक कोड विशेष में 'FLOWER' को ENNZDV के रूप में लिखा जाता है। उसी कोड में 'FOSTER' को किस प्रकार लिखा जाएगा?

Options :

1. ✓ EQRWDV

2. ✘ EQRDWV

3. ✘ EQWRDV

4. ✘ EQDRWV

Question Number : 97 Question Id : 62728997 Display Question Number : Yes Single Line Question Option : No Option Orientation : Vertical

Complete the analogy.

Hand : Wrist : Watch :: _____

Options :

1. ✘ Neck : Head : Collar

2. ✘ Toe : Foot : Knee

3. ✔ Foot : Ankle : Anklet

4. ✘ Foot : Shoe : Toes

Question Number : 97 Question Id : 62728997 Display Question Number : Yes Single Line Question Option : No Option Orientation : Vertical

सादृश्य को पूरा करें।

हाथ : कलाई : घड़ी :: _____

Options :

1. ✘ गर्दन : सिर : कॉलर

2. ✘ पंजा : पैर : घुटना

3. ✔ पैर : टखना : पायल

4. ✘ पैर : जूता : पंजा

Question Number : 98 Question Id : 62728998 Display Question Number : Yes Single Line Question Option : No Option Orientation : Vertical

Select from the options the word that has a similar meaning as that of the words on the right and left side of the brackets.

FINAL (...) ULTIMATE

Options :

1. ✘ Dead
2. ✔ End
3. ✘ Finish
4. ✘ Commencing

Question Number : 98 Question Id : 62728998 Display Question Number : Yes Single Line Question Option : No Option Orientation : Vertical

विकल्पों में से उस शब्द का चयन करें जिसका अर्थ कोष्ठक के दाहिने और बाएँ शब्दों के अर्थ के समान हो।

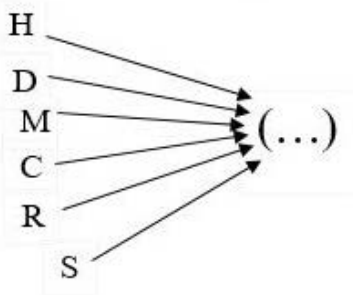
FINAL (...) ULTIMATE

Options :

1. ✘ Dead
2. ✔ End
3. ✘ Finish
4. ✘ Commencing

Question Number : 99 Question Id : 62728999 Display Question Number : Yes Single Line Question Option : No Option Orientation : Vertical

Which of the following options, when joined by each letter in the image as a prefix, forms a meaningful word?

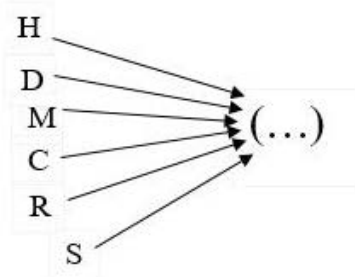


Options :

1. ✘ -ake
2. ✔ -ock
3. ✘ -are
4. ✘ -ome

Question Number : 99 Question Id : 62728999 Display Question Number : Yes Single Line Question Option : No Option Orientation : Vertical

निम्न में से कौन-सा ऐसा विकल्प है जिसमें एक उपसर्ग के रूप में जोड़े जाने पर चित्र में दिखाया गया प्रत्येक अक्षर एक सार्थक अंग्रेज़ी शब्द बनाता है?



Options :

1. ✘ -ake
2. ✔ -ock
3. ✘ -are
4. ✘ -ome

Question Number : 100 Question Id : 627289100 Display Question Number : Yes Single Line Question Option : No Option Orientation : Vertical

Select from the options the number that will fill in the blank in the below series:

5, 10, 15, 25, 40, _____, 105

Options :

1. ✘ 95
2. ✘ 90
3. ✘ 75
4. ✔ 65

Question Number : 100 Question Id : 627289100 Display Question Number : Yes Single Line Question Option : No Option Orientation : Vertical

दिए गए विकल्पों में से उस संख्या का चयन करें जो नीचे दी गई श्रृंखला में खाली जगह पर आएगी:

5, 10, 15, 25, 40, _____, 105

Options :

1. ✘ 95

2. ✘ 90

3. ✘ 75

4. ✔ 65